




Use the numberline to solve each problem. The first is marked for you.

**Answers**



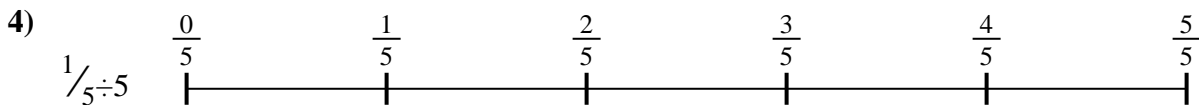
1. \_\_\_\_\_



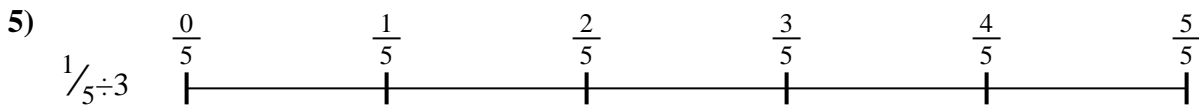
2. \_\_\_\_\_




3. \_\_\_\_\_



4. \_\_\_\_\_



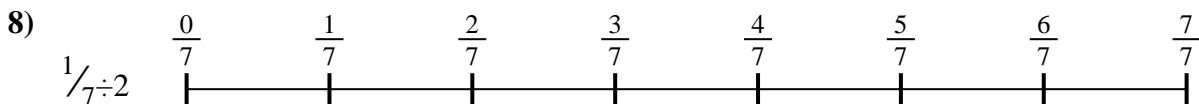
5. \_\_\_\_\_



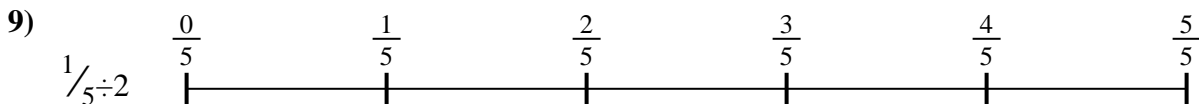
6. \_\_\_\_\_



7. \_\_\_\_\_



8. \_\_\_\_\_

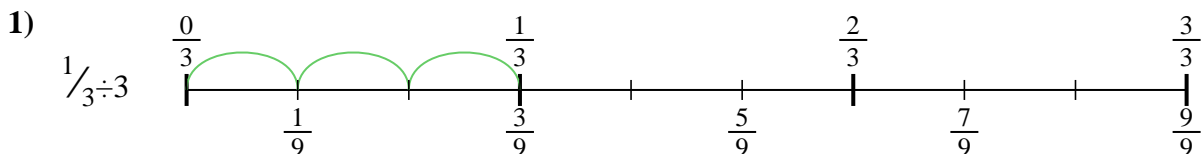


9. \_\_\_\_\_

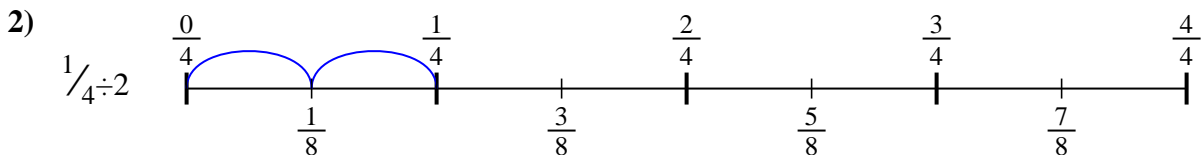


Use the numberline to solve each problem. The first is marked for you.

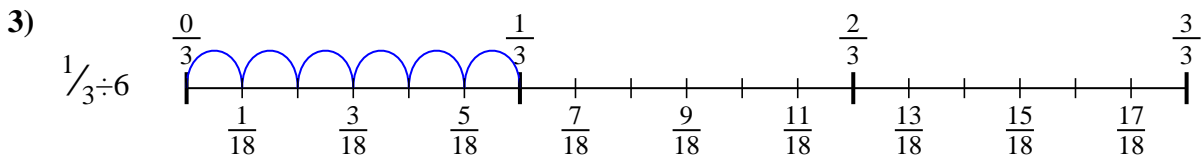
**Answers**



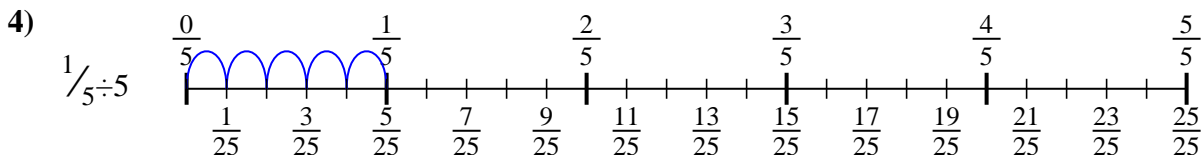
1.  $\frac{1}{9}$



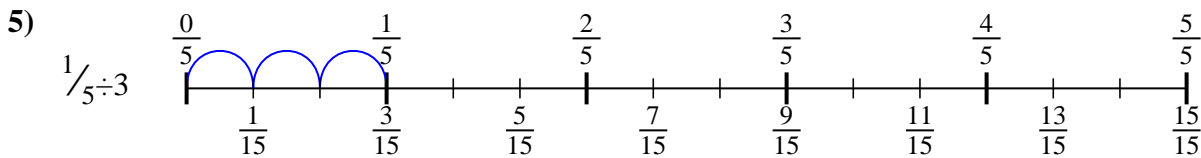
2.  $\frac{1}{8}$



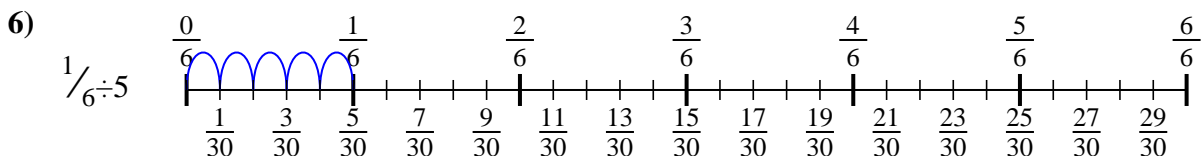
3.  $\frac{1}{18}$



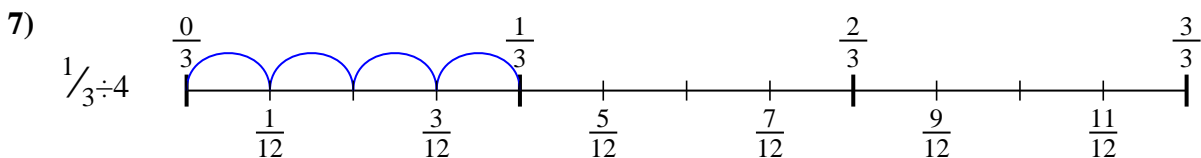
4.  $\frac{1}{25}$



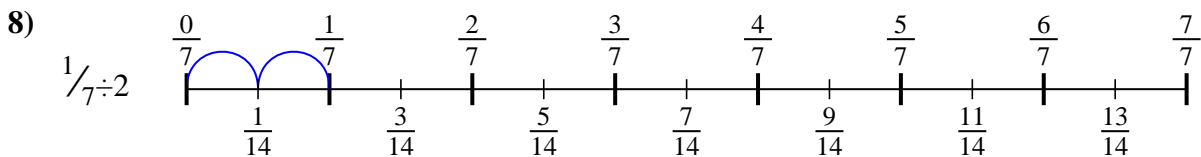
5.  $\frac{1}{15}$



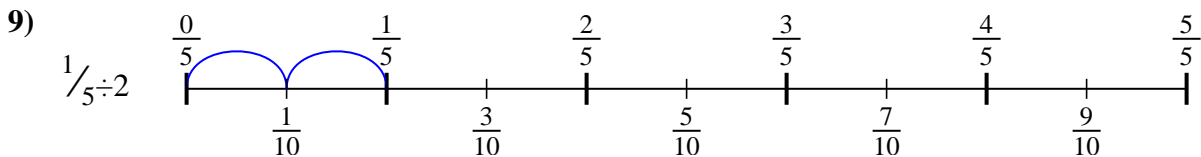
6.  $\frac{1}{30}$



7.  $\frac{1}{12}$



8.  $\frac{1}{14}$



9.  $\frac{1}{10}$



Use the numberline to solve each problem. The first is marked for you.

**Answers**

$\frac{1}{14}$

$\frac{1}{9}$

$\frac{1}{30}$

$\frac{1}{10}$

$\frac{1}{18}$

$\frac{1}{8}$

$\frac{1}{25}$

$\frac{1}{15}$

$\frac{1}{12}$

1. \_\_\_\_\_

2. \_\_\_\_\_

3. \_\_\_\_\_

4. \_\_\_\_\_

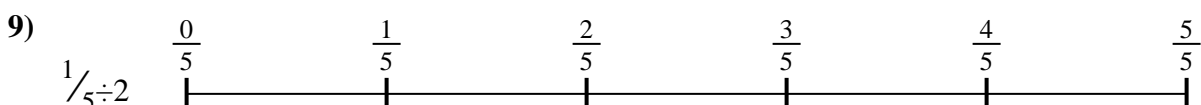
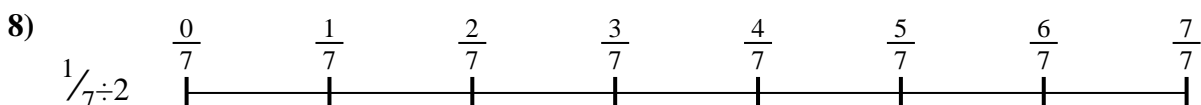


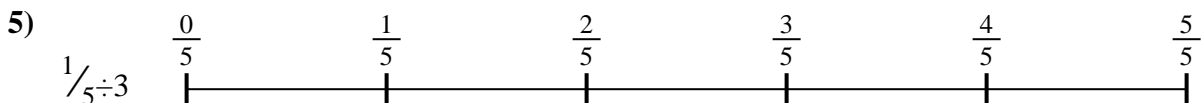
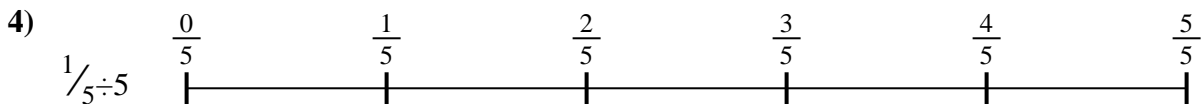

5. \_\_\_\_\_

6. \_\_\_\_\_

7. \_\_\_\_\_

8. \_\_\_\_\_

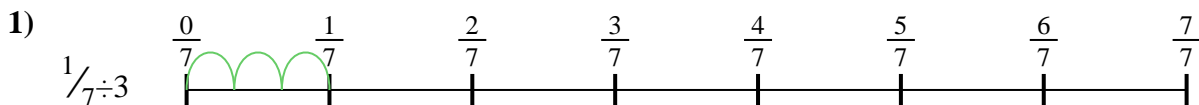
9. \_\_\_\_\_





Use the numberline to solve each problem. The first is marked for you.

**Answers**



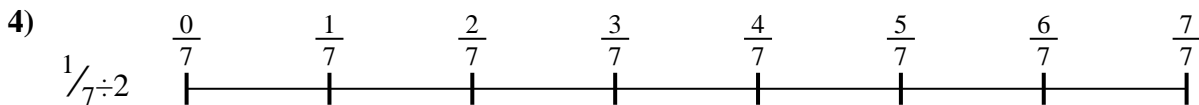
1. \_\_\_\_\_



2. \_\_\_\_\_




3. \_\_\_\_\_



4. \_\_\_\_\_




5. \_\_\_\_\_




6. \_\_\_\_\_



7. \_\_\_\_\_



8. \_\_\_\_\_

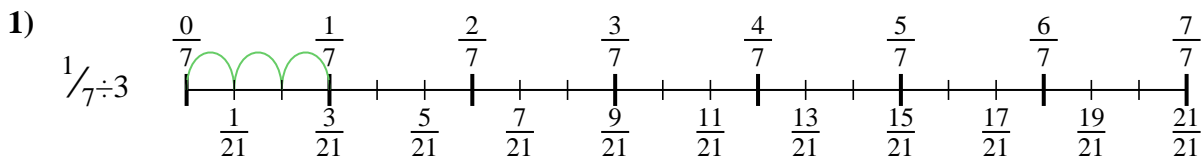


9. \_\_\_\_\_

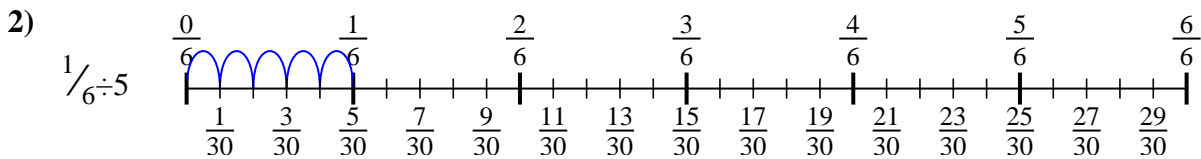


Use the numberline to solve each problem. The first is marked for you.

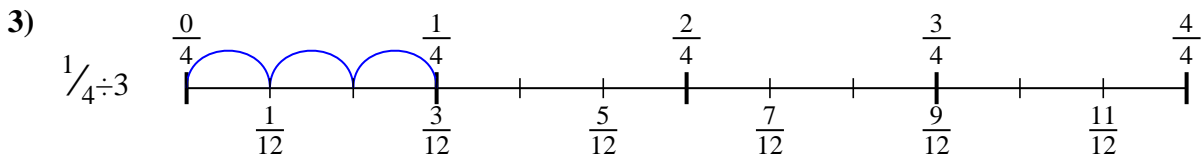
**Answers**



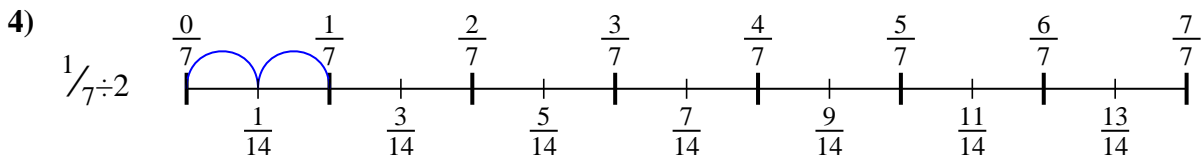
1.  $\frac{1}{21}$



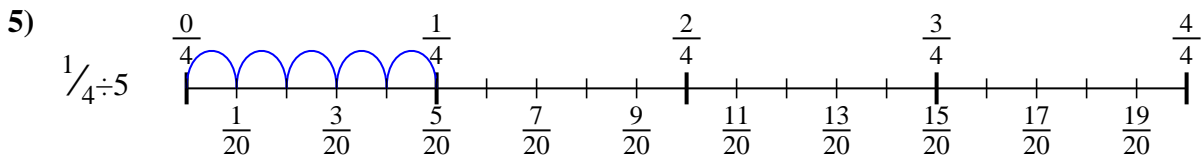
2.  $\frac{1}{30}$



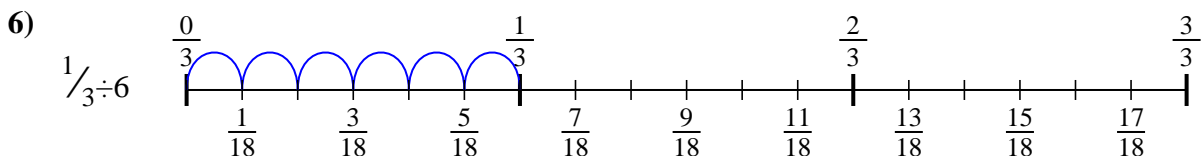
3.  $\frac{1}{12}$



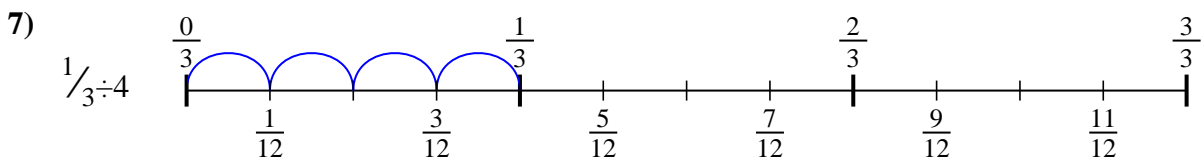
4.  $\frac{1}{14}$



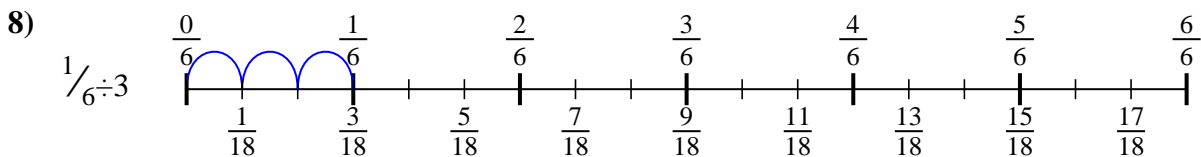
5.  $\frac{1}{20}$



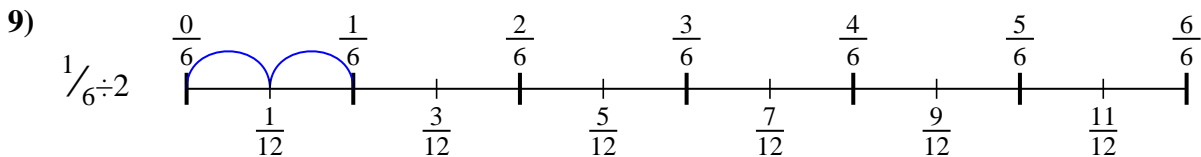
6.  $\frac{1}{18}$



7.  $\frac{1}{12}$



8.  $\frac{1}{18}$



9.  $\frac{1}{12}$



Use the numberline to solve each problem. The first is marked for you.

**Answers**

$\frac{1}{30}$

$\frac{1}{12}$

$\frac{1}{12}$

$\frac{1}{20}$


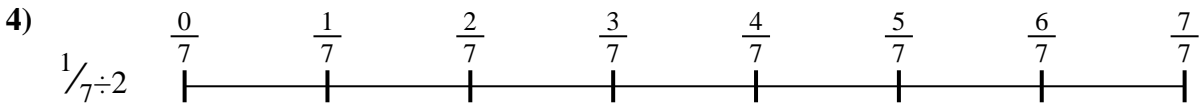

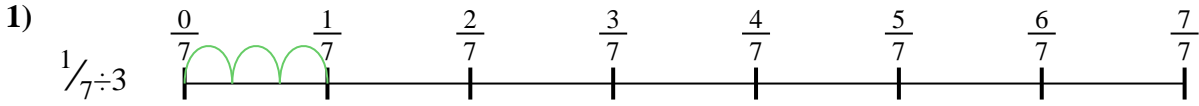
$\frac{1}{21}$

$\frac{1}{18}$

$\frac{1}{18}$

$\frac{1}{12}$

$\frac{1}{14}$

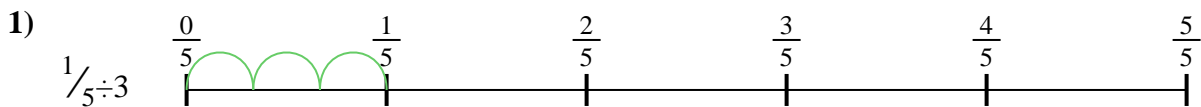


1. \_\_\_\_\_
2. \_\_\_\_\_
3. \_\_\_\_\_
4. \_\_\_\_\_
5. \_\_\_\_\_
6. \_\_\_\_\_
7. \_\_\_\_\_
8. \_\_\_\_\_
9. \_\_\_\_\_

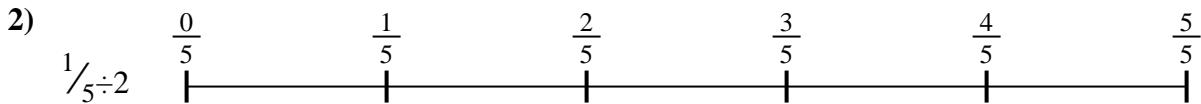


Use the numberline to solve each problem. The first is marked for you.

**Answers**



1. \_\_\_\_\_




2. \_\_\_\_\_



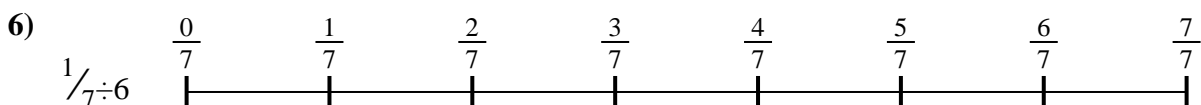
3. \_\_\_\_\_




4. \_\_\_\_\_




5. \_\_\_\_\_



6. \_\_\_\_\_



7. \_\_\_\_\_



8. \_\_\_\_\_

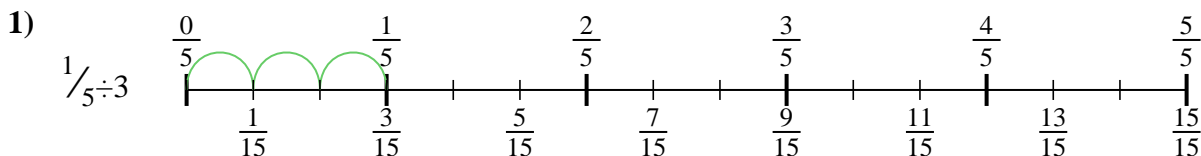


9. \_\_\_\_\_

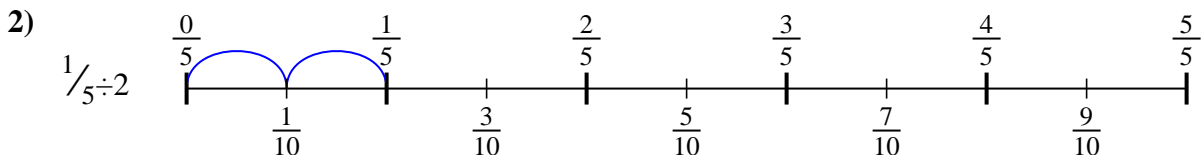


Use the numberline to solve each problem. The first is marked for you.

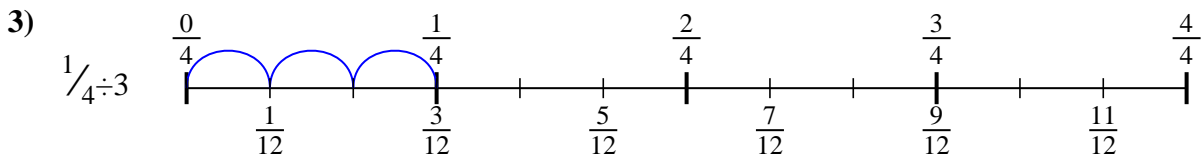
**Answers**



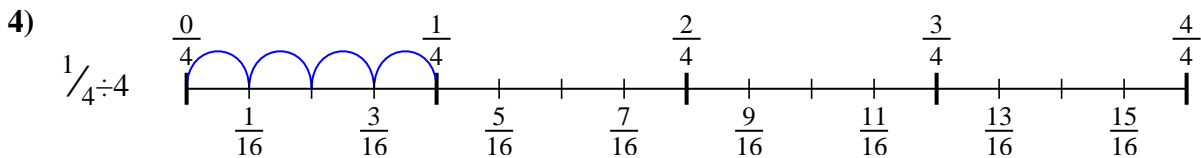
1.  $\frac{1}{15}$



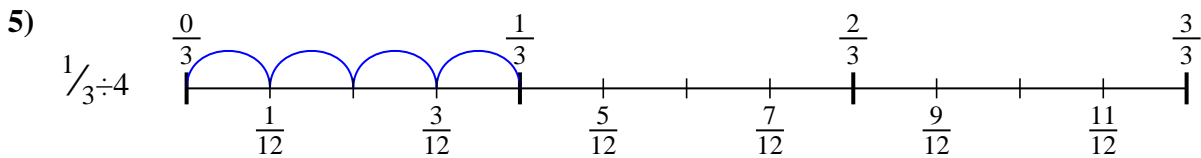
2.  $\frac{1}{10}$



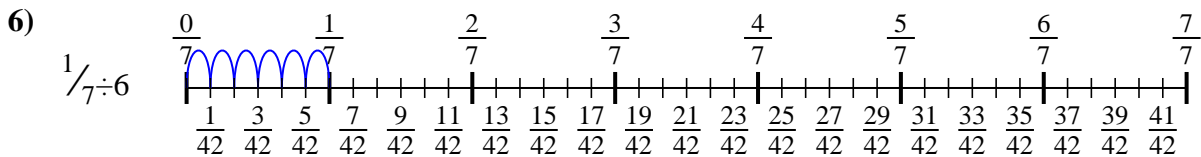
3.  $\frac{1}{12}$



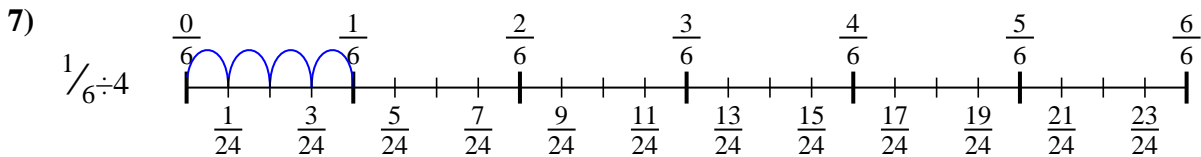
4.  $\frac{1}{16}$



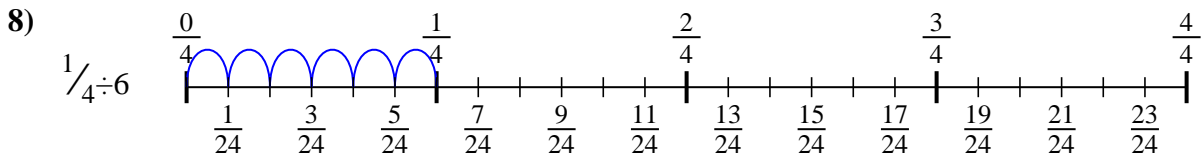
5.  $\frac{1}{12}$



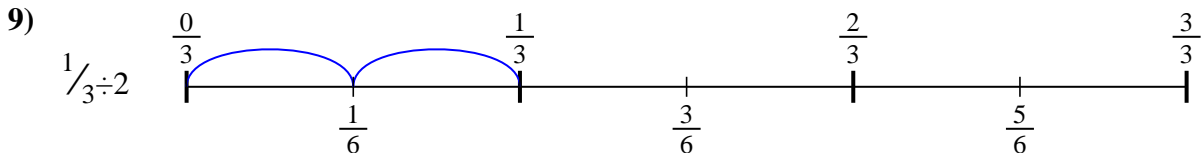
6.  $\frac{1}{42}$



7.  $\frac{1}{24}$



8.  $\frac{1}{24}$



9.  $\frac{1}{6}$





Use the numberline to solve each problem. The first is marked for you.

**Answers**

$\frac{1}{16}$

$\frac{1}{15}$

$\frac{1}{12}$

$\frac{1}{42}$

$\frac{1}{12}$

$\frac{1}{10}$

$\frac{1}{24}$

$\frac{1}{6}$

$\frac{1}{24}$

1. \_\_\_\_\_

2. \_\_\_\_\_

3. \_\_\_\_\_

4. \_\_\_\_\_

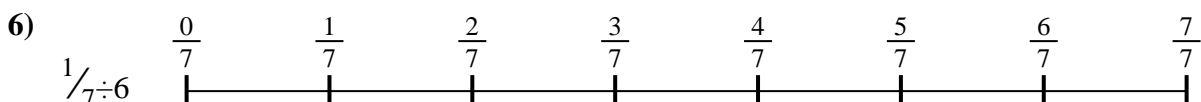


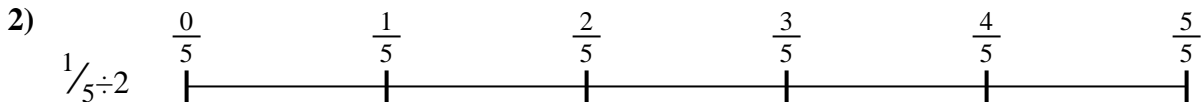
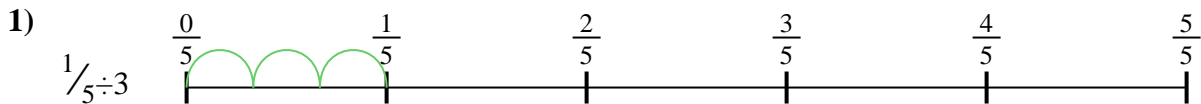
5. \_\_\_\_\_

6. \_\_\_\_\_

7. \_\_\_\_\_

8. \_\_\_\_\_


9. \_\_\_\_\_





Use the numberline to solve each problem. The first is marked for you.

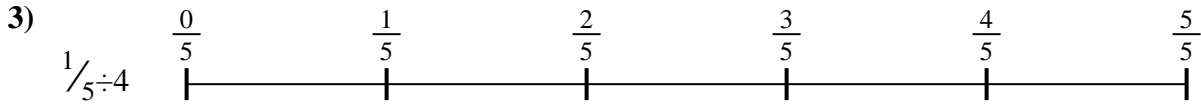
**Answers**



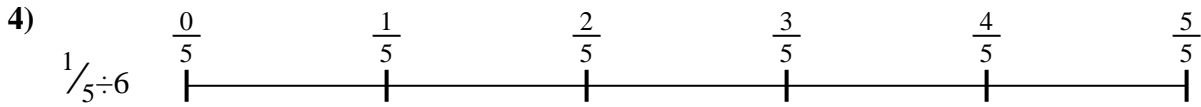
1. \_\_\_\_\_




2. \_\_\_\_\_



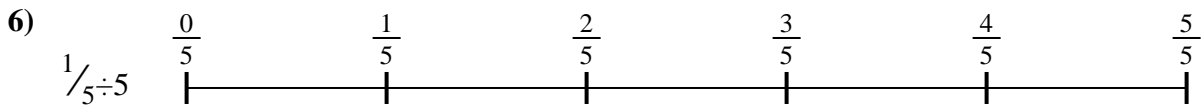
3. \_\_\_\_\_




4. \_\_\_\_\_



5. \_\_\_\_\_




6. \_\_\_\_\_



7. \_\_\_\_\_



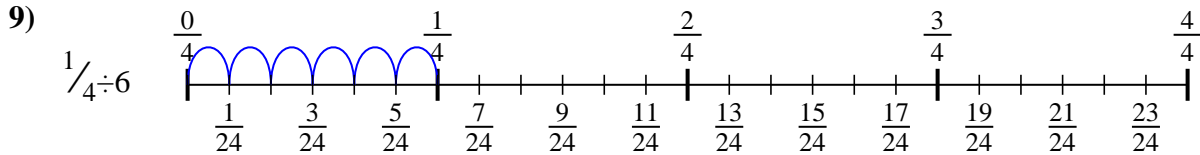
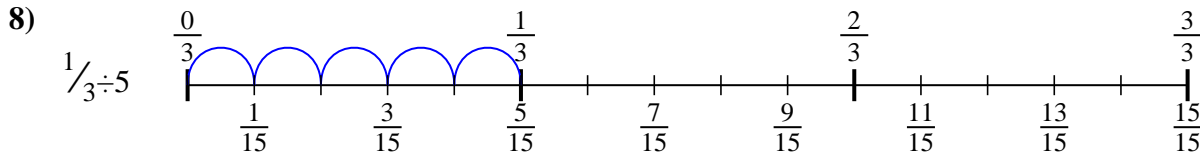
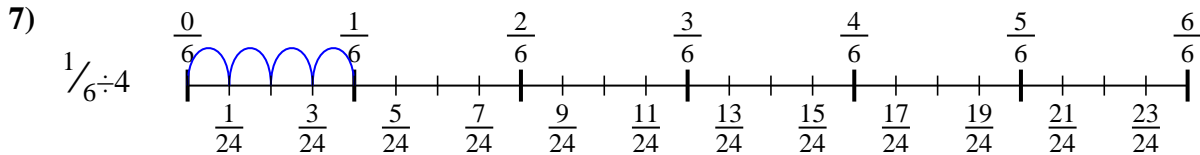
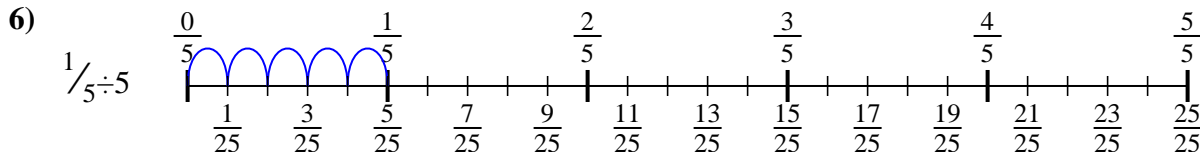
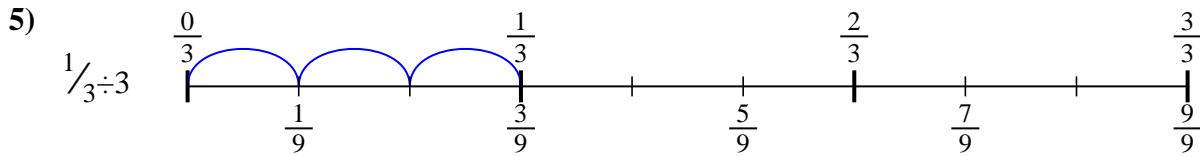
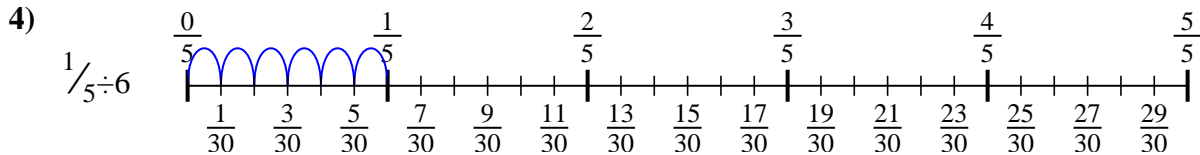
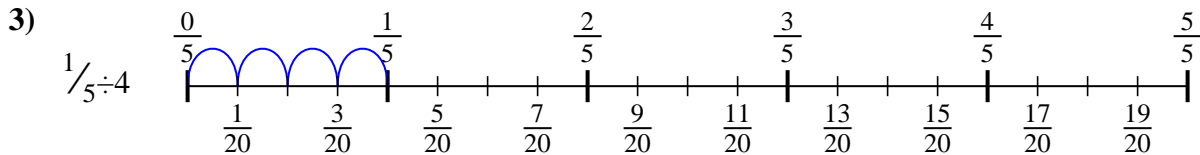
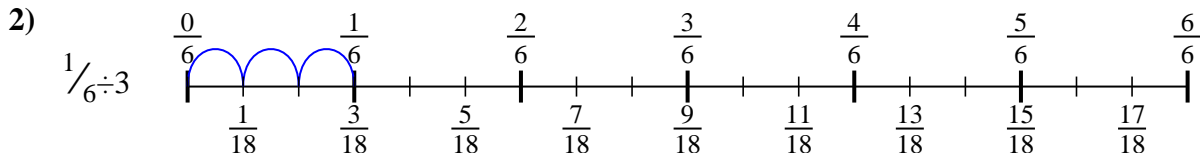
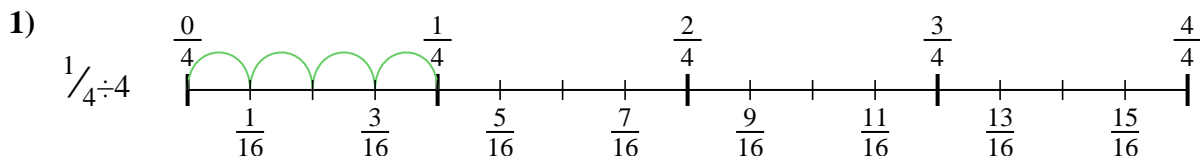
8. \_\_\_\_\_



9. \_\_\_\_\_



Use the numberline to solve each problem. The first is marked for you.



**Answers**

1.  $\frac{1}{16}$

2.  $\frac{1}{18}$

3.  $\frac{1}{20}$

4.  $\frac{1}{30}$

5.  $\frac{1}{9}$

6.  $\frac{1}{25}$

7.  $\frac{1}{24}$

8.  $\frac{1}{15}$

9.  $\frac{1}{24}$



Use the numberline to solve each problem. The first is marked for you.

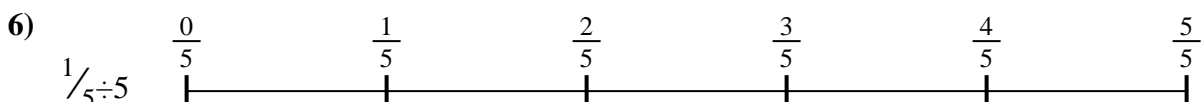

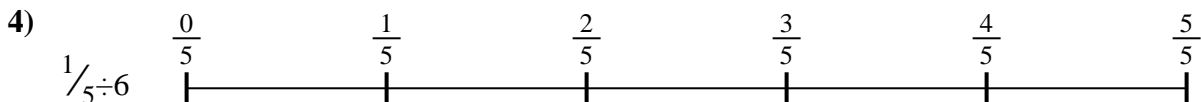
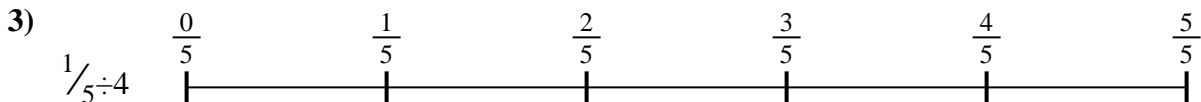
**Answers**

$\frac{1}{30}$   
 $\frac{1}{25}$   
 $\frac{1}{15}$

$\frac{1}{9}$   
 $\frac{1}{24}$

$\frac{1}{20}$   
 $\frac{1}{18}$

$\frac{1}{24}$   
 $\frac{1}{16}$



1. \_\_\_\_\_

2. \_\_\_\_\_

3. \_\_\_\_\_

4. \_\_\_\_\_

5. \_\_\_\_\_

6. \_\_\_\_\_

7. \_\_\_\_\_

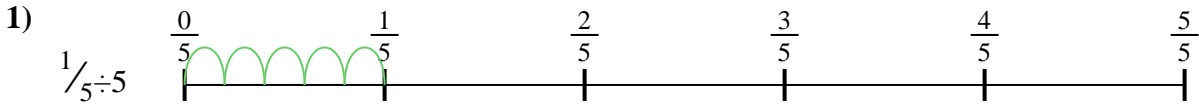
8. \_\_\_\_\_

9. \_\_\_\_\_

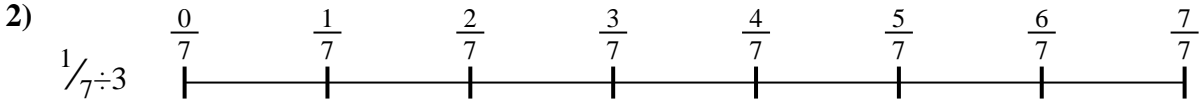


Use the numberline to solve each problem. The first is marked for you.

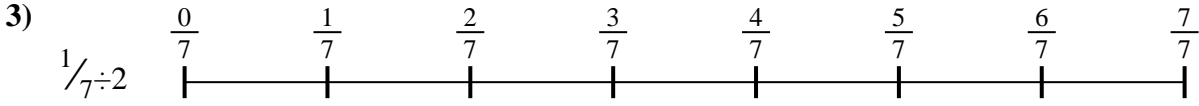
**Answers**



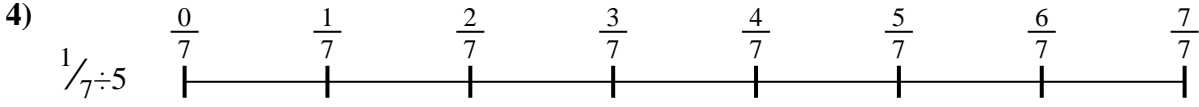
1. \_\_\_\_\_



2. \_\_\_\_\_




3. \_\_\_\_\_




4. \_\_\_\_\_




5. \_\_\_\_\_



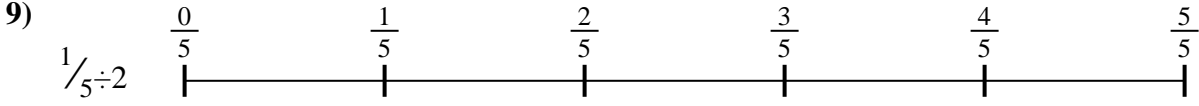
6. \_\_\_\_\_



7. \_\_\_\_\_



8. \_\_\_\_\_

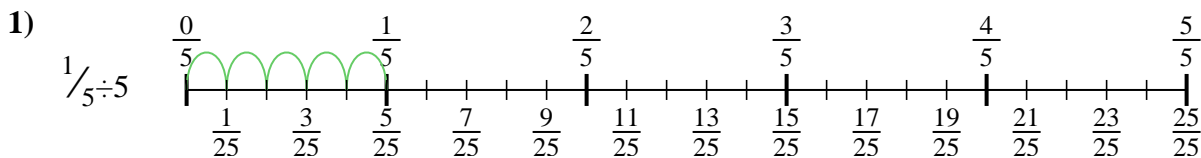


9. \_\_\_\_\_

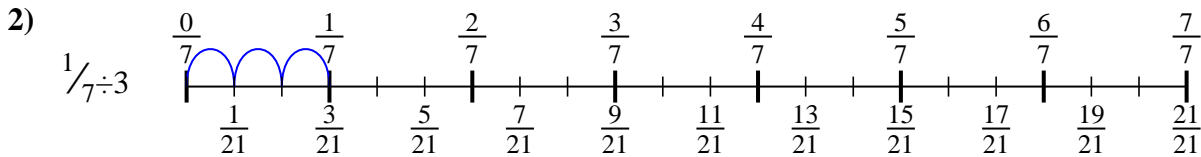


Use the numberline to solve each problem. The first is marked for you.

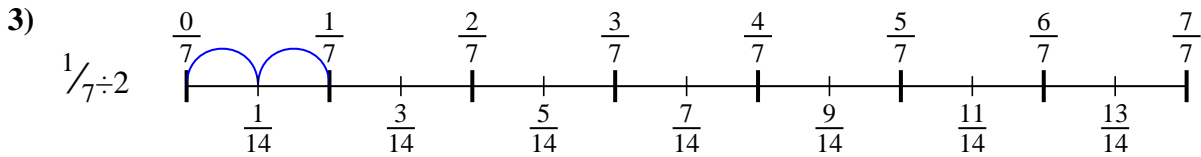
**Answers**



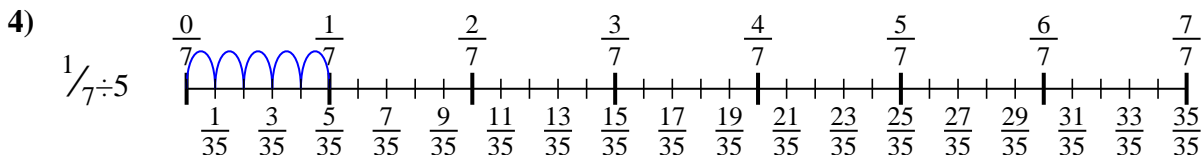
1.  $\frac{1}{25}$



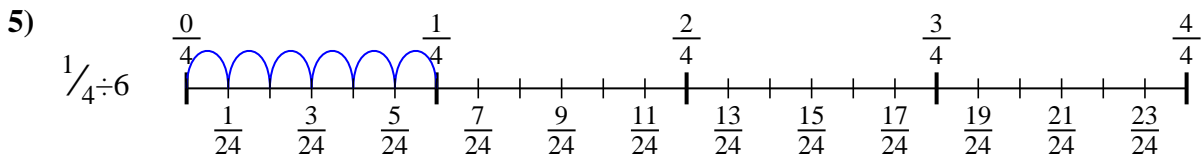
2.  $\frac{1}{21}$



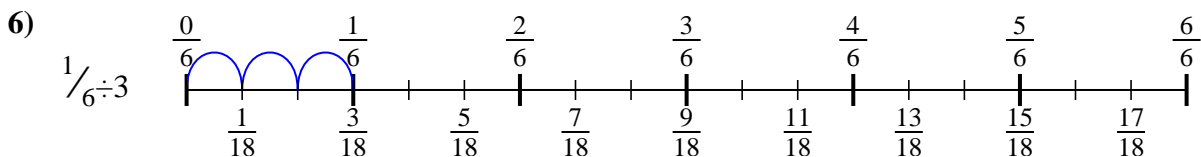
3.  $\frac{1}{14}$



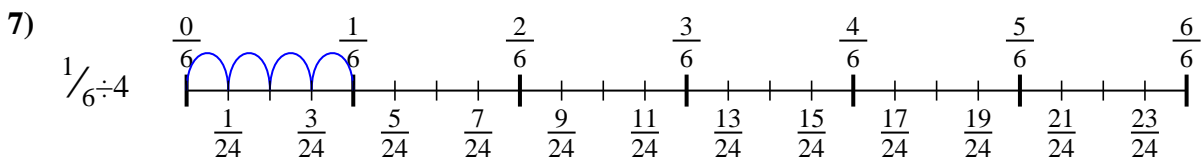
4.  $\frac{1}{35}$



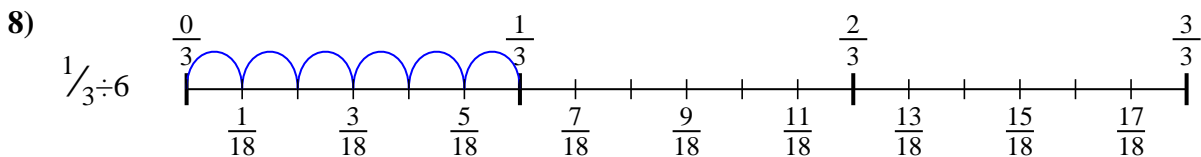
5.  $\frac{1}{24}$



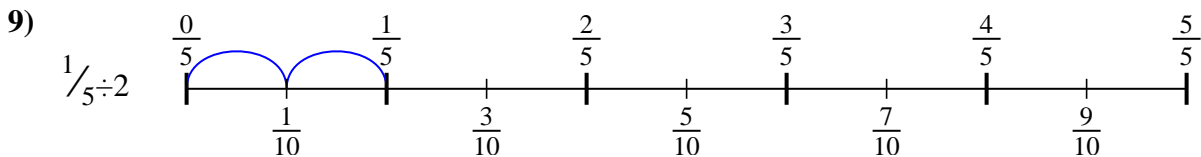
6.  $\frac{1}{18}$



7.  $\frac{1}{24}$



8.  $\frac{1}{18}$



9.  $\frac{1}{10}$



Use the numberline to solve each problem. The first is marked for you.

**Answers**

$\frac{1}{18}$

$\frac{1}{35}$

$\frac{1}{18}$

$\frac{1}{21}$

$\frac{1}{24}$

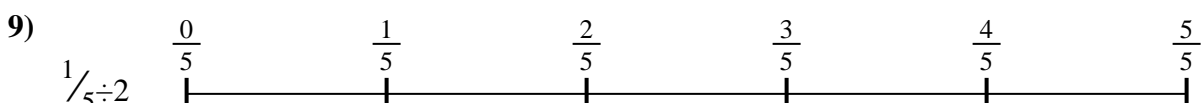

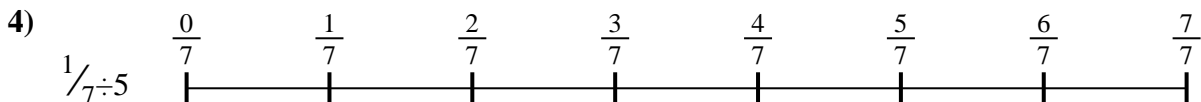
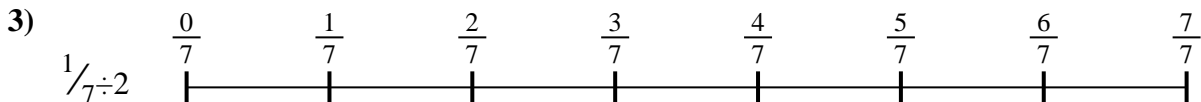
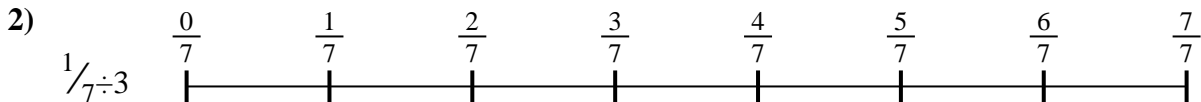
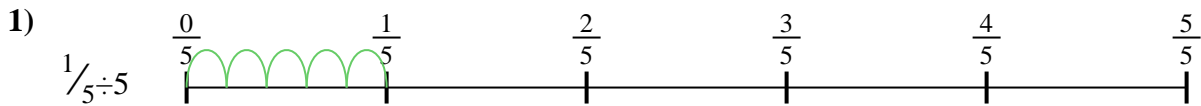
$\frac{1}{14}$

$\frac{1}{10}$

$\frac{1}{25}$

$\frac{1}{24}$


1. \_\_\_\_\_
2. \_\_\_\_\_
3. \_\_\_\_\_
4. \_\_\_\_\_
5. \_\_\_\_\_
6. \_\_\_\_\_
7. \_\_\_\_\_
8. \_\_\_\_\_
9. \_\_\_\_\_



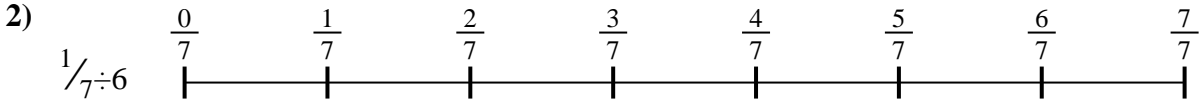


Use the numberline to solve each problem. The first is marked for you.

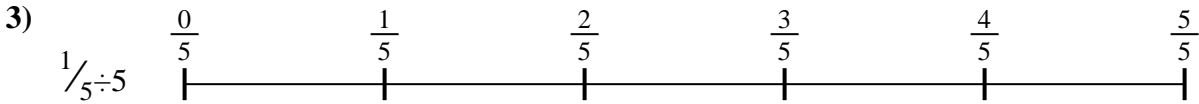
**Answers**




1. \_\_\_\_\_



2. \_\_\_\_\_



3. \_\_\_\_\_



4. \_\_\_\_\_



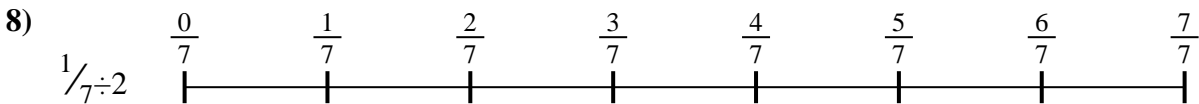
5. \_\_\_\_\_



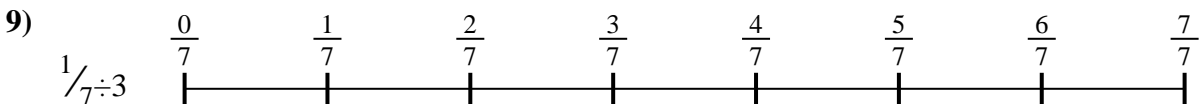
6. \_\_\_\_\_



7. \_\_\_\_\_



8. \_\_\_\_\_



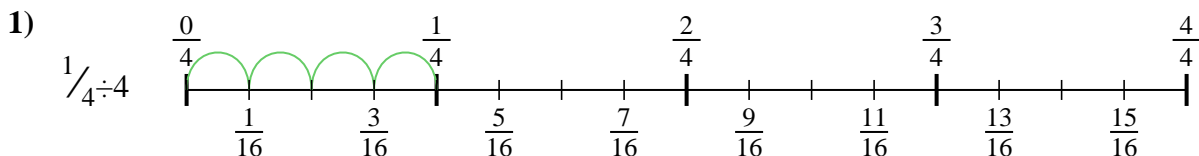
9. \_\_\_\_\_



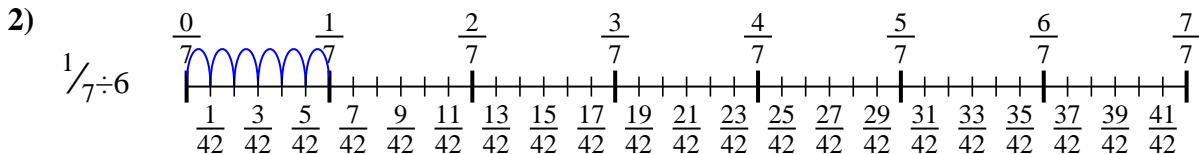


Use the numberline to solve each problem. The first is marked for you.

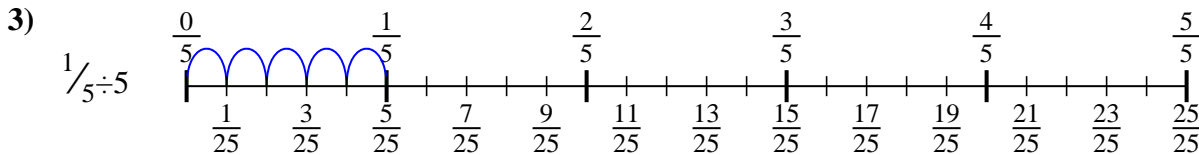
**Answers**



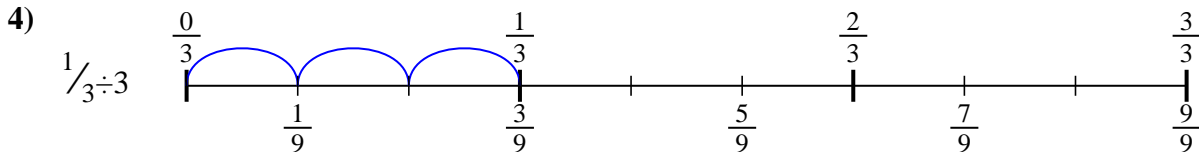
1.  $\frac{1}{16}$



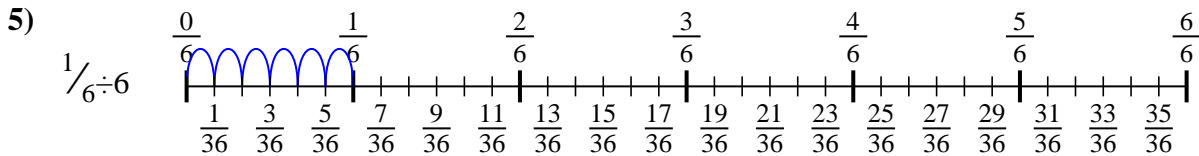
2.  $\frac{1}{42}$



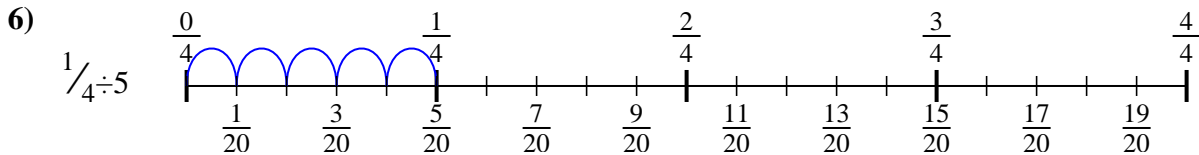
3.  $\frac{1}{25}$



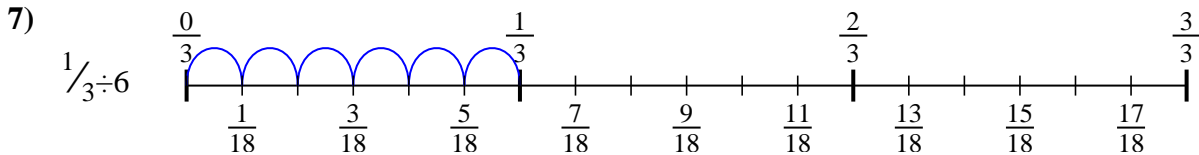
4.  $\frac{1}{9}$



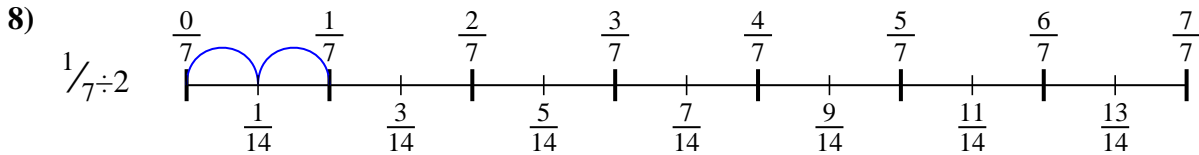
5.  $\frac{1}{36}$



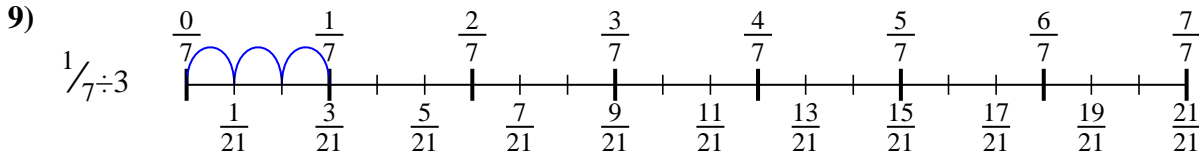
6.  $\frac{1}{20}$



7.  $\frac{1}{18}$



8.  $\frac{1}{14}$



9.  $\frac{1}{21}$



Use the numberline to solve each problem. The first is marked for you.

**Answers**

$\frac{1}{42}$

$\frac{1}{20}$

$\frac{1}{14}$

$\frac{1}{21}$

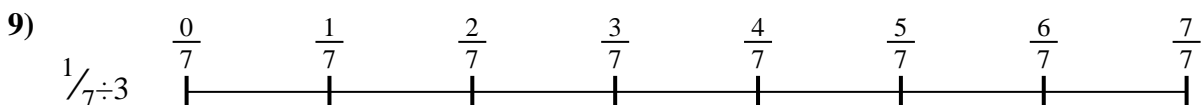
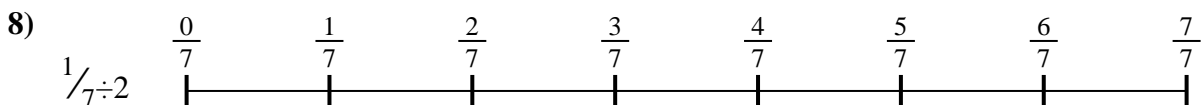


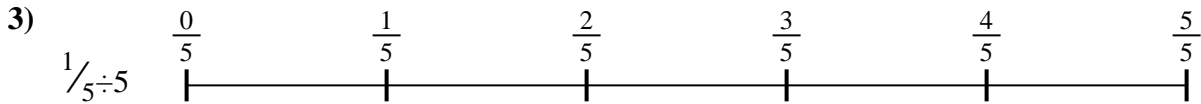
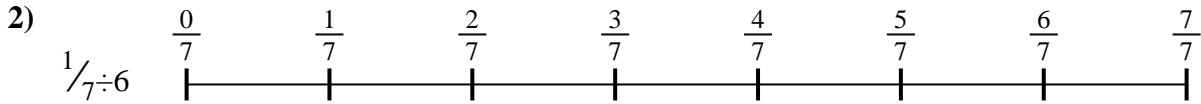
$\frac{1}{36}$

$\frac{1}{25}$

$\frac{1}{16}$

$\frac{1}{9}$

$\frac{1}{18}$




1. \_\_\_\_\_
2. \_\_\_\_\_
3. \_\_\_\_\_
4. \_\_\_\_\_
5. \_\_\_\_\_
6. \_\_\_\_\_
7. \_\_\_\_\_
8. \_\_\_\_\_
9. \_\_\_\_\_

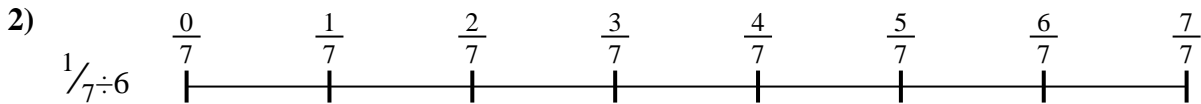


Use the numberline to solve each problem. The first is marked for you.

**Answers**



1. \_\_\_\_\_



2. \_\_\_\_\_



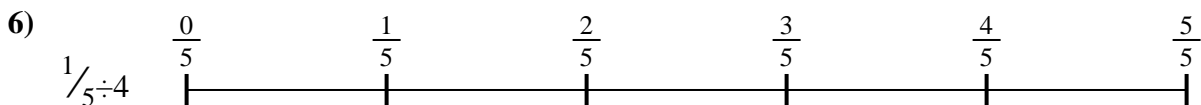
3. \_\_\_\_\_



4. \_\_\_\_\_



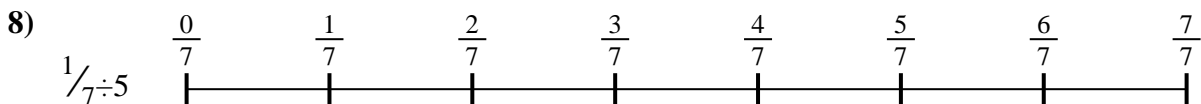
5. \_\_\_\_\_




6. \_\_\_\_\_



7. \_\_\_\_\_



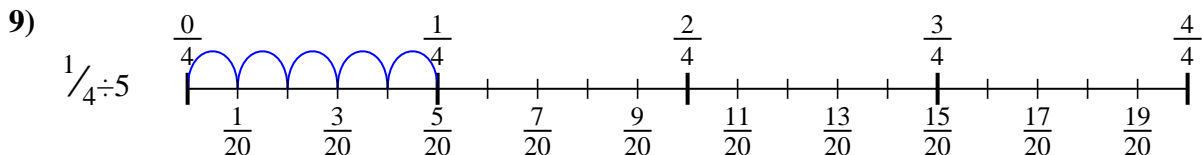
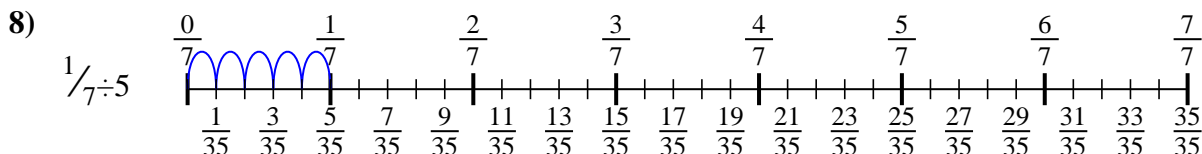
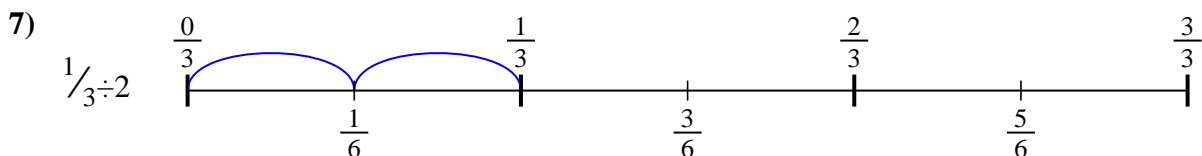
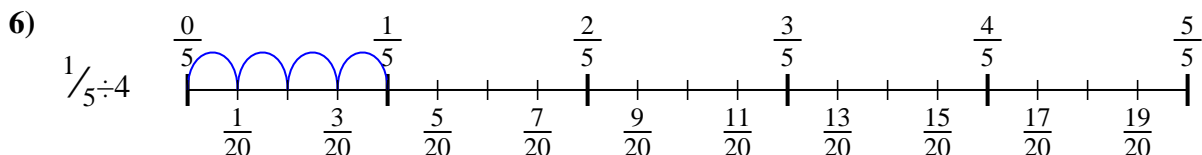
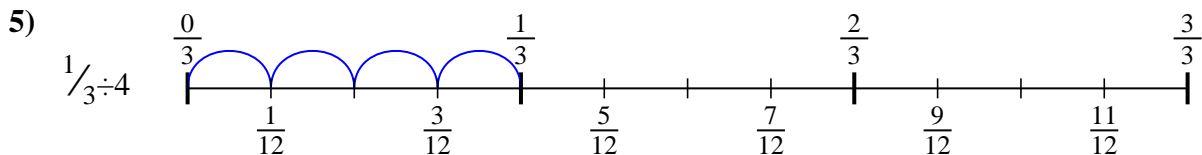
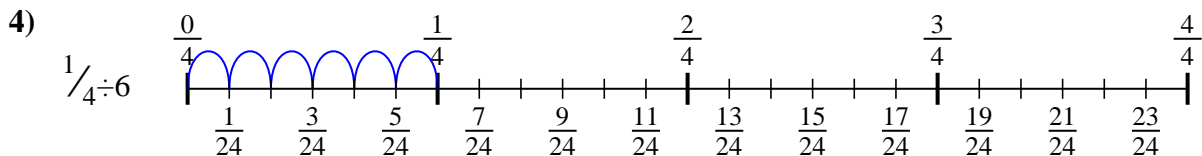
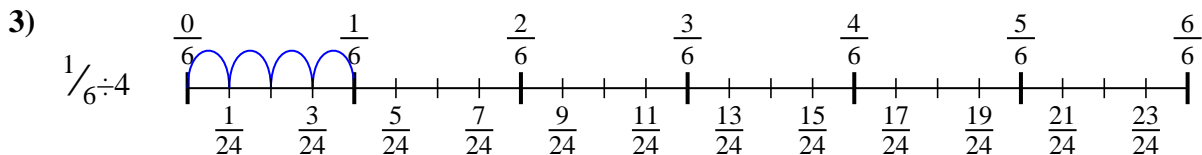
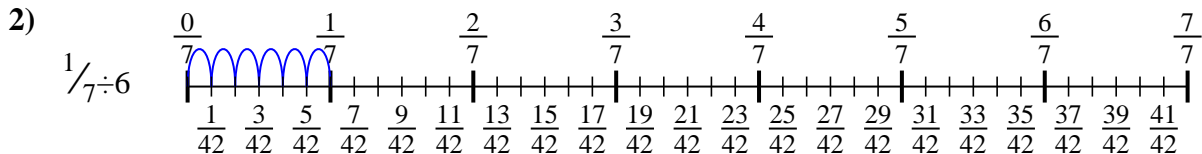
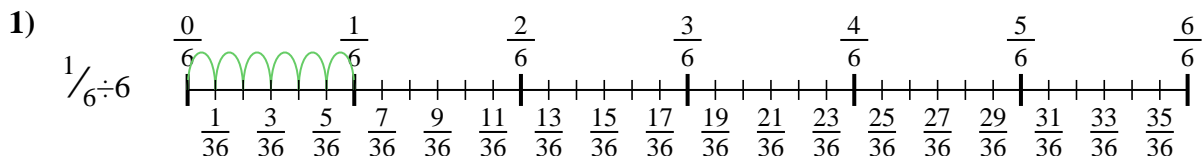
8. \_\_\_\_\_



9. \_\_\_\_\_



Use the numberline to solve each problem. The first is marked for you.



**Answers**

1.  $\frac{1}{36}$

2.  $\frac{1}{42}$

3.  $\frac{1}{24}$

4.  $\frac{1}{24}$

5.  $\frac{1}{12}$

6.  $\frac{1}{20}$

7.  $\frac{1}{6}$

8.  $\frac{1}{35}$

9.  $\frac{1}{20}$



Use the numberline to solve each problem. The first is marked for you.

**Answers**

$\frac{1}{35}$

$\frac{1}{6}$

$\frac{1}{24}$

$\frac{1}{42}$

$\frac{1}{24}$

$\frac{1}{36}$

$\frac{1}{20}$

$\frac{1}{20}$

$\frac{1}{12}$

1. \_\_\_\_\_

2. \_\_\_\_\_

3. \_\_\_\_\_

4. \_\_\_\_\_


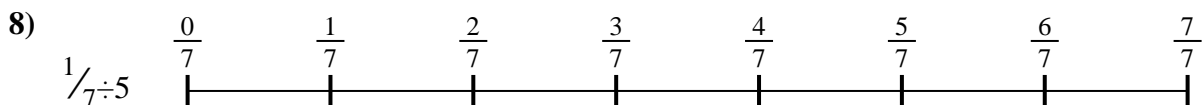

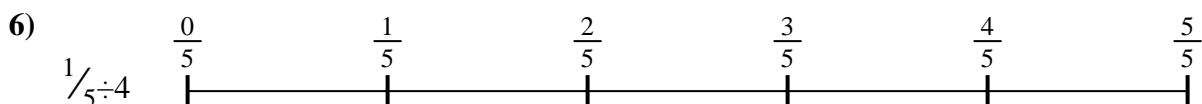

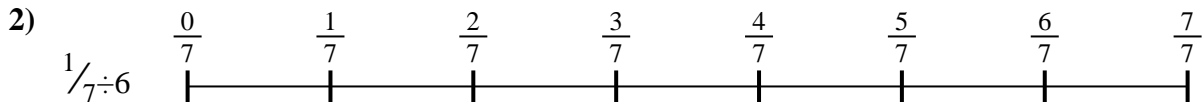
5. \_\_\_\_\_

6. \_\_\_\_\_

7. \_\_\_\_\_

8. \_\_\_\_\_


9. \_\_\_\_\_



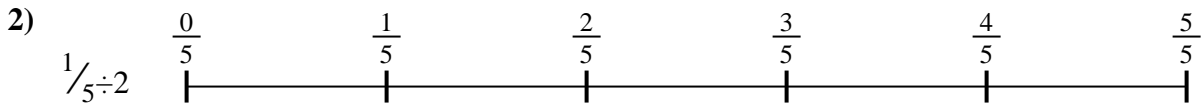


Use the numberline to solve each problem. The first is marked for you.

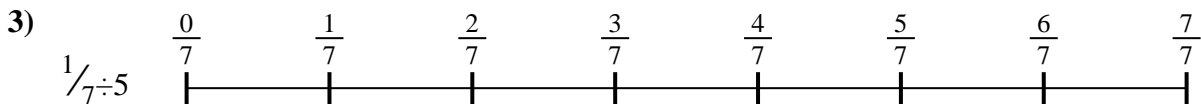
**Answers**



1. \_\_\_\_\_



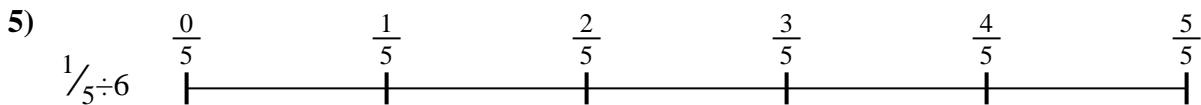
2. \_\_\_\_\_




3. \_\_\_\_\_



4. \_\_\_\_\_




5. \_\_\_\_\_



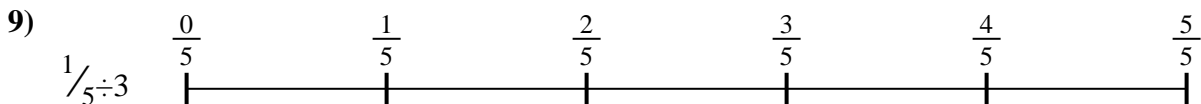
6. \_\_\_\_\_



7. \_\_\_\_\_



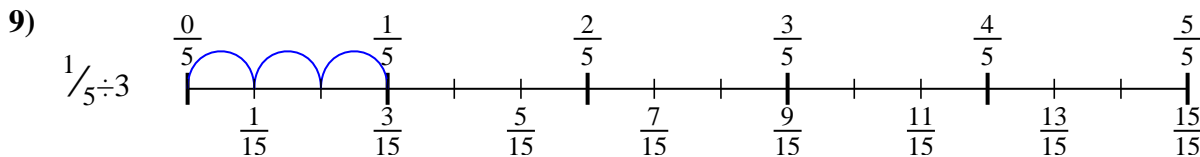
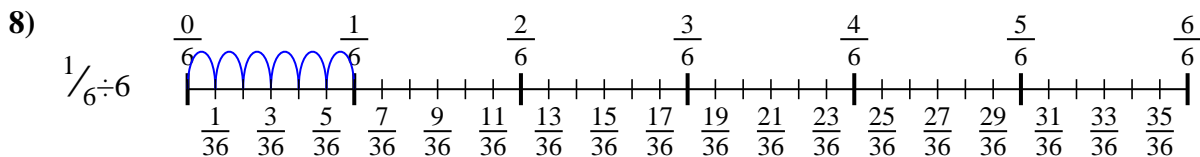
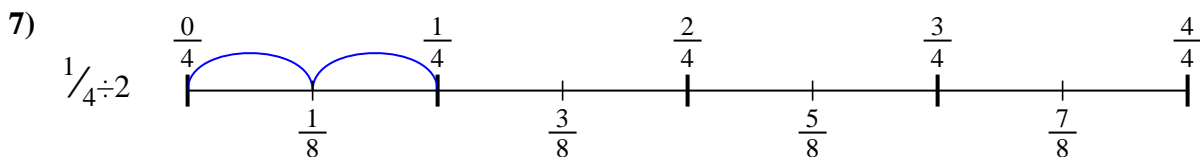
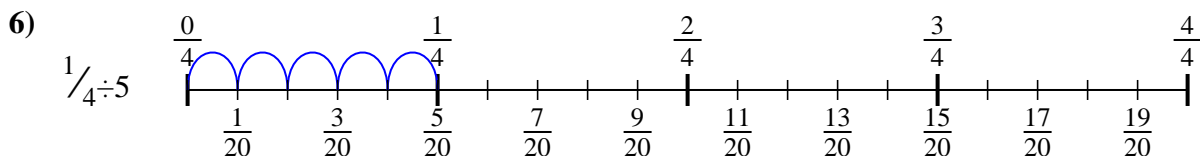
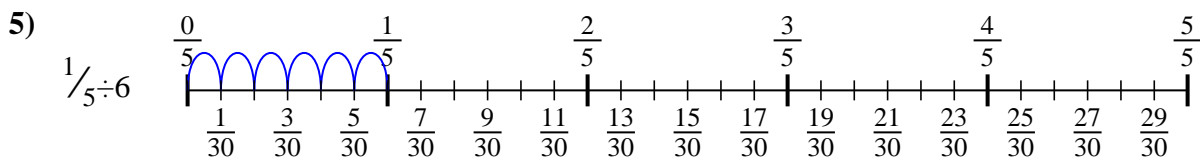
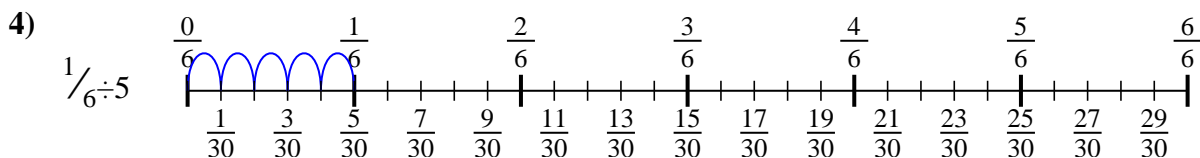
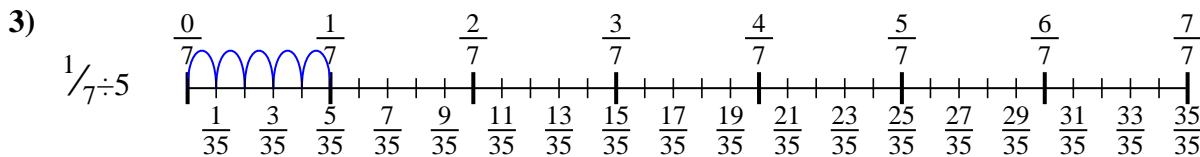
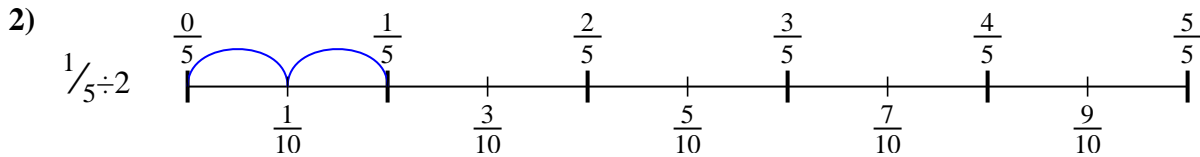
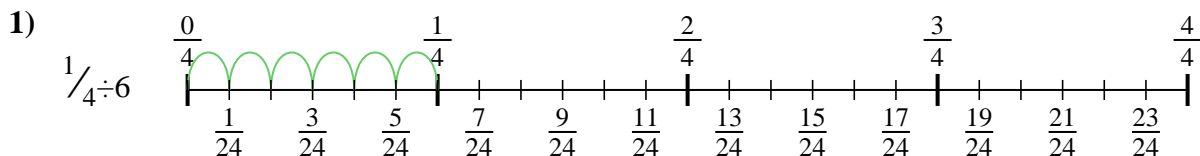
8. \_\_\_\_\_



9. \_\_\_\_\_



Use the numberline to solve each problem. The first is marked for you.



**Answers**

1.  $\frac{1}{24}$

2.  $\frac{1}{10}$

3.  $\frac{1}{35}$

4.  $\frac{1}{30}$

5.  $\frac{1}{30}$

6.  $\frac{1}{20}$

7.  $\frac{1}{8}$

8.  $\frac{1}{36}$

9.  $\frac{1}{15}$



Use the numberline to solve each problem. The first is marked for you.

**Answers**

$\frac{1}{30}$

$\frac{1}{36}$

$\frac{1}{20}$

$\frac{1}{8}$

$\frac{1}{15}$

$\frac{1}{24}$

$\frac{1}{30}$

$\frac{1}{35}$

$\frac{1}{10}$

1. \_\_\_\_\_

2. \_\_\_\_\_

3. \_\_\_\_\_

4. \_\_\_\_\_

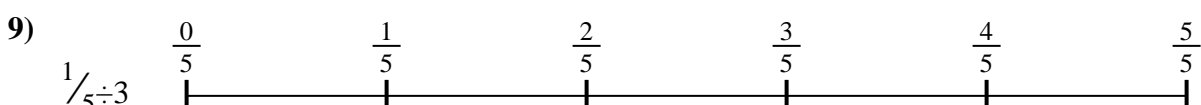

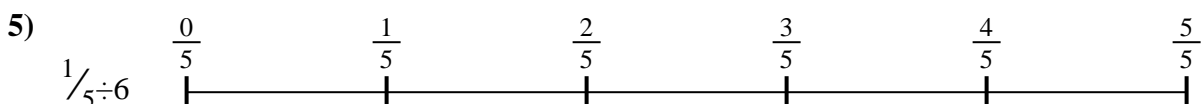
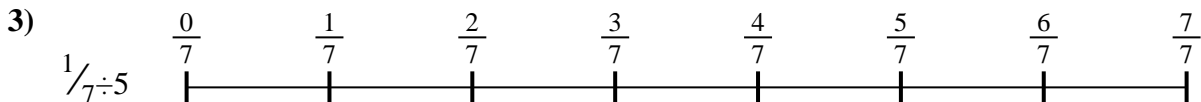
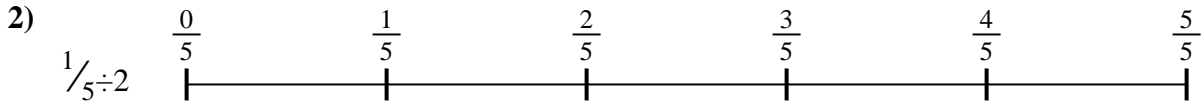

5. \_\_\_\_\_

6. \_\_\_\_\_

7. \_\_\_\_\_

8. \_\_\_\_\_

9. \_\_\_\_\_








Use the numberline to solve each problem. The first is marked for you.

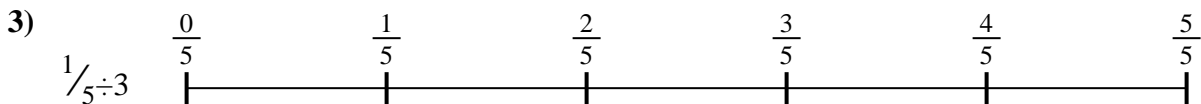
**Answers**



1. \_\_\_\_\_



2. \_\_\_\_\_



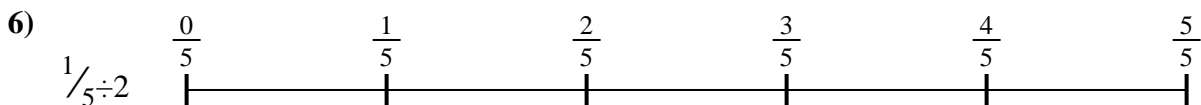
3. \_\_\_\_\_



4. \_\_\_\_\_




5. \_\_\_\_\_




6. \_\_\_\_\_



7. \_\_\_\_\_



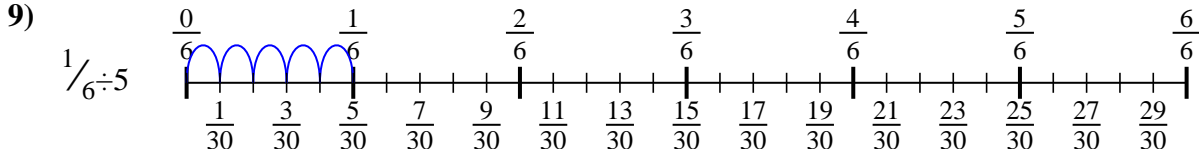
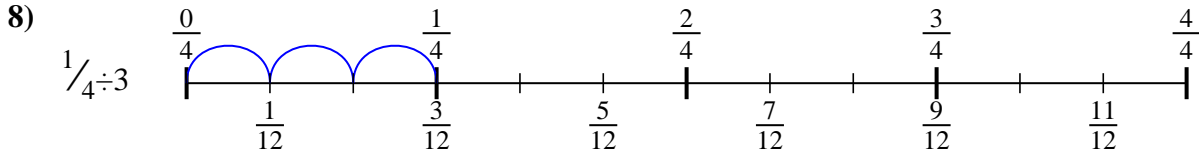
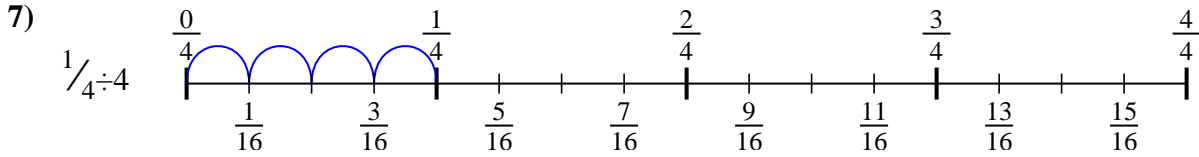
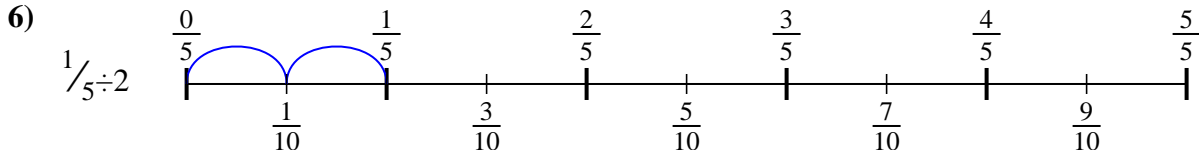
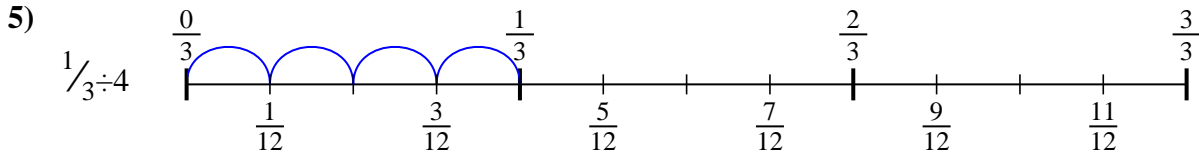
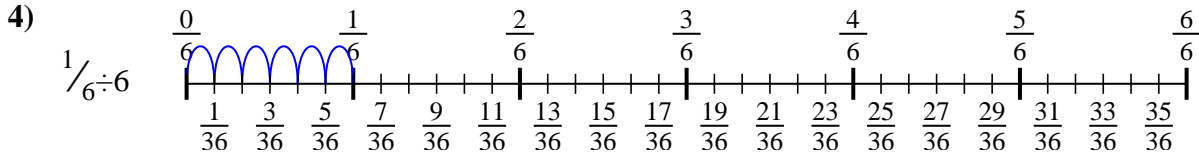
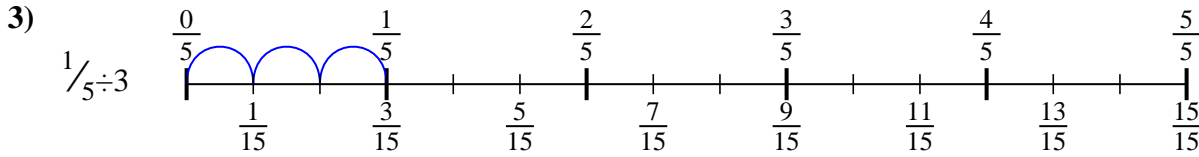
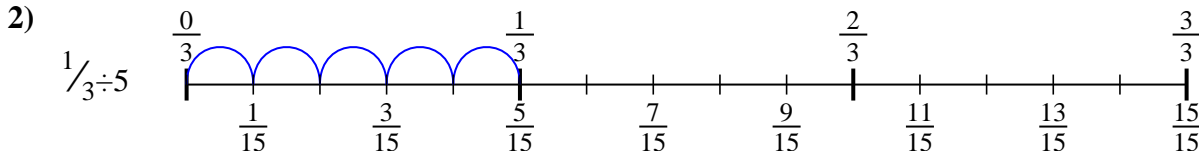
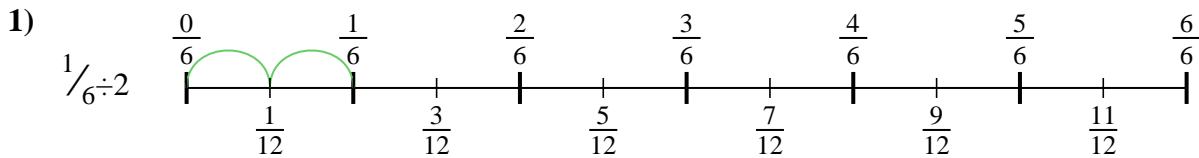
8. \_\_\_\_\_



9. \_\_\_\_\_



Use the numberline to solve each problem. The first is marked for you.



**Answers**

1.  $\frac{1}{12}$
2.  $\frac{1}{15}$
3.  $\frac{1}{15}$
4.  $\frac{1}{36}$
5.  $\frac{1}{12}$
6.  $\frac{1}{10}$
7.  $\frac{1}{16}$
8.  $\frac{1}{12}$
9.  $\frac{1}{30}$



Use the numberline to solve each problem. The first is marked for you.

**Answers**

$$\frac{1}{36}$$

$$\frac{1}{15}$$

$$\frac{1}{15}$$

$$\frac{1}{12}$$

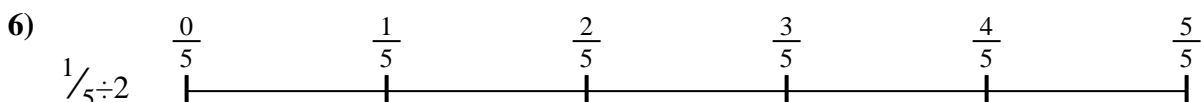

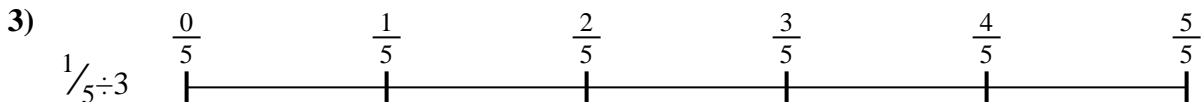
$$\frac{1}{10}$$

$$\frac{1}{30}$$

$$\frac{1}{12}$$

$$\frac{1}{12}$$

$$\frac{1}{16}$$




1. \_\_\_\_\_
2. \_\_\_\_\_
3. \_\_\_\_\_
4. \_\_\_\_\_
5. \_\_\_\_\_
6. \_\_\_\_\_
7. \_\_\_\_\_
8. \_\_\_\_\_
9. \_\_\_\_\_



Use the numberline to solve each problem. The first is marked for you.

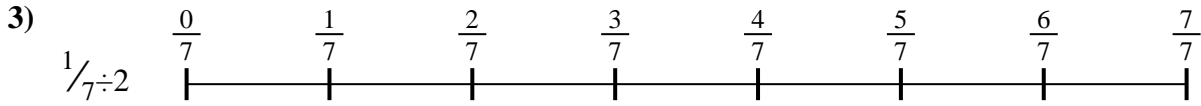
**Answers**



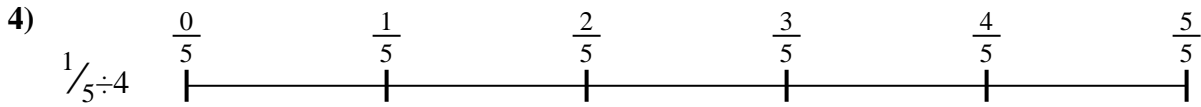
1. \_\_\_\_\_




2. \_\_\_\_\_




3. \_\_\_\_\_




4. \_\_\_\_\_



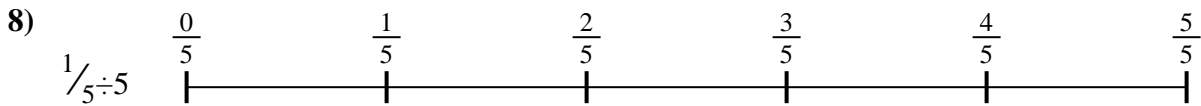
5. \_\_\_\_\_



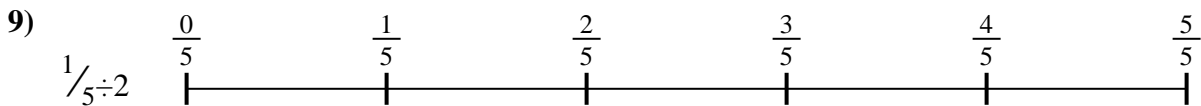
6. \_\_\_\_\_



7. \_\_\_\_\_



8. \_\_\_\_\_

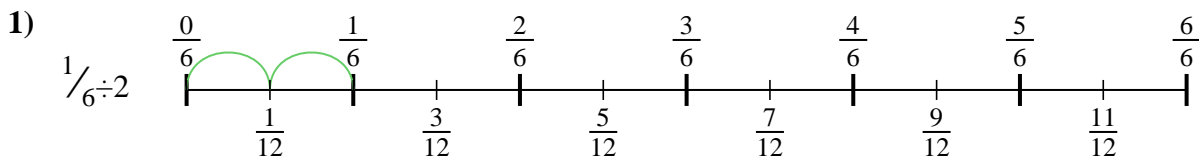


9. \_\_\_\_\_

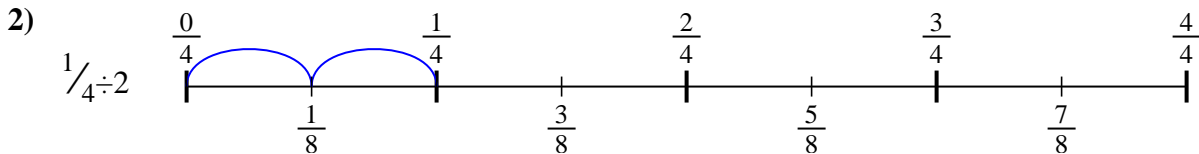


Use the numberline to solve each problem. The first is marked for you.

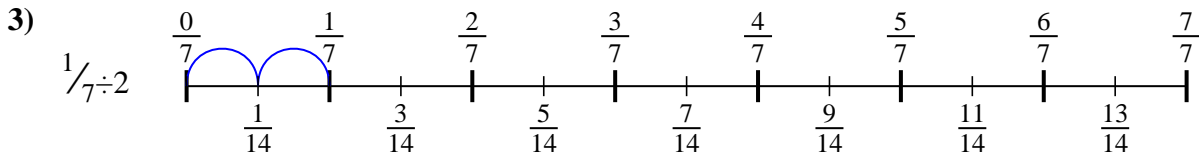
**Answers**



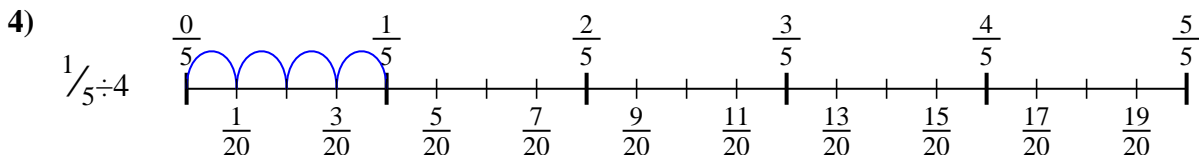
1.  $\frac{1}{12}$



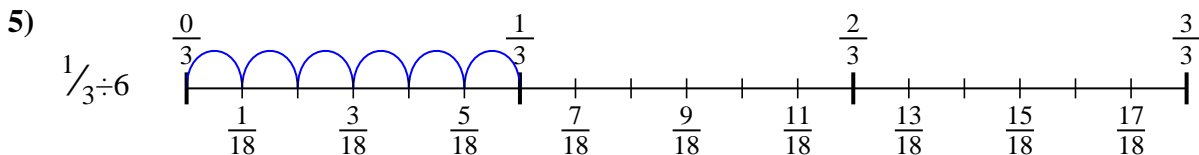
2.  $\frac{1}{8}$



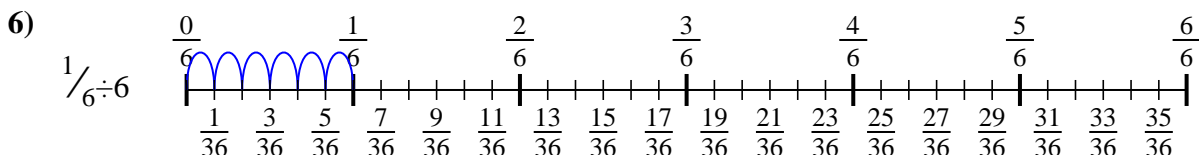
3.  $\frac{1}{14}$



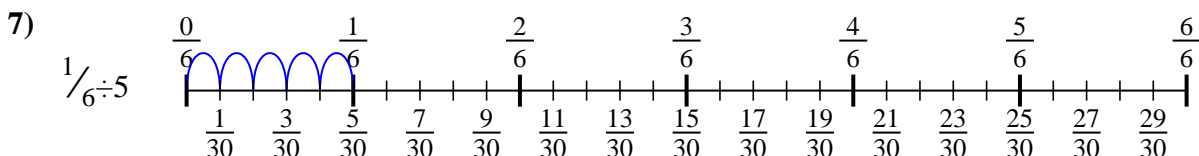
4.  $\frac{1}{20}$



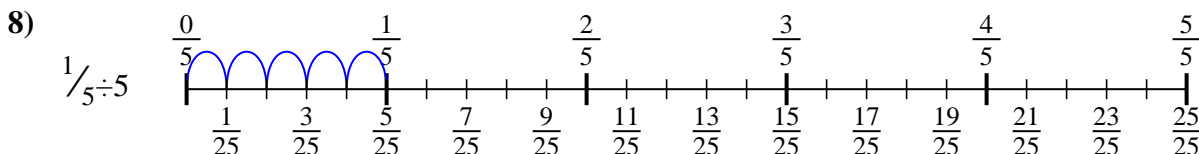
5.  $\frac{1}{18}$



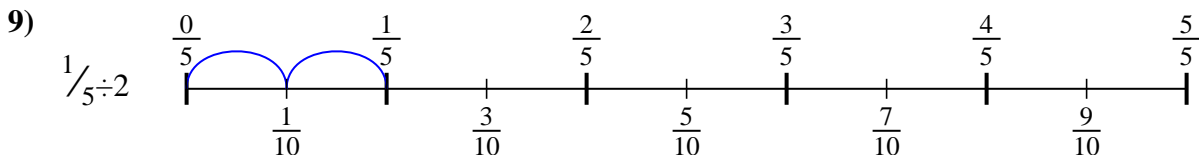
6.  $\frac{1}{36}$



7.  $\frac{1}{30}$



8.  $\frac{1}{25}$



9.  $\frac{1}{10}$



Use the numberline to solve each problem. The first is marked for you.

**Answers**

$\frac{1}{30}$

$\frac{1}{12}$

$\frac{1}{36}$

$\frac{1}{8}$

$\frac{1}{18}$

$\frac{1}{25}$

$\frac{1}{14}$

$\frac{1}{20}$

$\frac{1}{10}$

1. \_\_\_\_\_

2. \_\_\_\_\_

3. \_\_\_\_\_

4. \_\_\_\_\_

5. \_\_\_\_\_

6. \_\_\_\_\_

7. \_\_\_\_\_

8. \_\_\_\_\_

9. \_\_\_\_\_

