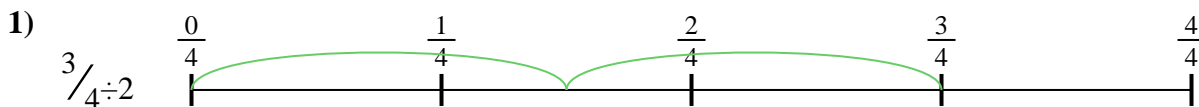





Use the numberline to solve each problem. The first is marked for you.

Answers




1. _____



2. _____



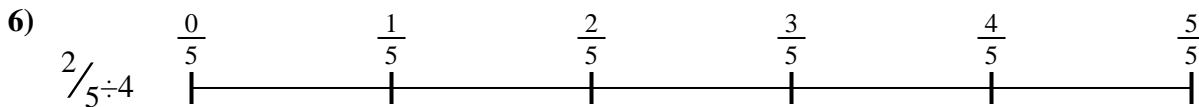
3. _____



4. _____



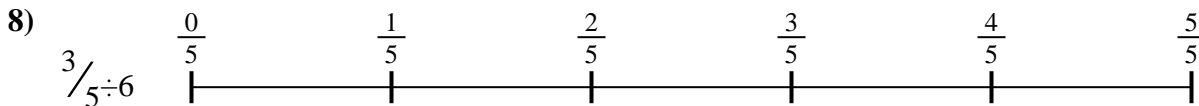
5. _____




6. _____



7. _____



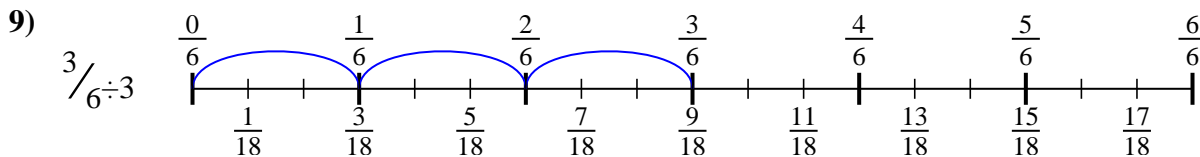
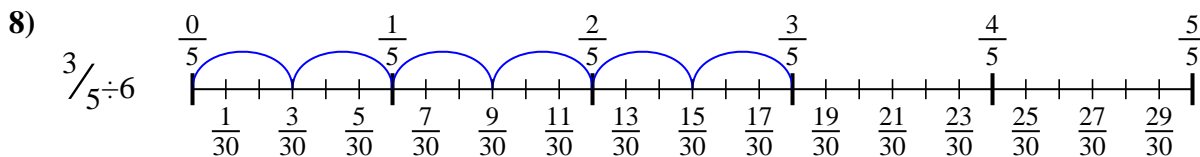
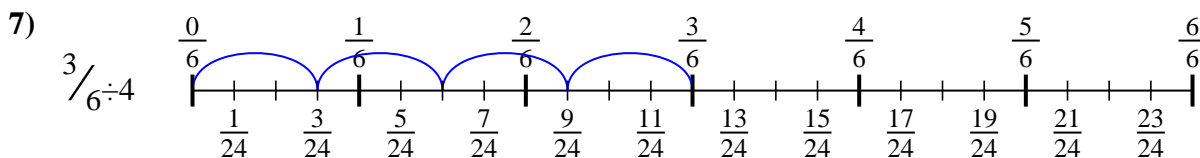
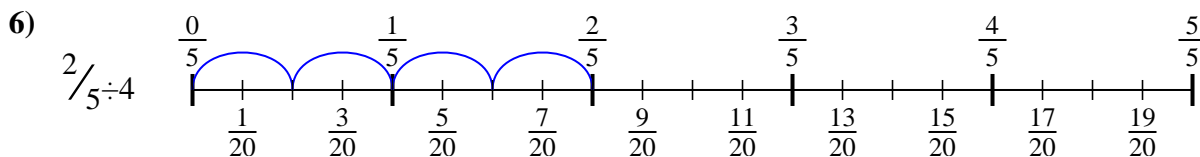
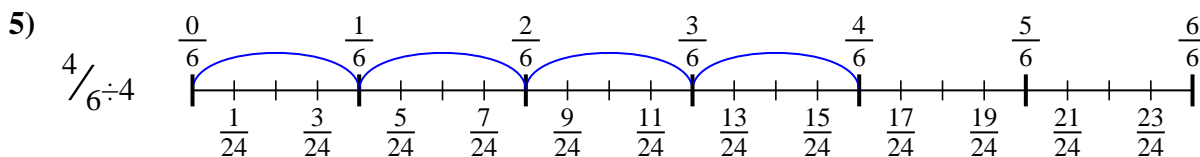
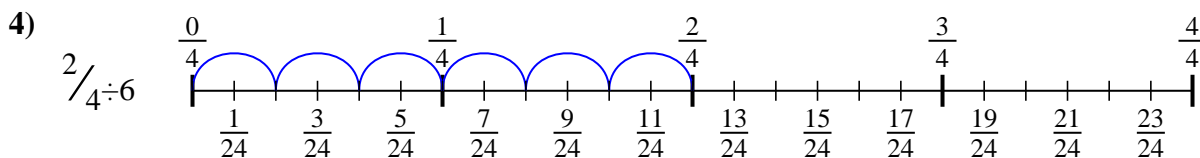
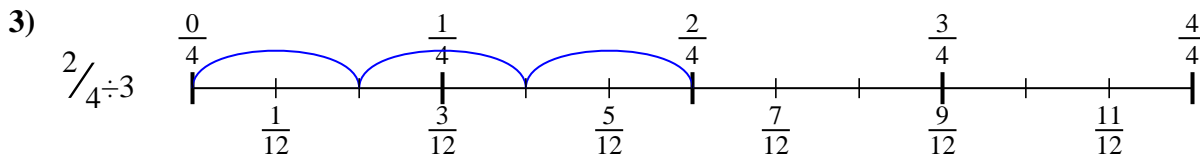
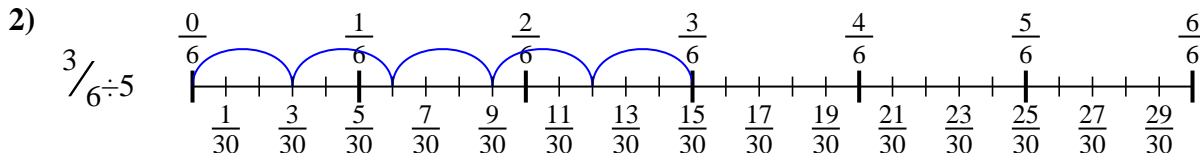
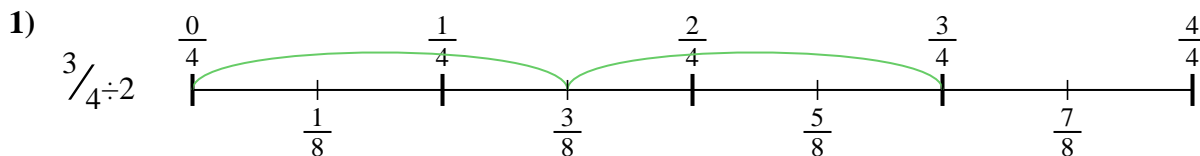
8. _____



9. _____



Use the numberline to solve each problem. The first is marked for you.



Answers

1. $\frac{3}{8}$

2. $\frac{3}{30}$

3. $\frac{2}{12}$

4. $\frac{2}{24}$

5. $\frac{4}{24}$

6. $\frac{2}{20}$

7. $\frac{3}{24}$

8. $\frac{3}{30}$

9. $\frac{3}{18}$



Use the numberline to solve each problem. The first is marked for you.

Answers

$$\frac{3}{24}$$

$$\frac{4}{24}$$

$$\frac{3}{18}$$

$$\frac{3}{30}$$

$$\frac{2}{12}$$

$$\frac{2}{20}$$

$$\frac{3}{8}$$

$$\frac{3}{30}$$

$$\frac{2}{24}$$

1. _____
2. _____
3. _____
4. _____
5. _____
6. _____
7. _____
8. _____
9. _____

