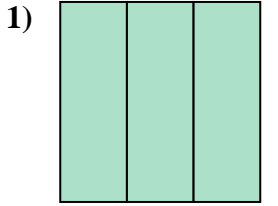


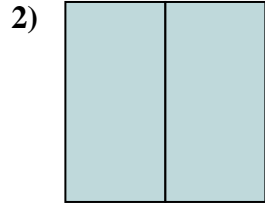


Determine which letter best describes the shaded portion.

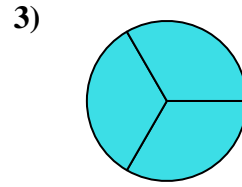
**Answers**



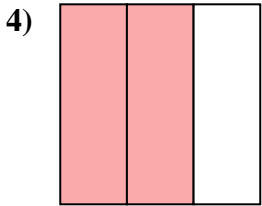
- A. three-quarters
- B. three-thirds
- C. two-halves



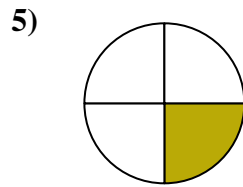
- A. three-fourths
- B. two-halves
- C. two-fourths



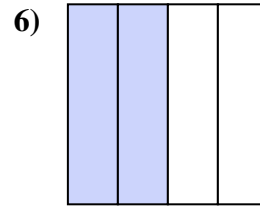
- A. three-fourths
- B. two-quarters
- C. three-thirds



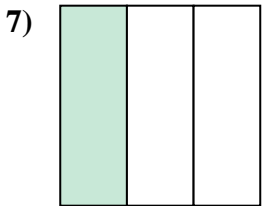
- A. two-thirds
- B. four-quarters
- C. one-fourth



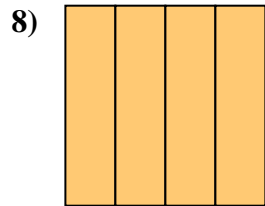
- A. two-fourths
- B. one-quarter
- C. two-halves



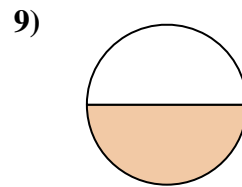
- A. one-quarter
- B. one-half
- C. two-fourths



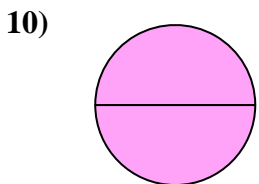
- A. four-quarters
- B. one-third
- C. one-quarter



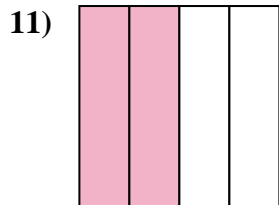
- A. four-quarters
- B. one-half
- C. two-halves



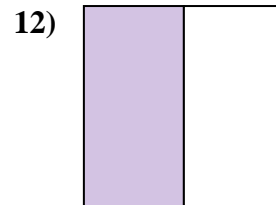
- A. one-fourth
- B. two-halves
- C. one-half



- A. four-quarters
- B. two-halves
- C. three-fourths



- A. two-quarters
- B. one-quarter
- C. three-fourths

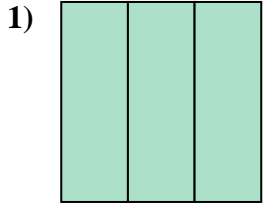


- A. four-fourths
- B. one-half
- C. three-quarters

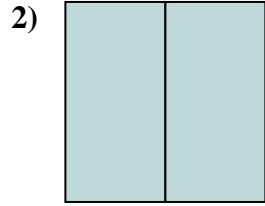
1. \_\_\_\_\_
2. \_\_\_\_\_
3. \_\_\_\_\_
4. \_\_\_\_\_
5. \_\_\_\_\_
6. \_\_\_\_\_
7. \_\_\_\_\_
8. \_\_\_\_\_
9. \_\_\_\_\_
10. \_\_\_\_\_
11. \_\_\_\_\_
12. \_\_\_\_\_



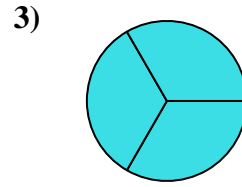
Determine which letter best describes the shaded portion.



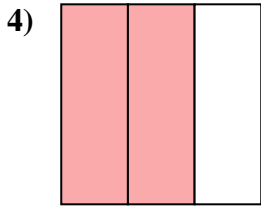
- A. three-quarters
- B. three-thirds
- C. two-halves



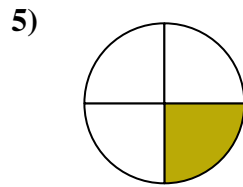
- A. three-fourths
- B. two-halves
- C. two-fourths



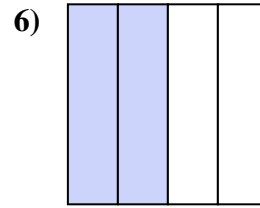
- A. three-fourths
- B. two-quarters
- C. three-thirds



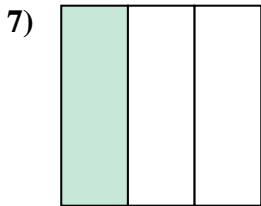
- A. two-thirds
- B. four-quarters
- C. one-fourth



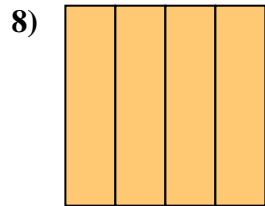
- A. two-fourths
- B. one-quarter
- C. two-halves



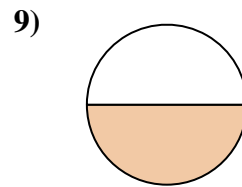
- A. one-quarter
- B. one-half
- C. two-fourths



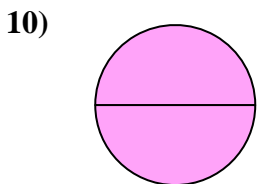
- A. four-quarters
- B. one-third
- C. one-quarter



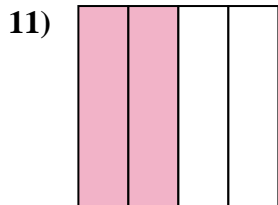
- A. four-quarters
- B. one-half
- C. two-halves



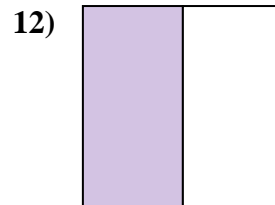
- A. one-fourth
- B. two-halves
- C. one-half



- A. four-quarters
- B. two-halves
- C. three-fourths



- A. two-quarters
- B. one-quarter
- C. three-fourths



- A. four-fourths
- B. one-half
- C. three-quarters

**Answers**

- 1.   **B**
- 2.   **B**
- 3.   **C**
- 4.   **A**
- 5.   **B**
- 6.   **C**
- 7.   **B**
- 8.   **A**
- 9.   **C**
- 10.   **B**
- 11.   **A**
- 12.   **B**