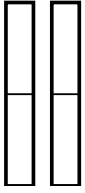


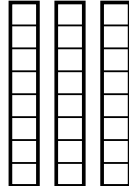


Use the visual models to solve.

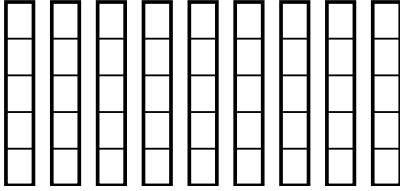
1) $\frac{1}{2} \times 2 =$



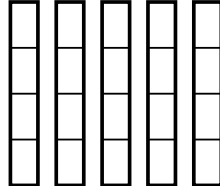
2) $\frac{4}{8} \times 3 =$



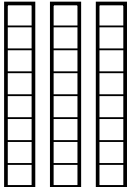
3) $\frac{2}{5} \times 9 =$



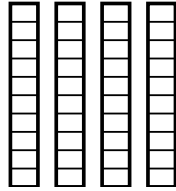
4) $\frac{1}{4} \times 5 =$



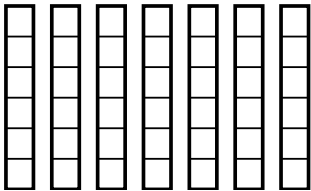
5) $\frac{1}{8} \times 3 =$



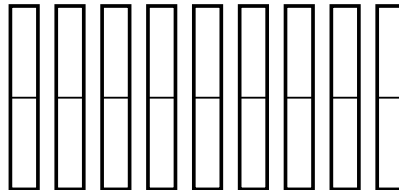
6) $\frac{9}{10} \times 4 =$



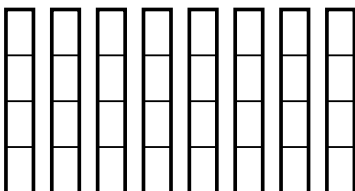
7) $\frac{4}{6} \times 7 =$



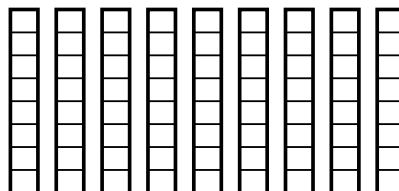
8) $\frac{1}{2} \times 9 =$



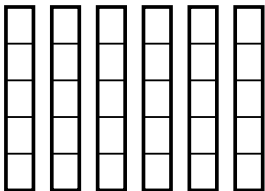
9) $\frac{2}{4} \times 8 =$



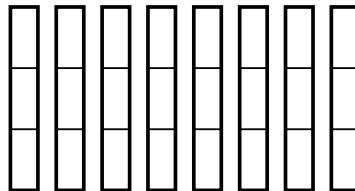
10) $\frac{5}{8} \times 9 =$



11) $\frac{4}{5} \times 6 =$



12) $\frac{1}{3} \times 8 =$



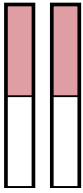
Answers

1. _____
2. _____
3. _____
4. _____
5. _____
6. _____
7. _____
8. _____
9. _____
10. _____
11. _____
12. _____

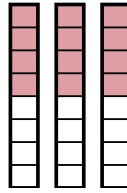


Use the visual models to solve.

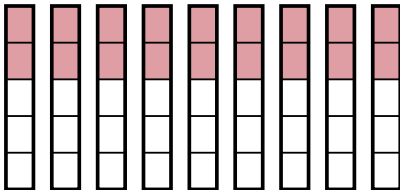
1) $\frac{1}{2} \times 2 =$



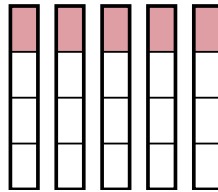
2) $\frac{4}{8} \times 3 =$



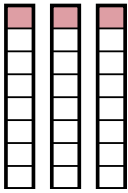
3) $\frac{2}{5} \times 9 =$



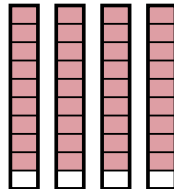
4) $\frac{1}{4} \times 5 =$



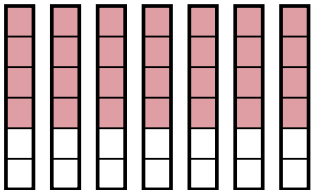
5) $\frac{1}{8} \times 3 =$



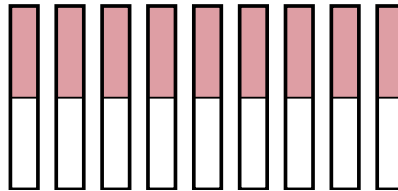
6) $\frac{9}{10} \times 4 =$



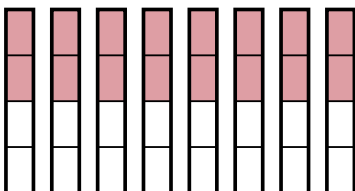
7) $\frac{4}{6} \times 7 =$



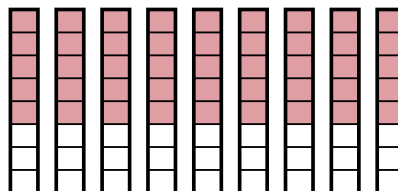
8) $\frac{1}{2} \times 9 =$



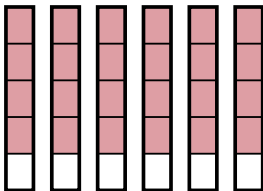
9) $\frac{2}{4} \times 8 =$



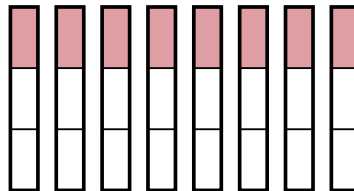
10) $\frac{5}{8} \times 9 =$



11) $\frac{4}{5} \times 6 =$



12) $\frac{1}{3} \times 8 =$



Answers

1. $\frac{2}{2}$

2. $\frac{12}{8}$

3. $\frac{18}{5}$

4. $\frac{5}{4}$

5. $\frac{3}{8}$

6. $\frac{36}{10}$

7. $\frac{28}{6}$

8. $\frac{9}{2}$

9. $\frac{16}{4}$

10. $\frac{45}{8}$

11. $\frac{24}{5}$

12. $\frac{8}{3}$