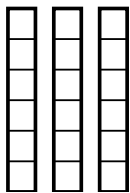


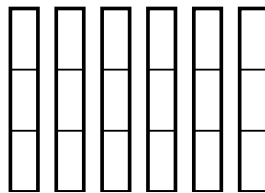


Use the visual models to solve.

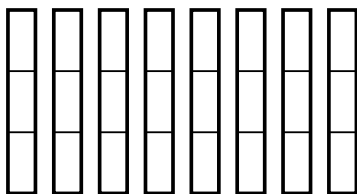
1)  $\frac{5}{6} \times 3 =$



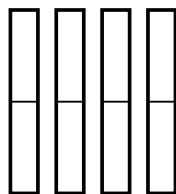
2)  $\frac{1}{3} \times 6 =$



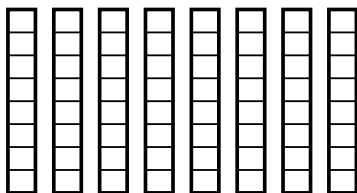
3)  $\frac{2}{3} \times 8 =$



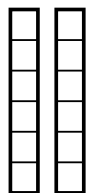
4)  $\frac{1}{2} \times 4 =$



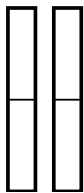
5)  $\frac{4}{8} \times 8 =$



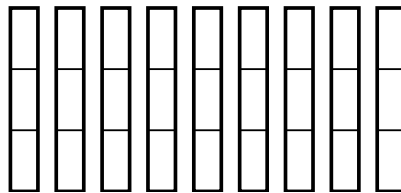
6)  $\frac{5}{6} \times 2 =$



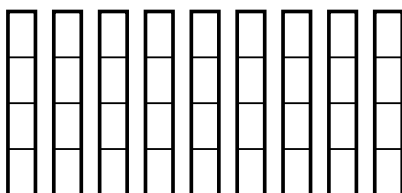
7)  $\frac{1}{2} \times 2 =$



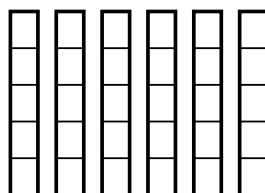
8)  $\frac{2}{3} \times 9 =$



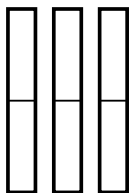
9)  $\frac{1}{4} \times 9 =$



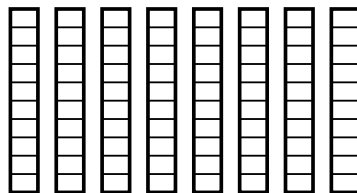
10)  $\frac{4}{5} \times 6 =$



11)  $\frac{1}{2} \times 3 =$



12)  $\frac{3}{10} \times 8 =$



**Answers**

1. \_\_\_\_\_

2. \_\_\_\_\_

3. \_\_\_\_\_

4. \_\_\_\_\_

5. \_\_\_\_\_

6. \_\_\_\_\_

7. \_\_\_\_\_

8. \_\_\_\_\_

9. \_\_\_\_\_

10. \_\_\_\_\_

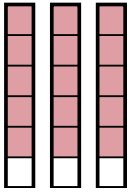
11. \_\_\_\_\_

12. \_\_\_\_\_

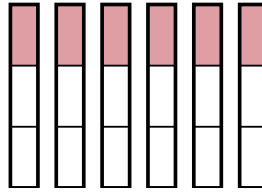


Use the visual models to solve.

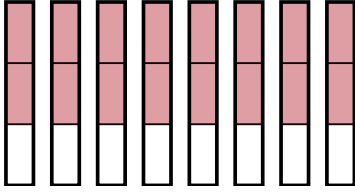
1)  $\frac{5}{6} \times 3 =$



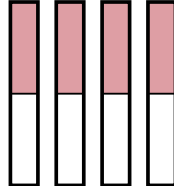
2)  $\frac{1}{3} \times 6 =$



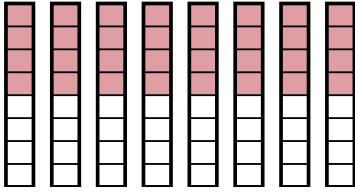
3)  $\frac{2}{3} \times 8 =$



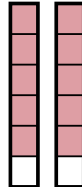
4)  $\frac{1}{2} \times 4 =$



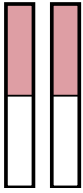
5)  $\frac{4}{8} \times 8 =$



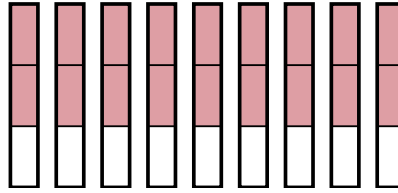
6)  $\frac{5}{6} \times 2 =$



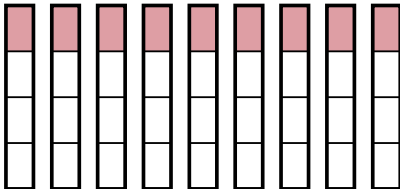
7)  $\frac{1}{2} \times 2 =$



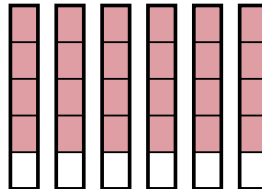
8)  $\frac{2}{3} \times 9 =$



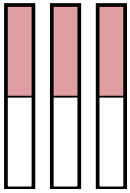
9)  $\frac{1}{4} \times 9 =$



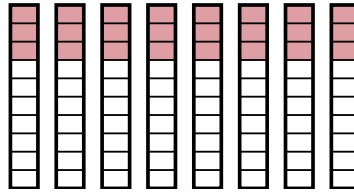
10)  $\frac{4}{5} \times 6 =$



11)  $\frac{1}{2} \times 3 =$



12)  $\frac{3}{10} \times 8 =$



**Answers**

1.  $\frac{15}{6}$

2.  $\frac{6}{3}$

3.  $\frac{16}{3}$

4.  $\frac{4}{2}$

5.  $\frac{32}{8}$

6.  $\frac{10}{6}$

7.  $\frac{2}{2}$

8.  $\frac{18}{3}$

9.  $\frac{9}{4}$

10.  $\frac{24}{5}$

11.  $\frac{3}{2}$

12.  $\frac{24}{10}$