





Solve each problem.


- 1) Mark the location of
- $\frac{12}{5}$



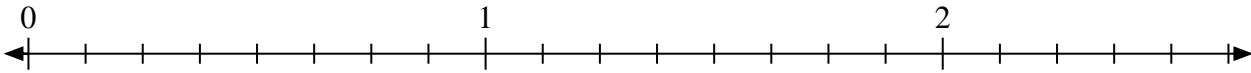
- 2) Mark the location of
- $\frac{5}{4}$



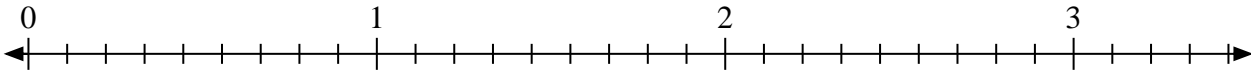
- 3) Mark the location of
- $\frac{5}{2}$



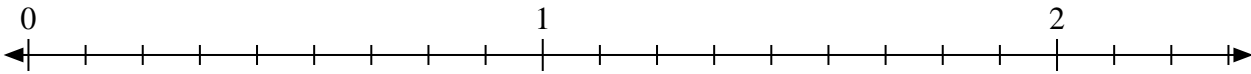
- 4) Mark the location of
- $\frac{10}{8}$



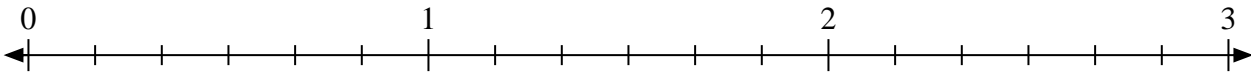
- 5) Mark the location of
- $\frac{18}{9}$



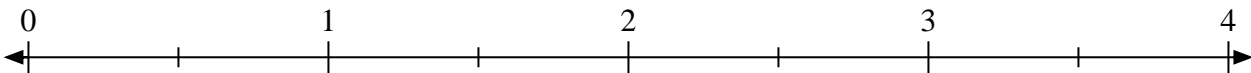
- 6) Mark the location of
- $\frac{19}{9}$



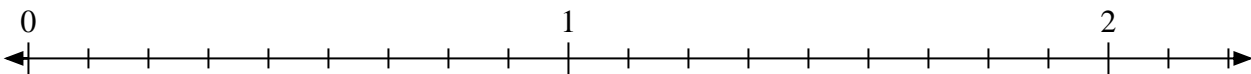
- 7) Mark the location of
- $\frac{17}{6}$




- 8) Mark the location of
- $\frac{4}{2}$



- 9) Mark the location of
- $\frac{15}{9}$




- 10) Mark the location of
- $\frac{9}{5}$





Solve each problem.

- 1) Mark the location of
- $\frac{12}{5}$



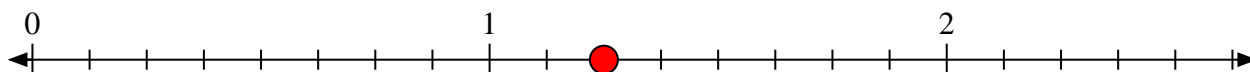
- 2) Mark the location of
- $\frac{5}{4}$



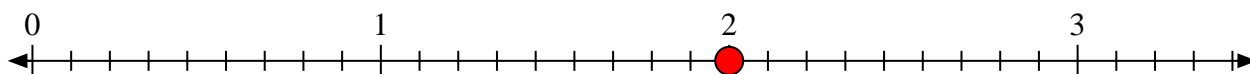
- 3) Mark the location of
- $\frac{5}{2}$



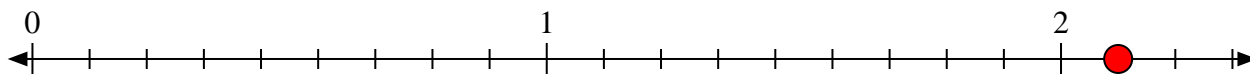
- 4) Mark the location of
- $\frac{10}{8}$



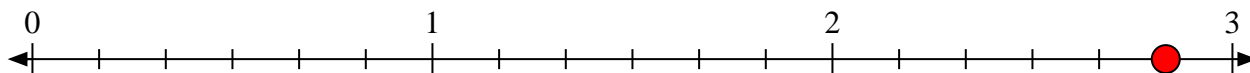
- 5) Mark the location of
- $\frac{18}{9}$



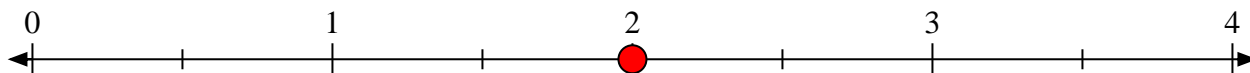
- 6) Mark the location of
- $\frac{19}{9}$



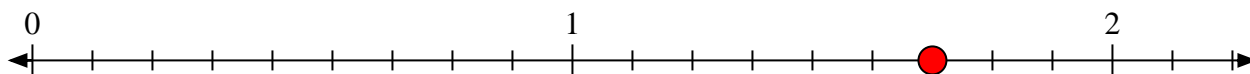
- 7) Mark the location of
- $\frac{17}{6}$



- 8) Mark the location of
- $\frac{4}{2}$



- 9) Mark the location of
- $\frac{15}{9}$



- 10) Mark the location of
- $\frac{9}{5}$

