
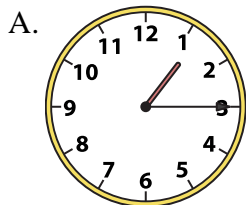




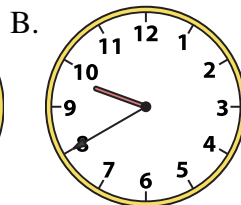
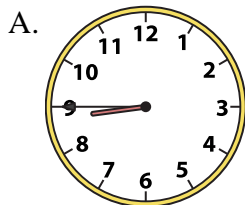
Determine which clock accurately shows the time.

Answers

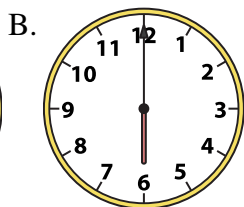
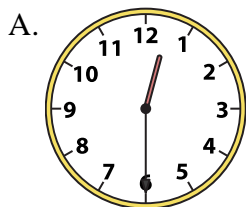
1) 1:15



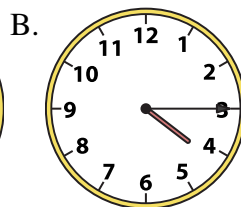
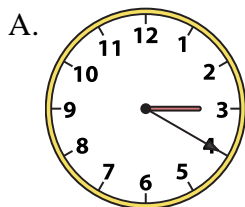
2) 8:45




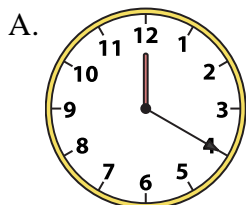
3) 6:00



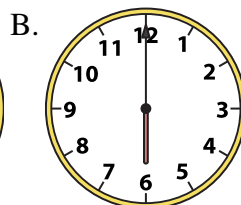
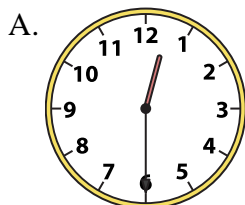
4) 4:15



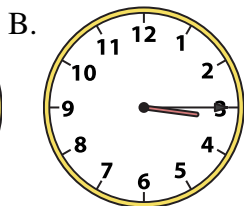
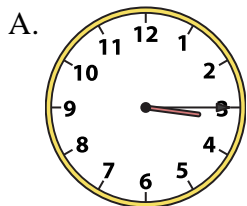
5) 4:00



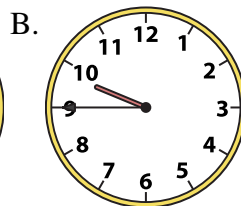
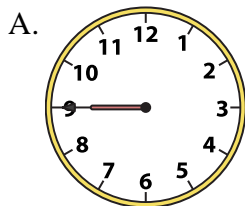
6) 6:00




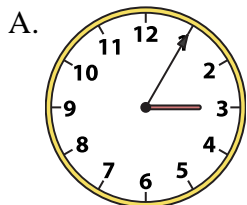
7) 3:15



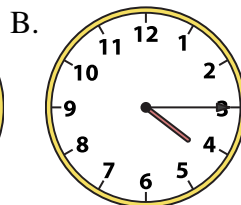
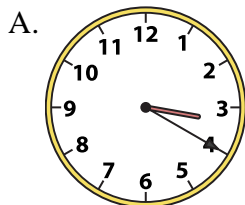
8) 9:45




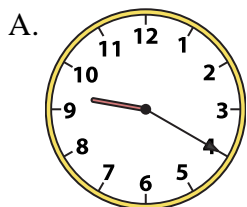
9) 1:15



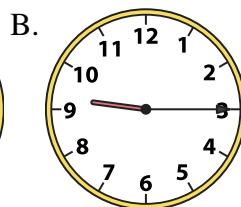
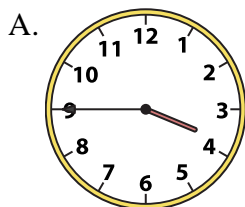
10) 4:15



11) 4:45



12) 3:45



1. _____
2. _____
3. _____
4. _____
5. _____
6. _____
7. _____
8. _____
9. _____
10. _____
11. _____
12. _____

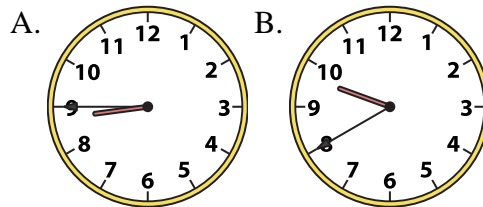
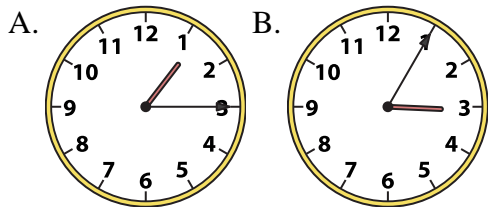


Determine which clock accurately shows the time.

Answers

1) 1:15

2) 8:45

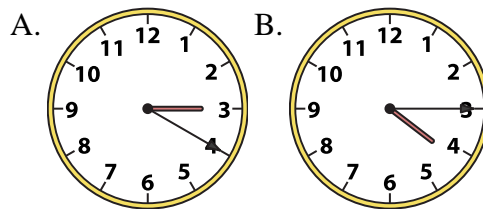
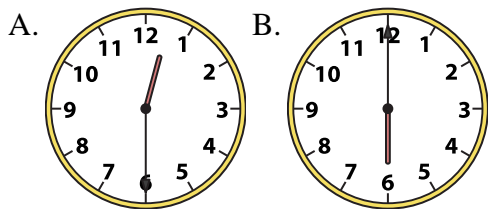


1. **A**

2. **A**

3) 6:00

4) 4:15



3. **B**

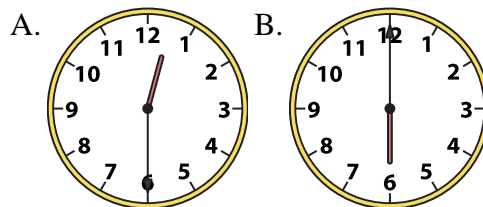
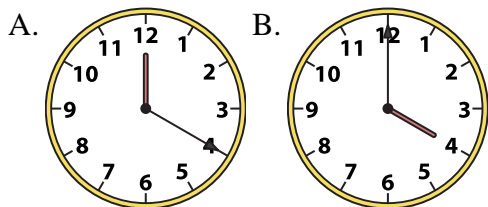
4. **B**

5. **B**

6. **B**

5) 4:00

6) 6:00



7. **A**

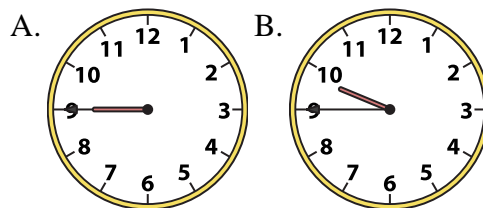
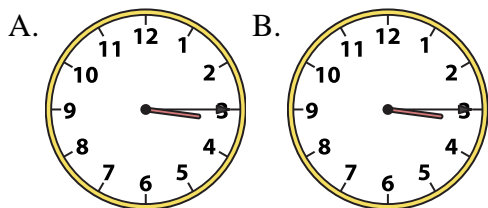
8. **B**

9. **B**

10. **B**

7) 3:15

8) 9:45

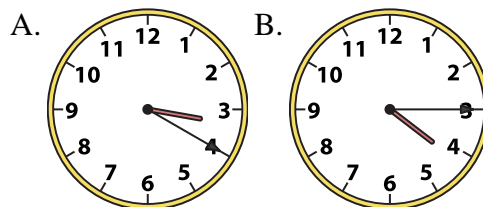
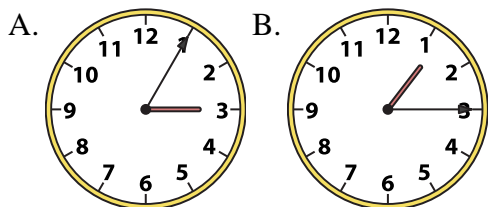


11. **B**

12. **A**

9) 1:15

10) 4:15



11) 4:45

12) 3:45

