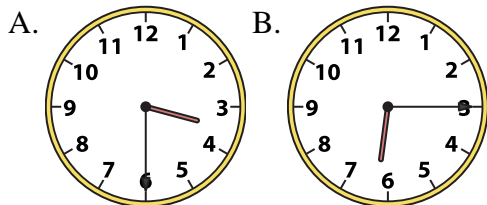




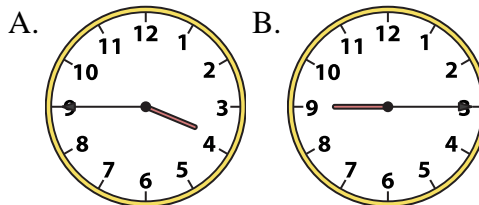
Determine which clock accurately shows the time.

Answers

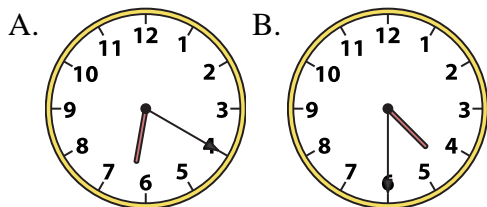
1) 3:30



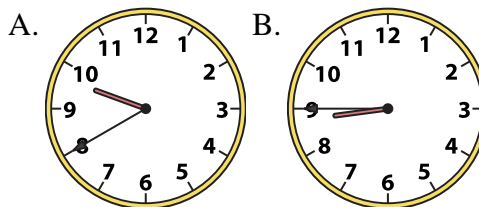
2) 3:45



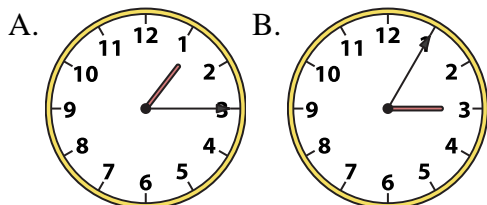
3) 4:30



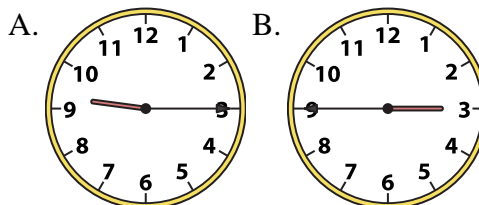
4) 8:45



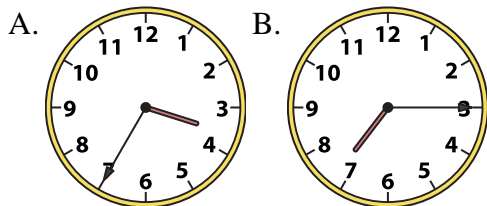
5) 1:15



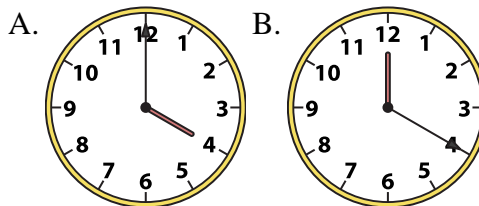
6) 9:15



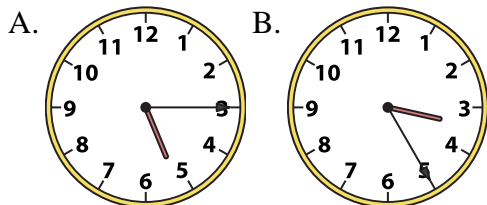
7) 7:15



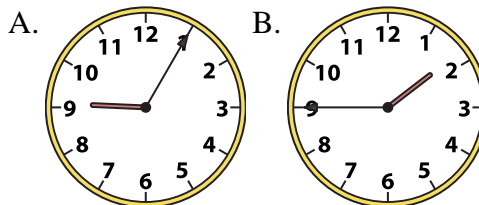
8) 4:00



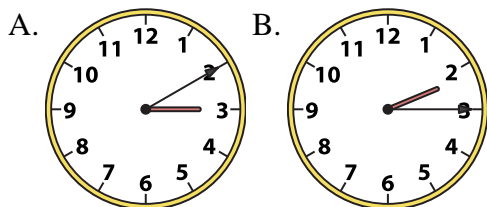
9) 5:15



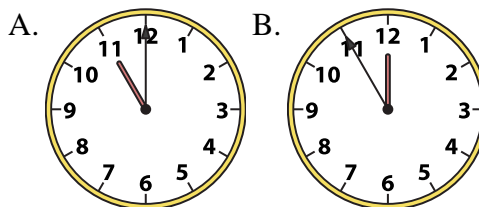
10) 1:45



11) 2:15



12) 11:00



1. _____
2. _____
3. _____
4. _____
5. _____
6. _____
7. _____
8. _____
9. _____
10. _____
11. _____
12. _____

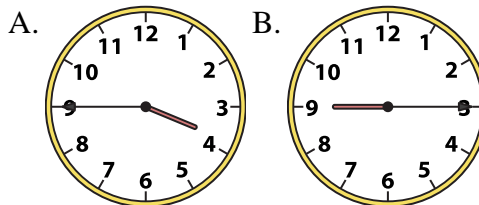
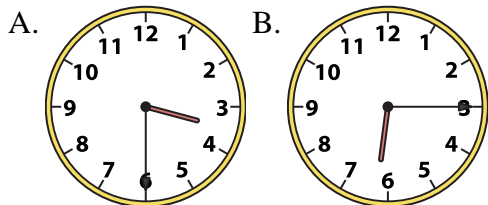


Determine which clock accurately shows the time.

Answers

1) 3:30

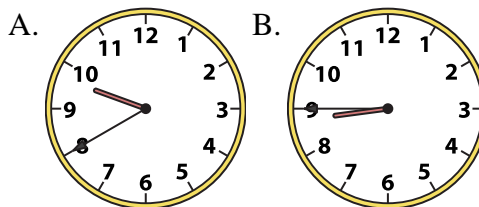
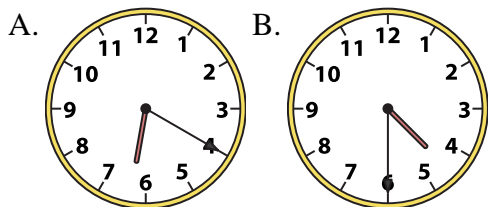
2) 3:45



1. **A**

3) 4:30

4) 8:45



2. **A**

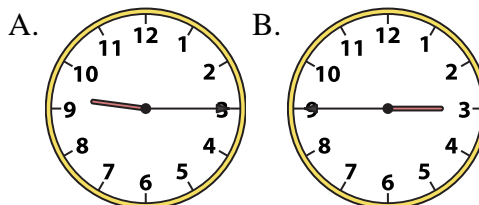
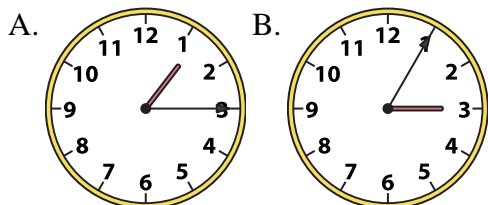
3. **B**

4. **B**

5. **A**

5) 1:15

6) 9:15



6. **A**

7. **B**

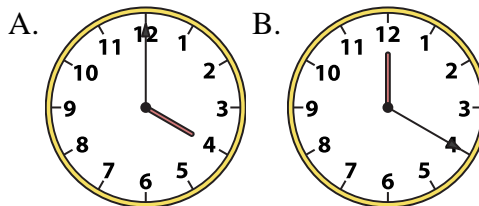
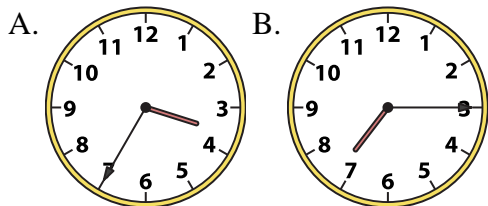
8. **A**

9. **A**

10. **B**

7) 7:15

8) 4:00

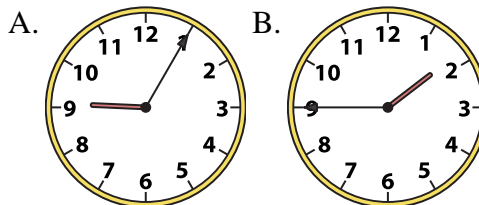
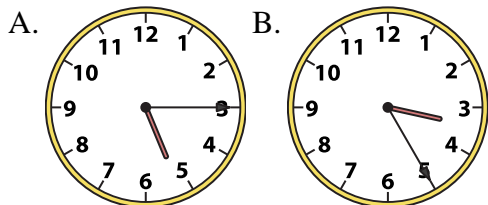


11. **B**

12. **A**

9) 5:15

10) 1:45



11) 2:15

12) 11:00

