
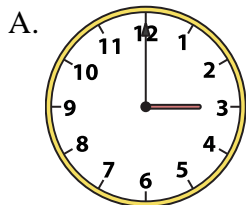




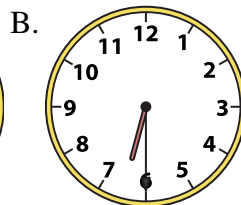
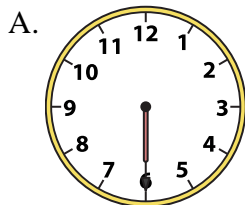
Determine which clock accurately shows the time.

**Answers**

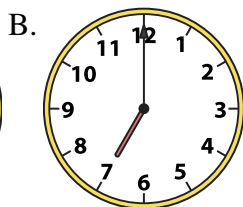
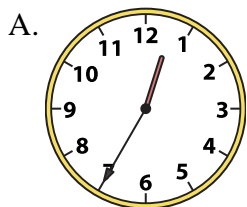
1) 12:15



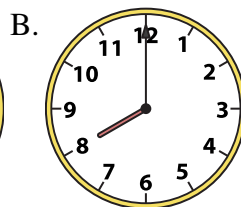
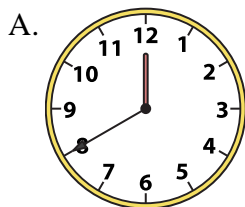
2) 6:30




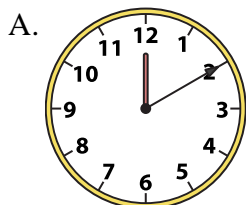
3) 7:00




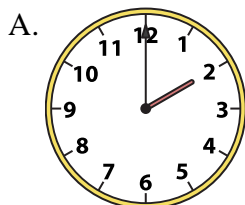
4) 8:00




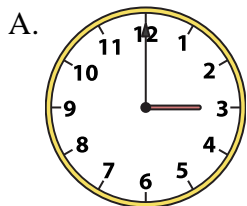
5) 2:00



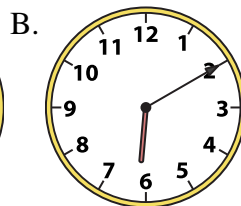
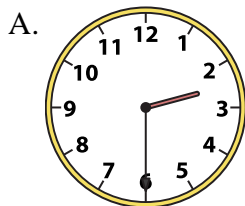
6) 2:00



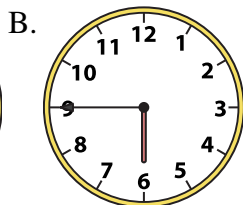
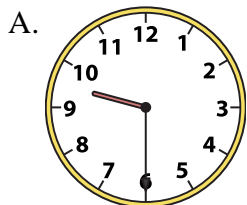
7) 12:15



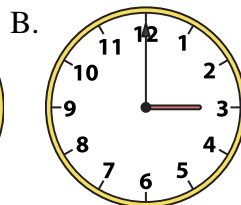
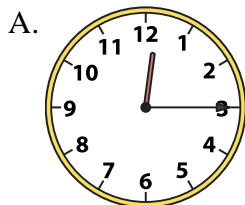
8) 2:30



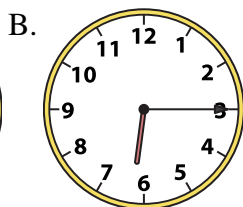
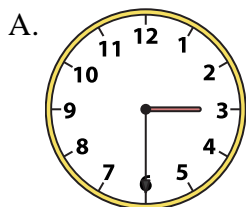
9) 9:30



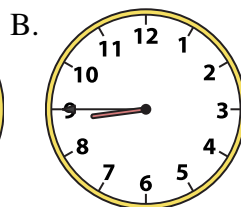
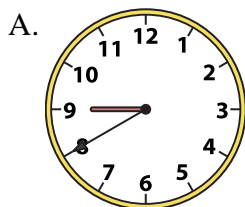
10) 3:00



11) 6:15



12) 8:45



1. \_\_\_\_\_
2. \_\_\_\_\_
3. \_\_\_\_\_
4. \_\_\_\_\_
5. \_\_\_\_\_
6. \_\_\_\_\_
7. \_\_\_\_\_
8. \_\_\_\_\_
9. \_\_\_\_\_
10. \_\_\_\_\_
11. \_\_\_\_\_
12. \_\_\_\_\_

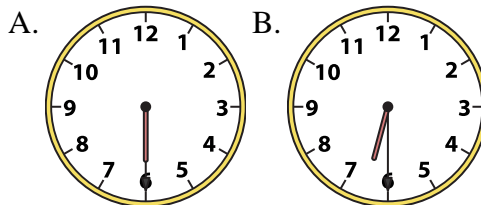
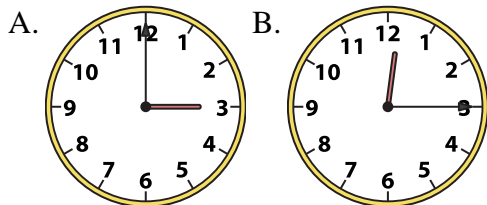


Determine which clock accurately shows the time.

**Answers**

1) 12:15

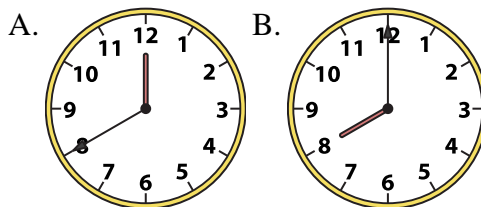
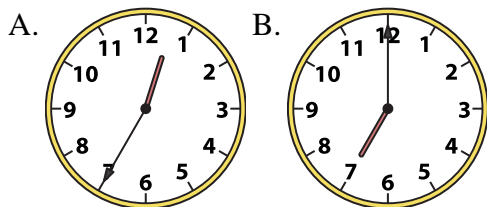
2) 6:30



1. **B**

3) 7:00

4) 8:00



2. **B**

3. **B**

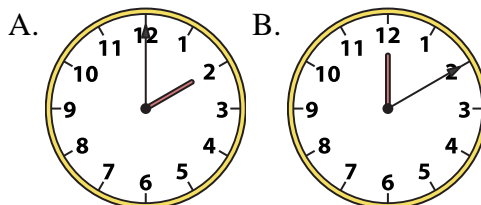
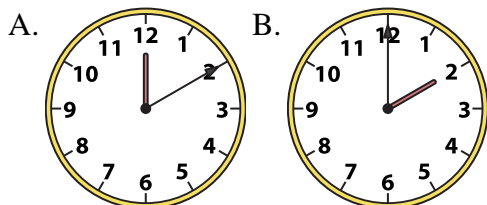
4. **B**

5. **B**

6. **A**

5) 2:00

6) 2:00



7. **B**

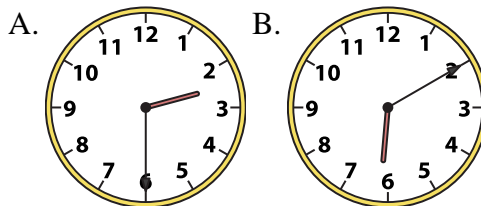
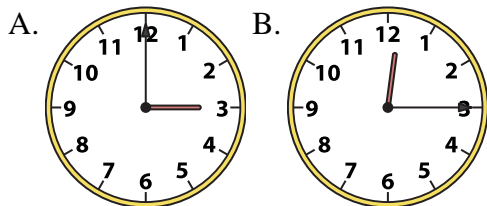
8. **A**

9. **A**

10. **B**

7) 12:15

8) 2:30

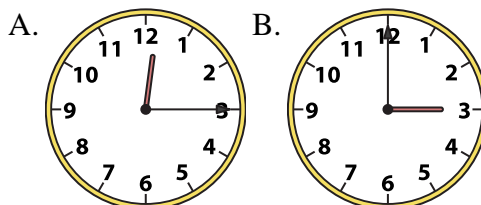
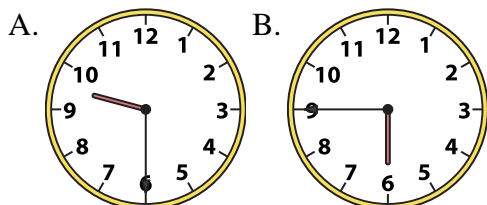


11. **B**

12. **B**

9) 9:30

10) 3:00



11) 6:15

12) 8:45

