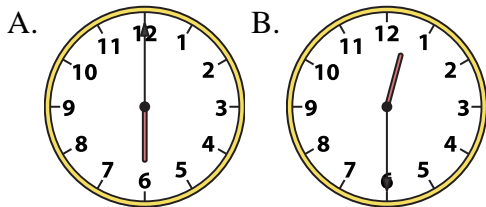




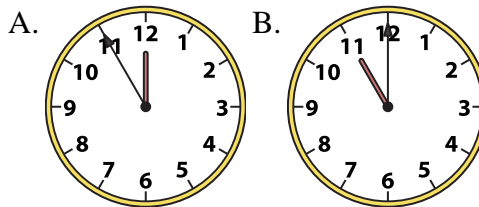
Determine which clock accurately shows the time.

**Answers**

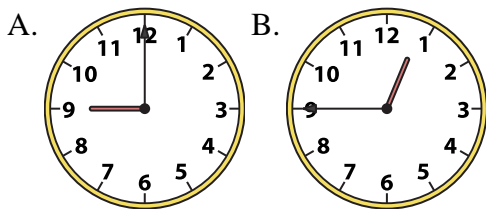
1) 6:00



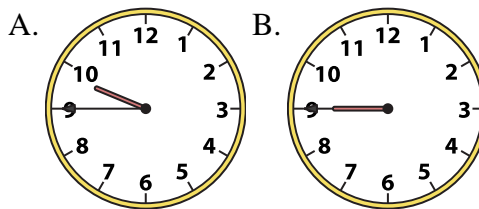
2) 11:00



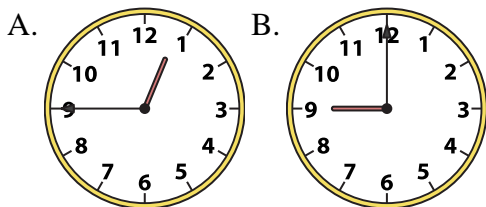
3) 12:45



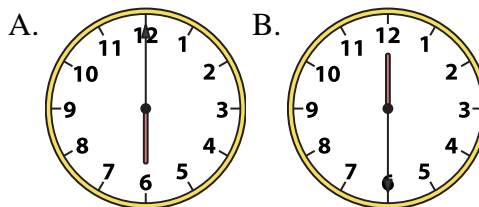
4) 9:45



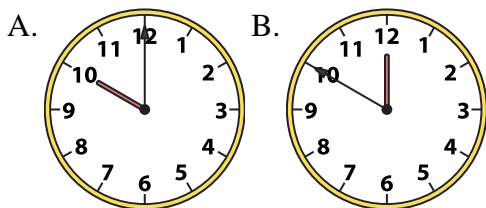
5) 12:45



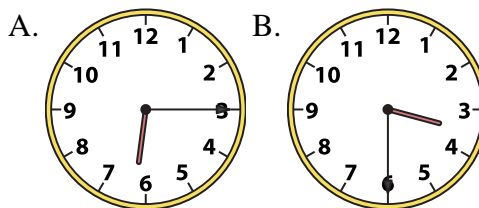
6) 6:00



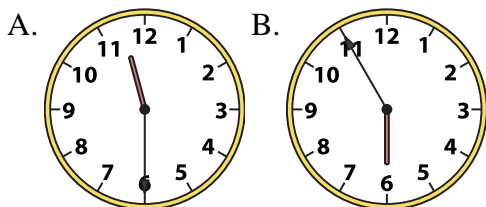
7) 10:00



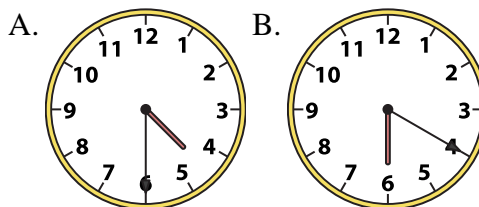
8) 3:30



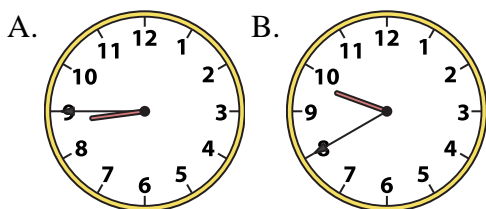
9) 11:30



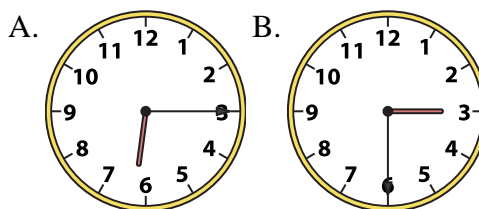
10) 4:30



11) 8:45



12) 6:15



1. \_\_\_\_\_
2. \_\_\_\_\_
3. \_\_\_\_\_
4. \_\_\_\_\_
5. \_\_\_\_\_
6. \_\_\_\_\_
7. \_\_\_\_\_
8. \_\_\_\_\_
9. \_\_\_\_\_
10. \_\_\_\_\_
11. \_\_\_\_\_
12. \_\_\_\_\_

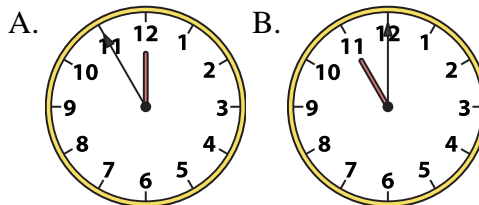
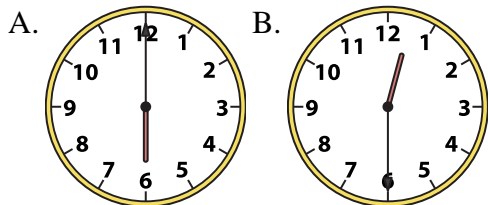


Determine which clock accurately shows the time.

**Answers**

1) 6:00

2) 11:00

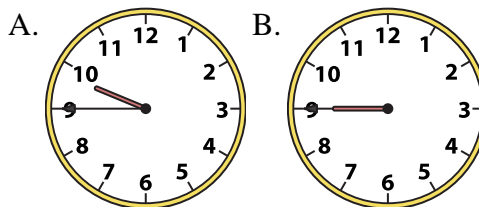
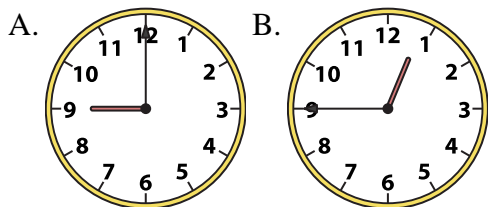


1. **A**

2. **B**

3) 12:45

4) 9:45



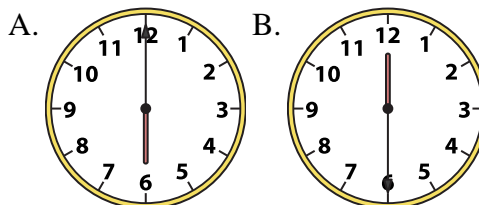
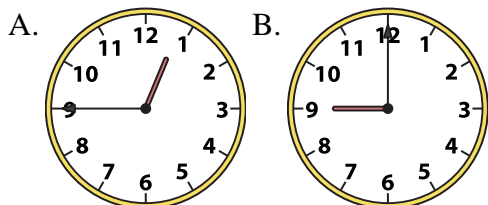
3. **B**

4. **A**

5. **A**

5) 12:45

6) 6:00



6. **A**

7. **A**

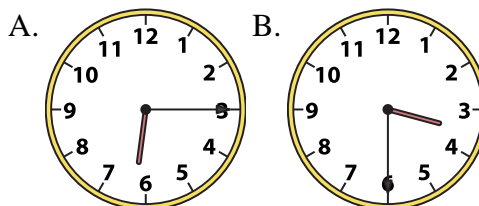
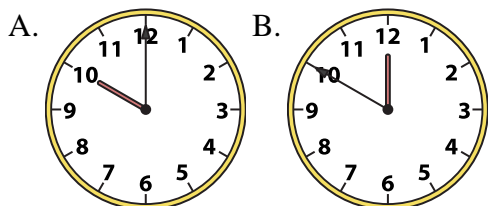
8. **B**

9. **A**

10. **A**

7) 10:00

8) 3:30

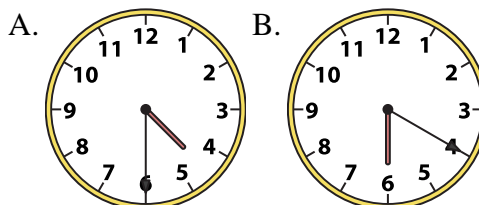
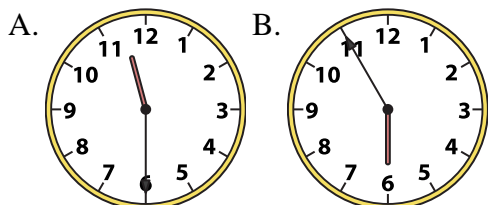


11. **A**

12. **A**

9) 11:30

10) 4:30



11) 8:45

12) 6:15

