
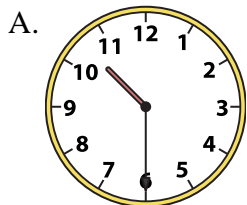




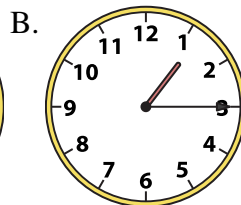
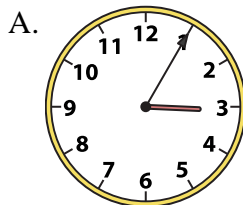
Determine which clock accurately shows the time.

**Answers**

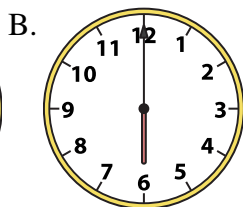
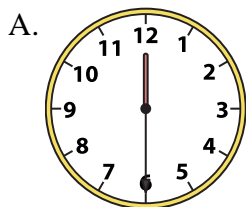
1) 10:30



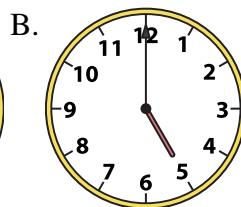
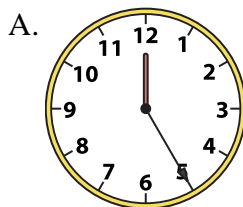
2) 1:15



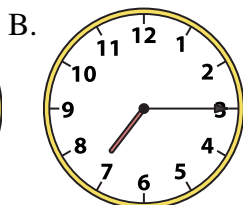
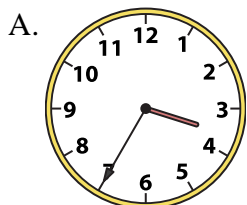
3) 6:00



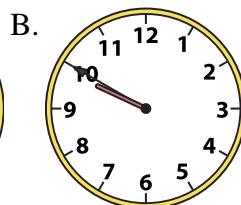
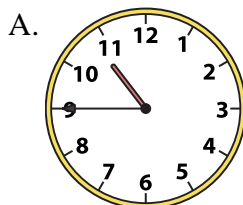
4) 5:00




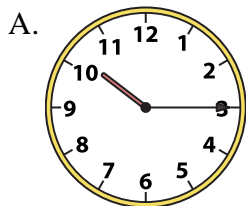
5) 7:15



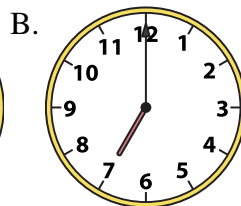
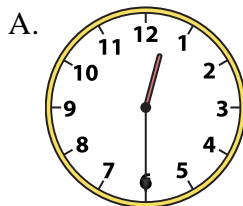
6) 10:45



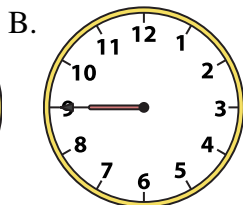
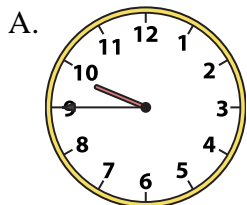
7) 10:15



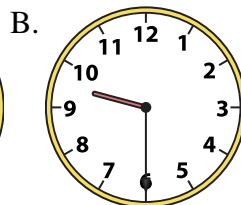
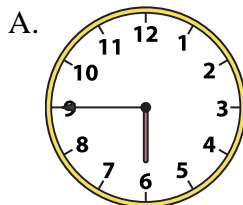
8) 12:30



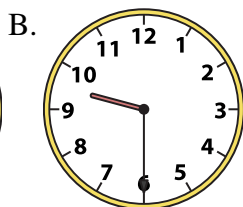
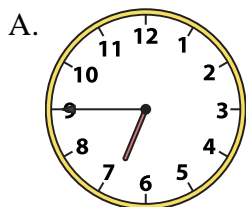
9) 9:45



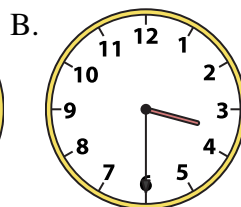
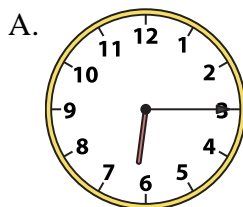
10) 9:30



11) 9:30



12) 3:30



1. \_\_\_\_\_

2. \_\_\_\_\_

3. \_\_\_\_\_

4. \_\_\_\_\_

5. \_\_\_\_\_

6. \_\_\_\_\_

7. \_\_\_\_\_

8. \_\_\_\_\_

9. \_\_\_\_\_

10. \_\_\_\_\_

11. \_\_\_\_\_

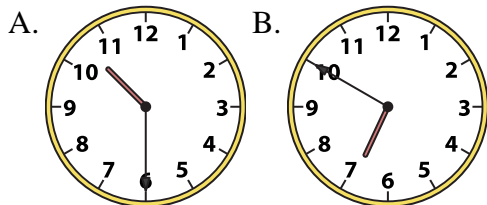
12. \_\_\_\_\_



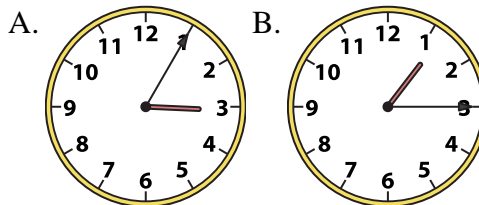
Determine which clock accurately shows the time.

**Answers**

1) 10:30

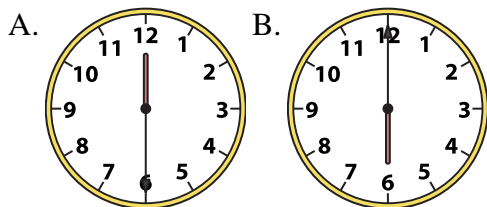


2) 1:15

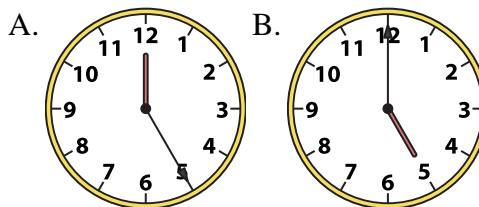


1. **A**

3) 6:00



4) 5:00



2. **B**

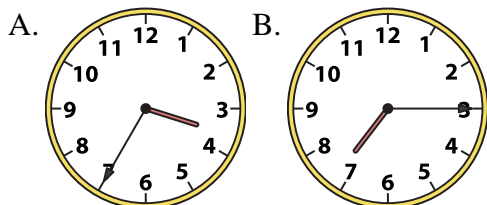
3. **B**

4. **B**

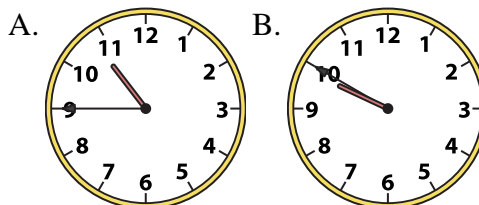
5. **B**

6. **A**

5) 7:15



6) 10:45



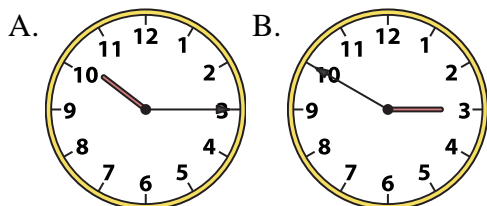
7. **A**

8. **A**

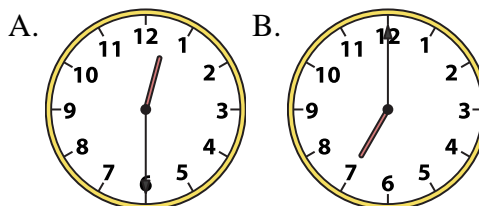
9. **A**

10. **B**

7) 10:15



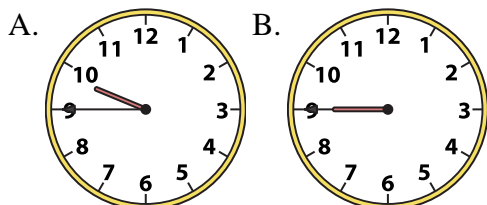
8) 12:30



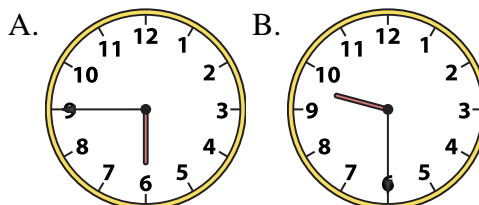
11. **B**

12. **B**

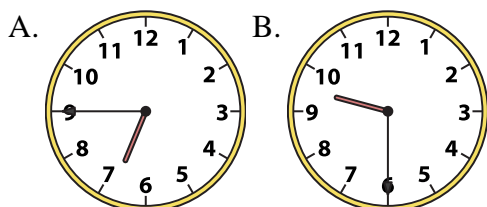
9) 9:45



10) 9:30



11) 9:30



12) 3:30

