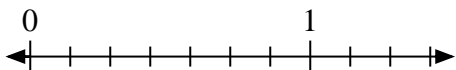


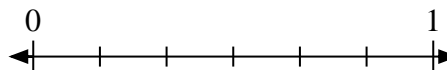


Solve each problem.

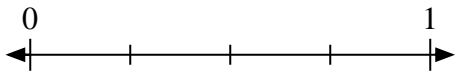
- 1) Mark the location of
- $\frac{1}{7}$



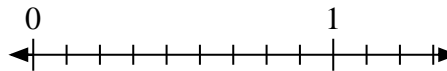
- 2) Mark the location of
- $\frac{3}{6}$



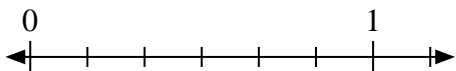
- 3) Mark the location of
- $\frac{1}{4}$



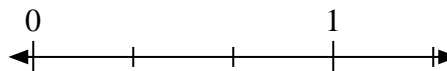
- 4) Mark the location of
- $\frac{4}{9}$



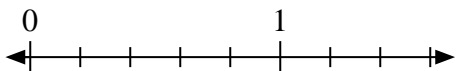
- 5) Mark the location of
- $\frac{4}{6}$



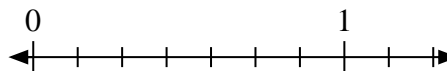
- 6) Mark the location of
- $\frac{0}{3}$



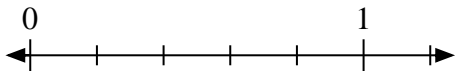
- 7) Mark the location of
- $\frac{4}{5}$



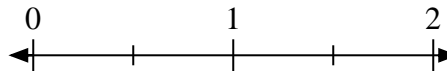
- 8) Mark the location of
- $\frac{0}{7}$



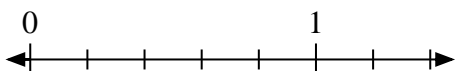
- 9) Mark the location of
- $\frac{1}{5}$



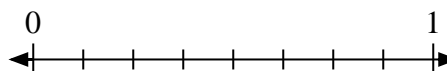
- 10) Mark the location of
- $\frac{1}{2}$



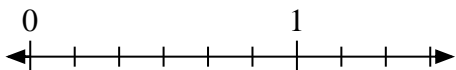
- 11) Mark the location of
- $\frac{0}{5}$



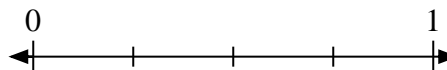
- 12) Mark the location of
- $\frac{7}{8}$



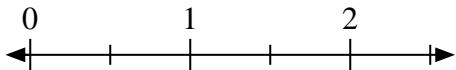
- 13) Mark the location of
- $\frac{0}{6}$



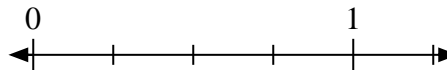
- 14) Mark the location of
- $\frac{0}{4}$



- 15) Mark the location of
- $\frac{2}{2}$



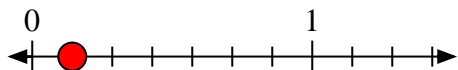
- 16) Mark the location of
- $\frac{4}{4}$



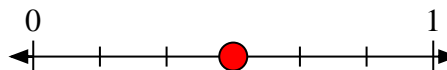


Solve each problem.

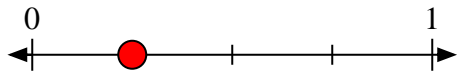
1) Mark the location of $\frac{1}{7}$



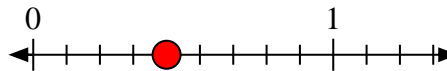
2) Mark the location of $\frac{3}{6}$



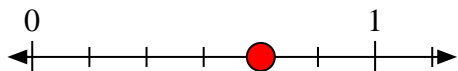
3) Mark the location of $\frac{1}{4}$



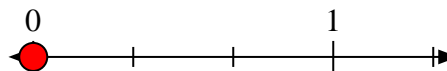
4) Mark the location of $\frac{4}{9}$



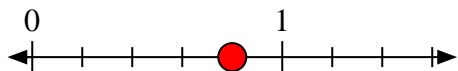
5) Mark the location of $\frac{4}{6}$



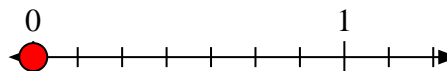
6) Mark the location of $\frac{0}{3}$



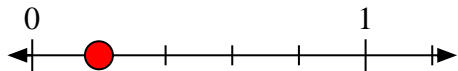
7) Mark the location of $\frac{4}{5}$



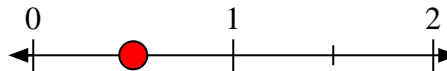
8) Mark the location of $\frac{0}{7}$




9) Mark the location of $\frac{1}{5}$



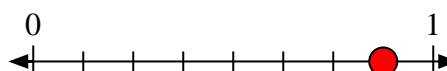
10) Mark the location of $\frac{1}{2}$




11) Mark the location of $\frac{0}{5}$



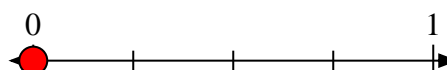
12) Mark the location of $\frac{7}{8}$



13) Mark the location of $\frac{0}{6}$



14) Mark the location of $\frac{0}{4}$



15) Mark the location of $\frac{2}{2}$



16) Mark the location of $\frac{4}{4}$

