



Solve each problem.

Ex) Express the moons as a fraction of the entire set.



1) Express the stars as a fraction of the entire set.



Answers

Ex. $\frac{15}{22}$

1. _____

2. _____

3. _____

4. _____

5. _____

6. _____

7. _____

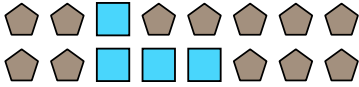
8. _____

9. _____


10. _____

11. _____


2) Express the squares as a fraction of the entire set.




3) Express the hearts as a fraction of the entire set.



4) Express the stars as a fraction of the entire set.



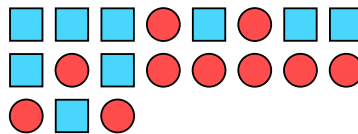
5) Express the hearts as a fraction of the entire set.



6) Express the moons as a fraction of the entire set.




7) Express the squares as a fraction of the entire set.



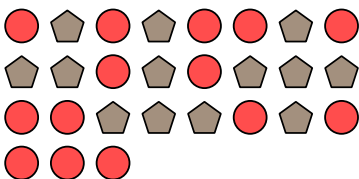
8) Express the stars as a fraction of the entire set.




9) Express the triangles as a fraction of the entire set.



10) Express the circles as a fraction of the entire set.



11) Express the stars as a fraction of the entire set.





Solve each problem.

Ex) Express the moons as a fraction of the entire set.



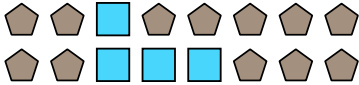
1) Express the stars as a fraction of the entire set.




Answers

Ex. $\frac{15}{22}$

2) Express the squares as a fraction of the entire set.



3) Express the hearts as a fraction of the entire set.



1. $\frac{3}{13}$


2. $\frac{4}{16}$

3. $\frac{6}{9}$


4. $\frac{2}{17}$

5. $\frac{9}{19}$

4) Express the stars as a fraction of the entire set.



5) Express the hearts as a fraction of the entire set.

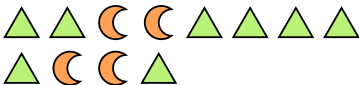


6. $\frac{4}{12}$

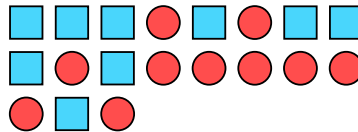
7. $\frac{9}{19}$

8. $\frac{2}{10}$

6) Express the moons as a fraction of the entire set.



7) Express the squares as a fraction of the entire set.



9. $\frac{6}{11}$


10. $\frac{14}{27}$

11. $\frac{7}{17}$

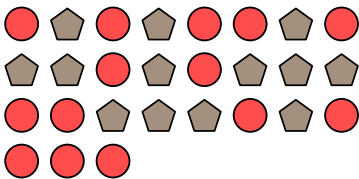
8) Express the stars as a fraction of the entire set.



9) Express the triangles as a fraction of the entire set.



10) Express the circles as a fraction of the entire set.



11) Express the stars as a fraction of the entire set.

