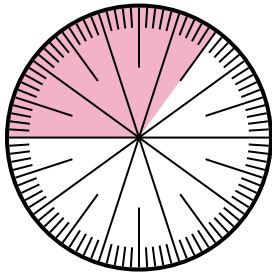


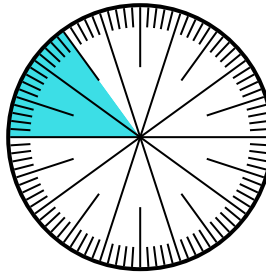


Solve each problem.

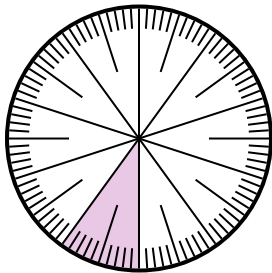
- 1) Express the shaded portion as a fraction of the whole with a 100 as the denominator.



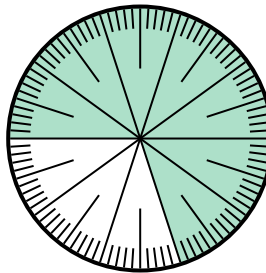
- 2) Express the shaded portion as a decimal of the whole.



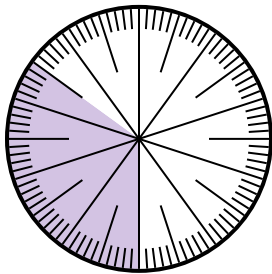
- 3) Express the shaded portion as a decimal of the whole.



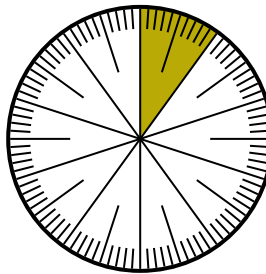
- 4) Express the un-shaded portion as a fraction of the whole with a 100 as the denominator.



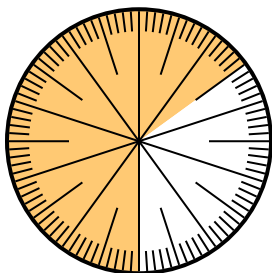
- 5) Express the shaded portion as a decimal of the whole.



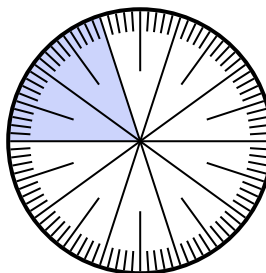
- 6) Express the un-shaded portion as a decimal of the whole.



- 7) Express the un-shaded portion as a decimal of the whole.



- 8) Express the un-shaded portion as a fraction of the whole with a 100 as the denominator.



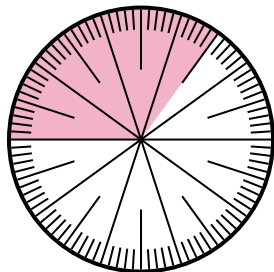
Answers

1. _____
2. _____
3. _____
4. _____
5. _____
6. _____
7. _____
8. _____

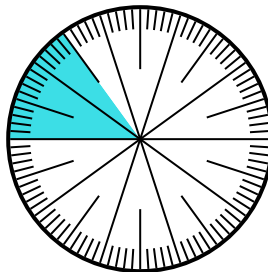


Solve each problem.

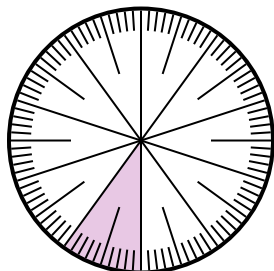
- 1) Express the shaded portion as a fraction of the whole with a 100 as the denominator.



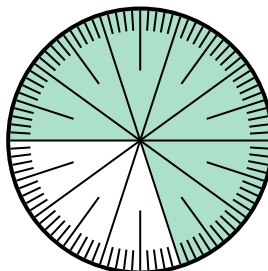
- 2) Express the shaded portion as a decimal of the whole.



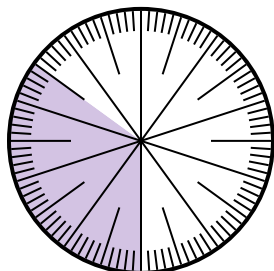
- 3) Express the shaded portion as a decimal of the whole.



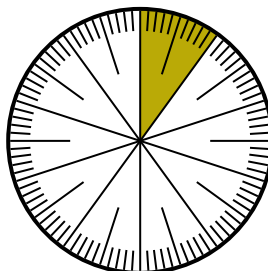
- 4) Express the un-shaded portion as a fraction of the whole with a 100 as the denominator.



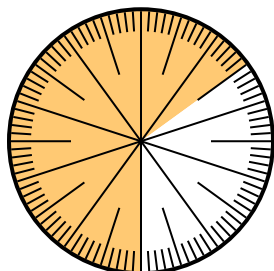
- 5) Express the shaded portion as a decimal of the whole.



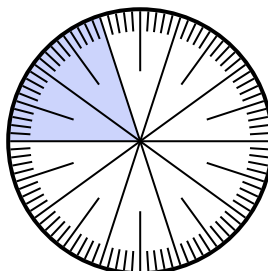
- 6) Express the un-shaded portion as a decimal of the whole.



- 7) Express the un-shaded portion as a decimal of the whole.



- 8) Express the un-shaded portion as a fraction of the whole with a 100 as the denominator.



Answers

1. $\frac{25}{100}$
2. **0.15**
3. **0.1**
4. $\frac{30}{100}$
5. **0.35**
6. **0.9**
7. **0.35**
8. $\frac{80}{100}$