

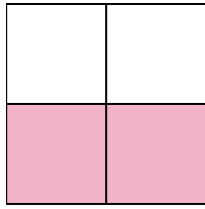


Write the shaded amount as a fraction.

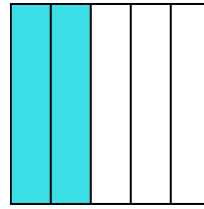
Ex)



1)



2)




Answers

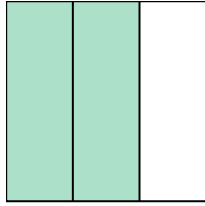
Ex. $\frac{1}{4}$

- 1. _____
- 2. _____
- 3. _____
- 4. _____
- 5. _____
- 6. _____
- 7. _____
- 8. _____
- 9. _____
- 10. _____
- 11. _____
- 12. _____
- 13. _____
- 14. _____

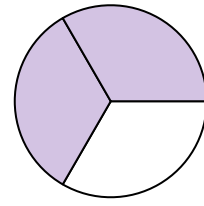
3)



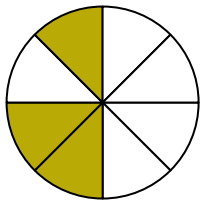
4)



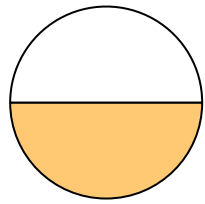
5)



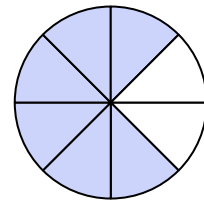
6)




7)




8)




9)




10)



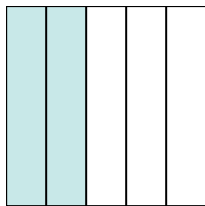
11)



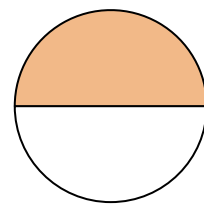
12)



13)

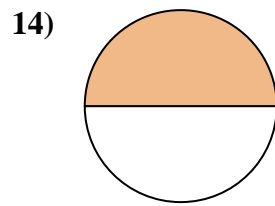
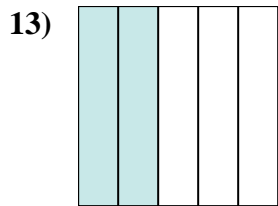
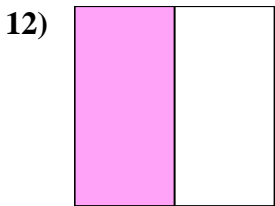
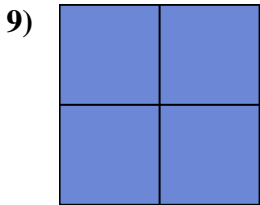
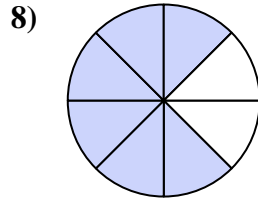
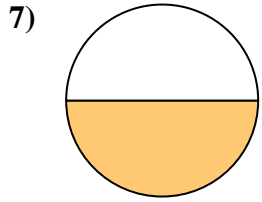
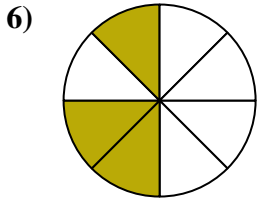
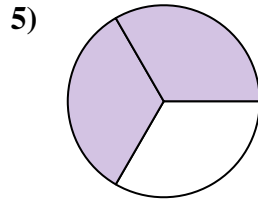
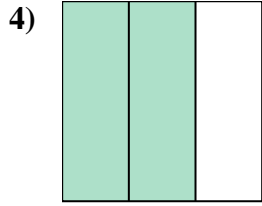
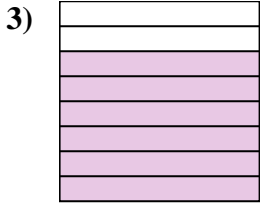
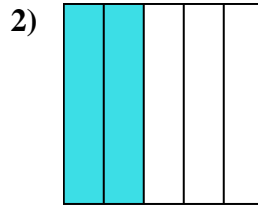
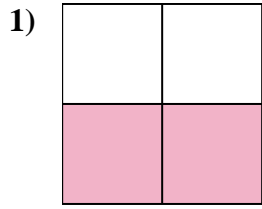
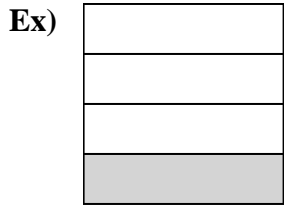


14)





Write the shaded amount as a fraction.



Answers

Ex. 1/4

1. 2/4

2. 2/5

3. 6/8

4. 2/3

5. 2/3

6. 3/8

7. 1/2

8. 6/8

9. 4/4

10. 1/3

11. 5/5

12. 1/2

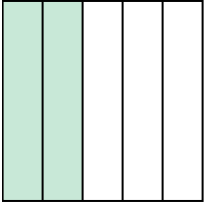
13. 2/5

14. 1/2



Write the shaded amount as a fraction.

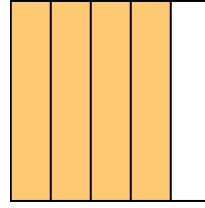
Ex)



1)



2)



Answers

Ex. $\frac{2}{5}$

1. _____

2. _____

3. _____

4. _____

5. _____

6. _____

7. _____

8. _____

9. _____

10. _____

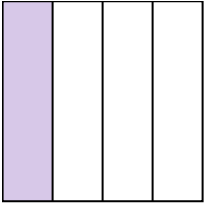
11. _____

12. _____


13. _____

14. _____

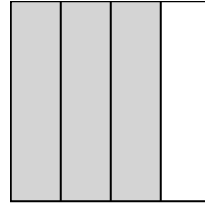
3)



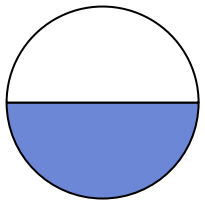
4)



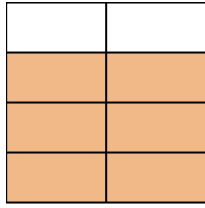
5)



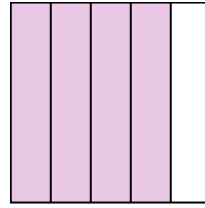
6)



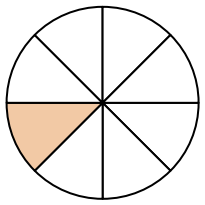
7)



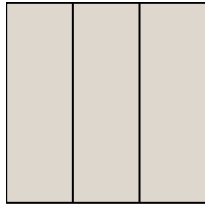
8)




9)




10)



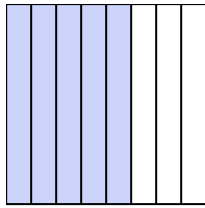
11)



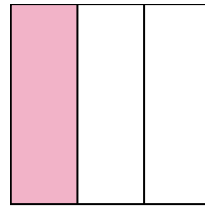
12)



13)

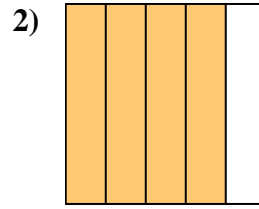
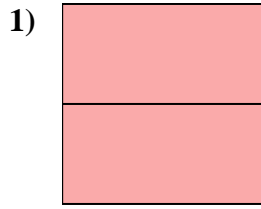
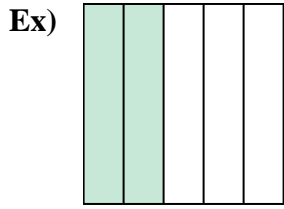


14)

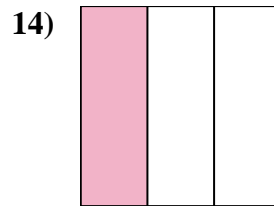
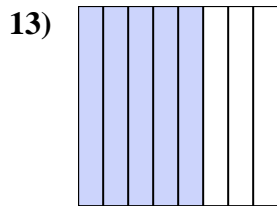
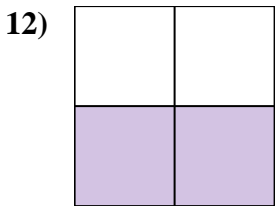
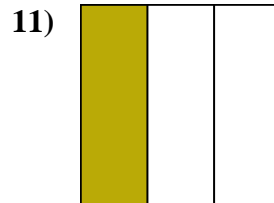
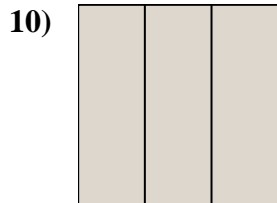
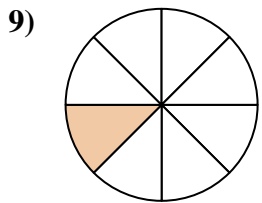
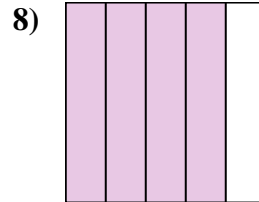
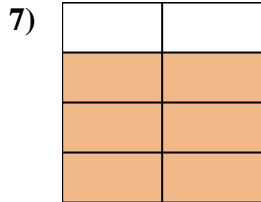
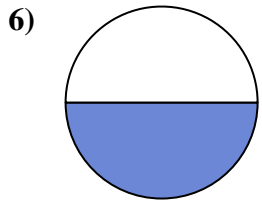
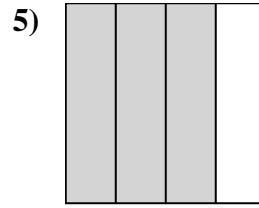
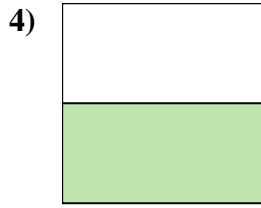
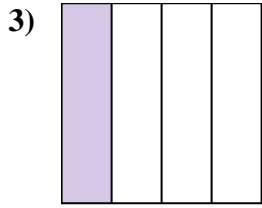




Write the shaded amount as a fraction.



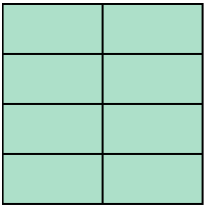
- Answers**
- Ex. 2/5
1. 2/2
2. 4/5
3. 1/4
4. 1/2
5. 3/4
6. 1/2
7. 6/8
8. 4/5
9. 1/8
10. 3/3
11. 1/3
12. 2/4
13. 5/8
14. 1/3






Write the shaded amount as a fraction.

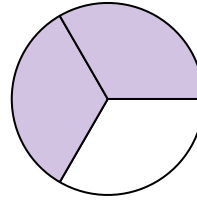
Ex)



1)



2)

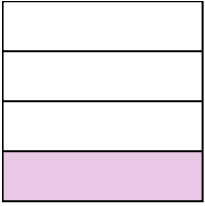


Answers

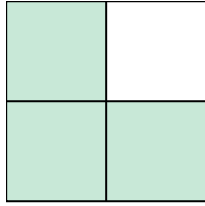
Ex. $\frac{8}{8}$

- 1. _____
- 2. _____
- 3. _____
- 4. _____
- 5. _____
- 6. _____
- 7. _____
- 8. _____
- 9. _____
- 10. _____
- 11. _____
- 12. _____
- 13. _____
- 14. _____


3)



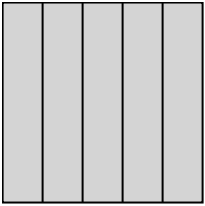
4)



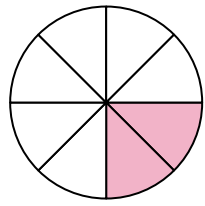
5)




6)




7)



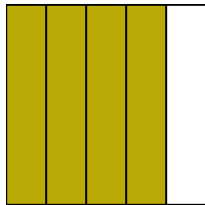
8)




9)




10)




11)




12)



13)



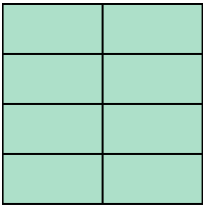
14)






Write the shaded amount as a fraction.

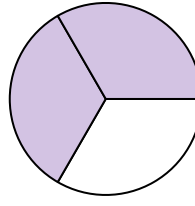
Ex)



1)



2)



Answers

Ex. $\frac{8}{8}$

1. $\frac{2}{2}$

2. $\frac{2}{3}$

3. $\frac{1}{4}$

4. $\frac{3}{4}$

5. $\frac{2}{2}$

6. $\frac{5}{5}$

7. $\frac{2}{8}$

8. $\frac{1}{4}$

9. $\frac{3}{8}$

10. $\frac{4}{5}$

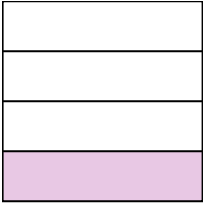
11. $\frac{1}{3}$

12. $\frac{1}{5}$

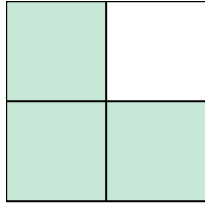
13. $\frac{2}{2}$

14. $\frac{3}{3}$


3)



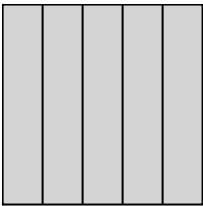
4)



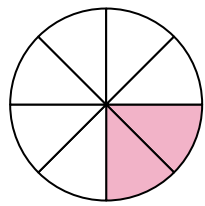
5)




6)




7)



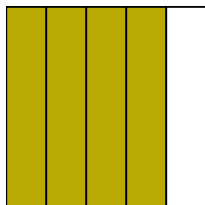
8)




9)




10)




11)




12)



13)




14)






Write the shaded amount as a fraction.


Ex)



1)



2)




Answers

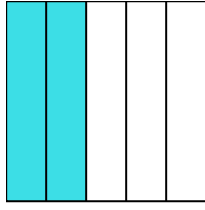
Ex. $\frac{4}{8}$

- 1. _____
- 2. _____
- 3. _____
- 4. _____
- 5. _____
- 6. _____
- 7. _____
- 8. _____
- 9. _____
- 10. _____
- 11. _____
- 12. _____
- 13. _____
- 14. _____


3)



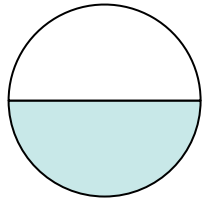
4)




5)




6)




7)



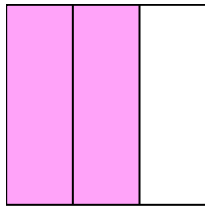
8)



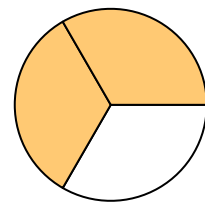
9)




10)



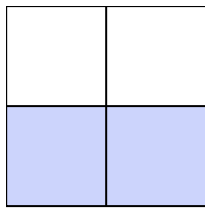
11)



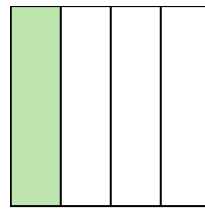
12)



13)

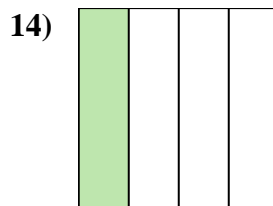
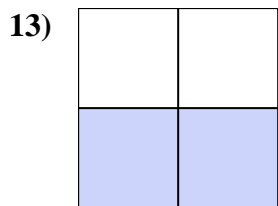
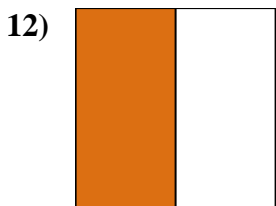
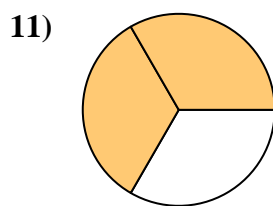
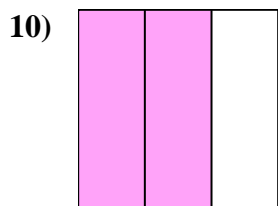
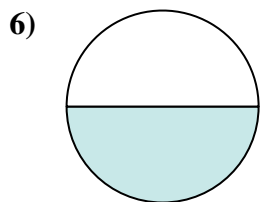
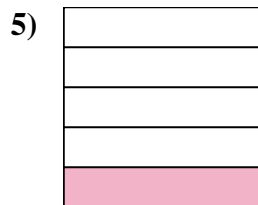
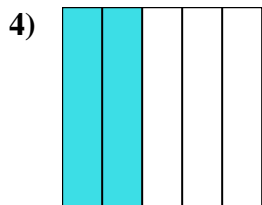
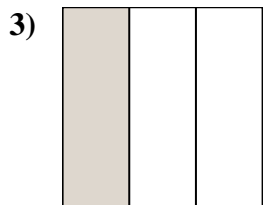
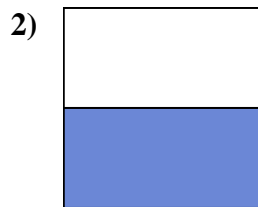




14)





Write the shaded amount as a fraction.



Answers

Ex. 4/8

1. 2/8

2. 1/2

3. 1/3

4. 2/5

5. 1/5

6. 1/2

7. 1/8

8. 1/5

9. 4/4

10. 2/3

11. 2/3

12. 1/2


13. 2/4

14. 1/4

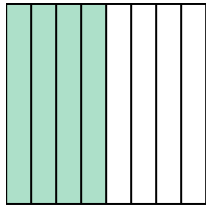


Write the shaded amount as a fraction.


Ex)



1)



2)



Answers

Ex. $\frac{1}{2}$

1. _____

2. _____

3. _____

4. _____

5. _____

6. _____

7. _____

8. _____

9. _____

10. _____

11. _____

12. _____

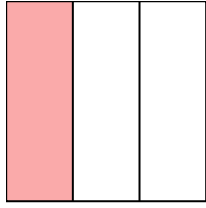
13. _____

14. _____


3)



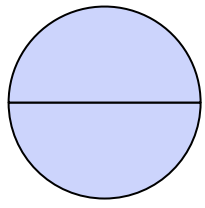
4)



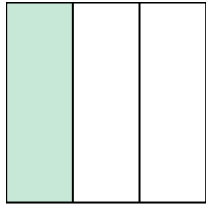
5)



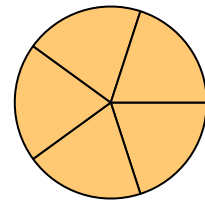
6)



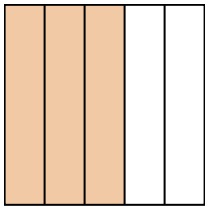
7)




8)




9)




10)



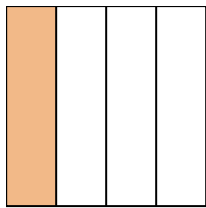
11)



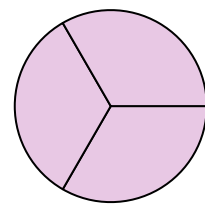
12)



13)

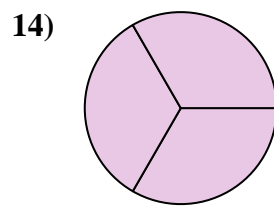
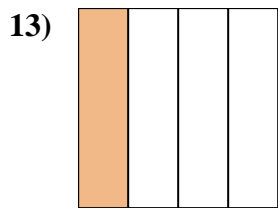
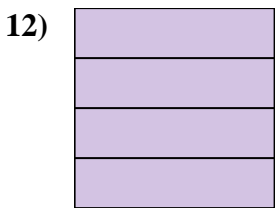
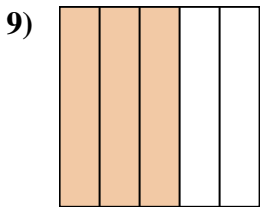
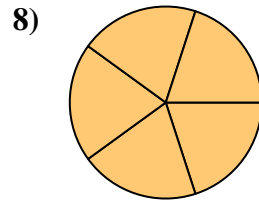
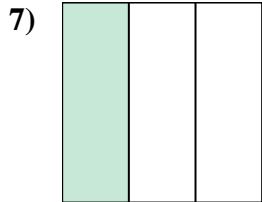
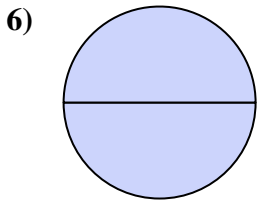
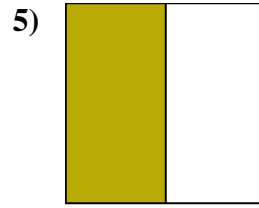
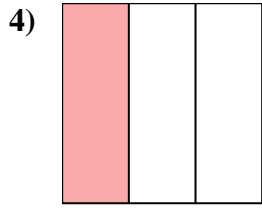
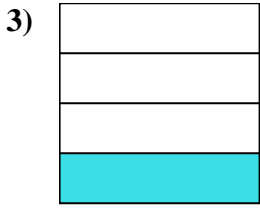
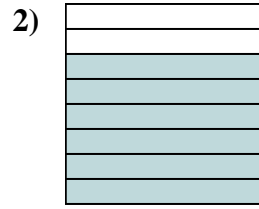
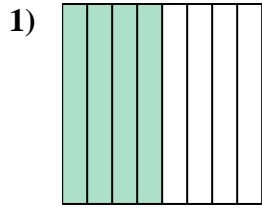
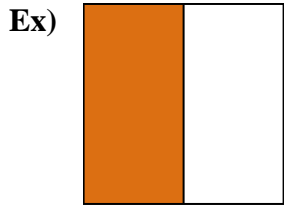


14)





Write the shaded amount as a fraction.



Answers

Ex. 1/2

1. 4/8

2. 6/8

3. 1/4

4. 1/3

5. 1/2

6. 2/2

7. 1/3

8. 5/5

9. 3/5

10. 3/5

11. 7/8

12. 4/4

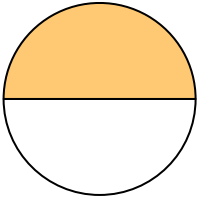
13. 1/4

14. 3/3




Write the shaded amount as a fraction.

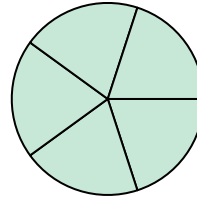
Ex)



1)



2)

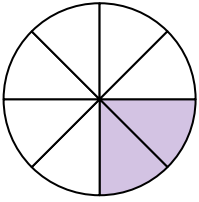


Answers


Ex. $\frac{1}{2}$

- 1. _____
- 2. _____
- 3. _____
- 4. _____
- 5. _____
- 6. _____
- 7. _____
- 8. _____
- 9. _____
- 10. _____
- 11. _____
- 12. _____
- 13. _____
- 14. _____


3)



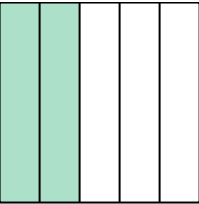
4)




5)



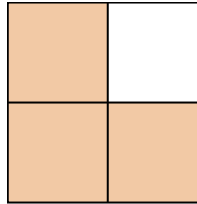
6)




7)




8)




9)



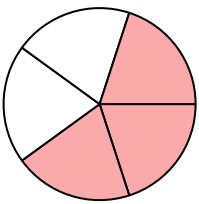
10)




11)



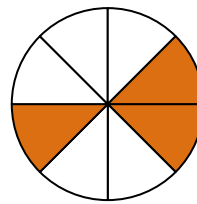
12)



13)



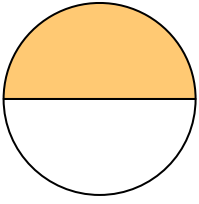
14)






Write the shaded amount as a fraction.

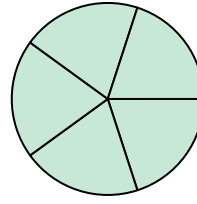
Ex)



1)



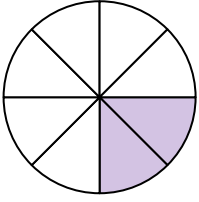
2)




Answers

Ex. $\frac{1}{2}$


3)



4)



5)



1. $\frac{3}{3}$

2. $\frac{5}{5}$

3. $\frac{2}{8}$

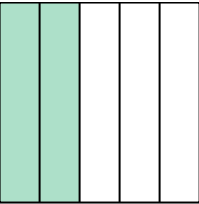
4. $\frac{3}{3}$

5. $\frac{1}{8}$


6. $\frac{2}{5}$

7. $\frac{4}{4}$

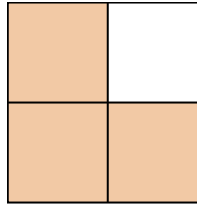
6)



7)



8)




8. $\frac{3}{4}$

9. $\frac{2}{2}$


10. $\frac{4}{4}$

11. $\frac{3}{3}$


9)



10)



11)

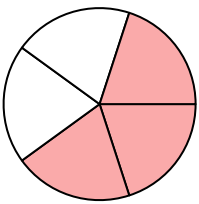


12. $\frac{3}{5}$


13. $\frac{1}{2}$

14. $\frac{3}{8}$

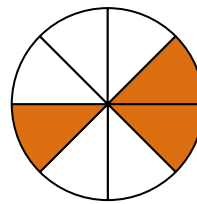
12)



13)



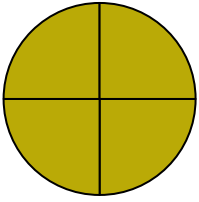
14)






Write the shaded amount as a fraction.

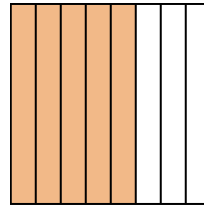
Ex)



1)



2)

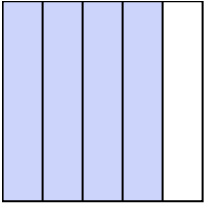


Answers

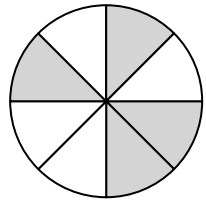
Ex. $\frac{4}{4}$

- 1. _____
- 2. _____
- 3. _____
- 4. _____
- 5. _____
- 6. _____
- 7. _____
- 8. _____
- 9. _____
- 10. _____
- 11. _____
- 12. _____
- 13. _____
- 14. _____

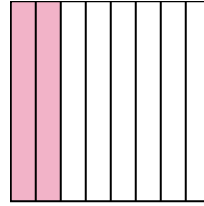
3)




4)



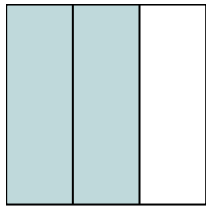
5)



6)



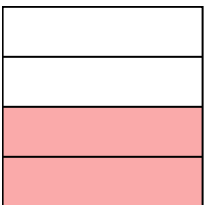
7)




8)



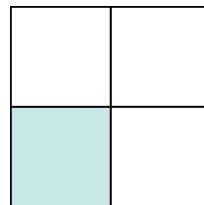
9)




10)




11)




12)



13)



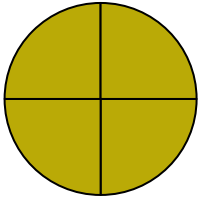
14)



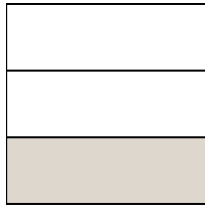


Write the shaded amount as a fraction.

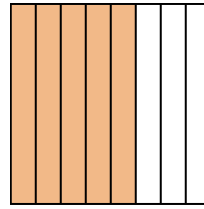
Ex)



1)



2)



Answers

Ex. 4/4

1. 1/3

2. 5/8

3. 4/5

4. 4/8

5. 2/8

6. 1/2

7. 2/3

8. 5/5

9. 2/4

10. 1/2

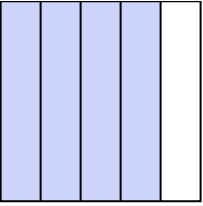
11. 1/4

12. 2/2

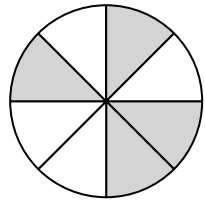
13. 1/5

14. 1/3

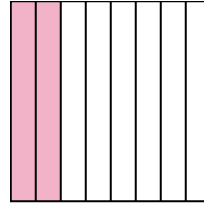
3)




4)



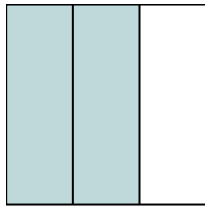
5)



6)



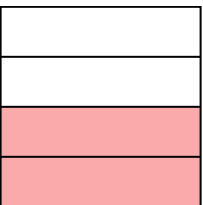
7)




8)



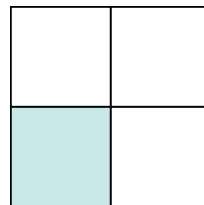
9)




10)



11)




12)



13)



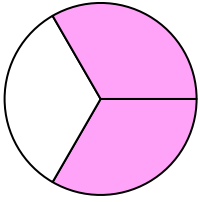
14)



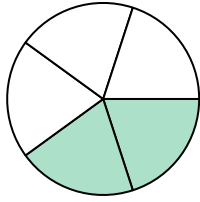


Write the shaded amount as a fraction.

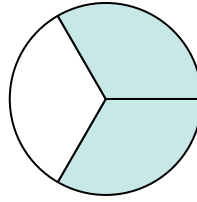
Ex)



1)



2)



Answers

Ex. $\frac{2}{3}$

1. _____

2. _____

3. _____

4. _____

5. _____

6. _____

7. _____

8. _____

9. _____

10. _____

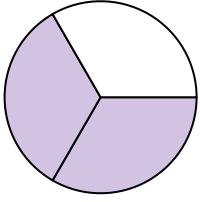
11. _____

12. _____

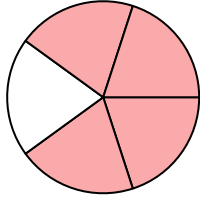
13. _____

14. _____


3)




4)



5)




6)



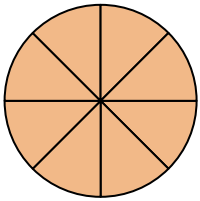
7)



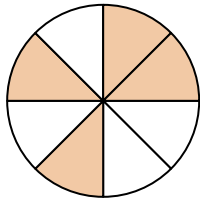
8)




9)



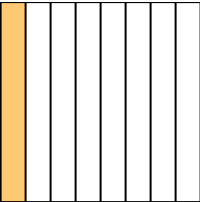
10)



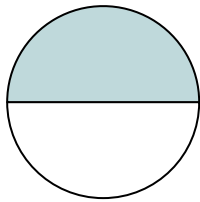
11)



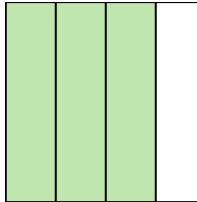
12)



13)

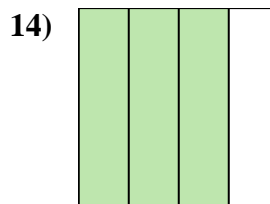
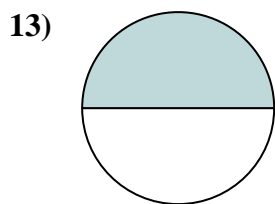
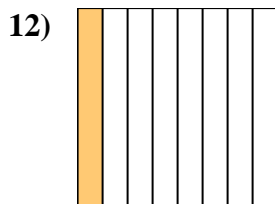
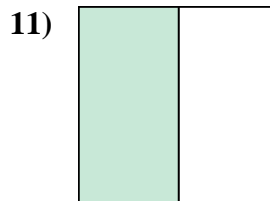
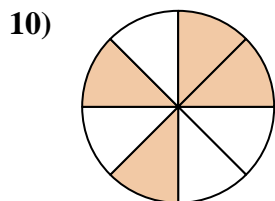
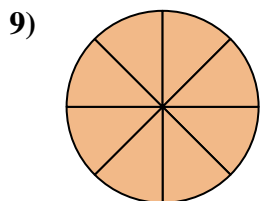
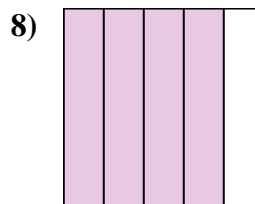
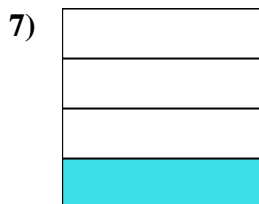
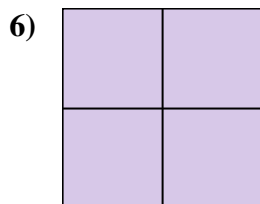
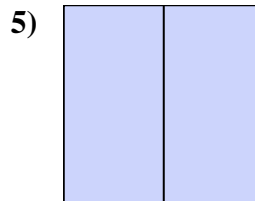
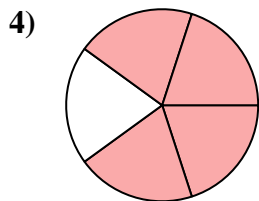
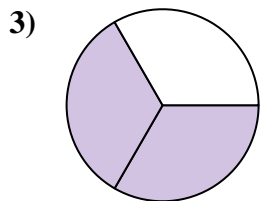
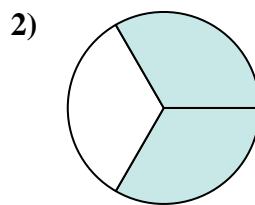
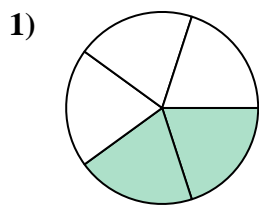
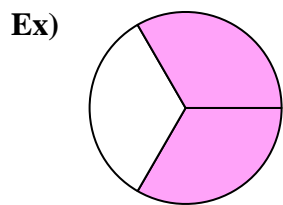


14)





Write the shaded amount as a fraction.



Answers

Ex. 2/3

1. 2/5

2. 2/3

3. 2/3

4. 4/5

5. 2/2

6. 4/4

7. 1/4

8. 4/5

9. 8/8

10. 4/8

11. 1/2

12. 1/8


13. 1/2

14. 3/4

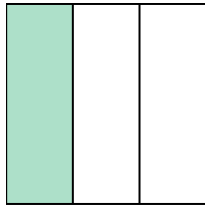


Write the shaded amount as a fraction.

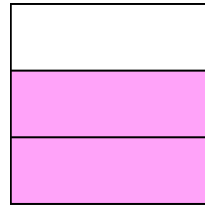
Ex)



1)



2)



Answers

Ex. $\frac{7}{8}$

1. _____

2. _____

3. _____

4. _____

5. _____

6. _____

7. _____

8. _____

9. _____

10. _____

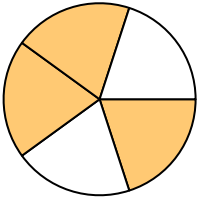
11. _____

12. _____


13. _____

14. _____


3)



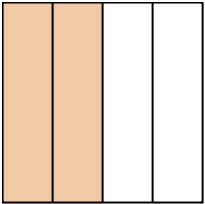
4)



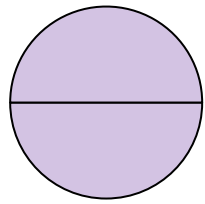
5)



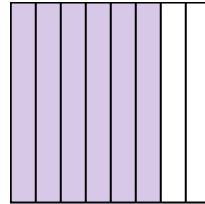
6)




7)



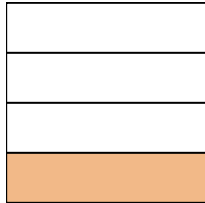
8)



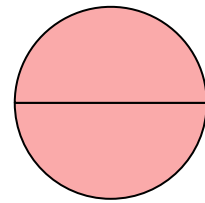
9)




10)




11)




12)



13)

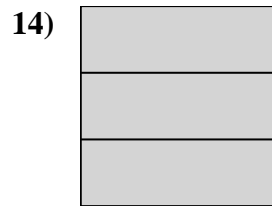

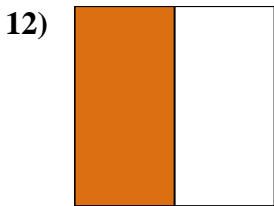
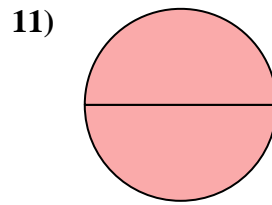
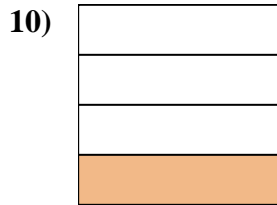

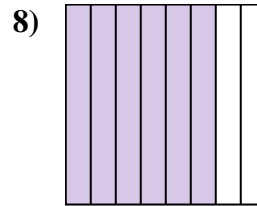
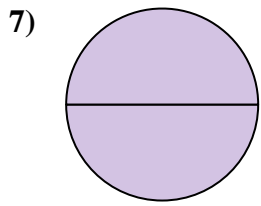
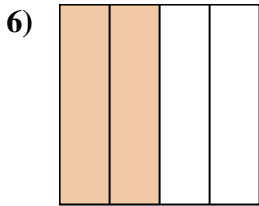
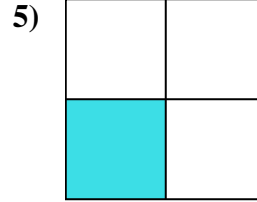
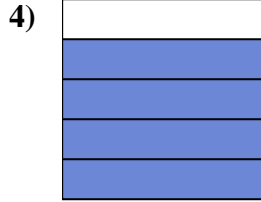
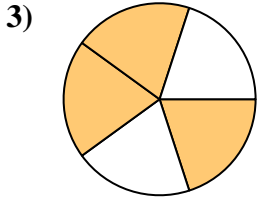
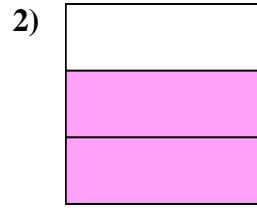
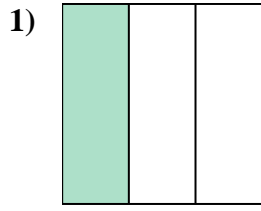



14)





Write the shaded amount as a fraction.



Answers

Ex. 7/8

1. 1/3

2. 2/3

3. 3/5

4. 4/5

5. 1/4

6. 2/4

7. 2/2

8. 6/8

9. 4/5

10. 1/4

11. 2/2

12. 1/2

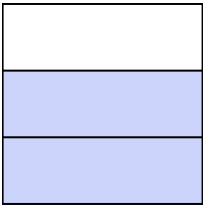
13. 5/8

14. 3/3




Write the shaded amount as a fraction.

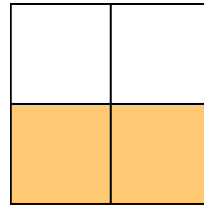
Ex)



1)



2)




Answers

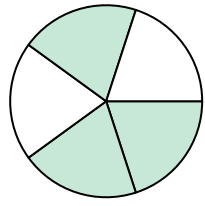
Ex. $\frac{2}{3}$

- 1. _____
- 2. _____
- 3. _____
- 4. _____
- 5. _____
- 6. _____
- 7. _____
- 8. _____
- 9. _____
- 10. _____
- 11. _____
- 12. _____
- 13. _____
- 14. _____


3)



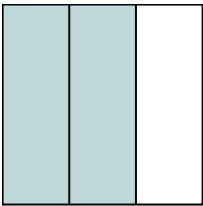
4)



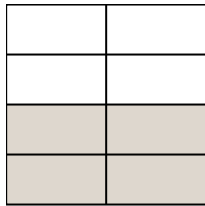
5)



6)



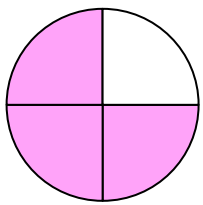
7)



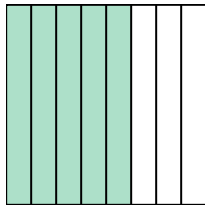
8)



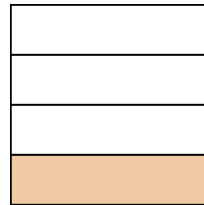
9)




10)



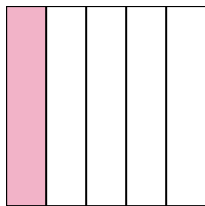
11)




12)



13)

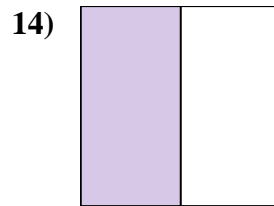
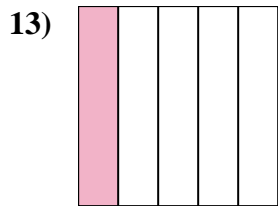
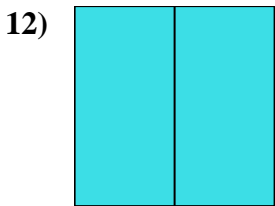
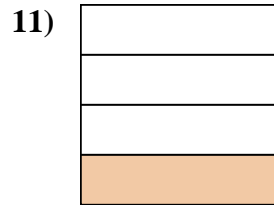
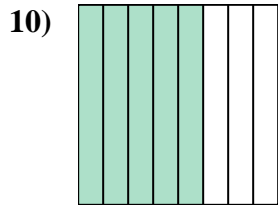
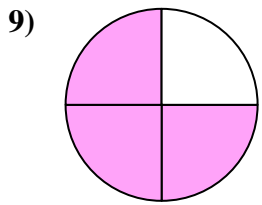
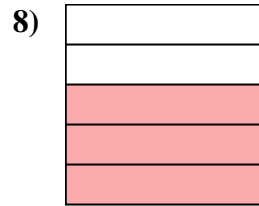
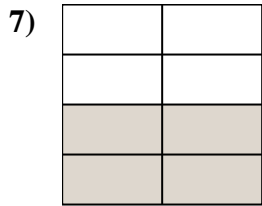
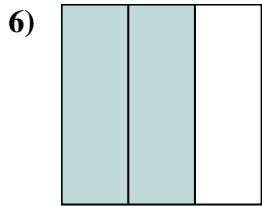
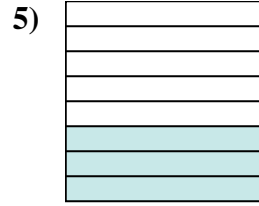
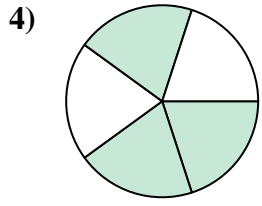
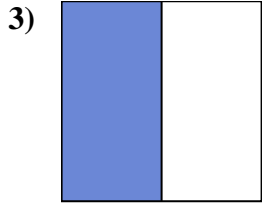
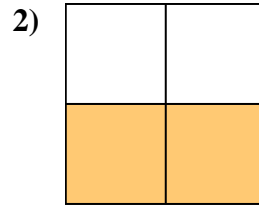
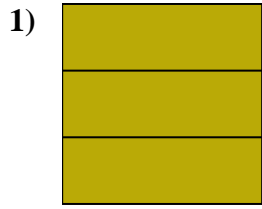
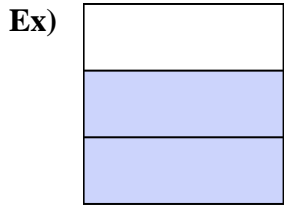


14)





Write the shaded amount as a fraction.



Answers

Ex. 2/3

1. 3/3

2. 2/4

3. 1/2

4. 3/5

5. 3/8

6. 2/3

7. 4/8

8. 3/5

9. 3/4

10. 5/8

11. 1/4

12. 2/2

13. 1/5

14. 1/2