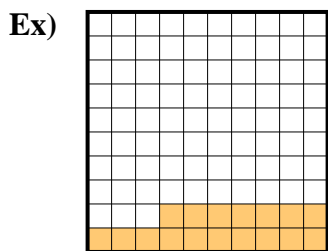
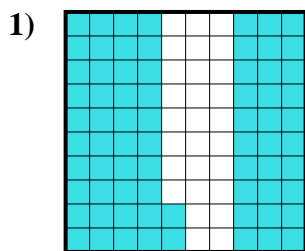




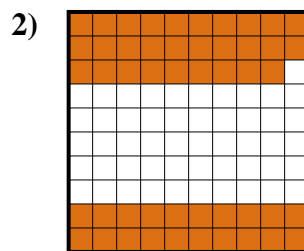
Determine the value written as a fraction , decimal & a percent.




fraction $\frac{17}{100}$
 decimal 0.17
 percent 17



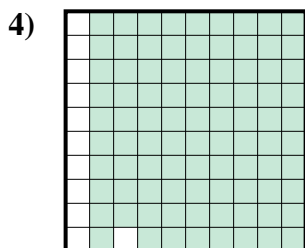
fraction $\frac{72}{100}$
 decimal 0.72
 percent 72



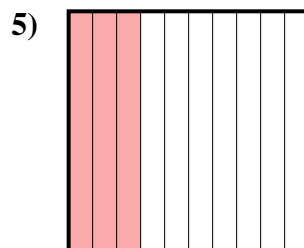
fraction $\frac{49}{100}$
 decimal 0.49
 percent 49



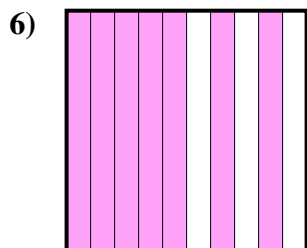
fraction $\frac{4}{10}$
 decimal 0.4
 percent 40



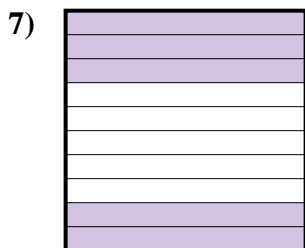
fraction $\frac{89}{100}$
 decimal 0.89
 percent 89



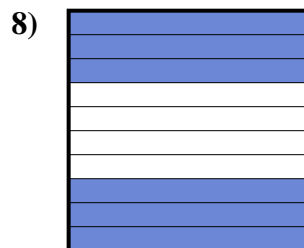
fraction $\frac{3}{10}$
 decimal 0.3
 percent 30




fraction $\frac{7}{10}$
 decimal 0.7
 percent 70




fraction $\frac{5}{10}$
 decimal 0.5
 percent 50



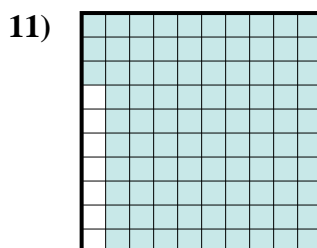
fraction $\frac{6}{10}$
 decimal 0.6
 percent 60



fraction $\frac{8}{10}$
 decimal 0.8
 percent 80



fraction $\frac{1}{10}$
 decimal 0.1
 percent 10



fraction $\frac{93}{100}$
 decimal 0.93
 percent 93

Answers

- Ex. $\frac{17}{100}$ **0.17** **17%**
 1. $\frac{72}{100}$ **0.72** **72%**
 2. $\frac{49}{100}$ **0.49** **49%**
 3. $\frac{4}{10}$ **0.4** **40%**
 4. $\frac{89}{100}$ **0.89** **89%**
 5. $\frac{3}{10}$ **0.3** **30%**
 6. $\frac{7}{10}$ **0.7** **70%**
 7. $\frac{5}{10}$ **0.5** **50%**
 8. $\frac{6}{10}$ **0.6** **60%**
 9. $\frac{8}{10}$ **0.8** **80%**
 10. $\frac{1}{10}$ **0.1** **10%**
 11. $\frac{93}{100}$ **0.93** **93%**