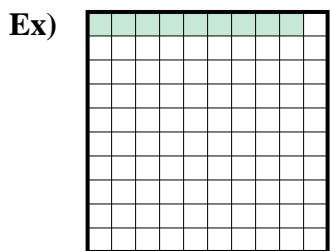


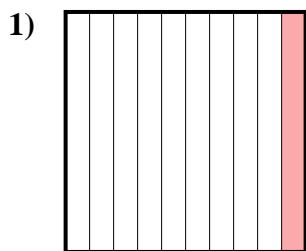




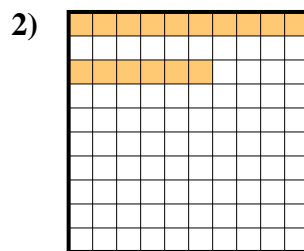
Determine the value written as a fraction , decimal & a percent.



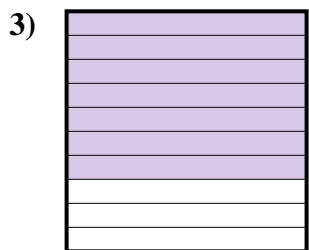
fraction  $\frac{9}{100}$   
 decimal  $0.09$   
 percent  $9$



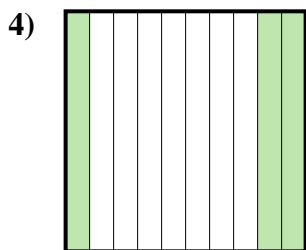
fraction  $\frac{1}{10}$   
 decimal  $0.1$   
 percent  $10$



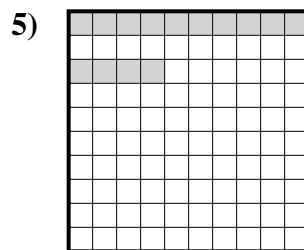
fraction  $\frac{16}{100}$   
 decimal  $0.16$   
 percent  $16$



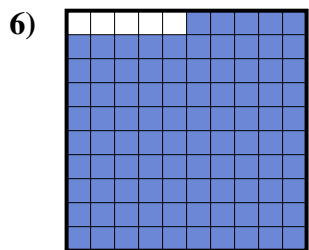
fraction  $\frac{7}{10}$   
 decimal  $0.7$   
 percent  $70$



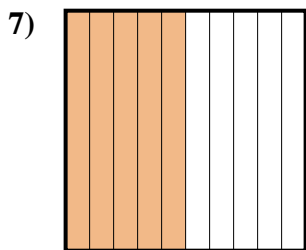
fraction  $\frac{3}{10}$   
 decimal  $0.3$   
 percent  $30$



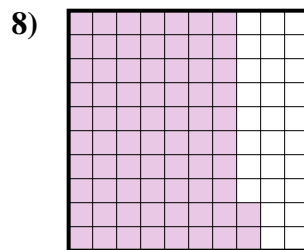
fraction  $\frac{14}{100}$   
 decimal  $0.14$   
 percent  $14$




fraction  $\frac{95}{100}$   
 decimal  $0.95$   
 percent  $95$



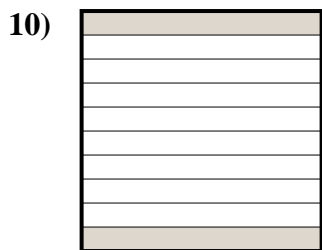
fraction  $\frac{5}{10}$   
 decimal  $0.5$   
 percent  $50$



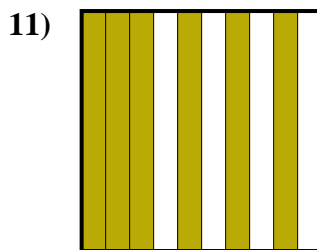
fraction  $\frac{72}{100}$   
 decimal  $0.72$   
 percent  $72$



fraction  $\frac{4}{10}$   
 decimal  $0.4$   
 percent  $40$



fraction  $\frac{2}{10}$   
 decimal  $0.2$   
 percent  $20$



fraction  $\frac{6}{10}$   
 decimal  $0.6$   
 percent  $60$

**Answers**

Ex.	$\frac{9}{100}$	<b>0.09</b>	<b>9%</b>
1.	$\frac{1}{10}$	<b>0.1</b>	<b>10%</b>
2.	$\frac{16}{100}$	<b>0.16</b>	<b>16%</b>
3.	$\frac{7}{10}$	<b>0.7</b>	<b>70%</b>
4.	$\frac{3}{10}$	<b>0.3</b>	<b>30%</b>
5.	$\frac{14}{100}$	<b>0.14</b>	<b>14%</b>
6.	$\frac{95}{100}$	<b>0.95</b>	<b>95%</b>
7.	$\frac{5}{10}$	<b>0.5</b>	<b>50%</b>
8.	$\frac{72}{100}$	<b>0.72</b>	<b>72%</b>
9.	$\frac{4}{10}$	<b>0.4</b>	<b>40%</b>
10.	$\frac{2}{10}$	<b>0.2</b>	<b>20%</b>
11.	$\frac{6}{10}$	<b>0.6</b>	<b>60%</b>