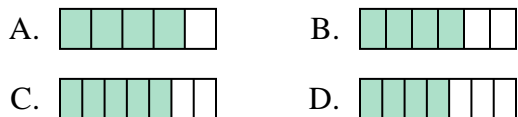




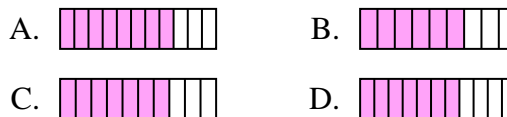
Determine which choice best answers each question.

Answers

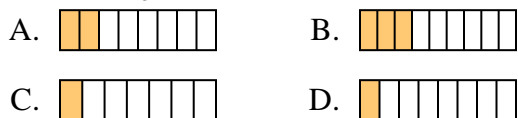
1) Which of the shapes below is shaded to represent $\frac{4}{6}$?



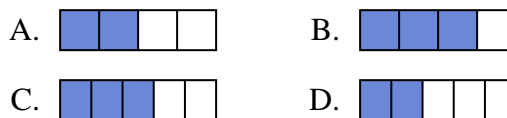
2) Which of the shapes below is shaded to represent $\frac{7}{10}$?



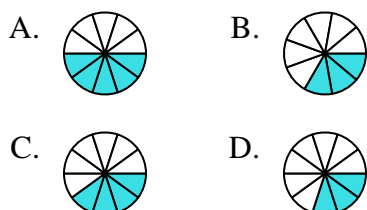
3) Which of the shapes below is shaded to represent $\frac{2}{8}$?



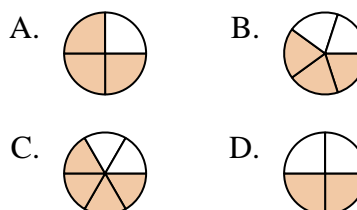
4) Which of the shapes below is shaded to represent $\frac{2}{4}$?



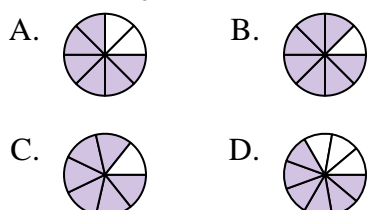
5) Which of the shapes below is shaded to represent $\frac{4}{10}$?



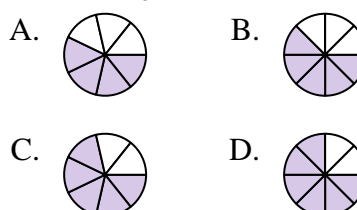
6) Which of the shapes below is shaded to represent $\frac{3}{5}$?



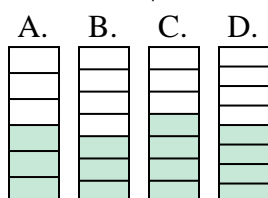
7) Which of the shapes below is shaded to represent $\frac{6}{8}$?



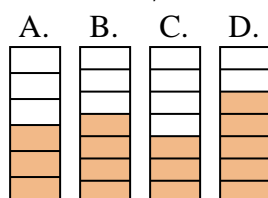
8) Which of the shapes below is shaded to represent $\frac{5}{8}$?



9) Which of the shapes below is shaded to represent $\frac{3}{7}$?



10) Which of the shapes below is shaded to represent $\frac{4}{7}$?

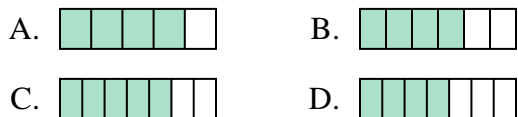


1. _____
2. _____
3. _____
4. _____
5. _____
6. _____
7. _____
8. _____
9. _____
10. _____

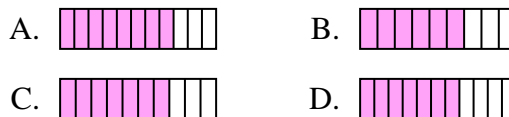


Determine which choice best answers each question.

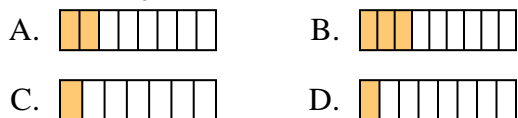
1) Which of the shapes below is shaded to represent $\frac{4}{6}$?



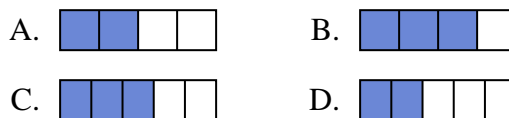
2) Which of the shapes below is shaded to represent $\frac{7}{10}$?



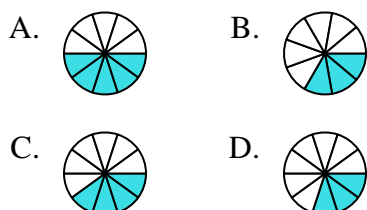
3) Which of the shapes below is shaded to represent $\frac{2}{8}$?



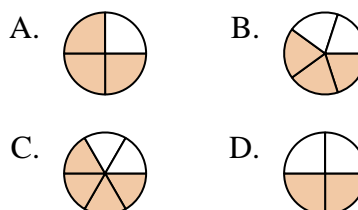
4) Which of the shapes below is shaded to represent $\frac{2}{4}$?



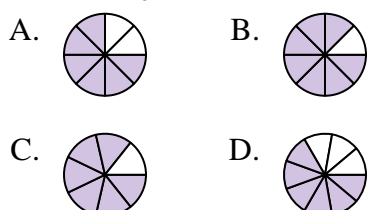
5) Which of the shapes below is shaded to represent $\frac{4}{10}$?



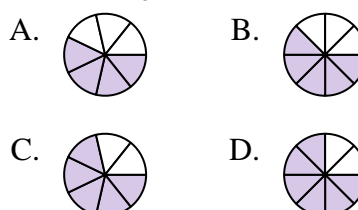
6) Which of the shapes below is shaded to represent $\frac{3}{5}$?



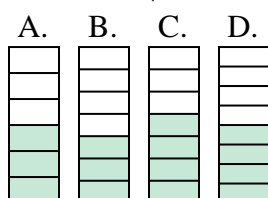
7) Which of the shapes below is shaded to represent $\frac{6}{8}$?



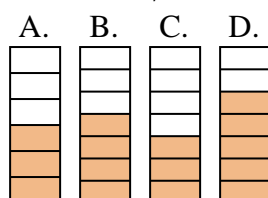
8) Which of the shapes below is shaded to represent $\frac{5}{8}$?



9) Which of the shapes below is shaded to represent $\frac{3}{7}$?



10) Which of the shapes below is shaded to represent $\frac{4}{7}$?



Answers

1. **B**
2. **C**
3. **A**
4. **A**
5. **C**
6. **B**
7. **A**
8. **B**
9. **B**
10. **B**