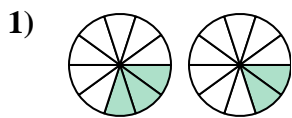


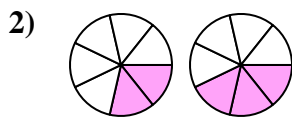


Determine which letter best compares the fractions shown.

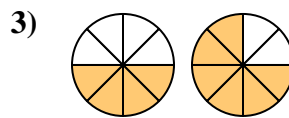
Answers



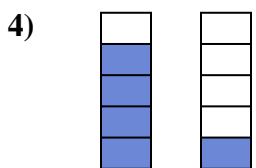
- A. $\frac{7}{3} < \frac{8}{2}$
- B. $\frac{7}{3} > \frac{8}{2}$
- C. $\frac{3}{10} > \frac{2}{10}$
- D. $\frac{3}{10} < \frac{2}{10}$



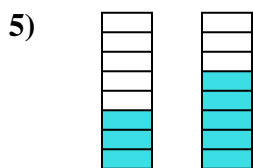
- A. $\frac{2}{7} > \frac{3}{7}$
- B. $\frac{5}{2} < \frac{4}{3}$
- C. $\frac{7}{2} > \frac{7}{3}$
- D. $\frac{2}{7} < \frac{3}{7}$



- A. $\frac{4}{4} < \frac{2}{6}$
- B. $\frac{4}{8} > \frac{6}{8}$
- C. $\frac{4}{8} < \frac{6}{8}$
- D. $\frac{4}{4} > \frac{2}{6}$



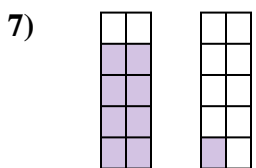
- A. $\frac{1}{4} > \frac{4}{1}$
- B. $\frac{4}{1} > \frac{1}{4}$
- C. $\frac{4}{5} > \frac{1}{5}$
- D. $\frac{5}{4} > \frac{5}{1}$



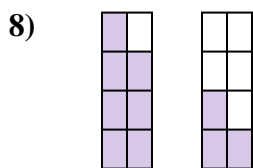
- A. $\frac{5}{3} > \frac{3}{5}$
- B. $\frac{3}{8} < \frac{5}{8}$
- C. $\frac{3}{8} > \frac{5}{8}$
- D. $\frac{8}{3} > \frac{8}{5}$



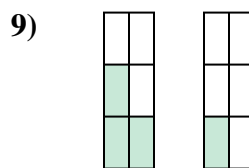
- A. $\frac{6}{3} > \frac{6}{2}$
- B. $\frac{3}{3} > \frac{4}{2}$
- C. $\frac{3}{3} < \frac{2}{4}$
- D. $\frac{3}{6} > \frac{2}{6}$



- A. $\frac{8}{10} < \frac{1}{10}$
- B. $\frac{8}{2} < \frac{1}{9}$
- C. $\frac{8}{10} > \frac{1}{10}$
- D. $\frac{8}{2} > \frac{1}{9}$



- A. $\frac{7}{8} > \frac{3}{8}$
- B. $\frac{8}{7} > \frac{8}{3}$
- C. $\frac{1}{7} > \frac{5}{3}$
- D. $\frac{7}{1} < \frac{3}{5}$



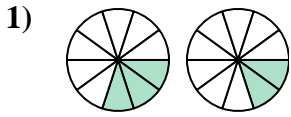
- A. $\frac{3}{3} < \frac{1}{5}$
- B. $\frac{3}{6} > \frac{1}{6}$
- C. $\frac{3}{3} > \frac{5}{1}$
- D. $\frac{3}{3} > \frac{1}{5}$

- 1. _____
- 2. _____
- 3. _____
- 4. _____
- 5. _____
- 6. _____
- 7. _____
- 8. _____
- 9. _____

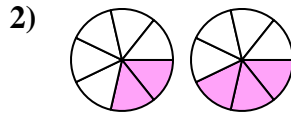


Determine which letter best compares the fractions shown.

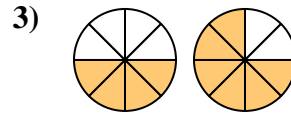
Answers



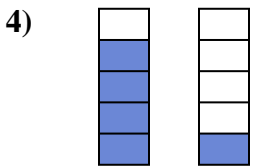
- A. $\frac{7}{3} < \frac{8}{2}$
- B. $\frac{7}{3} > \frac{8}{2}$
- C. $\frac{3}{10} > \frac{2}{10}$
- D. $\frac{3}{10} < \frac{2}{10}$



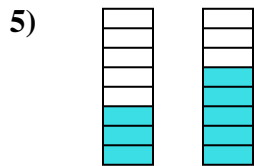
- A. $\frac{2}{7} > \frac{3}{7}$
- B. $\frac{5}{2} < \frac{4}{3}$
- C. $\frac{7}{2} > \frac{7}{3}$
- D. $\frac{2}{7} < \frac{3}{7}$



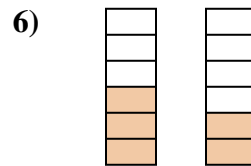
- A. $\frac{4}{4} < \frac{2}{6}$
- B. $\frac{4}{8} > \frac{6}{8}$
- C. $\frac{4}{8} < \frac{6}{8}$
- D. $\frac{4}{4} > \frac{2}{6}$



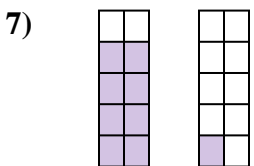
- A. $\frac{1}{4} > \frac{4}{1}$
- B. $\frac{4}{1} > \frac{1}{4}$
- C. $\frac{4}{5} > \frac{1}{5}$
- D. $\frac{5}{4} > \frac{5}{1}$



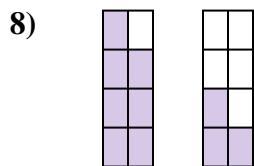
- A. $\frac{5}{3} > \frac{3}{5}$
- B. $\frac{3}{8} < \frac{5}{8}$
- C. $\frac{3}{8} > \frac{5}{8}$
- D. $\frac{8}{3} > \frac{8}{5}$



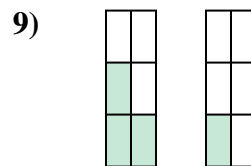
- A. $\frac{6}{3} > \frac{6}{2}$
- B. $\frac{3}{3} > \frac{4}{2}$
- C. $\frac{3}{3} < \frac{2}{4}$
- D. $\frac{3}{6} > \frac{2}{6}$



- A. $\frac{8}{10} < \frac{1}{10}$
- B. $\frac{8}{2} < \frac{1}{9}$
- C. $\frac{8}{10} > \frac{1}{10}$
- D. $\frac{8}{2} > \frac{1}{9}$



- A. $\frac{7}{8} > \frac{3}{8}$
- B. $\frac{8}{7} > \frac{8}{3}$
- C. $\frac{1}{7} > \frac{5}{3}$
- D. $\frac{7}{1} < \frac{3}{5}$



- A. $\frac{3}{3} < \frac{1}{5}$
- B. $\frac{3}{6} > \frac{1}{6}$
- C. $\frac{3}{3} > \frac{5}{1}$
- D. $\frac{3}{3} > \frac{1}{5}$

- 1. **C**
- 2. **D**
- 3. **C**
- 4. **C**
- 5. **B**
- 6. **D**
- 7. **C**
- 8. **A**
- 9. **B**