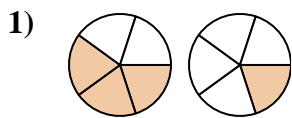


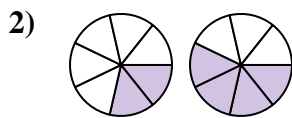


Determine which letter best compares the fractions shown.

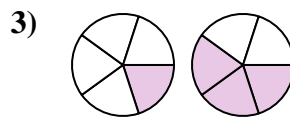
Answers



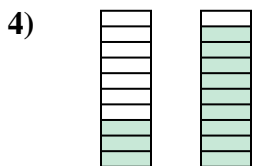
- A. $\frac{5}{3} > \frac{5}{1}$
- B. $\frac{3}{5} > \frac{1}{5}$
- C. $\frac{3}{5} < \frac{1}{5}$
- D. $\frac{3}{2} < \frac{1}{4}$



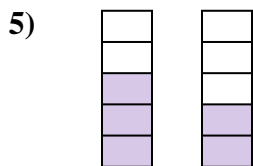
- A. $\frac{2}{7} < \frac{4}{7}$
- B. $\frac{2}{5} > \frac{4}{3}$
- C. $\frac{7}{2} > \frac{7}{4}$
- D. $\frac{2}{7} > \frac{4}{7}$



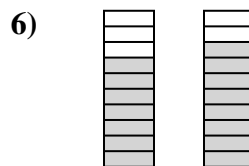
- A. $\frac{4}{1} > \frac{2}{3}$
- B. $\frac{1}{5} > \frac{3}{5}$
- C. $\frac{1}{5} < \frac{3}{5}$
- D. $\frac{5}{1} > \frac{5}{3}$



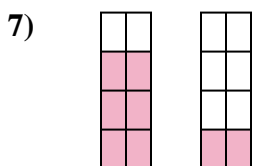
- A. $\frac{7}{3} < \frac{1}{9}$
- B. $\frac{3}{10} < \frac{9}{10}$
- C. $\frac{7}{3} > \frac{1}{9}$
- D. $\frac{10}{3} > \frac{10}{9}$



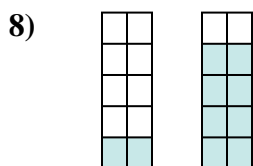
- A. $\frac{3}{2} > \frac{2}{3}$
- B. $\frac{2}{3} < \frac{3}{2}$
- C. $\frac{3}{2} < \frac{2}{3}$
- D. $\frac{3}{5} > \frac{2}{5}$



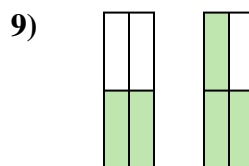
- A. $\frac{3}{7} < \frac{2}{8}$
- B. $\frac{7}{3} < \frac{8}{2}$
- C. $\frac{7}{10} < \frac{8}{10}$
- D. $\frac{10}{7} > \frac{10}{8}$



- A. $\frac{6}{8} > \frac{2}{8}$
- B. $\frac{6}{2} < \frac{2}{6}$
- C. $\frac{2}{6} > \frac{6}{2}$
- D. $\frac{6}{2} > \frac{2}{6}$



- A. $\frac{2}{10} < \frac{8}{10}$
- B. $\frac{2}{8} < \frac{8}{2}$
- C. $\frac{8}{2} < \frac{2}{8}$
- D. $\frac{8}{2} > \frac{2}{8}$

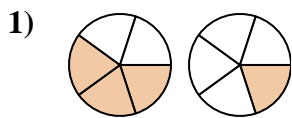


- A. $\frac{2}{4} < \frac{3}{4}$
- B. $\frac{2}{2} > \frac{1}{3}$
- C. $\frac{2}{2} < \frac{3}{1}$
- D. $\frac{4}{2} > \frac{4}{3}$

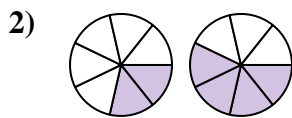
- 1. _____
- 2. _____
- 3. _____
- 4. _____
- 5. _____
- 6. _____
- 7. _____
- 8. _____
- 9. _____



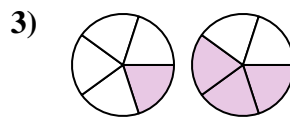
Determine which letter best compares the fractions shown.



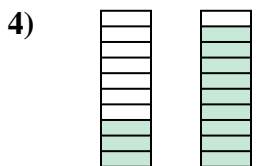
- A. $\frac{5}{3} > \frac{5}{1}$
- B. $\frac{3}{5} > \frac{1}{5}$
- C. $\frac{3}{5} < \frac{1}{5}$
- D. $\frac{3}{2} < \frac{1}{4}$



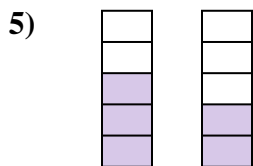
- A. $\frac{2}{7} < \frac{4}{7}$
- B. $\frac{2}{5} > \frac{4}{3}$
- C. $\frac{7}{2} > \frac{7}{4}$
- D. $\frac{2}{7} > \frac{4}{7}$



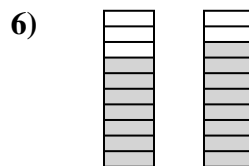
- A. $\frac{4}{1} > \frac{2}{3}$
- B. $\frac{1}{5} > \frac{3}{5}$
- C. $\frac{1}{5} < \frac{3}{5}$
- D. $\frac{5}{1} > \frac{5}{3}$



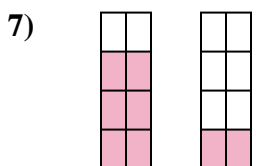
- A. $\frac{7}{3} < \frac{1}{9}$
- B. $\frac{3}{10} < \frac{9}{10}$
- C. $\frac{7}{3} > \frac{1}{9}$
- D. $\frac{10}{3} > \frac{10}{9}$



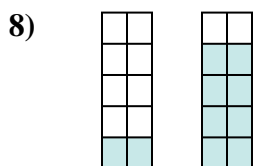
- A. $\frac{3}{2} > \frac{2}{3}$
- B. $\frac{2}{3} < \frac{3}{2}$
- C. $\frac{3}{2} < \frac{2}{3}$
- D. $\frac{3}{5} > \frac{2}{5}$



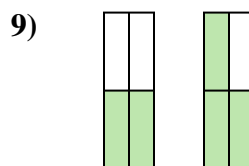
- A. $\frac{3}{7} < \frac{2}{8}$
- B. $\frac{7}{3} < \frac{8}{2}$
- C. $\frac{7}{10} < \frac{8}{10}$
- D. $\frac{10}{7} > \frac{10}{8}$



- A. $\frac{6}{8} > \frac{2}{8}$
- B. $\frac{6}{2} < \frac{2}{6}$
- C. $\frac{2}{6} > \frac{6}{2}$
- D. $\frac{6}{2} > \frac{2}{6}$



- A. $\frac{2}{10} < \frac{8}{10}$
- B. $\frac{2}{8} < \frac{8}{2}$
- C. $\frac{8}{2} < \frac{2}{8}$
- D. $\frac{8}{2} > \frac{2}{8}$



- A. $\frac{2}{4} < \frac{3}{4}$
- B. $\frac{2}{2} > \frac{1}{3}$
- C. $\frac{2}{2} < \frac{3}{1}$
- D. $\frac{4}{2} > \frac{4}{3}$

Answers

1. **B**

2. **A**

3. **C**

4. **B**

5. **D**

6. **C**

7. **A**

8. **A**

9. **A**