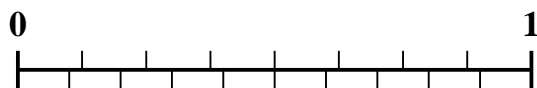


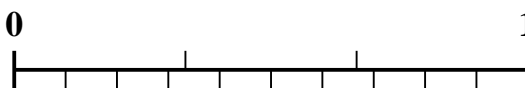


Use the number line to solve each problem.


1) Which amount is larger,  $\frac{4}{8}$  or 0.35?



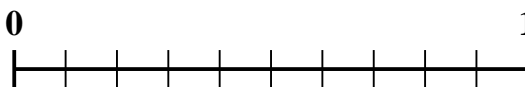
2) Which amount is larger,  $\frac{1}{3}$  or 0.18?




3) Which amount is larger,  $\frac{2}{5}$  or 0.56?



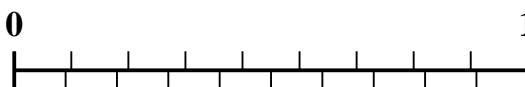
4) Which amount is larger,  $\frac{7}{10}$  or 0.53?



5) Which amount is larger,  $\frac{1}{2}$  or 0.64?



6) Which amount is larger,  $\frac{6}{9}$  or 0.57?




7) Which amount is larger,  $\frac{3}{7}$  or 0.24?



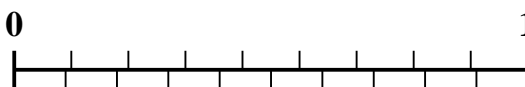
8) Which amount is larger,  $\frac{3}{8}$  or 0.24?



9) Which amount is larger,  $\frac{2}{3}$  or 0.85?



10) Which amount is larger,  $\frac{2}{9}$  or 0.11?



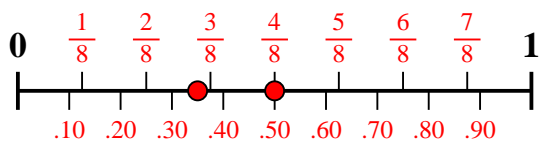
**Answers**

1. \_\_\_\_\_
2. \_\_\_\_\_
3. \_\_\_\_\_
4. \_\_\_\_\_
5. \_\_\_\_\_
6. \_\_\_\_\_
7. \_\_\_\_\_
8. \_\_\_\_\_
9. \_\_\_\_\_
10. \_\_\_\_\_

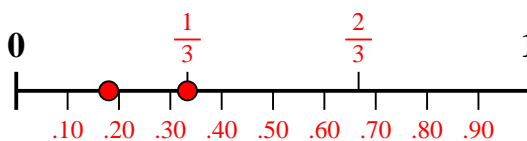


Use the number line to solve each problem.

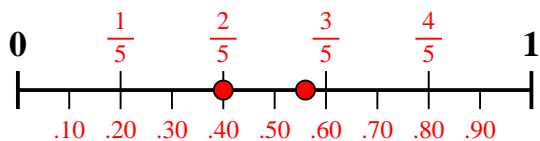
1) Which amount is larger,  $\frac{4}{8}$  or 0.35?



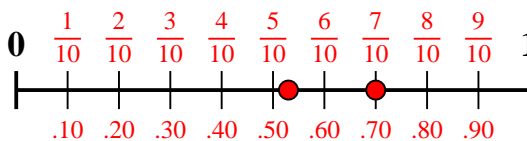
2) Which amount is larger,  $\frac{1}{3}$  or 0.18?



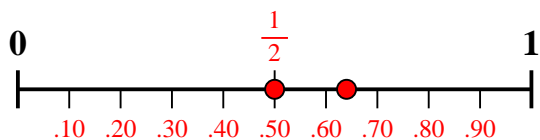
3) Which amount is larger,  $\frac{2}{5}$  or 0.56?



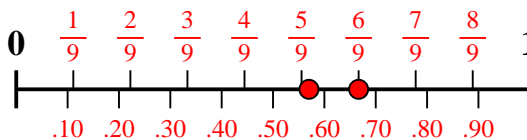
4) Which amount is larger,  $\frac{7}{10}$  or 0.53?



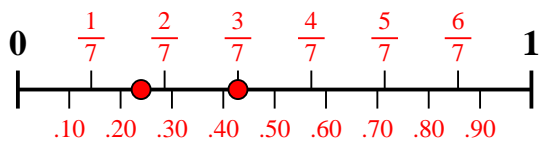
5) Which amount is larger,  $\frac{1}{2}$  or 0.64?



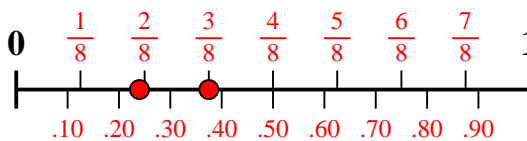
6) Which amount is larger,  $\frac{6}{9}$  or 0.57?



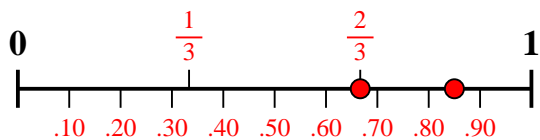
7) Which amount is larger,  $\frac{3}{7}$  or 0.24?



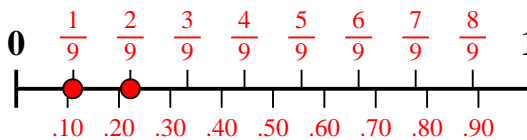
8) Which amount is larger,  $\frac{3}{8}$  or 0.24?



9) Which amount is larger,  $\frac{2}{3}$  or 0.85?



10) Which amount is larger,  $\frac{2}{9}$  or 0.11?



**Answers**

1.  $\frac{4}{8}$
2.  $\frac{1}{3}$
3. **0.56**
4.  $\frac{7}{10}$
5. **0.64**
6.  $\frac{6}{9}$
7.  $\frac{3}{7}$
8.  $\frac{3}{8}$
9. **0.85**
10.  $\frac{2}{9}$