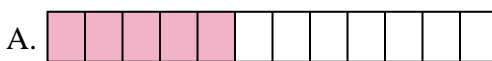




Match each equation to the answer and write the answer.

Answers

Ex) $\frac{1}{10} + \frac{1}{10} + \frac{1}{10} + \frac{1}{10} + \frac{1}{10} + \frac{1}{10} + \frac{1}{10}$




Ex. **H**

1) $\frac{1}{12} + \frac{1}{12} + \frac{1}{12} + \frac{1}{12}$



1. _____

2) $\frac{1}{5} + \frac{1}{5} + \frac{1}{5} + \frac{1}{5}$




2. _____

3) $\frac{1}{6} + \frac{1}{6} + \frac{1}{6}$



3. _____

4) $\frac{1}{8} + \frac{1}{8} + \frac{1}{8} + \frac{1}{8}$



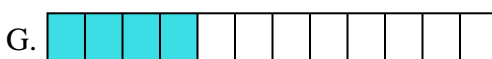
5. _____

5) $\frac{1}{4} + \frac{1}{4}$



6. _____

6) $\frac{1}{5} + \frac{1}{5} + \frac{1}{5}$



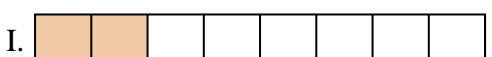
7. _____

7) $\frac{1}{8} + \frac{1}{8} + \frac{1}{8} + \frac{1}{8} + \frac{1}{8}$



8. _____

8) $\frac{1}{3} + \frac{1}{3}$



10. _____

9) $\frac{1}{5} + \frac{1}{5}$




11. _____

10) $\frac{1}{12} + \frac{1}{12}$




12. _____

11) $\frac{1}{8} + \frac{1}{8}$



13. _____

12) $\frac{1}{10} + \frac{1}{10} + \frac{1}{10}$



14. _____

13) $\frac{1}{4} + \frac{1}{4} + \frac{1}{4}$




15. _____

14) $\frac{1}{12} + \frac{1}{12} + \frac{1}{12} + \frac{1}{12} + \frac{1}{12}$



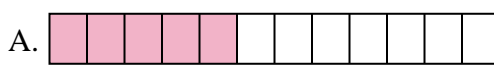
15) $\frac{1}{6} + \frac{1}{6} + \frac{1}{6} + \frac{1}{6} + \frac{1}{6}$



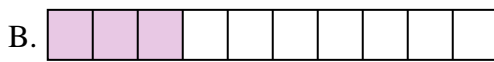


Match each equation to the answer and write the answer.


Ex) $\frac{1}{10} + \frac{1}{10} + \frac{1}{10} + \frac{1}{10} + \frac{1}{10} + \frac{1}{10} + \frac{1}{10}$



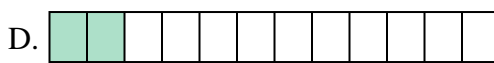
1) $\frac{1}{12} + \frac{1}{12} + \frac{1}{12} + \frac{1}{12}$




2) $\frac{1}{5} + \frac{1}{5} + \frac{1}{5} + \frac{1}{5}$



3) $\frac{1}{6} + \frac{1}{6} + \frac{1}{6}$




4) $\frac{1}{8} + \frac{1}{8} + \frac{1}{8} + \frac{1}{8}$



5) $\frac{1}{4} + \frac{1}{4}$



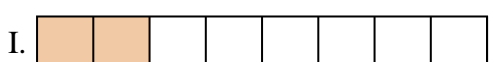
6) $\frac{1}{5} + \frac{1}{5} + \frac{1}{5}$



7) $\frac{1}{8} + \frac{1}{8} + \frac{1}{8} + \frac{1}{8} + \frac{1}{8}$



8) $\frac{1}{3} + \frac{1}{3}$



9) $\frac{1}{5} + \frac{1}{5}$




10) $\frac{1}{12} + \frac{1}{12}$



11) $\frac{1}{8} + \frac{1}{8}$



12) $\frac{1}{10} + \frac{1}{10} + \frac{1}{10}$




13) $\frac{1}{4} + \frac{1}{4} + \frac{1}{4}$



14) $\frac{1}{12} + \frac{1}{12} + \frac{1}{12} + \frac{1}{12} + \frac{1}{12}$



15) $\frac{1}{6} + \frac{1}{6} + \frac{1}{6} + \frac{1}{6} + \frac{1}{6}$



Answers

Ex. **H**

1. **G**

2. **M**

3. **J**

4. **O**

5. **L**

6. **P**

7. **C**

8. **F**

9. **K**

10. **D**

11. **I**

12. **B**

13. **N**

14. **A**

15. **E**