



Determine which letter best represents the sum.

1) $\frac{2}{8} + \frac{5}{8}$

3) $\frac{1}{3} + \frac{2}{3}$

5) $\frac{3}{5} + \frac{1}{5}$

7) $\frac{1}{8} + \frac{4}{8}$

9) $\frac{1}{2} + \frac{1}{2}$

11) $\frac{8}{10} + \frac{4}{10}$

13) $\frac{3}{5} + \frac{2}{5}$

2) $\frac{3}{4} + \frac{3}{4}$

4) $\frac{5}{12} + \frac{11}{12}$

6) $\frac{9}{10} + \frac{1}{10}$

8) $\frac{5}{8} + \frac{4}{8}$

10) $\frac{1}{8} + \frac{2}{8}$

12) $\frac{4}{5} + \frac{4}{5}$

14) $\frac{4}{10} + \frac{4}{10}$

Answers

1. _____

2. _____

3. _____

4. _____

5. _____

6. _____

7. _____

8. _____

9. _____

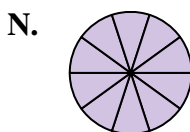
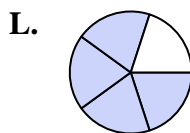
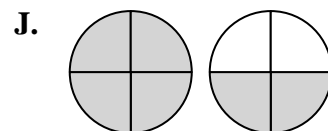
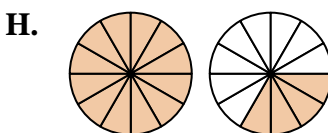
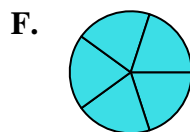
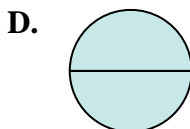
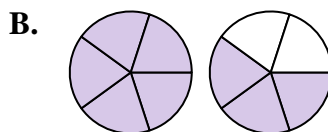
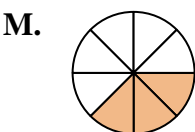
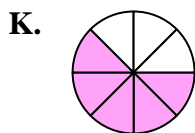
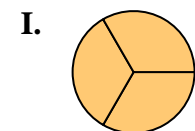
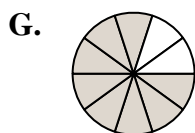
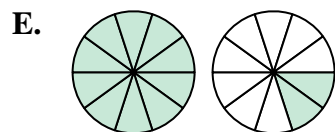
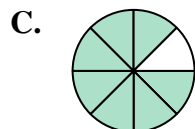
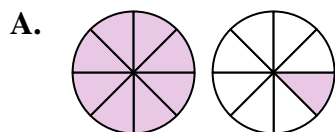
10. _____

11. _____

12. _____

13. _____

14. _____





Determine which letter best represents the sum.

1) $\frac{2}{8} + \frac{5}{8}$

2) $\frac{3}{4} + \frac{3}{4}$

3) $\frac{1}{3} + \frac{2}{3}$

4) $\frac{5}{12} + \frac{11}{12}$

5) $\frac{3}{5} + \frac{1}{5}$

6) $\frac{9}{10} + \frac{1}{10}$

7) $\frac{1}{8} + \frac{4}{8}$

8) $\frac{5}{8} + \frac{4}{8}$

9) $\frac{1}{2} + \frac{1}{2}$

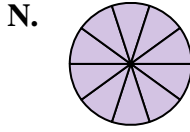
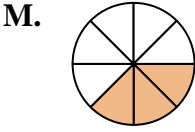
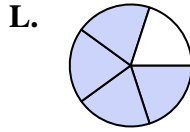
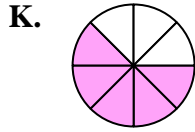
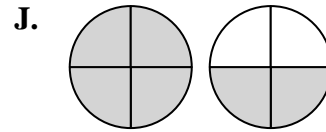
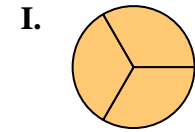
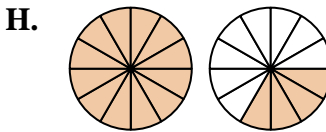
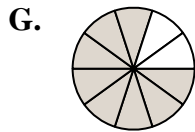
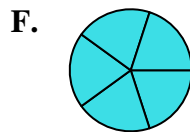
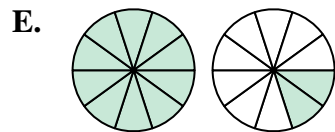
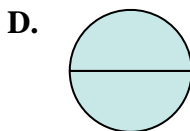
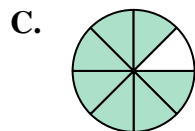
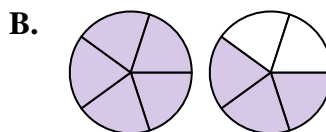
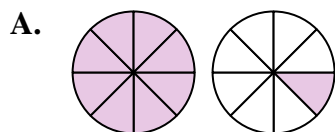
10) $\frac{1}{8} + \frac{2}{8}$

11) $\frac{8}{10} + \frac{4}{10}$

12) $\frac{4}{5} + \frac{4}{5}$

13) $\frac{3}{5} + \frac{2}{5}$

14) $\frac{4}{10} + \frac{4}{10}$



Answers

1. **C** $\frac{7}{8}$

2. **J** $1\frac{2}{4}$

3. **I** $\frac{3}{3}$

4. **H** $1\frac{4}{12}$

5. **L** $\frac{4}{5}$

6. **N** $\frac{10}{10}$

7. **K** $\frac{5}{8}$

8. **A** $1\frac{1}{8}$

9. **D** $\frac{2}{2}$

10. **M** $\frac{3}{8}$

11. **E** $1\frac{2}{10}$

12. **B** $1\frac{3}{5}$

13. **F** $\frac{5}{5}$

14. **G** $\frac{8}{10}$