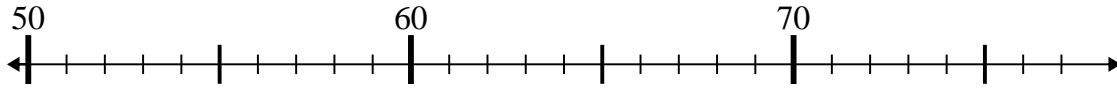




Use the numberlines to solve each problem.

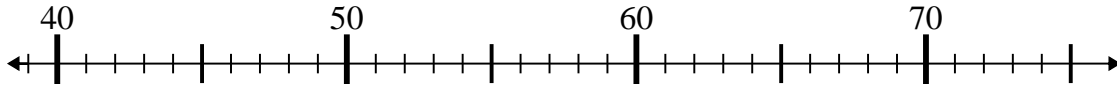
Answers

1) $70 - 16 =$



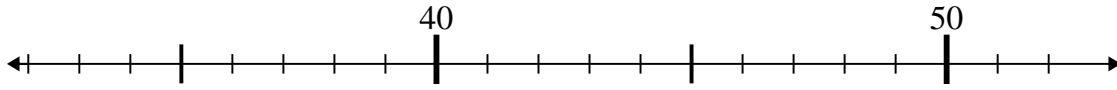
1. _____

2) $39 + 6 =$



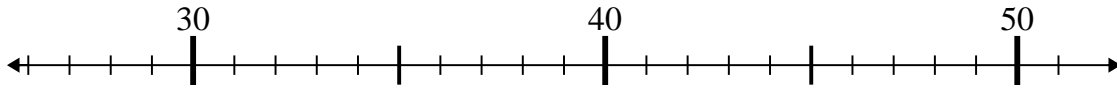
2. _____

3) $46 + 3 =$



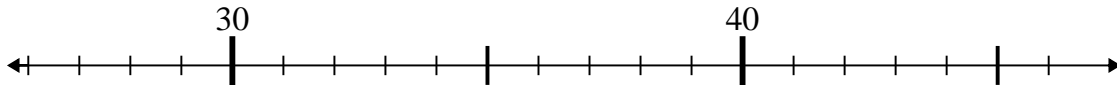
3. _____

4) $31 + 8 =$



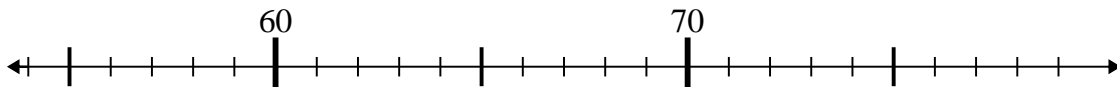
4. _____

5) $36 - 1 =$



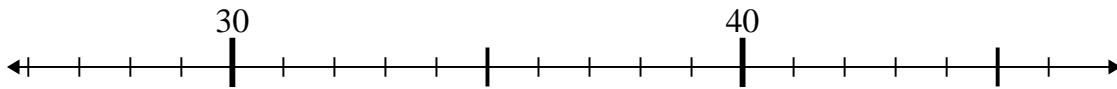
5. _____

6) $70 + 8 =$



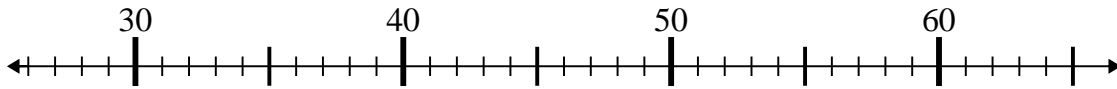
6. _____

7) $46 - 1 =$



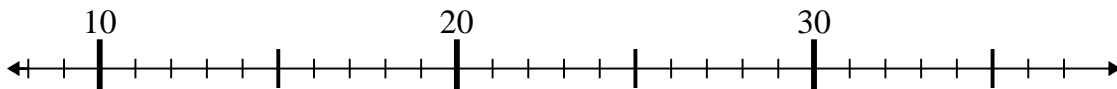
7. _____

8) $27 + 8 =$



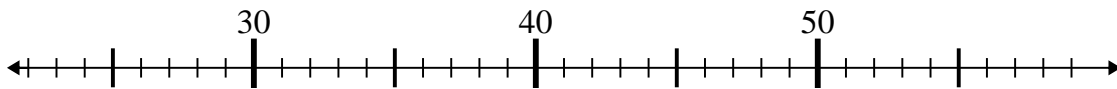
8. _____

9) $18 + 1 =$



9. _____

10) $25 + 3 =$

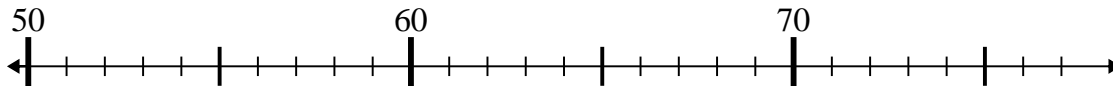


10. _____

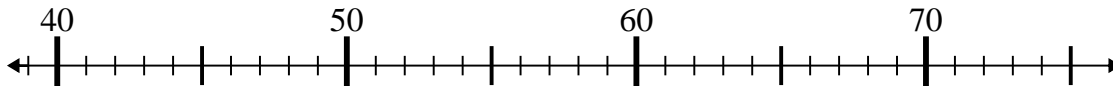


Use the numberlines to solve each problem.

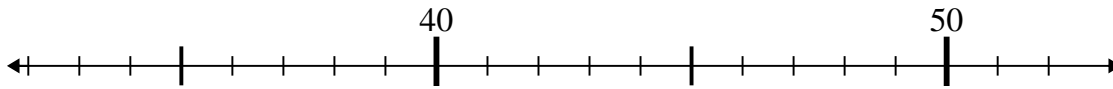
1) $70 - 16 =$



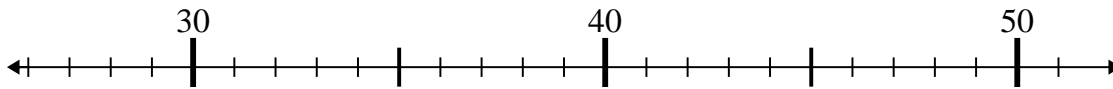
2) $39 + 6 =$



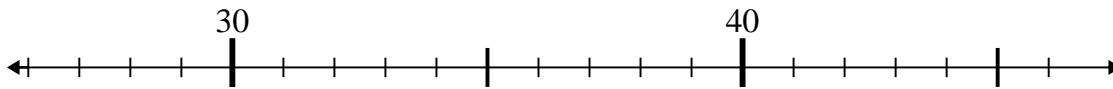
3) $46 + 3 =$



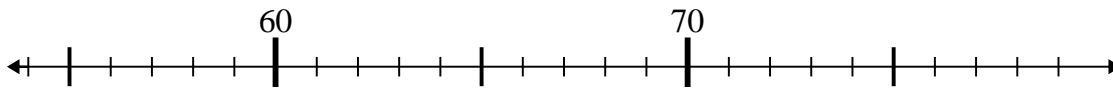
4) $31 + 8 =$



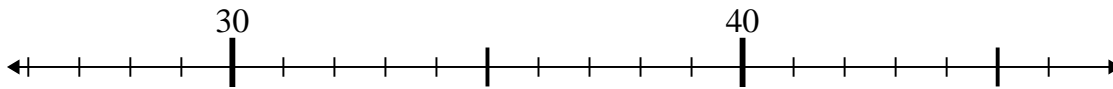
5) $36 - 1 =$



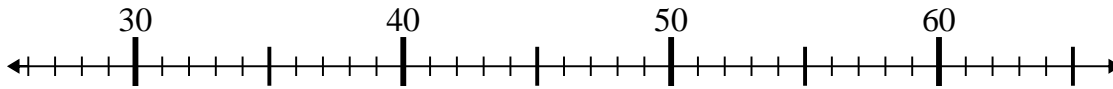
6) $70 + 8 =$



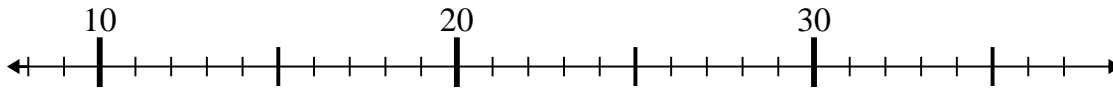
7) $46 - 1 =$



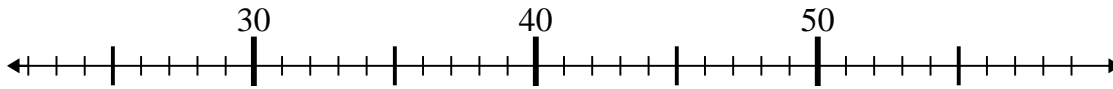
8) $27 + 8 =$



9) $18 + 1 =$



10) $25 + 3 =$



Answers

1. 54
2. 45
3. 49
4. 39
5. 35
6. 78
7. 45
8. 35
9. 19
10. 28