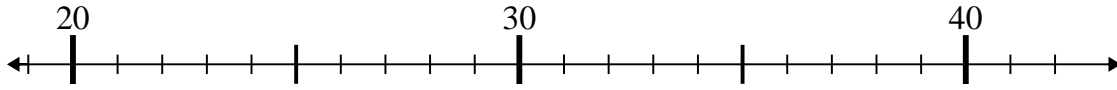




Use the numberlines to solve each problem.

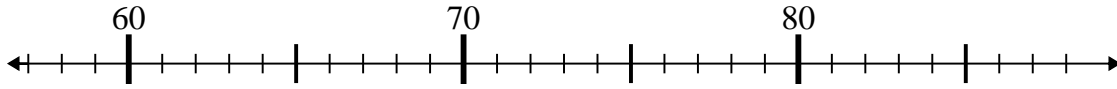
Answers

1)  $31 + 4 =$



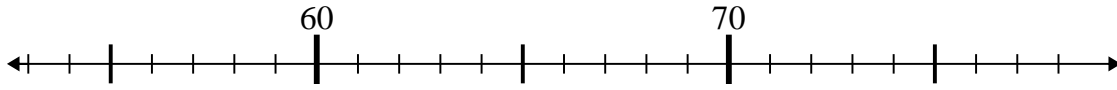
1. \_\_\_\_\_

2)  $76 - 18 =$



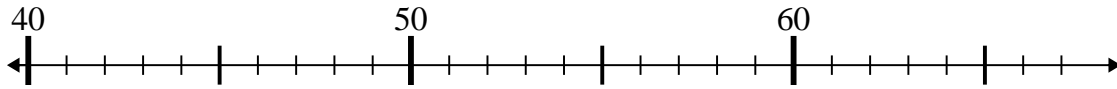
2. \_\_\_\_\_

3)  $57 + 5 =$



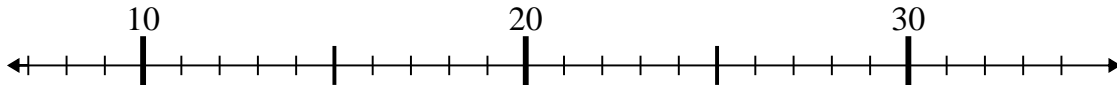
3. \_\_\_\_\_

4)  $40 + 8 =$



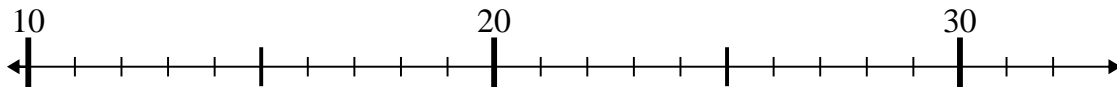
4. \_\_\_\_\_

5)  $8 + 20 =$



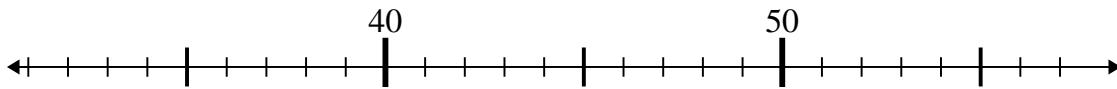
5. \_\_\_\_\_

6)  $13 + 4 =$



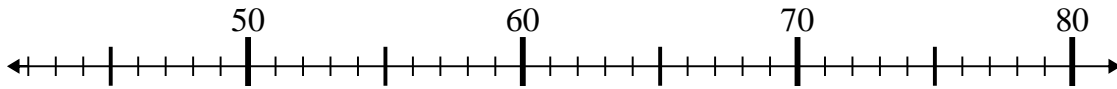
6. \_\_\_\_\_

7)  $56 - 18 =$



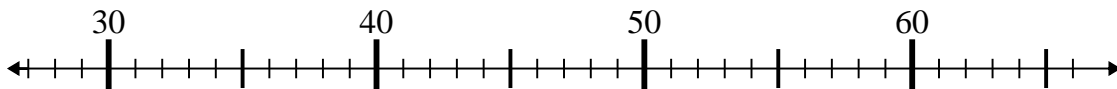
7. \_\_\_\_\_

8)  $61 - 13 =$



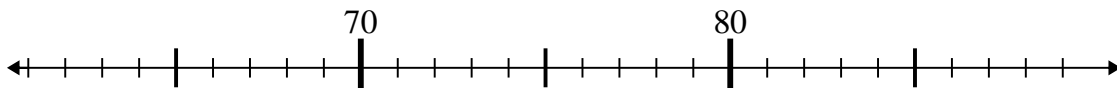
8. \_\_\_\_\_

9)  $40 + 16 =$



9. \_\_\_\_\_

10)  $78 + 3 =$

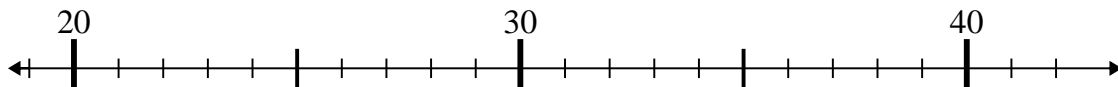


10. \_\_\_\_\_

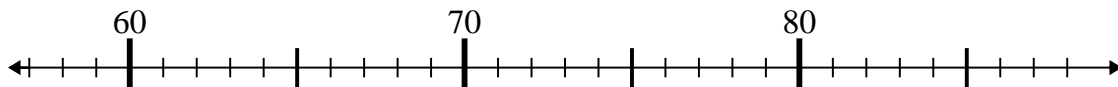


Use the numberlines to solve each problem.

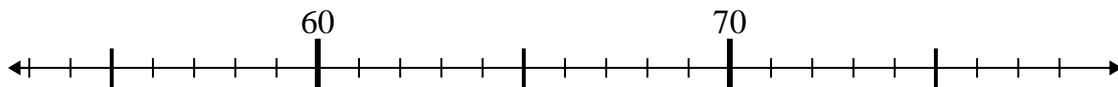
1)  $31 + 4 =$



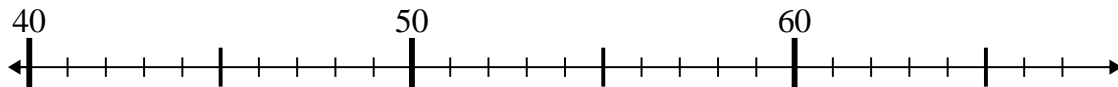
2)  $76 - 18 =$



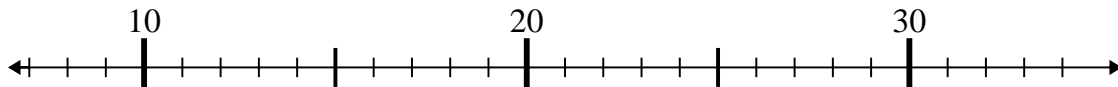
3)  $57 + 5 =$



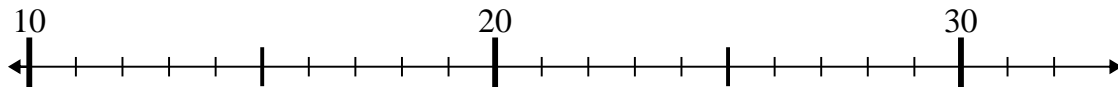
4)  $40 + 8 =$



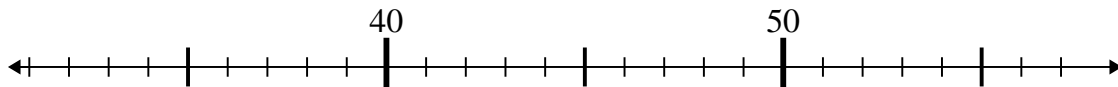
5)  $8 + 20 =$



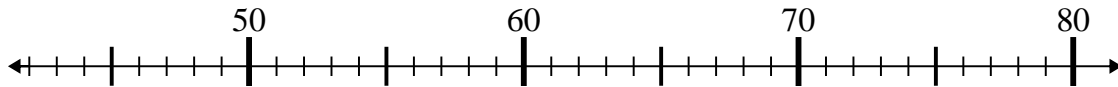
6)  $13 + 4 =$



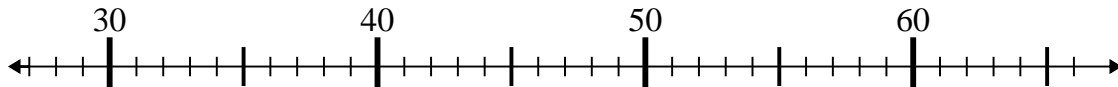
7)  $56 - 18 =$



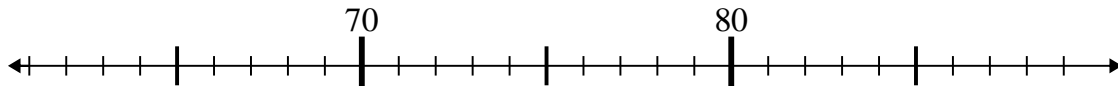
8)  $61 - 13 =$



9)  $40 + 16 =$



10)  $78 + 3 =$



Answers

1. 35

2. 58

3. 62

4. 48

5. 28

6. 17

7. 38

8. 48

9. 56

10. 81