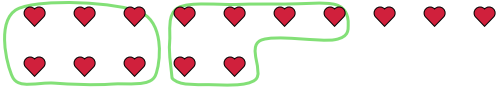




Use the shapes provided to answer the questions.

Answers

Ex) There are 15 shapes below. How many groups of 6 can you make with them? How many will you have left over?

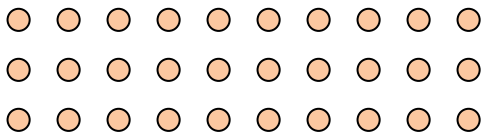


1) There are 17 shapes below. How many groups of 2 can you make with them? How many will you have left over?



Ex. 2 3

2) There are 30 shapes below. How many groups of 9 can you make with them? How many will you have left over?



3) There are 13 shapes below. How many groups of 3 can you make with them? How many will you have left over?



1. \_\_\_\_\_

2. \_\_\_\_\_

3. \_\_\_\_\_

4. \_\_\_\_\_

5. \_\_\_\_\_

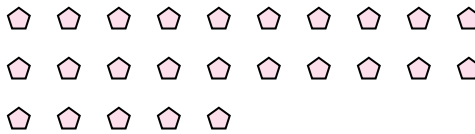
6. \_\_\_\_\_

7. \_\_\_\_\_

4) There are 10 shapes below. How many groups of 7 can you make with them? How many will you have left over?



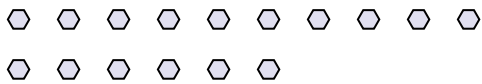
5) There are 25 shapes below. How many groups of 2 can you make with them? How many will you have left over?



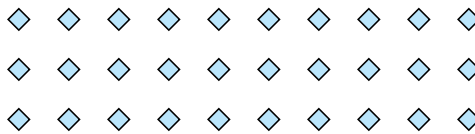
8. \_\_\_\_\_

9. \_\_\_\_\_

6) There are 16 shapes below. How many groups of 8 can you make with them? How many will you have left over?



7) There are 30 shapes below. How many groups of 9 can you make with them? How many will you have left over?



8) There are 15 shapes below. How many groups of 4 can you make with them? How many will you have left over?



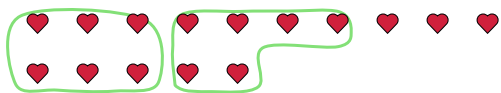
9) There are 26 shapes below. How many groups of 7 can you make with them? How many will you have left over?





Use the shapes provided to answer the questions.

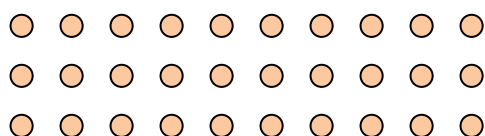
Ex) There are 15 shapes below. How many groups of 6 can you make with them? How many will you have left over?



1) There are 17 shapes below. How many groups of 2 can you make with them? How many will you have left over?



2) There are 30 shapes below. How many groups of 9 can you make with them? How many will you have left over?



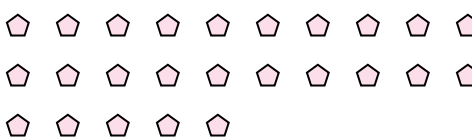
3) There are 13 shapes below. How many groups of 3 can you make with them? How many will you have left over?



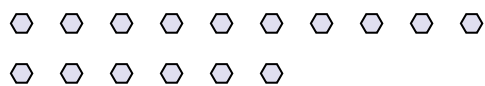
4) There are 10 shapes below. How many groups of 7 can you make with them? How many will you have left over?



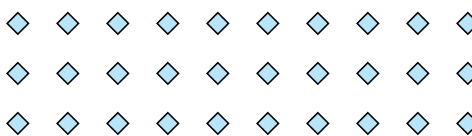
5) There are 25 shapes below. How many groups of 2 can you make with them? How many will you have left over?



6) There are 16 shapes below. How many groups of 8 can you make with them? How many will you have left over?



7) There are 30 shapes below. How many groups of 9 can you make with them? How many will you have left over?



8) There are 15 shapes below. How many groups of 4 can you make with them? How many will you have left over?



9) There are 26 shapes below. How many groups of 7 can you make with them? How many will you have left over?



Answers

Ex. 2 3

1. 8 1

2. 3 3

3. 4 1

4. 1 3

5. 12 1

6. 2 0

7. 3 3

8. 3 3

9. 3 5