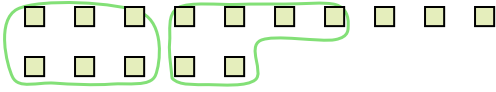





Use the shapes provided to answer the questions.

Answers

Ex) There are 15 shapes below. How many groups of 6 can you make with them? How many will you have left over?




1) There are 18 shapes below. How many groups of 3 can you make with them? How many will you have left over?



Ex. 2 3

2) There are 27 shapes below. How many groups of 4 can you make with them? How many will you have left over?



3) There are 11 shapes below. How many groups of 2 can you make with them? How many will you have left over?



1. _____

2. _____

3. _____

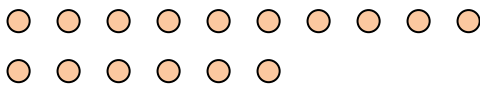
4. _____

5. _____

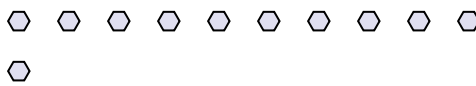
6. _____

7. _____

4) There are 16 shapes below. How many groups of 4 can you make with them? How many will you have left over?



5) There are 11 shapes below. How many groups of 9 can you make with them? How many will you have left over?



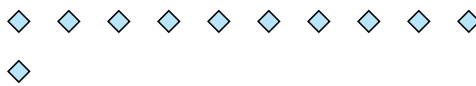
8. _____

9. _____


6) There are 16 shapes below. How many groups of 6 can you make with them? How many will you have left over?



7) There are 11 shapes below. How many groups of 3 can you make with them? How many will you have left over?



8) There are 30 shapes below. How many groups of 6 can you make with them? How many will you have left over?



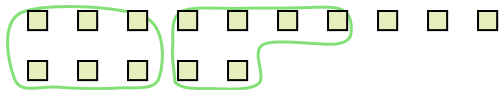
9) There are 20 shapes below. How many groups of 4 can you make with them? How many will you have left over?






Use the shapes provided to answer the questions.

Ex) There are 15 shapes below. How many groups of 6 can you make with them? How many will you have left over?



1) There are 18 shapes below. How many groups of 3 can you make with them? How many will you have left over?



Answers

Ex. 2 3

1. 6 0

2. 6 3

3. 5 1

4. 4 0

5. 1 2


6. 2 4

7. 3 2

8. 5 0

9. 5 0

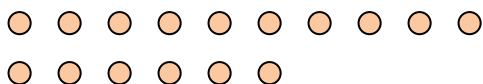
2) There are 27 shapes below. How many groups of 4 can you make with them? How many will you have left over?



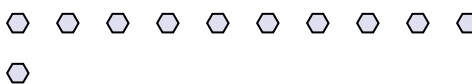
3) There are 11 shapes below. How many groups of 2 can you make with them? How many will you have left over?



4) There are 16 shapes below. How many groups of 4 can you make with them? How many will you have left over?



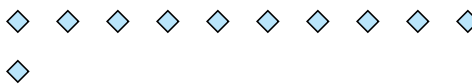
5) There are 11 shapes below. How many groups of 9 can you make with them? How many will you have left over?




6) There are 16 shapes below. How many groups of 6 can you make with them? How many will you have left over?



7) There are 11 shapes below. How many groups of 3 can you make with them? How many will you have left over?



8) There are 30 shapes below. How many groups of 6 can you make with them? How many will you have left over?



9) There are 20 shapes below. How many groups of 4 can you make with them? How many will you have left over?

