


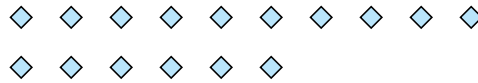


Use the shapes provided to answer the questions.

Ex) How many groups of 6 can you make with the 18 shapes below?




1) How many groups of 8 can you make with the 16 shapes below?



**Answers**

Ex. 3

2) How many groups of 6 can you make with the 36 shapes below?



3) How many groups of 5 can you make with the 25 shapes below?



1. \_\_\_\_\_

2. \_\_\_\_\_

3. \_\_\_\_\_

4. \_\_\_\_\_

5. \_\_\_\_\_

6. \_\_\_\_\_

7. \_\_\_\_\_

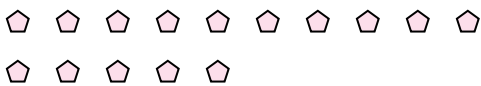
8. \_\_\_\_\_

9. \_\_\_\_\_

10. \_\_\_\_\_

11. \_\_\_\_\_

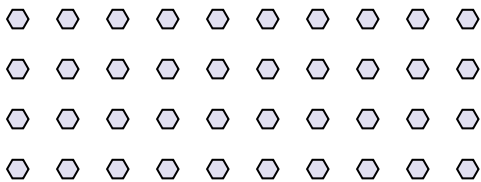
4) How many groups of 5 can you make with the 15 shapes below?



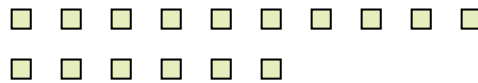
5) How many groups of 3 can you make with the 6 shapes below?




6) How many groups of 4 can you make with the 40 shapes below?




7) How many groups of 2 can you make with the 16 shapes below?



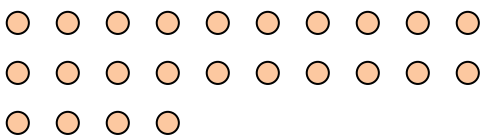
8) How many groups of 6 can you make with the 30 shapes below?




9) How many groups of 7 can you make with the 21 shapes below?



10) How many groups of 8 can you make with the 24 shapes below?




11) How many groups of 2 can you make with the 22 shapes below?



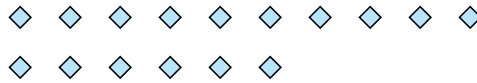


Use the shapes provided to answer the questions.

Ex) How many groups of 6 can you make with the 18 shapes below?




1) How many groups of 8 can you make with the 16 shapes below?



Answers

Ex. 3

2) How many groups of 6 can you make with the 36 shapes below?



3) How many groups of 5 can you make with the 25 shapes below?



1. 2

2. 6

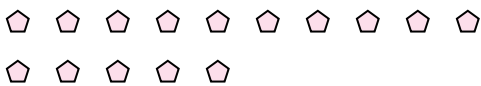
3. 5

4. 3

5. 2

6. 10

4) How many groups of 5 can you make with the 15 shapes below?



5) How many groups of 3 can you make with the 6 shapes below?

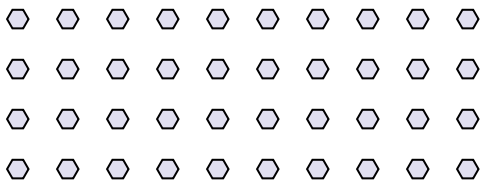


7. 8

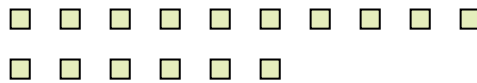
8. 5

9. 3

6) How many groups of 4 can you make with the 40 shapes below?




7) How many groups of 2 can you make with the 16 shapes below?




10. 3

11. 11

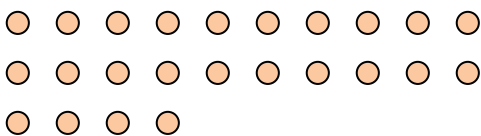
8) How many groups of 6 can you make with the 30 shapes below?



9) How many groups of 7 can you make with the 21 shapes below?



10) How many groups of 8 can you make with the 24 shapes below?



11) How many groups of 2 can you make with the 22 shapes below?

