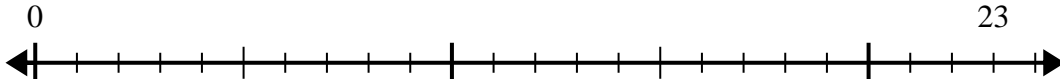


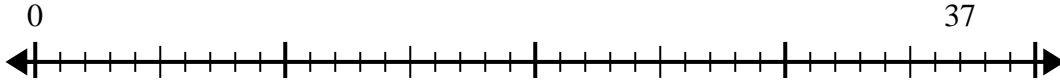


Use the number line to solve the division problem.

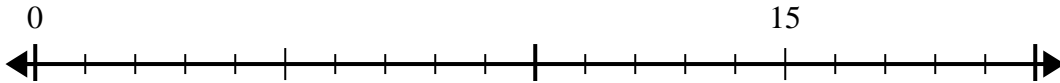
1) $23 \div 4 =$
0



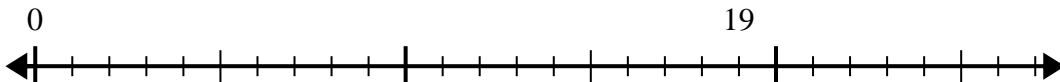
2) $37 \div 8 =$
0



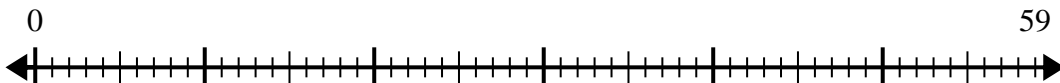
3) $15 \div 4 =$
0



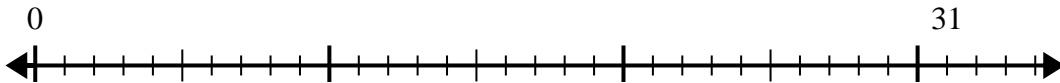
4) $19 \div 6 =$
0



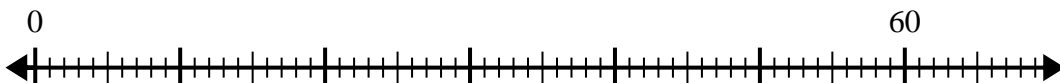
5) $59 \div 8 =$
0



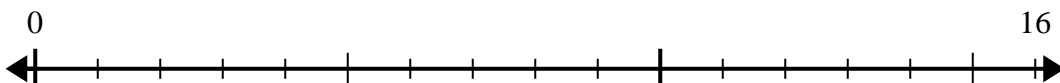
6) $31 \div 8 =$
0



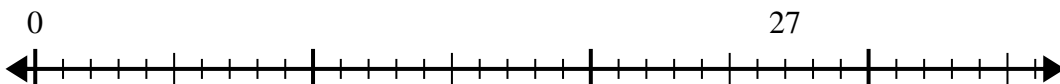
7) $60 \div 7 =$
0



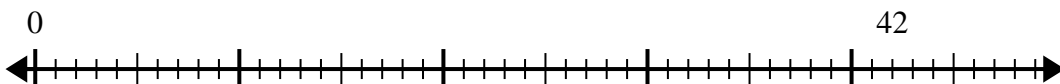
8) $16 \div 5 =$
0



9) $27 \div 4 =$
0



10) $42 \div 5 =$
0



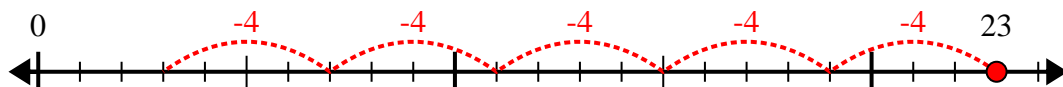
Answers

1. _____
2. _____
3. _____
4. _____
5. _____
6. _____
7. _____
8. _____
9. _____
10. _____

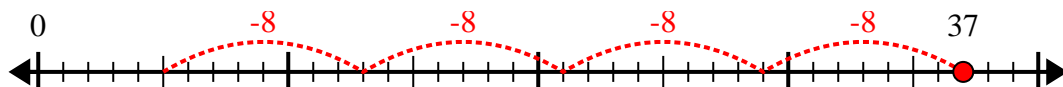


Use the number line to solve the division problem.

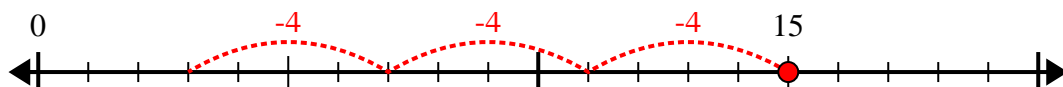
1) $23 \div 4 =$



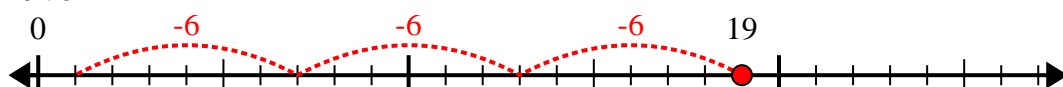
2) $37 \div 8 =$



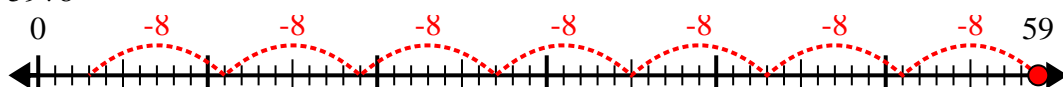
3) $15 \div 4 =$



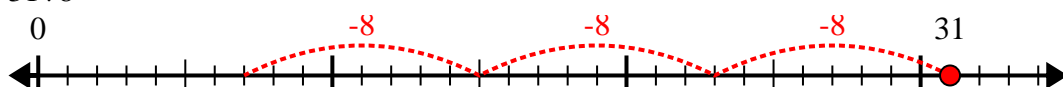
4) $19 \div 6 =$



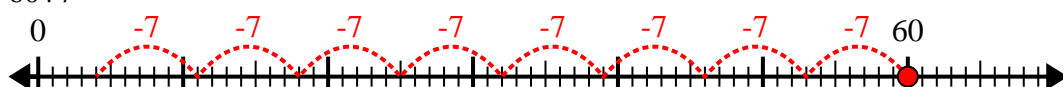
5) $59 \div 8 =$



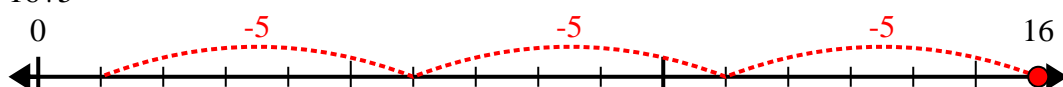
6) $31 \div 8 =$



7) $60 \div 7 =$



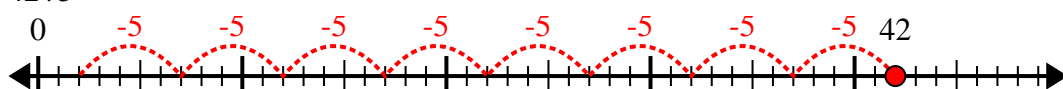
8) $16 \div 5 =$



9) $27 \div 4 =$



10) $42 \div 5 =$



Answers

1. 5r3

2. 4r5

3. 3r3

4. 3r1

5. 7r3

6. 3r7

7. 8r4

8. 3r1

9. 6r3

10. 8r2