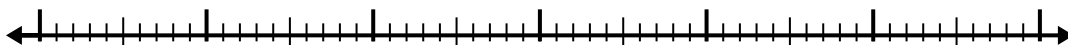


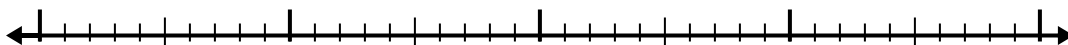


Use the number line to solve each problem.

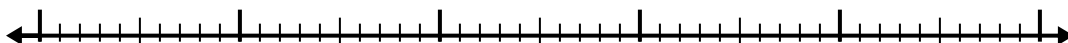
1)  $9.1 - 3.6 =$



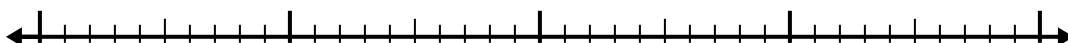
2)  $8.1 - 1.6 =$



3)  $6.7 - 3.2 =$




4)  $10.3 - 2.6 =$



5)  $5.8 - 1.9 =$




6)  $8.2 - 2.3 =$



7)  $5.9 - 1.6 =$



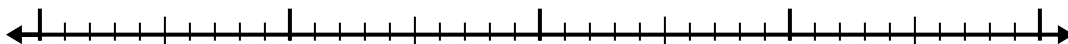
8)  $11.2 - 2.9 =$



9)  $10.5 - 3.5 =$



10)  $8 - 2.4 =$



Answers

1. \_\_\_\_\_

2. \_\_\_\_\_

3. \_\_\_\_\_

4. \_\_\_\_\_

5. \_\_\_\_\_

6. \_\_\_\_\_

7. \_\_\_\_\_

8. \_\_\_\_\_

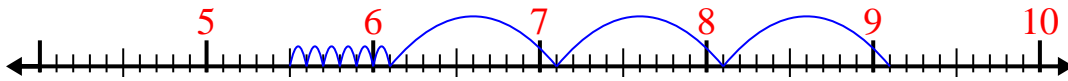
9. \_\_\_\_\_

10. \_\_\_\_\_

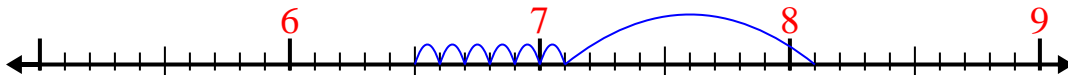


Use the number line to solve each problem.

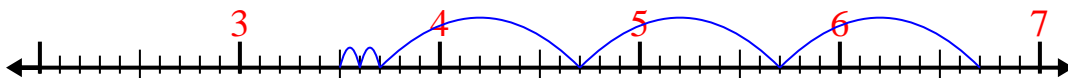
1)  $9.1 - 3.6 =$



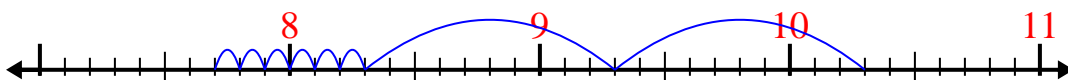
2)  $8.1 - 1.6 =$



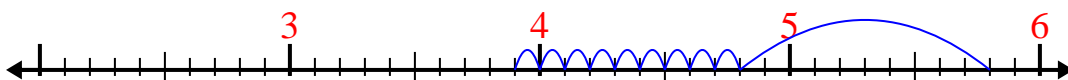
3)  $6.7 - 3.2 =$



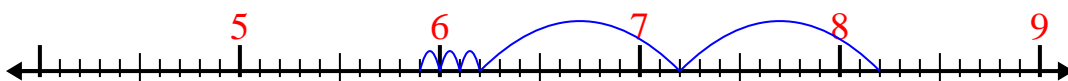
4)  $10.3 - 2.6 =$



5)  $5.8 - 1.9 =$



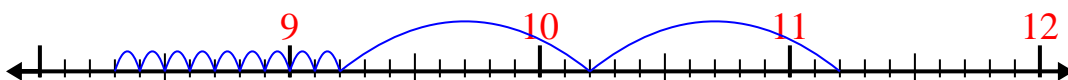
6)  $8.2 - 2.3 =$



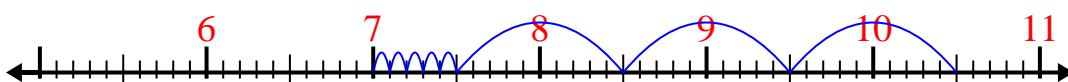
7)  $5.9 - 1.6 =$



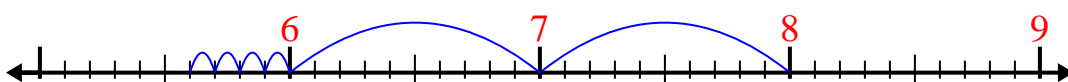
8)  $11.2 - 2.9 =$



9)  $10.5 - 3.5 =$



10)  $8 - 2.4 =$

Answers1. 5.52. 6.53. 3.54. 7.75. 3.96. 5.97. 4.38. 8.39. 710. 5.6