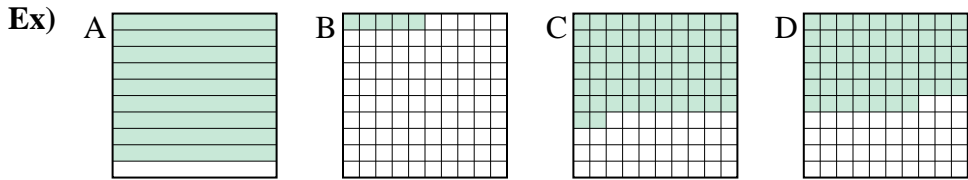




Put the boxes in order from least to greatest based on the shaded amount.

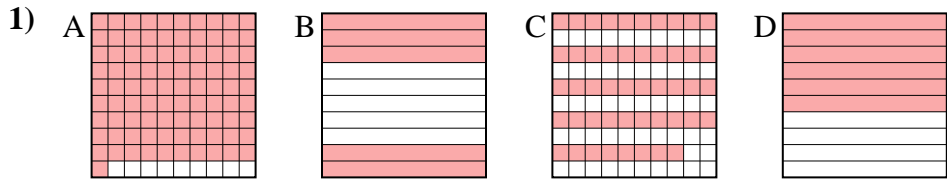
Answers



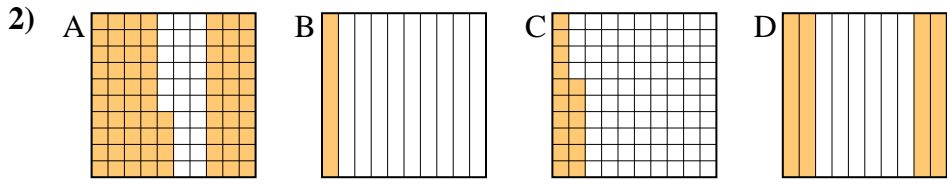
small 0.05 - B
0.57 - D
0.62 - C
 large 0.9 - A

Ex. B,D,C,A

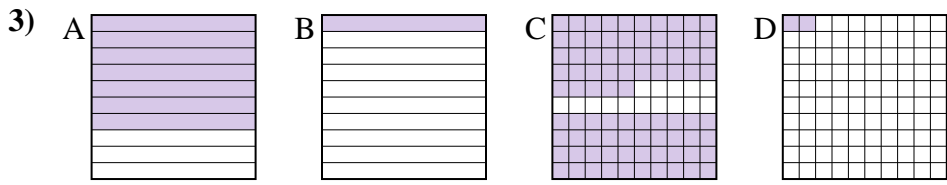
1. _____
2. _____
3. _____
4. _____
5. _____
6. _____
7. _____
8. _____



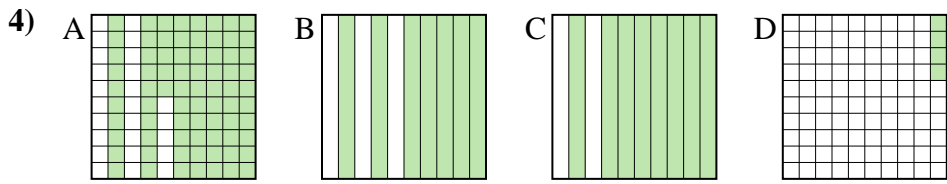
small _____
 large _____



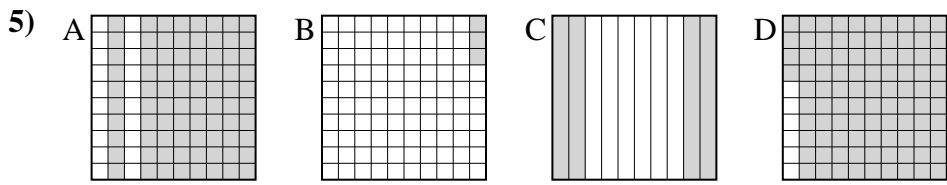
small _____
 large _____



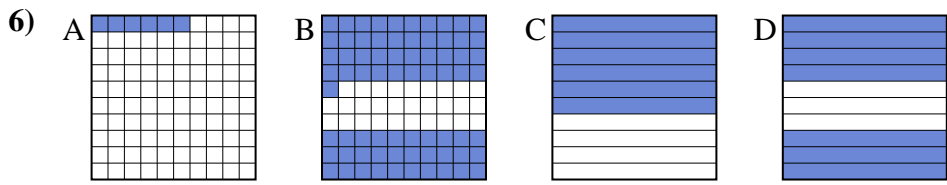
small _____
 large _____



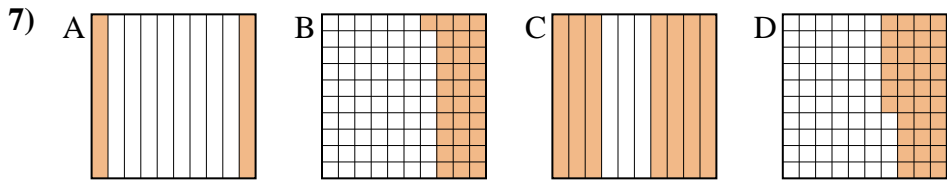
small _____
 large _____



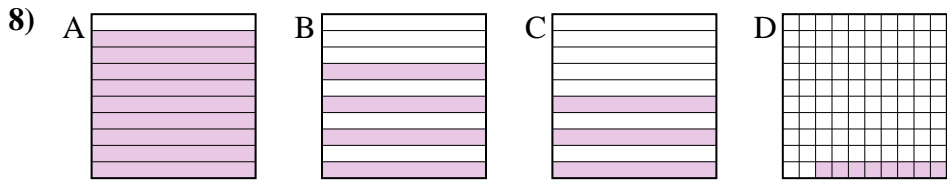
small _____
 large _____



small _____
 large _____




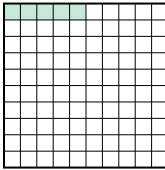


small _____
 large _____

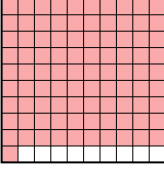

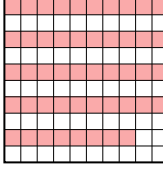



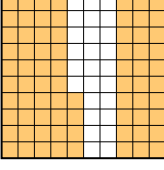
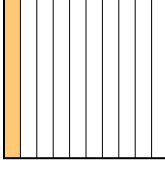
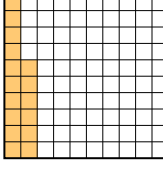
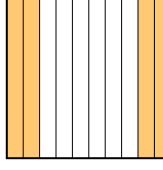
small _____
 large _____

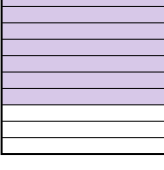

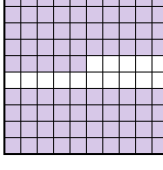






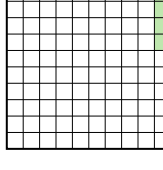
Put the boxes in order from least to greatest based on the shaded amount.



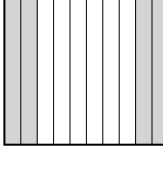

Ex) A  B  C  D  small $\frac{0.05}{0.57}$ - B
 $\frac{0.62}{0.9}$ - C
large $\frac{0.9}{0.05}$ - A


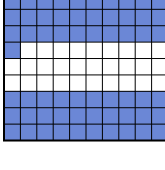


1) A  B  C  D  small $\frac{0.48}{0.5}$ - C
 $\frac{0.6}{0.91}$ - D
large $\frac{0.91}{0.48}$ - A

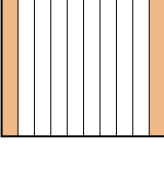
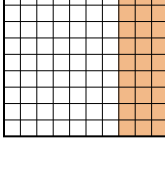
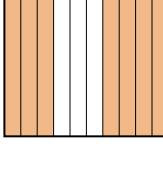
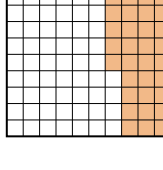
2) A  B  C  D  small $\frac{0.1}{0.16}$ - B
 $\frac{0.4}{0.74}$ - D
large $\frac{0.74}{0.1}$ - A




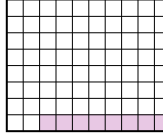
3) A  B  C  D  small $\frac{0.02}{0.1}$ - D
 $\frac{0.7}{0.85}$ - A
large $\frac{0.85}{0.02}$ - C

4) A  B  C  D  small $\frac{0.04}{0.7}$ - D
 $\frac{0.75}{0.8}$ - A
large $\frac{0.8}{0.04}$ - C

5) A  B  C  D  small $\frac{0.03}{0.4}$ - B
 $\frac{0.8}{0.94}$ - A
large $\frac{0.94}{0.03}$ - D

6) A  B  C  D  small $\frac{0.06}{0.6}$ - A
 $\frac{0.7}{0.71}$ - D
large $\frac{0.71}{0.06}$ - B

7) A  B  C  D  small $\frac{0.2}{0.31}$ - A
 $\frac{0.36}{0.7}$ - D
large $\frac{0.7}{0.2}$ - C

8) A  B  C  D  small $\frac{0.08}{0.3}$ - D
 $\frac{0.4}{0.9}$ - A
large $\frac{0.9}{0.08}$ - A

Answers

- Ex. **B,D,C,A**
1. **C,B,D,A**
2. **B,C,D,A**
3. **D,B,A,C**
4. **D,B,A,C**
5. **B,C,A,D**
6. **A,C,D,B**
7. **A,B,D,C**
8. **D,C,B,A**