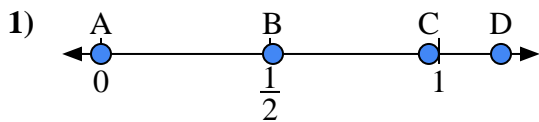


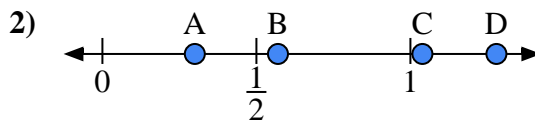


Use the number lines to answer the questions.

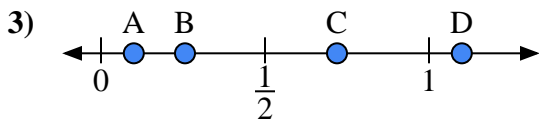
**Answers**



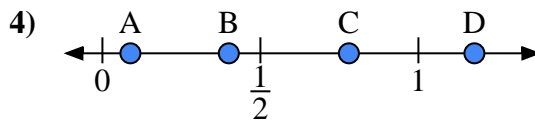
- a) Which letter best represents the location of 0.00?
- b) Which letter best represents the location of 0.97?



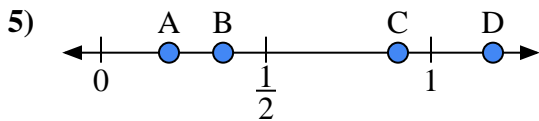
- a) Which letter best represents the location of 0.30?
- b) Which letter best represents the location of 0.57?



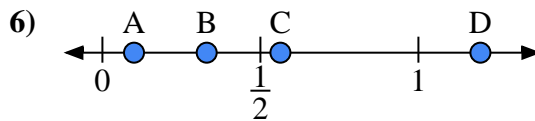
- a) Which letter best represents the location of 1.10?
- b) Which letter best represents the location of 0.10?



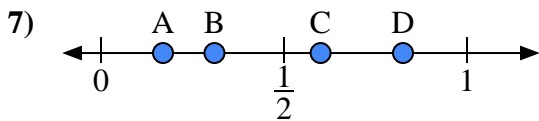
- a) Which letter best represents the location of 0.4?
- b) Which letter best represents the location of 0.78?



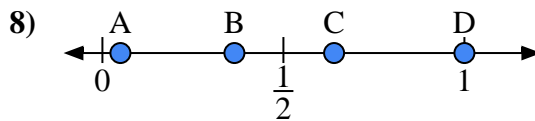
- a) Which letter best represents the location of 0.90?
- b) Which letter best represents the location of 0.37?



- a) Which letter best represents the location of 0.1?
- b) Which letter best represents the location of 0.33?



- a) Which letter best represents the location of 0.6?
- b) Which letter best represents the location of 0.31?

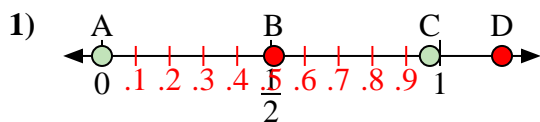


- a) Which letter best represents the location of 1.0?
- b) Which letter best represents the location of 0.64?

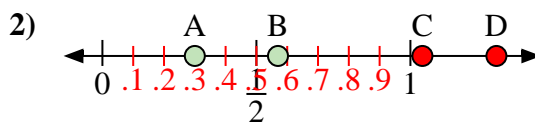
- 1. \_\_\_\_\_
- 2. \_\_\_\_\_
- 3. \_\_\_\_\_
- 4. \_\_\_\_\_
- 5. \_\_\_\_\_
- 6. \_\_\_\_\_
- 7. \_\_\_\_\_
- 8. \_\_\_\_\_



Use the number lines to answer the questions.



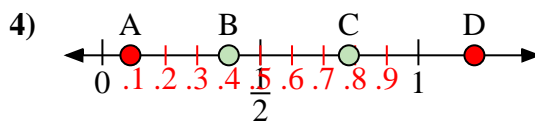
- a) Which letter best represents the location of 0.00?
- b) Which letter best represents the location of 0.97?



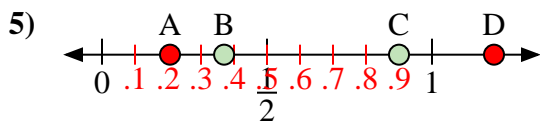
- a) Which letter best represents the location of 0.30?
- b) Which letter best represents the location of 0.57?



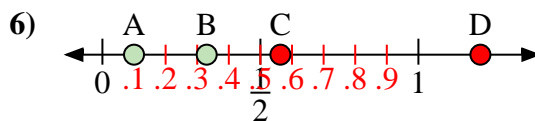
- a) Which letter best represents the location of 1.10?
- b) Which letter best represents the location of 0.10?



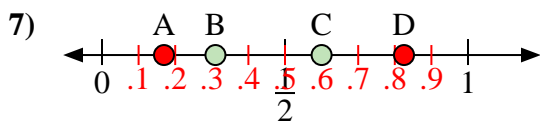
- a) Which letter best represents the location of 0.4?
- b) Which letter best represents the location of 0.78?



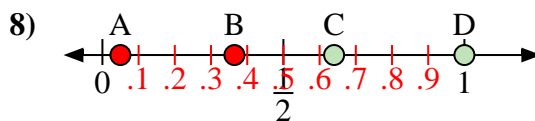
- a) Which letter best represents the location of 0.90?
- b) Which letter best represents the location of 0.37?



- a) Which letter best represents the location of 0.1?
- b) Which letter best represents the location of 0.33?



- a) Which letter best represents the location of 0.6?
- b) Which letter best represents the location of 0.31?



- a) Which letter best represents the location of 1.0?
- b) Which letter best represents the location of 0.64?

**Answers**

- 1. A C
- 2. A B
- 3. D A
- 4. B C
- 5. C B
- 6. A B
- 7. C B
- 8. D C