




Use the visual model to solve each problem.

Answers

1) $3 \times 0.35 =$

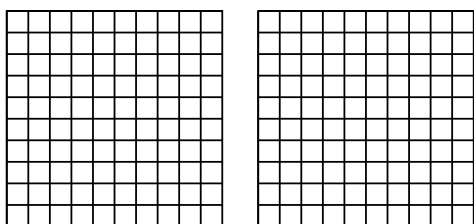


1. _____

2. _____

3. _____

2) $2 \times 0.41 =$

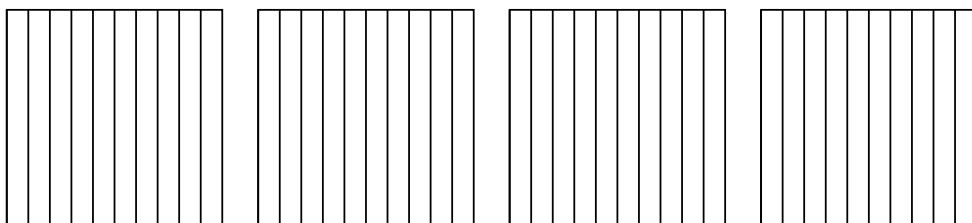


4. _____

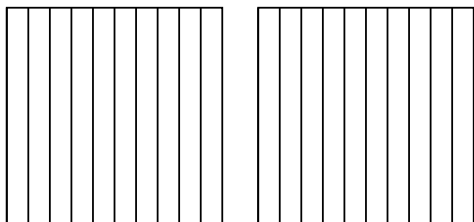
5. _____

6. _____

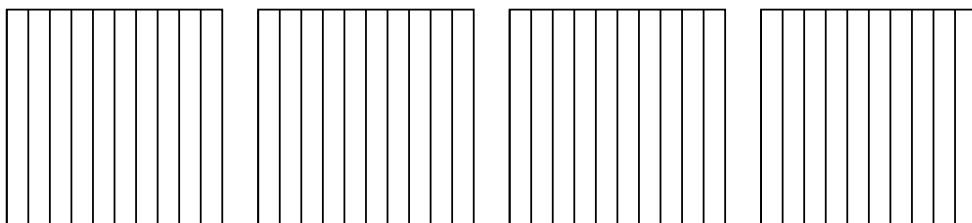
3) $4 \times 0.8 =$



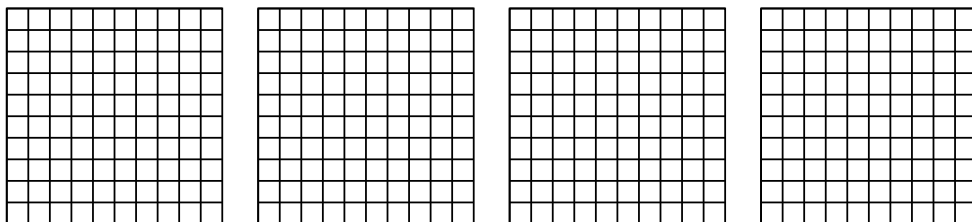
4) $2 \times 0.5 =$



5) $4 \times 0.8 =$



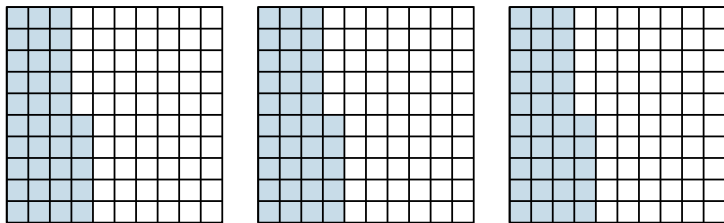
6) $4 \times 0.68 =$



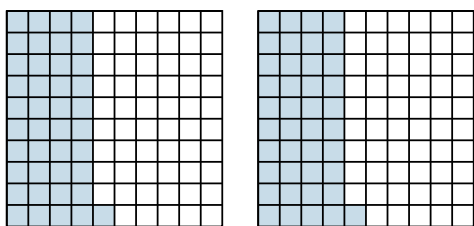


Use the visual model to solve each problem.

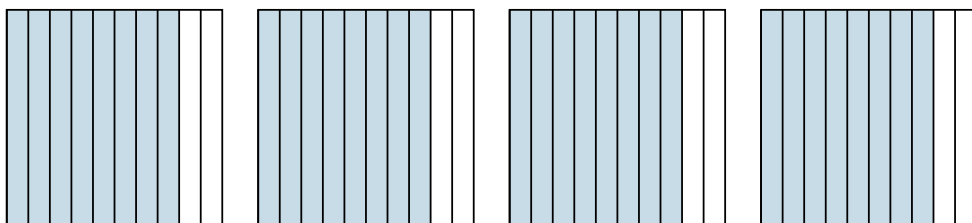
1) $3 \times 0.35 =$



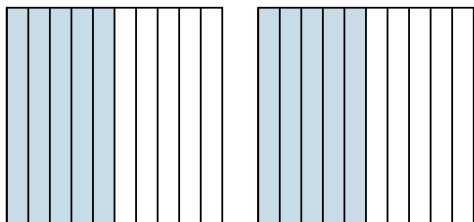
2) $2 \times 0.41 =$



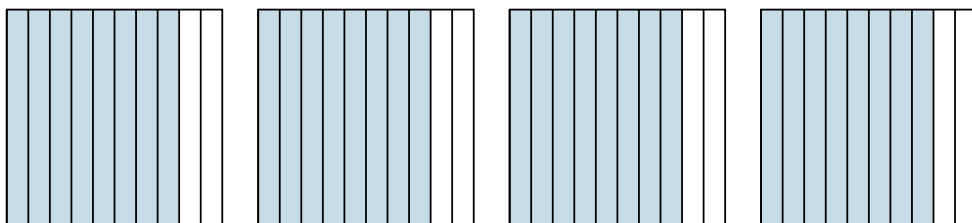
3) $4 \times 0.8 =$



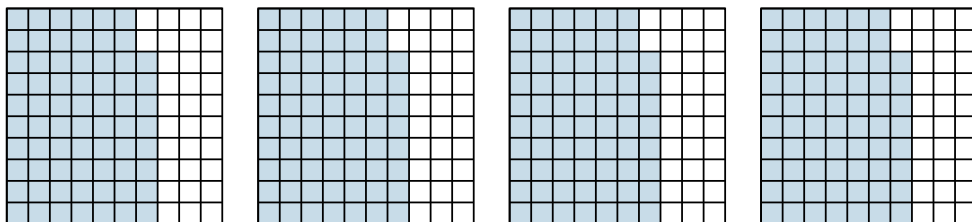
4) $2 \times 0.5 =$



5) $4 \times 0.8 =$



6) $4 \times 0.68 =$



Answers

1. $\frac{105}{100} = 1.05$

2. $\frac{82}{100} = 0.82$

3. $\frac{32}{10} = 3.2$

4. $\frac{10}{10} = 1$

5. $\frac{32}{10} = 3.2$

6. $\frac{272}{100} = 2.72$