



Use the block on the left to find the value of the set of blocks on the right.

Answers

1) = 1

1. \_\_\_\_\_

2) = 1

2. \_\_\_\_\_

3) = 1

3. \_\_\_\_\_

4) = 1

4. \_\_\_\_\_

5) = 1

5. \_\_\_\_\_

6) = 1

6. \_\_\_\_\_

7) = 1

7. \_\_\_\_\_

8) = 1

8. \_\_\_\_\_

9) = 1

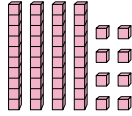
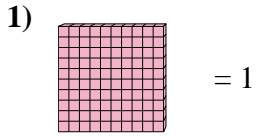
9. \_\_\_\_\_

10) = 1

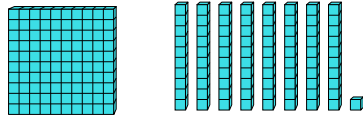
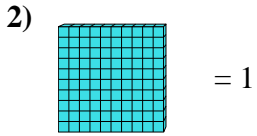
10. \_\_\_\_\_



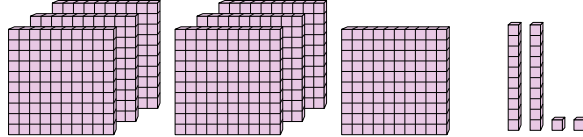
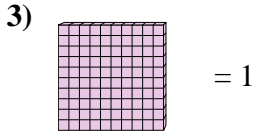
Use the block on the left to find the value of the set of blocks on the right.



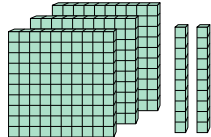
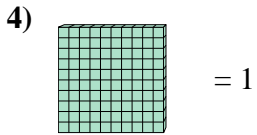
1. 0.48



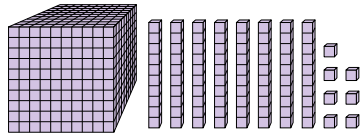
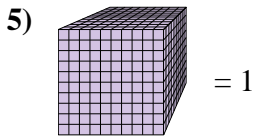
2. 1.81



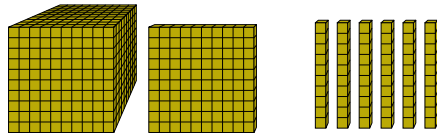
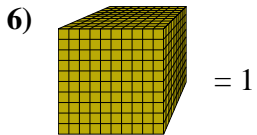
3. 7.22



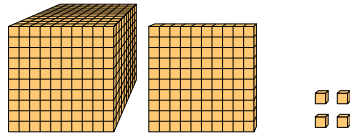
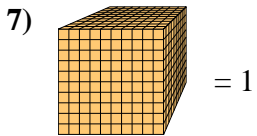
4. 3.2



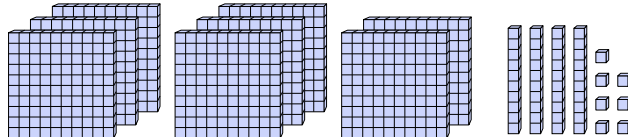
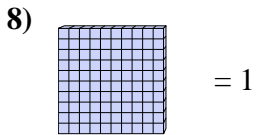
5. 1.087



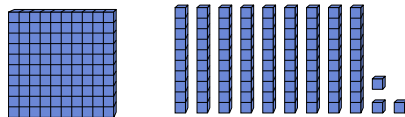
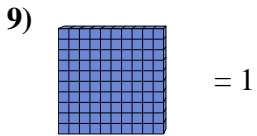
6. 1.16



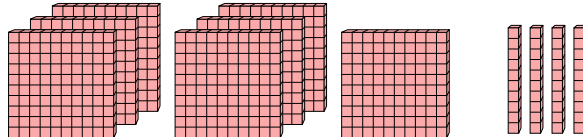
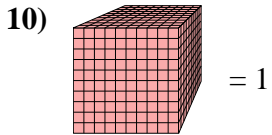
7. 1.104



8. 8.47



9. 1.93



10. 0.74

Answers



Use the block on the left to find the value of the set of blocks on the right.

Answers

1) = 1

1. \_\_\_\_\_

2) = 1

2. \_\_\_\_\_

3) = 1

3. \_\_\_\_\_

4) = 1

4. \_\_\_\_\_

5) = 1

5. \_\_\_\_\_

6) = 1

6. \_\_\_\_\_

7) = 1

7. \_\_\_\_\_

8) = 1

8. \_\_\_\_\_

9) = 1

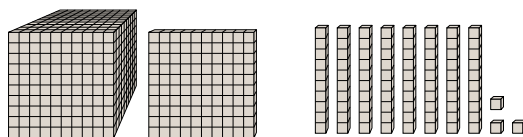
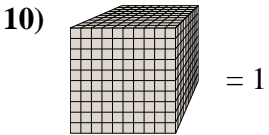
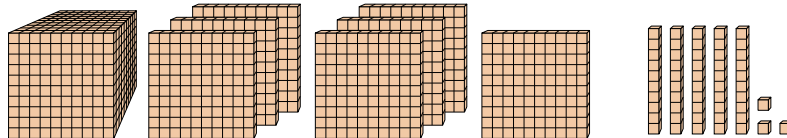
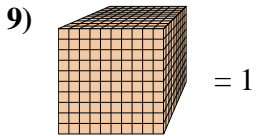
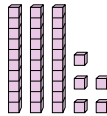
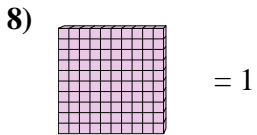
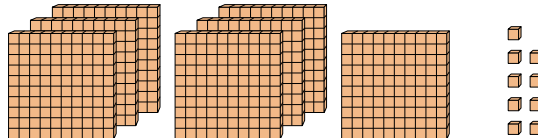
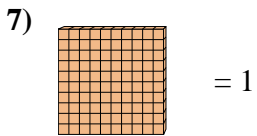
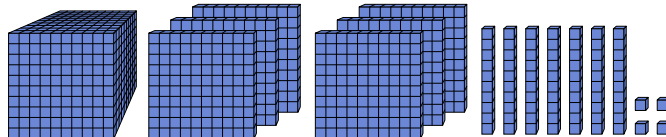
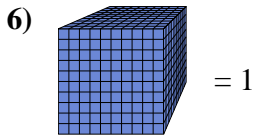
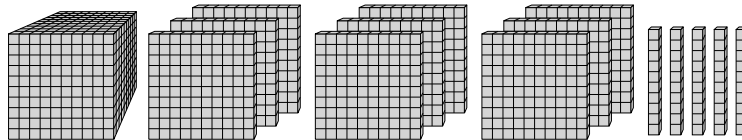
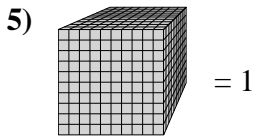
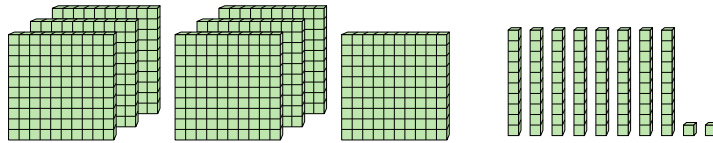
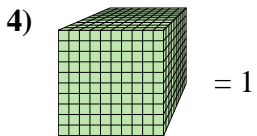
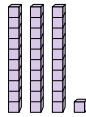
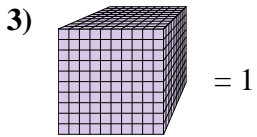
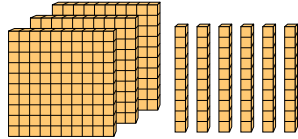
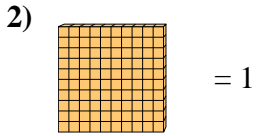
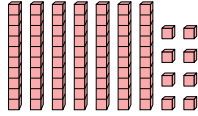
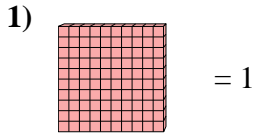
9. \_\_\_\_\_

10) = 1

10. \_\_\_\_\_



Use the block on the left to find the value of the set of blocks on the right.



Answers

1. 0.78

2. 3.6

3. 0.031

4. 0.782

5. 1.95

6. 1.674

7. 7.09

8. 0.35

9. 1.753

10. 1.183



Use the block on the left to find the value of the set of blocks on the right.

Answers

1) = 1

1. \_\_\_\_\_

2) = 1

2. \_\_\_\_\_

3) = 1

3. \_\_\_\_\_

4) = 1

4. \_\_\_\_\_

5) = 1

5. \_\_\_\_\_

6) = 1

6. \_\_\_\_\_

7) = 1

7. \_\_\_\_\_

8) = 1

8. \_\_\_\_\_

9) = 1

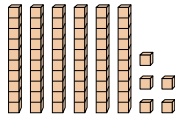
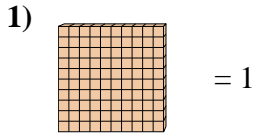
9. \_\_\_\_\_

10) = 1

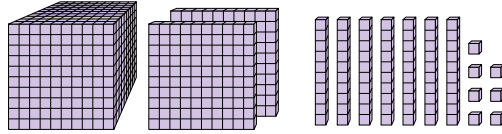
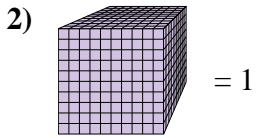
10. \_\_\_\_\_



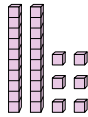
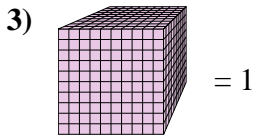
Use the block on the left to find the value of the set of blocks on the right.



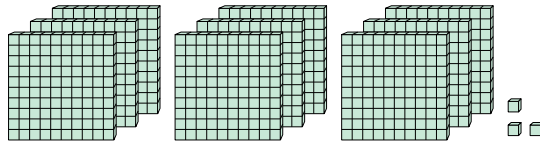
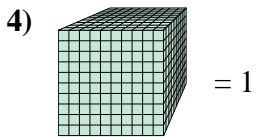
1. 0.65



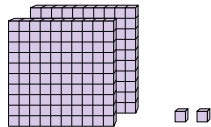
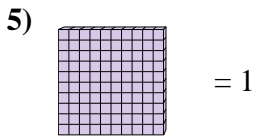
2. 1.277



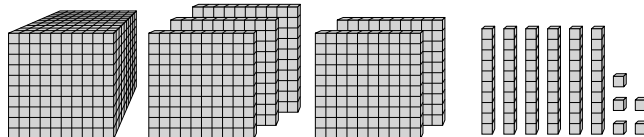
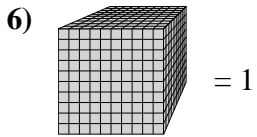
3. 0.026



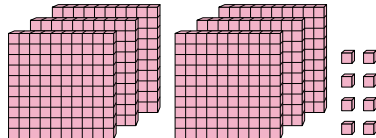
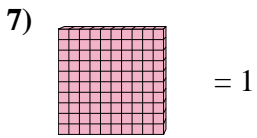
4. 0.903



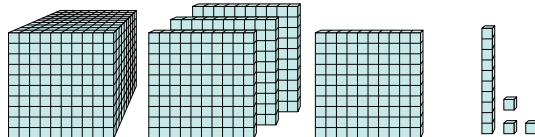
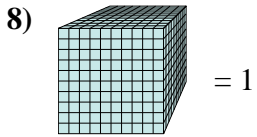
5. 2.02



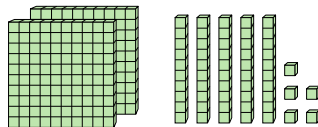
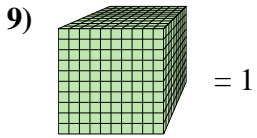
6. 1.565



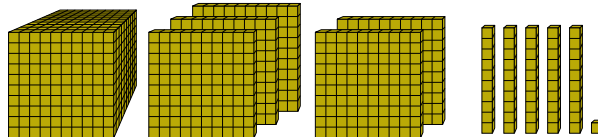

7. 6.08



8. 1.413



9. 0.255



10. 1.551

Answers



Use the block on the left to find the value of the set of blocks on the right.

Answers

1) = 1

1. \_\_\_\_\_

2) = 1

2. \_\_\_\_\_

3) = 1

3. \_\_\_\_\_

4) = 1

4. \_\_\_\_\_

5) = 1

5. \_\_\_\_\_

6) = 1

6. \_\_\_\_\_

7) = 1

7. \_\_\_\_\_

8) = 1

8. \_\_\_\_\_

9) = 1

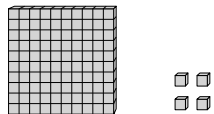
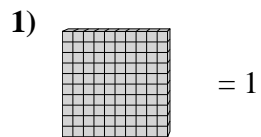
9. \_\_\_\_\_

10) = 1

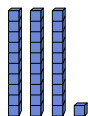
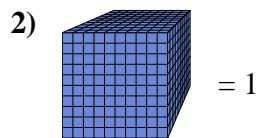
10. \_\_\_\_\_




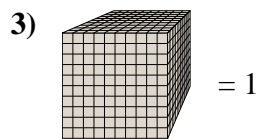
Use the block on the left to find the value of the set of blocks on the right.



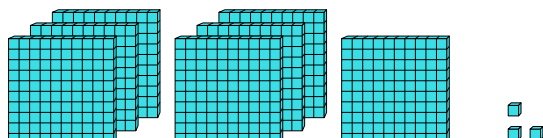
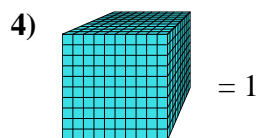
1. 1.04



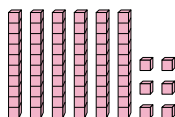
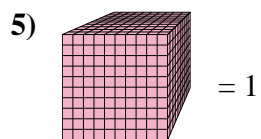
2. 0.031



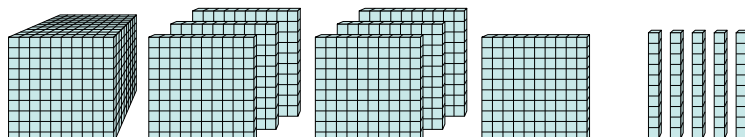
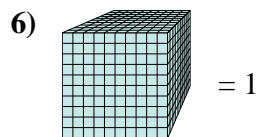
3. 0.102



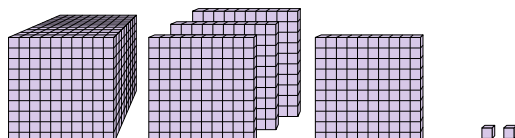
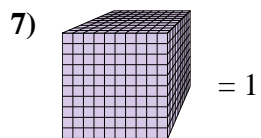
4. 0.703



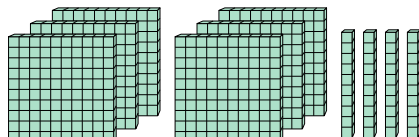
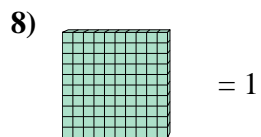
5. 0.066



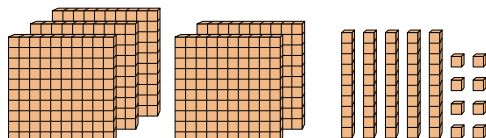
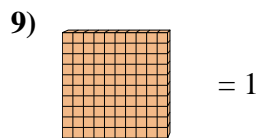
6. 1.75



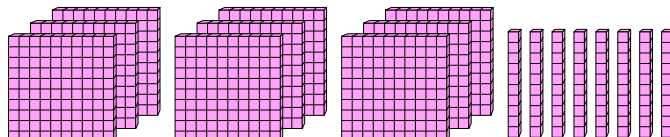
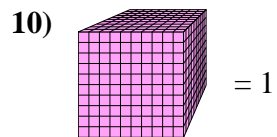
7. 1.402



8. 6.4



9. 5.58



10. 0.98

Answers





Use the block on the left to find the value of the set of blocks on the right.

Answers

1) = 1

1. \_\_\_\_\_

2) = 1

2. \_\_\_\_\_

3) = 1

3. \_\_\_\_\_

4) = 1

4. \_\_\_\_\_

5) = 1

5. \_\_\_\_\_

6) = 1

6. \_\_\_\_\_

7) = 1

7. \_\_\_\_\_

8) = 1

8. \_\_\_\_\_

9) = 1

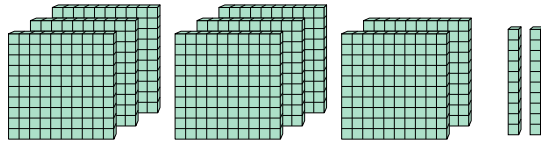
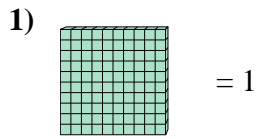
9. \_\_\_\_\_

10) = 1

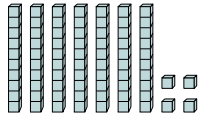
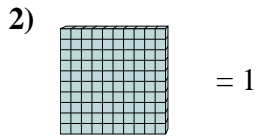
10. \_\_\_\_\_



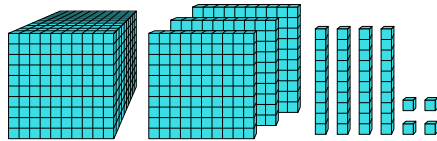
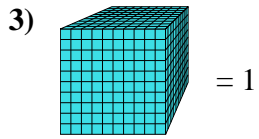
Use the block on the left to find the value of the set of blocks on the right.



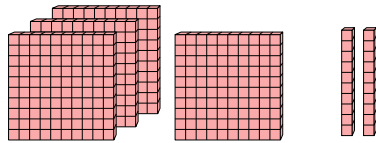
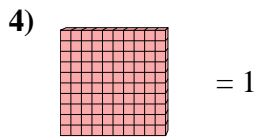
1. 8.2



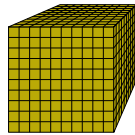
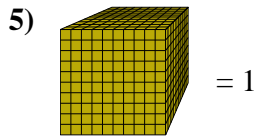
2. 0.74



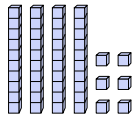
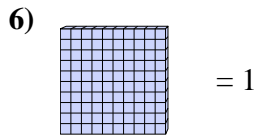
3. 1.344



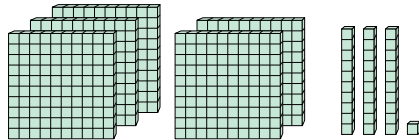
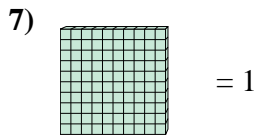
4. 4.2



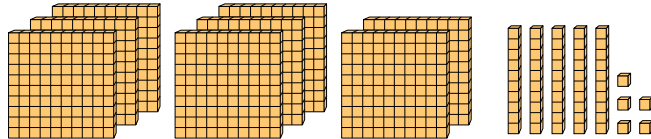
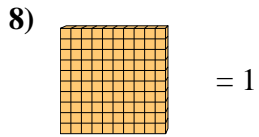
5. 1



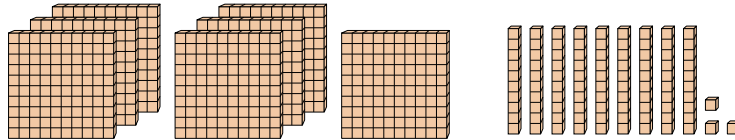
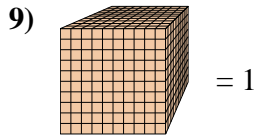
6. 0.46



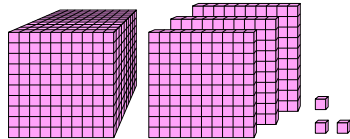
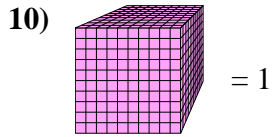
7. 5.31



8. 8.55



9. 0.793



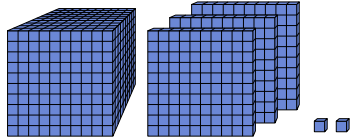
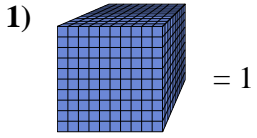
10. 1.303

Answers

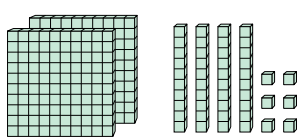
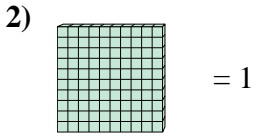


Use the block on the left to find the value of the set of blocks on the right.

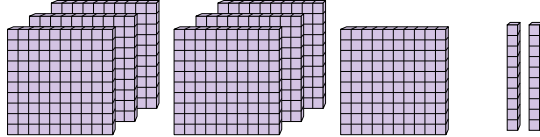
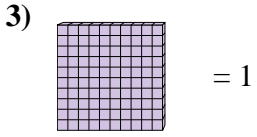
Answers



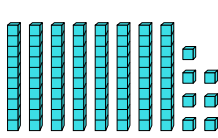
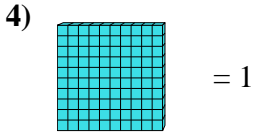
1. \_\_\_\_\_



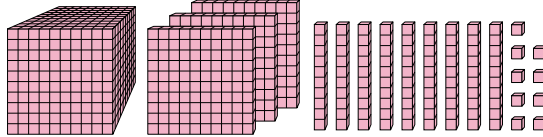
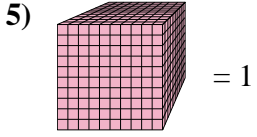
2. \_\_\_\_\_



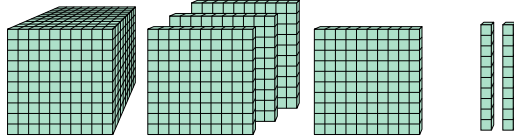
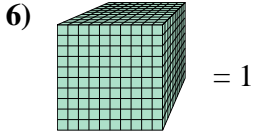
3. \_\_\_\_\_



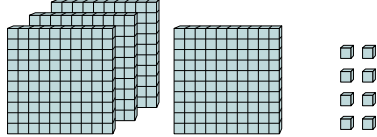
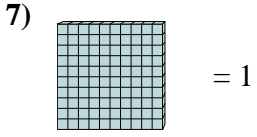
4. \_\_\_\_\_



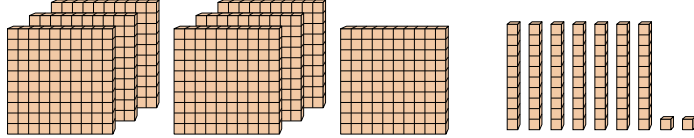
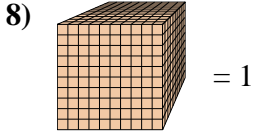
5. \_\_\_\_\_



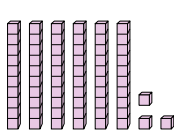
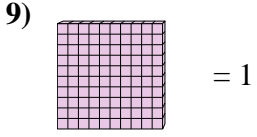
6. \_\_\_\_\_



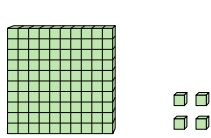
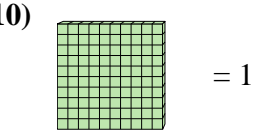
7. \_\_\_\_\_



8. \_\_\_\_\_



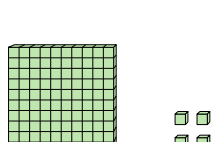
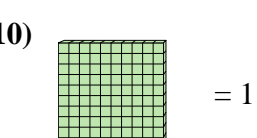
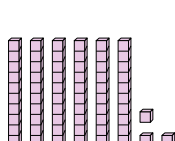
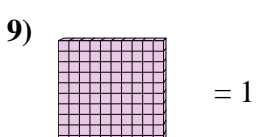
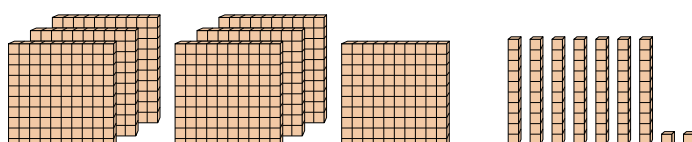
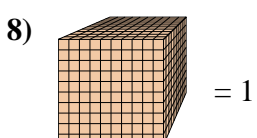
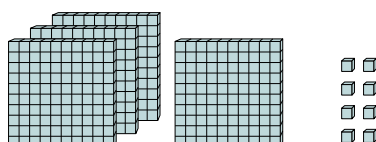
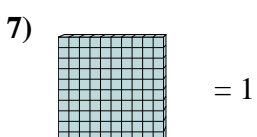
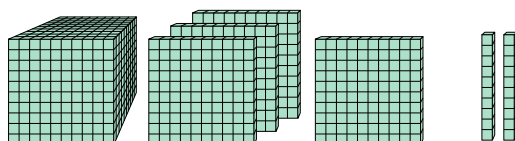
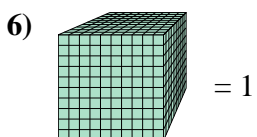
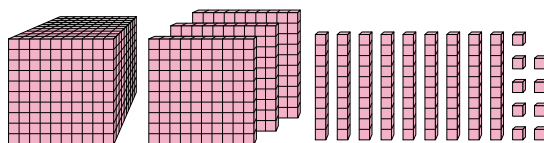
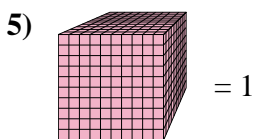
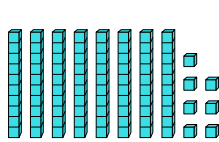
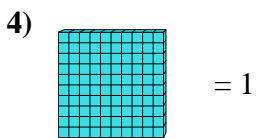
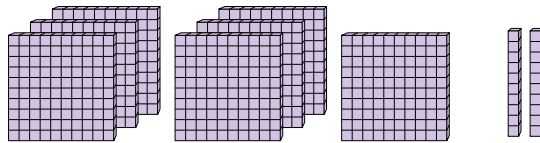
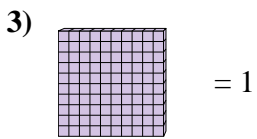
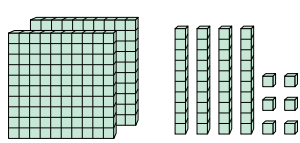
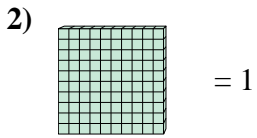
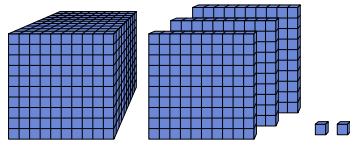
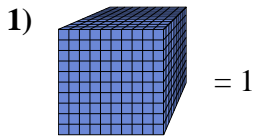
9. \_\_\_\_\_



10. \_\_\_\_\_



Use the block on the left to find the value of the set of blocks on the right.



Answers

1. 1.302

2. 2.46

3. 7.2

4. 0.87

5. 1.399

6. 1.42

7. 4.08

8. 0.772

9. 0.63

10. 1.04



Use the block on the left to find the value of the set of blocks on the right.

Answers

1) = 1

1. \_\_\_\_\_

2) = 1

2. \_\_\_\_\_

3) = 1

3. \_\_\_\_\_

4) = 1

4. \_\_\_\_\_

5) = 1

5. \_\_\_\_\_

6) = 1

6. \_\_\_\_\_

7) = 1

7. \_\_\_\_\_

8) = 1

8. \_\_\_\_\_

9) = 1

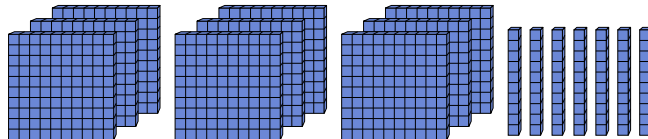
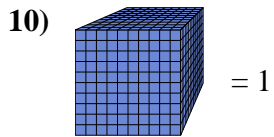
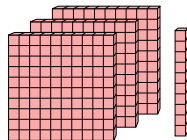
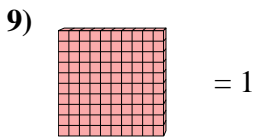
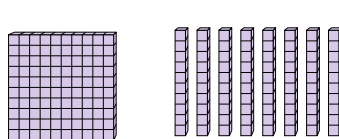
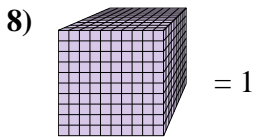
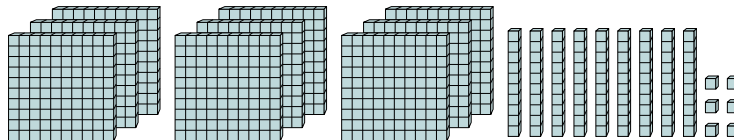
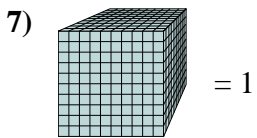
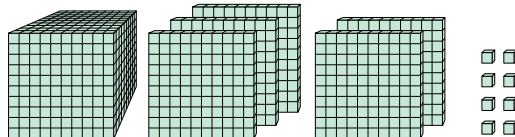
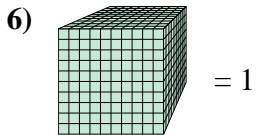
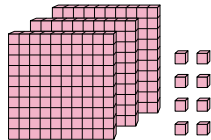
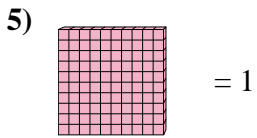
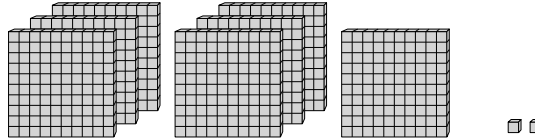
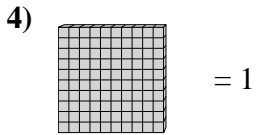
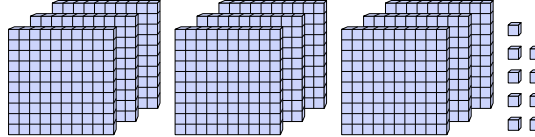
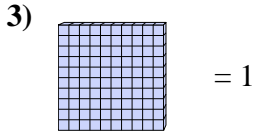
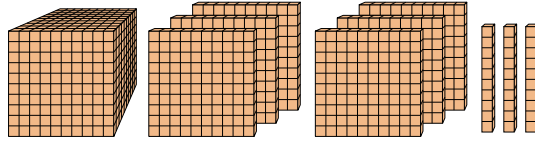
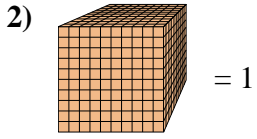
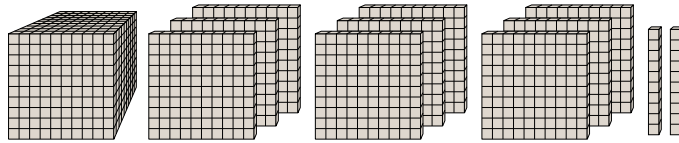
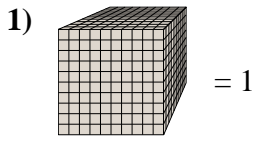
9. \_\_\_\_\_

10) = 1

10. \_\_\_\_\_



Use the block on the left to find the value of the set of blocks on the right.



Answers

1. 1.92

2. 1.63

3. 9.09

4. 7.02

5. 3.08

6. 1.508

7. 0.996

8. 0.18

9. 3.1

10. 0.97



Use the block on the left to find the value of the set of blocks on the right.

Answers

1) = 1

1. \_\_\_\_\_

2) = 1

2. \_\_\_\_\_

3) = 1

3. \_\_\_\_\_

4) = 1

4. \_\_\_\_\_

5) = 1

5. \_\_\_\_\_

6) = 1

6. \_\_\_\_\_

7) = 1

7. \_\_\_\_\_

8) = 1

8. \_\_\_\_\_

9) = 1

9. \_\_\_\_\_

10) = 1

10. \_\_\_\_\_



Use the block on the left to find the value of the set of blocks on the right.

1) = 1

2) = 1

3) = 1

4) = 1

5) = 1

6) = 1

7) = 1

8) = 1

9) = 1

10) = 1

Answers

1. 8.85

2. 0.733

3. 0.22

4. 0.92

5. 3.68

6. 7.6

7. 0.71

8. 1.159

9. 0.38

10. 1.17





Use the block on the left to find the value of the set of blocks on the right.

Answers

1) = 1

1. \_\_\_\_\_

2) = 1

2. \_\_\_\_\_

3) = 1

3. \_\_\_\_\_

4) = 1

4. \_\_\_\_\_

5) = 1

5. \_\_\_\_\_

6) = 1

6. \_\_\_\_\_

7) = 1

7. \_\_\_\_\_

8) = 1

8. \_\_\_\_\_

9) = 1

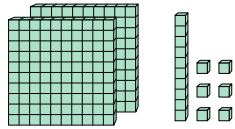
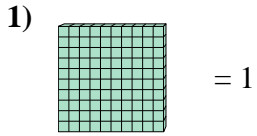
9. \_\_\_\_\_

10) = 1

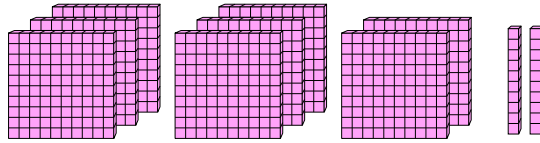
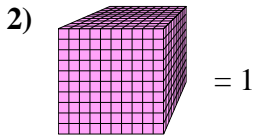
10. \_\_\_\_\_



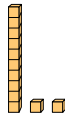
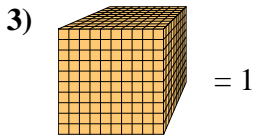
Use the block on the left to find the value of the set of blocks on the right.



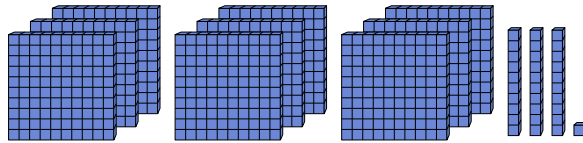
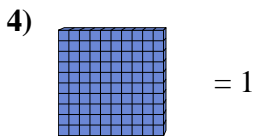
1. 2.16



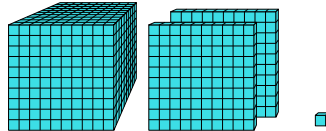
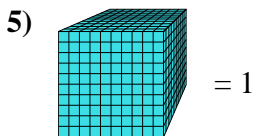
2. 0.82



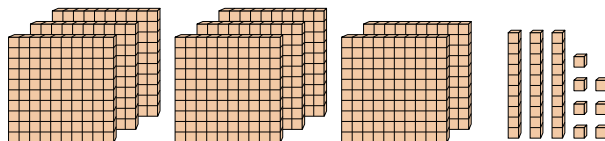
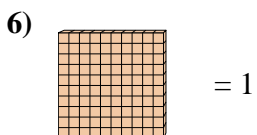
3. 0.012



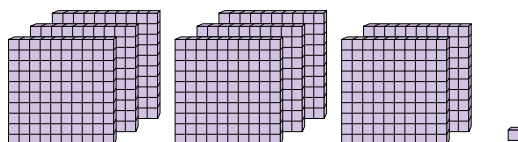
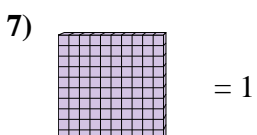
4. 9.31



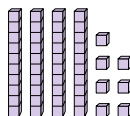
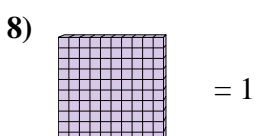
5. 1.201



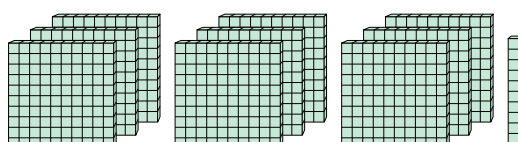
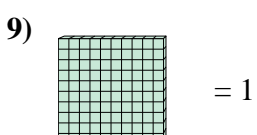
6. 8.37



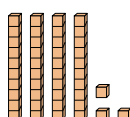
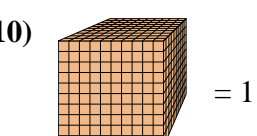
7. 8.01



8. 0.47



9. 9.1



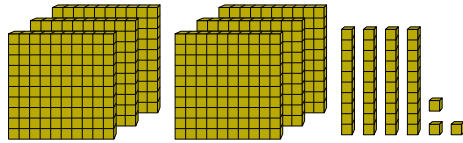
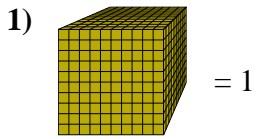
10. 0.043

Answers

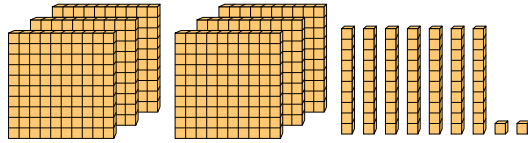
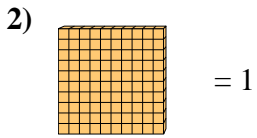


Use the block on the left to find the value of the set of blocks on the right.

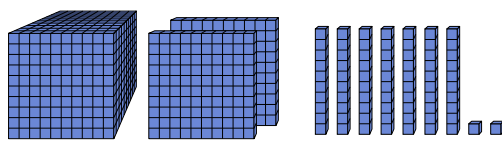
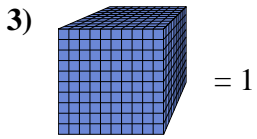
Answers



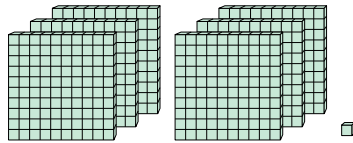
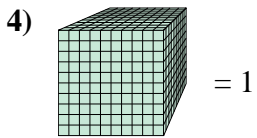
1. \_\_\_\_\_



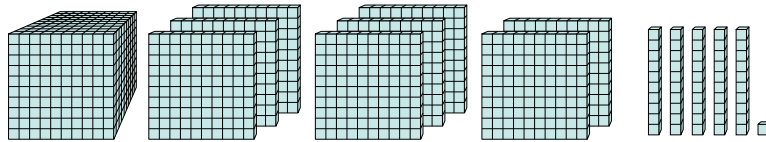
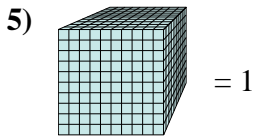
2. \_\_\_\_\_



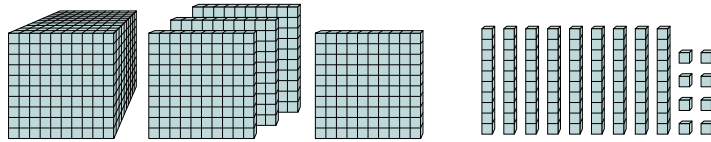
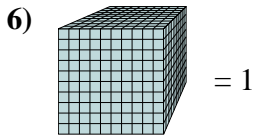
3. \_\_\_\_\_



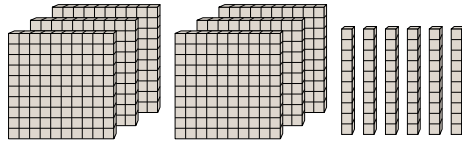
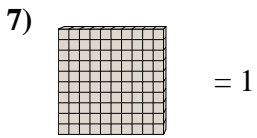
4. \_\_\_\_\_



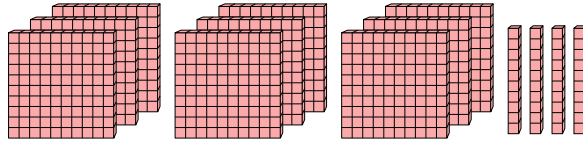
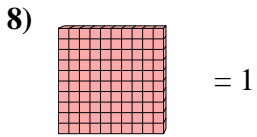
5. \_\_\_\_\_



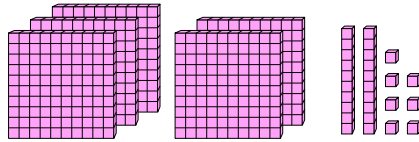
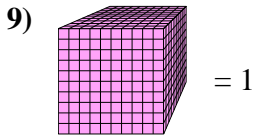
6. \_\_\_\_\_



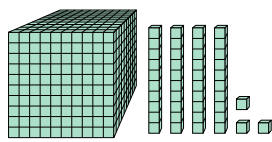
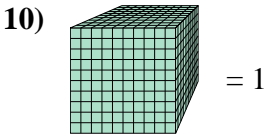
7. \_\_\_\_\_



8. \_\_\_\_\_



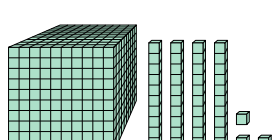
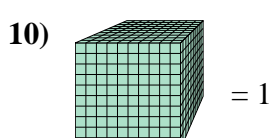
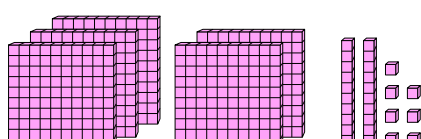
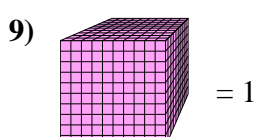
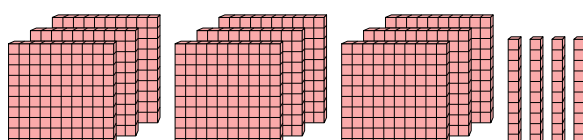
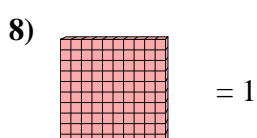
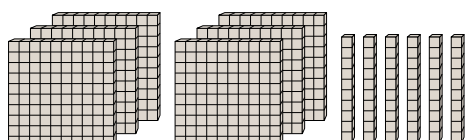
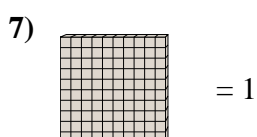
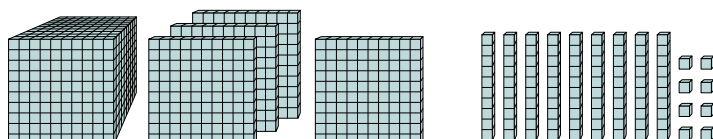
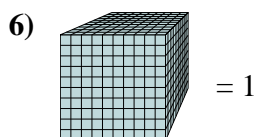
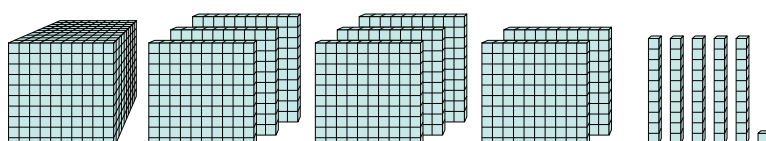
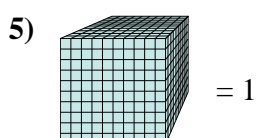
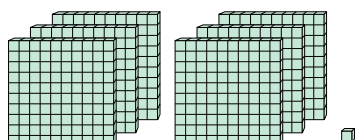
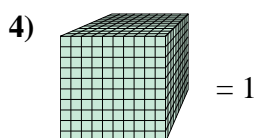
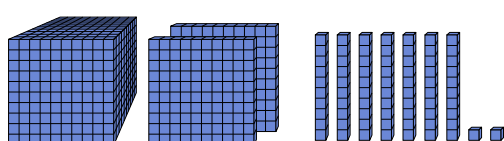
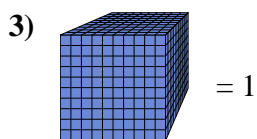
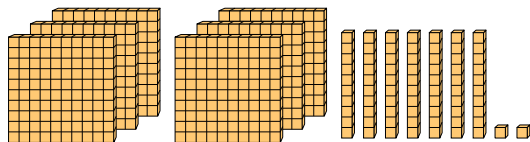
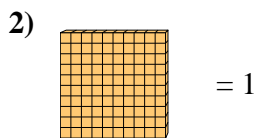
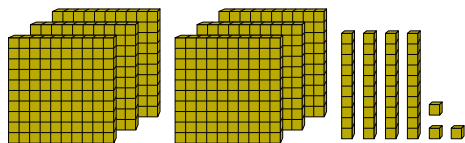
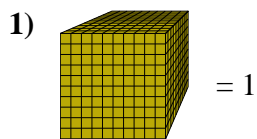
9. \_\_\_\_\_



10. \_\_\_\_\_



Use the block on the left to find the value of the set of blocks on the right.



Answers

1. 0.643

2. 6.72

3. 1.272

4. 0.601

5. 1.851

6. 1.498

7. 6.6

8. 9.4

9. 0.527

10. 1.043