



Use the block on the left to find the value of the set of blocks on the right.

Answers

1) = 1

1. _____

2) = 1

2. _____

3) = 1

3. _____

4) = 1

4. _____

5) = 1

5. _____

6) = 1

6. _____

7) = 1

7. _____

8) = 1

8. _____

9) = 1


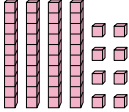
9. _____


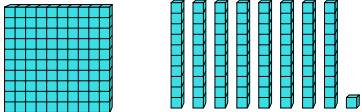
10) = 1


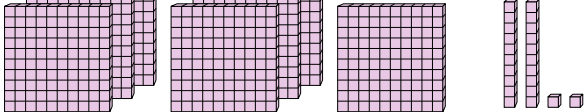
10. _____


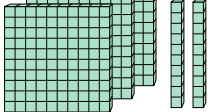


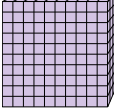
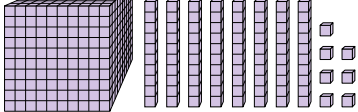
Use the block on the left to find the value of the set of blocks on the right.

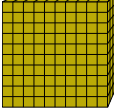

1)  = 1 

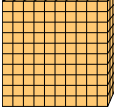
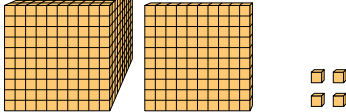
2)  = 1 


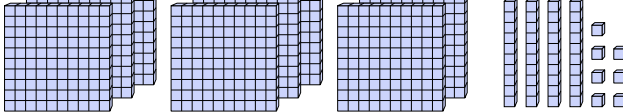
3)  = 1 

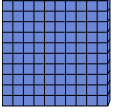
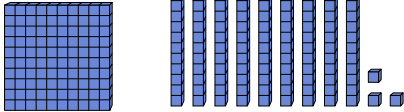
4)  = 1 

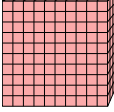
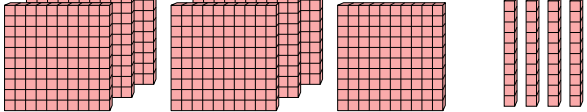
5)  = 1 

6)  = 1 

7)  = 1 

8)  = 1 

9)  = 1 

10)  = 1 

Answers

1. 0.48
2. 1.81
3. 7.22
4. 3.2
5. 1.087
6. 1.16
7. 1.104
8. 8.47
9. 1.93
10. 0.74