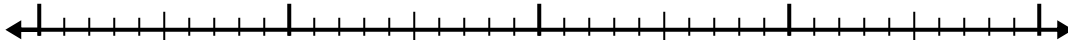


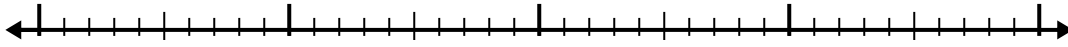


Use the number line to solve each problem.

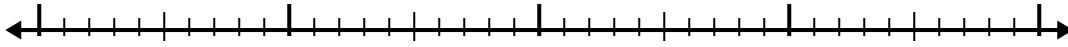
1) $6.1 + 1.7 =$



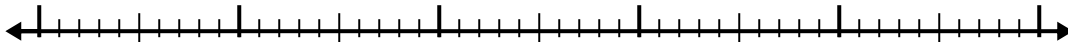
2) $2.8 + 1.3 =$




3) $5.6 + 1.3 =$



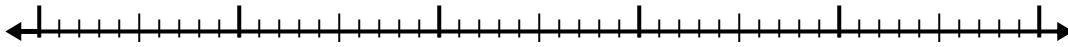
4) $7.5 + 3.7 =$



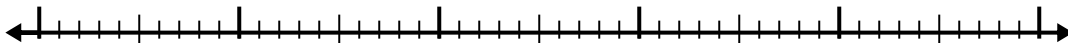
5) $7.8 + 2.9 =$



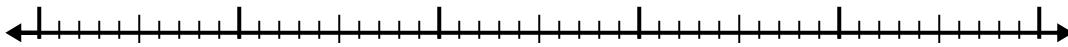
6) $3.4 + 2.5 =$



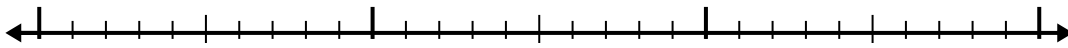
7) $6.7 + 2.7 =$



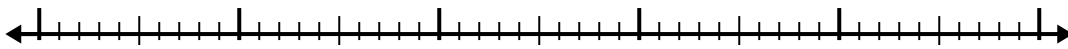
8) $2.1 + 3.3 =$



9) $1 + 1.7 =$



10) $3 + 3.1 =$



Answers

1. _____

2. _____

3. _____

4. _____

5. _____

6. _____

7. _____

8. _____

9. _____

10. _____

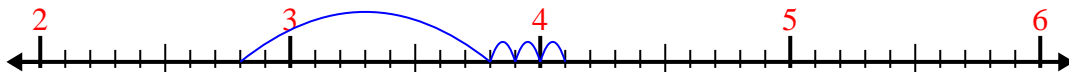


Use the number line to solve each problem.

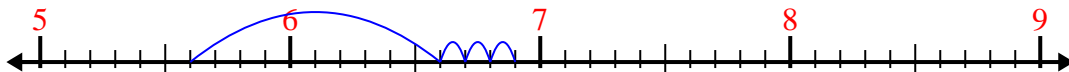
1) $6.1 + 1.7 =$



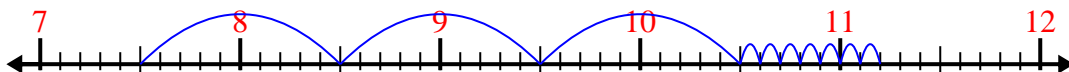
2) $2.8 + 1.3 =$



3) $5.6 + 1.3 =$



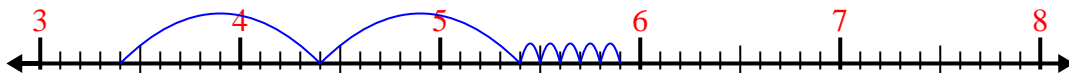
4) $7.5 + 3.7 =$



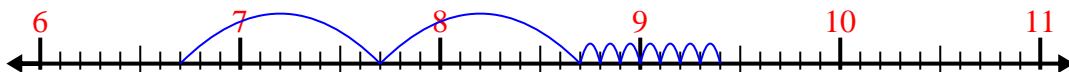
5) $7.8 + 2.9 =$



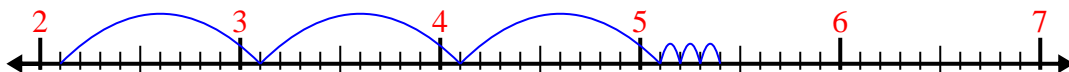
6) $3.4 + 2.5 =$



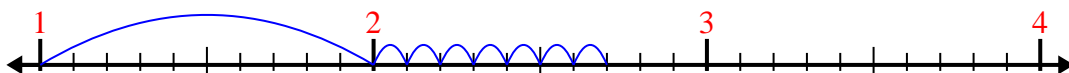
7) $6.7 + 2.7 =$



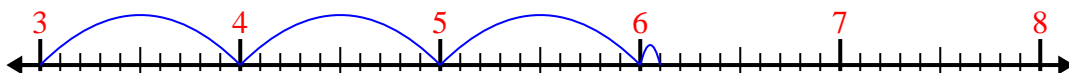
8) $2.1 + 3.3 =$



9) $1 + 1.7 =$



10) $3 + 3.1 =$



Answers

1. 7.8

2. 4.1

3. 6.9

4. 11.2

5. 10.7

6. 5.9

7. 9.4

8. 5.4

9. 2.7

10. 6.1