



Determine which letter best represents the volume.

Answers

Cup

A cup is about the amount of milk you get from the cafeteria.



Pint

A pint is about the amount you get in a large glass.

1 pint = 2 cups



Quart

A quart is about the amount you get in a large milk container.

1 quart = 2 pints



Gallon


A gallon is the amount that comes in the large plastic container.

1 gallon = 4 quarts



1. _____
2. _____
3. _____
4. _____
5. _____
6. _____
7. _____
8. _____
9. _____


1)



Water a barrel holds

- A. 50 gallons
- B. 20 cups
- C. 3 inches
- D. 10 pints

2)



Soda in a can

- A. 4 cups
- B. 1 gallon
- C. 4 pints
- D. 1.5 cups

3)



Flour in a batch of cookies

- A. 5 gallons
- B. 2 quarts
- C. 1.5 cups
- D. 2 gallons

4)



Sand in a pail

- A. 7 fluid ounces
- B. 1 cup
- C. 1 gallon
- D. 32 gallons

5)



Measuring Cup

- A. 1 cup
- B. 1 gallon
- C. 1 quart
- D. 1 pint


6)



Flour in a pan of brownies

- A. 3 gallons
- B. 2 cups
- C. 8 gallons
- D. 16 quarts

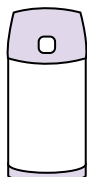
7)



Sand a wheel barrow holds

- A. 8 quarts
- B. 45 gallons
- C. 1000 grams
- D. 4 cups

8)



Liquid in a thermos

- A. 1 cup
- B. 1 gallon
- C. 2 pounds
- D. 4 quarts

9)



Water for a house plant

- A. 3 gallons
- B. 6 quarts
- C. 4 pounds
- D. 2 cups



Determine which letter best represents the volume.

Cup

A cup is about the amount of milk you get from the cafeteria.

Pint

A pint is about the amount you get in a large glass.

1 pint = 2 cups

Quart

A quart is about the amount you get in a large milk container.

1 quart = 2 pints


Gallon

A gallon is the amount that comes in the large plastic container.

1 gallon = 4 quarts




1)



Water a barrel holds

- A. 50 gallons
- B. 20 cups
- C. 3 inches
- D. 10 pints

2)



Soda in a can

- A. 4 cups
- B. 1 gallon
- C. 4 pints
- D. 1.5 cups

3)



Flour in a batch of cookies

- A. 5 gallons
- B. 2 quarts
- C. 1.5 cups
- D. 2 gallons

4)



Sand in a pail

- A. 7 fluid ounces
- B. 1 cup
- C. 1 gallon
- D. 32 gallons

5)



Measuring Cup

- A. 1 cup
- B. 1 gallon
- C. 1 quart
- D. 1 pint


6)



Flour in a pan of brownies

- A. 3 gallons
- B. 2 cups
- C. 8 gallons
- D. 16 quarts

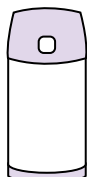
7)



Sand a wheel barrow holds

- A. 8 quarts
- B. 45 gallons
- C. 1000 grams
- D. 4 cups

8)



Liquid in a thermos

- A. 1 cup
- B. 1 gallon
- C. 2 pounds
- D. 4 quarts

9)



Water for a house plant

- A. 3 gallons
- B. 6 quarts
- C. 4 pounds
- D. 2 cups

Answers

1. **A**

2. **D**

3. **C**

4. **C**

5. **A**

6. **B**

7. **B**

8. **A**

9. **D**