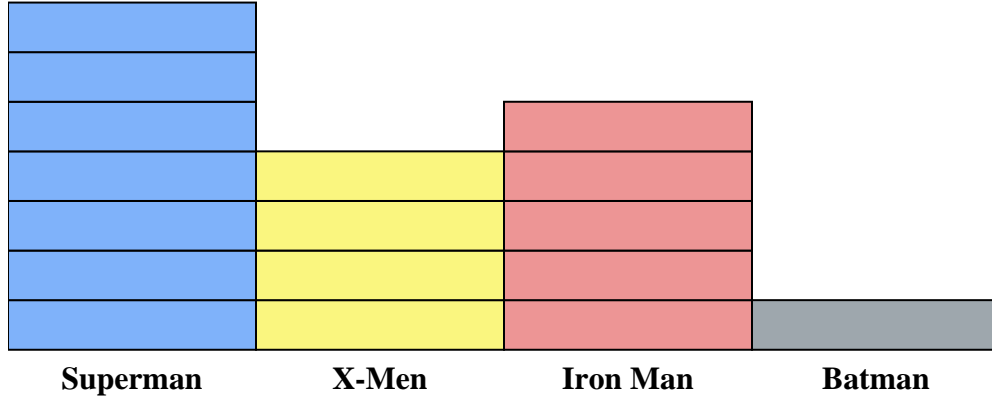




Solve each problem.



Each  = 2 issues sold

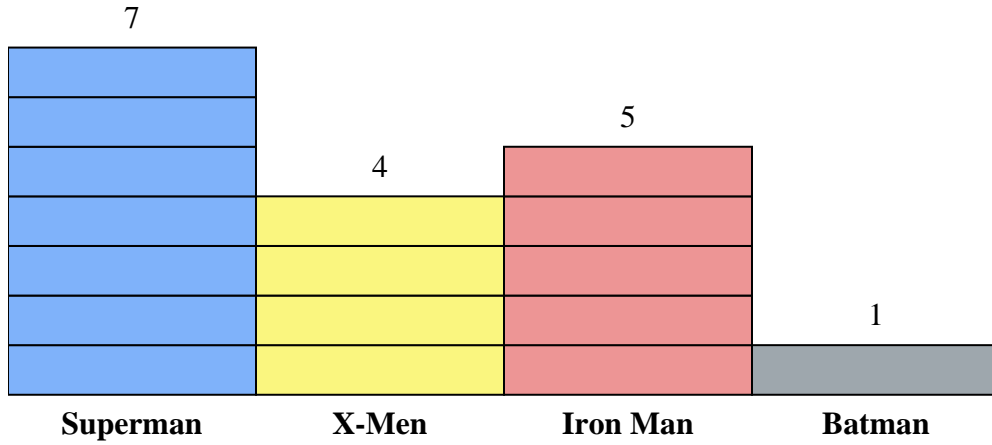
Answers

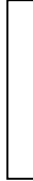
1. _____
2. _____
3. _____
4. _____
5. _____
6. _____
7. _____
8. _____
9. _____
10. _____

- 1) How many more issues of Superman were sold than issues of Batman?
- 2) Which comic series sold the most issues?
- 3) Which comic series sold the fewest issues?
- 4) What is the total number of issues sold for all the comics?
- 5) Which sold fewer, issues of Batman or issues of Iron Man?
- 6) Which comic series sold more, Superman or X-Men?
- 7) Which comic series sold exactly 8 issues?
- 8) How many issues of Iron Man were sold?
- 9) What is the combined number of Iron Man and Superman issues sold?
- 10) What is the difference in the number of X-Men issues sold and the number of Batman issues sold?



Solve each problem.



Each  = 2 issues sold

- How many more issues of Superman were sold than issues of Batman?
- Which comic series sold the most issues?
- Which comic series sold the fewest issues?
- What is the total number of issues sold for all the comics?
- Which sold fewer, issues of Batman or issues of Iron Man?
- Which comic series sold more, Superman or X-Men?
- Which comic series sold exactly 8 issues?
- How many issues of Iron Man were sold?
- What is the combined number of Iron Man and Superman issues sold?
- What is the difference in the number of X-Men issues sold and the number of Batman issues sold?

Answers

- 12
- Superman
- Batman
- 34
- Batman
- Superman
- X-Men
- 10
- 24
- 6