



Determine which graph goes with which table.

1)

| Color | People |
|--------|--------|
| blue | 4,000 |
| green | 3,000 |
| orange | 8,000 |
| yellow | 5,000 |
| red | 2,000 |

2)

| Color | People |
|--------|--------|
| blue | 3,000 |
| green | 8,000 |
| orange | 4,000 |
| yellow | 2,000 |
| red | 5,000 |

3)

| Color | People |
|--------|--------|
| blue | 2,000 |
| green | 5,000 |
| orange | 8,000 |
| yellow | 4,000 |
| red | 3,000 |

4)

| Color | People |
|--------|--------|
| blue | 4,000 |
| green | 8,000 |
| orange | 2,000 |
| yellow | 5,000 |
| red | 3,000 |

5)

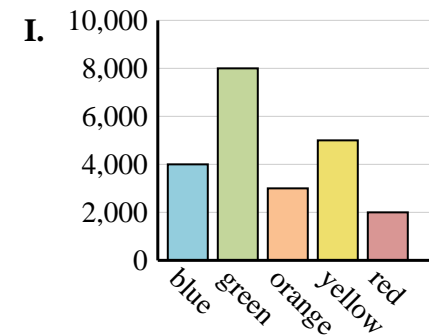
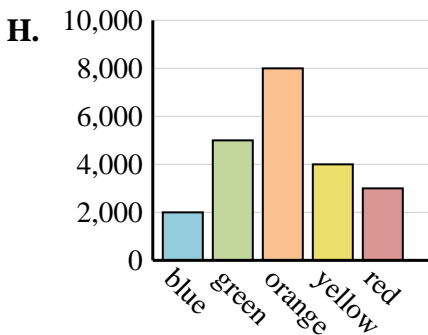
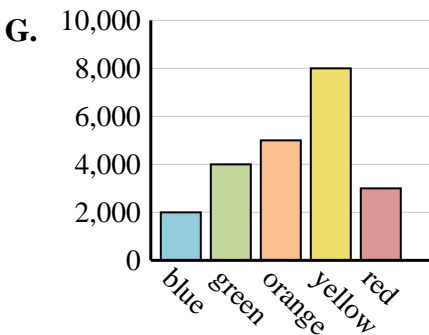
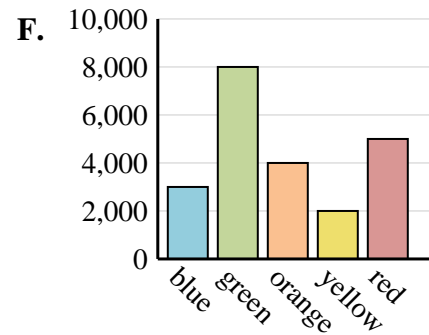
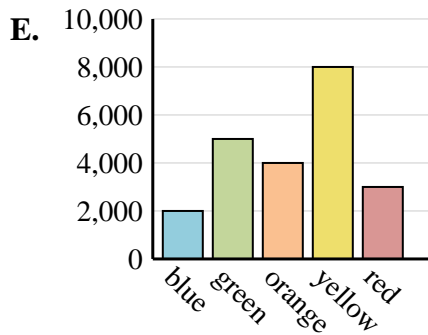
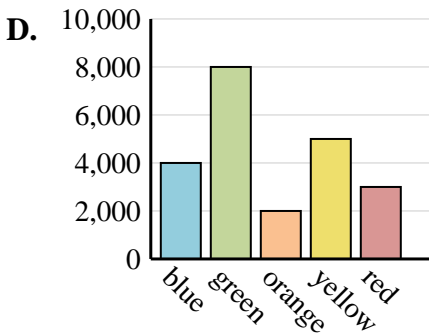
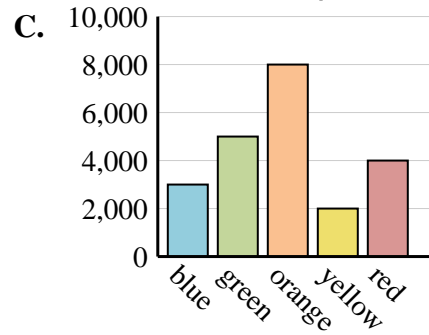
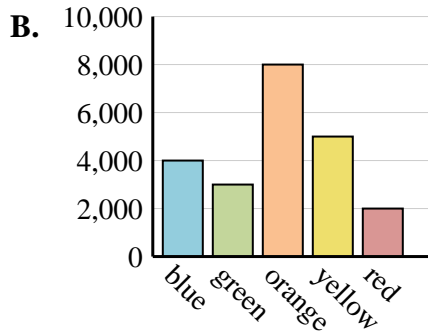
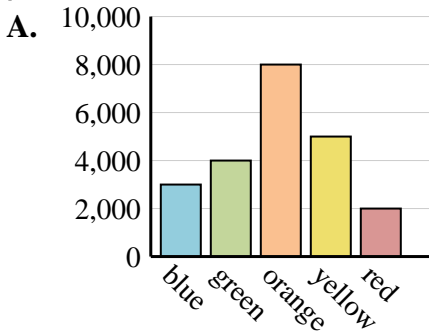
| Color | People |
|--------|--------|
| blue | 2,000 |
| green | 4,000 |
| orange | 5,000 |
| yellow | 8,000 |
| red | 3,000 |

6)

| Color | People |
|--------|--------|
| blue | 3,000 |
| green | 5,000 |
| orange | 8,000 |
| yellow | 2,000 |
| red | 4,000 |

Answers

1. _____
2. _____
3. _____
4. _____
5. _____
6. _____





Determine which graph goes with which table.

1)

| Color | People |
|--------|--------|
| blue | 4,000 |
| green | 3,000 |
| orange | 8,000 |
| yellow | 5,000 |
| red | 2,000 |

2)

| Color | People |
|--------|--------|
| blue | 3,000 |
| green | 8,000 |
| orange | 4,000 |
| yellow | 2,000 |
| red | 5,000 |

3)

| Color | People |
|--------|--------|
| blue | 2,000 |
| green | 5,000 |
| orange | 8,000 |
| yellow | 4,000 |
| red | 3,000 |

4)

| Color | People |
|--------|--------|
| blue | 4,000 |
| green | 8,000 |
| orange | 2,000 |
| yellow | 5,000 |
| red | 3,000 |

5)

| Color | People |
|--------|--------|
| blue | 2,000 |
| green | 4,000 |
| orange | 5,000 |
| yellow | 8,000 |
| red | 3,000 |

6)

| Color | People |
|--------|--------|
| blue | 3,000 |
| green | 5,000 |
| orange | 8,000 |
| yellow | 2,000 |
| red | 4,000 |

Answers

1. **B**
2. **F**
3. **H**
4. **D**
5. **G**
6. **C**

