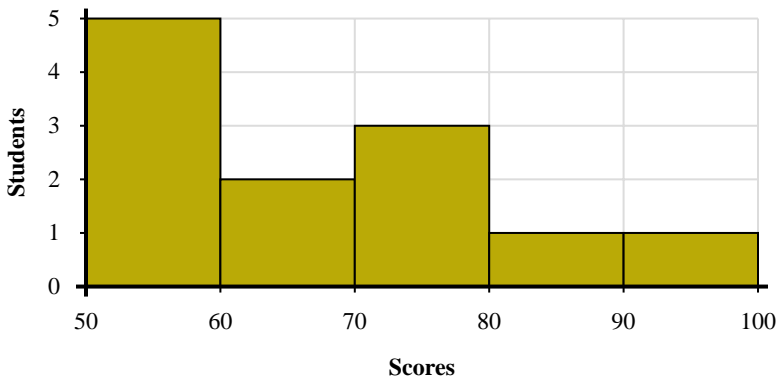
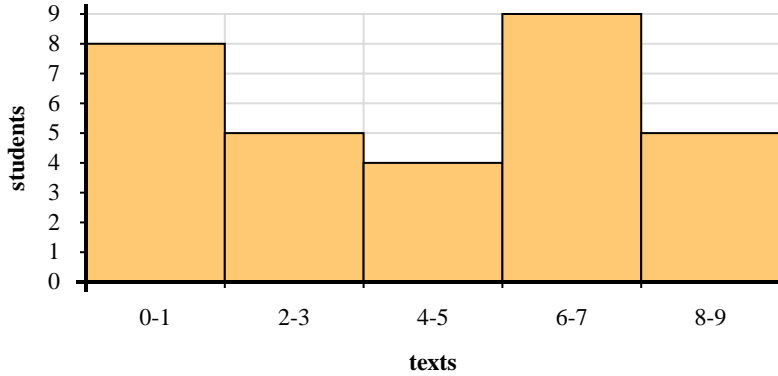




Use the histograms shown to answer each question.



- 1) How many students are represented in this histogram?
- 2) How many students scored between a 50 and 60?
- 3) Most students scored between a \_\_\_\_\_ and \_\_\_\_\_.
- 4) If a student scored a 54 which bar would they be added to?



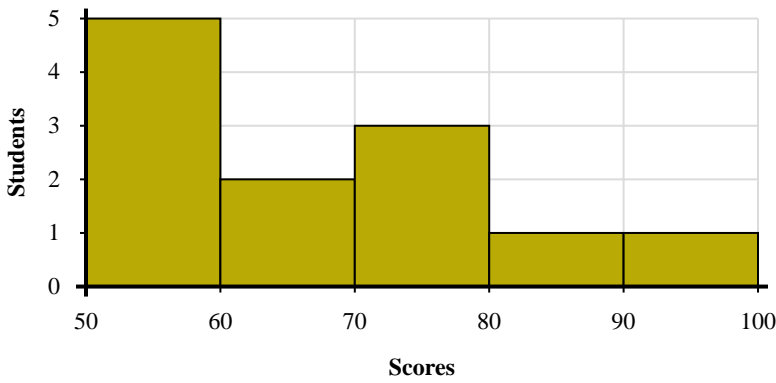
- 5) How many students sent between 6 and 8 texts?
- 6) How many students are represented in this histogram?
- 7) Most students sent between \_\_\_\_\_ and \_\_\_\_\_ texts.
- 8) If a student sent 6 texts which bar would they be added to?

Answers

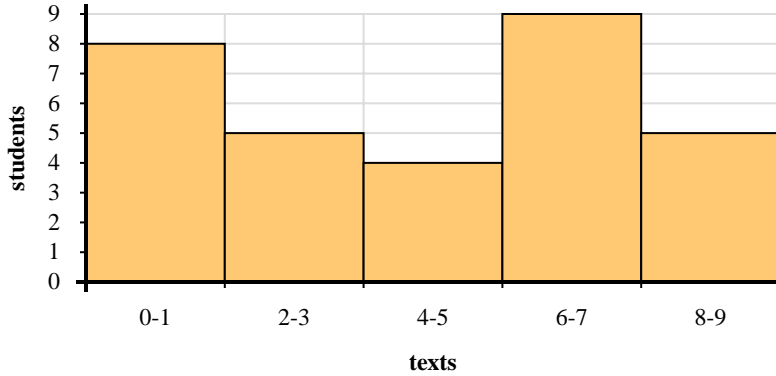
1. \_\_\_\_\_
2. \_\_\_\_\_
3. \_\_\_\_\_
4. \_\_\_\_\_
5. \_\_\_\_\_
6. \_\_\_\_\_
7. \_\_\_\_\_
8. \_\_\_\_\_



Use the histograms shown to answer each question.



- 1) How many students are represented in this histogram?
- 2) How many students scored between a 50 and 60?
- 3) Most students scored between a \_\_\_\_\_ and \_\_\_\_\_.
- 4) If a student scored a 54 which bar would they be added to?



- 5) How many students sent between 6 and 8 texts?
- 6) How many students are represented in this histogram?
- 7) Most students sent between \_\_\_\_\_ and \_\_\_\_\_ texts.
- 8) If a student sent 6 texts which bar would they be added to?

Answers

1. 12
2. 5
3. 50 60
4. 1
5. 9
6. 31
7. 6 8
8. 4