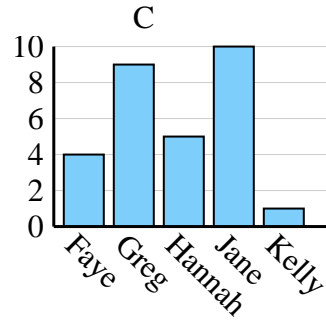
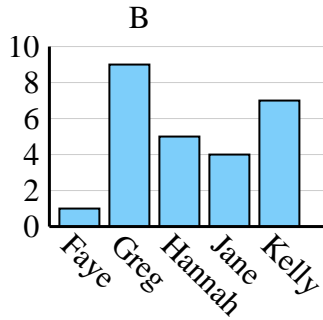
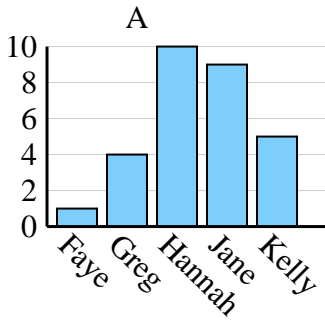




Determine which graph (A, B or C) best represents the information in the table.

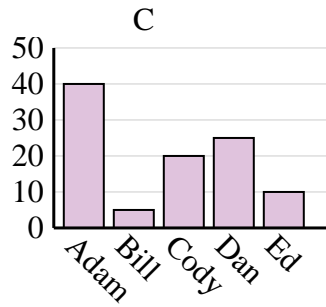
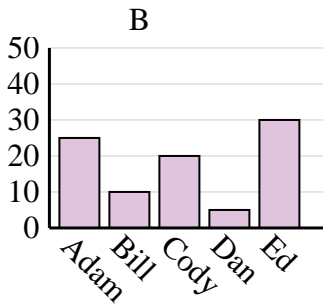
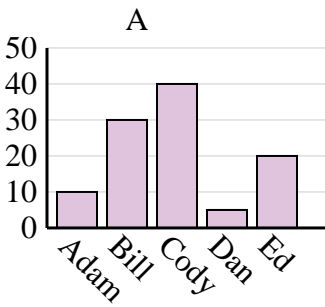
Answers

Name	Faye	Greg	Hannah	Jane	Kelly
States Lived In	1	4	10	9	5

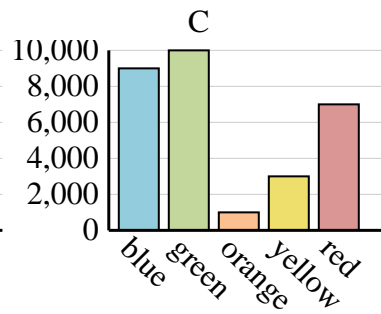
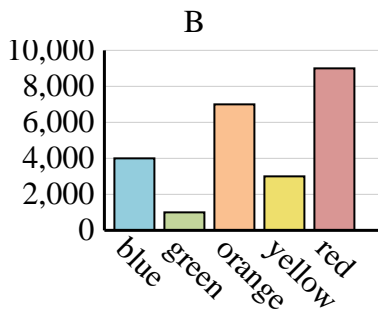
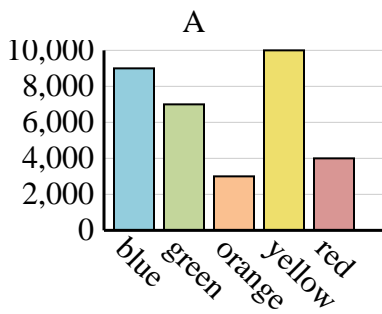


1. _____
2. _____
3. _____
4. _____

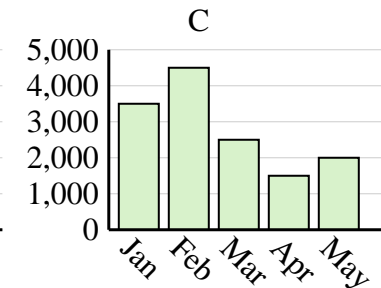
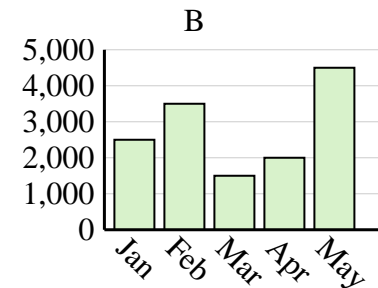
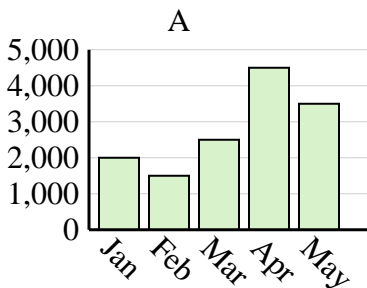
Name	Adam	Bill	Cody	Dan	Ed
Points	10	30	40	5	20



Favorite Color	blue	green	orange	yellow	red
People	4,000	1,000	7,000	3,000	9,000



Sales	Jan	Feb	Mar	Apr	May
Month	3,500	4,500	2,500	1,500	2,000

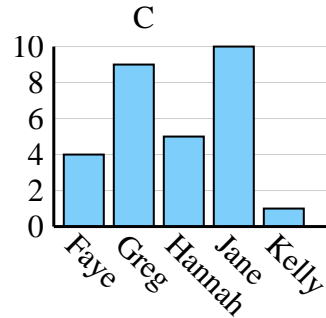
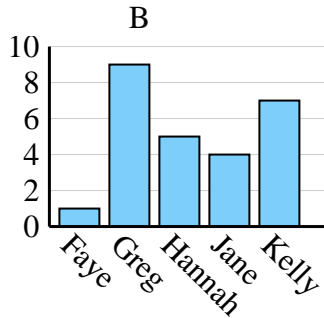
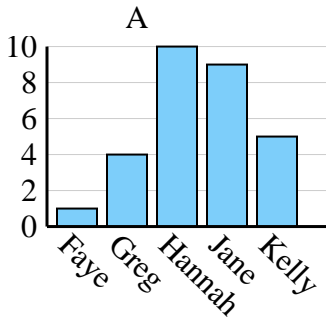




Determine which graph (A, B or C) best represents the information in the table.

Answers

Name	Faye	Greg	Hannah	Jane	Kelly
States Lived In	1	4	10	9	5



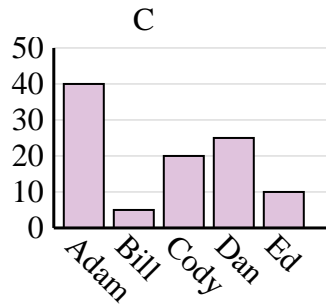
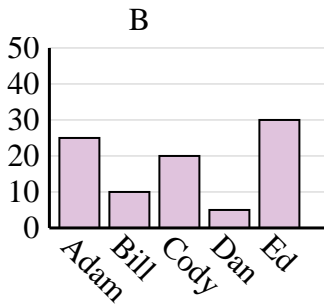
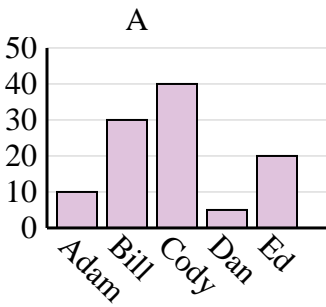
1. **A**

2. **A**

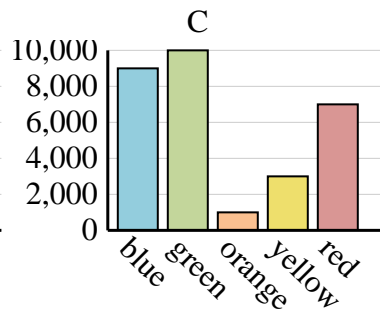
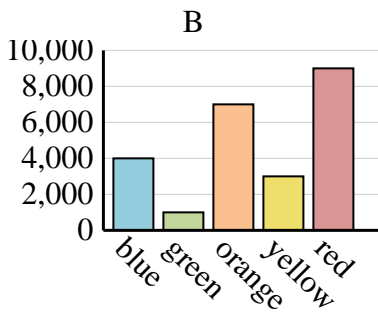
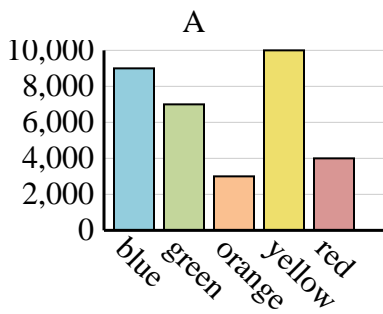
3. **B**

4. **C**

Name	Adam	Bill	Cody	Dan	Ed
Points	10	30	40	5	20



Favorite Color	blue	green	orange	yellow	red
People	4,000	1,000	7,000	3,000	9,000



Sales	Jan	Feb	Mar	Apr	May
Month	3,500	4,500	2,500	1,500	2,000

