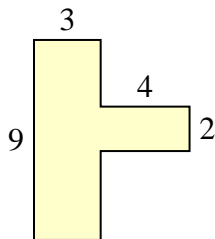




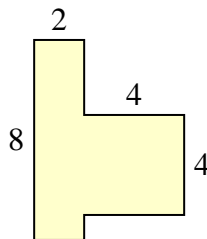
Find the total area of each shape. Measurement is in millimeters (mm). Not to scale.

Answers

1)



2)



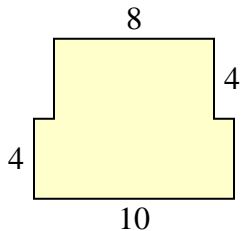
1. _____

2. _____

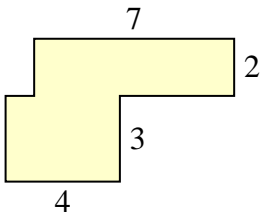
3. _____

4. _____

3)



4)



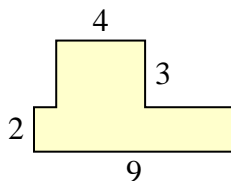
5. _____

6. _____

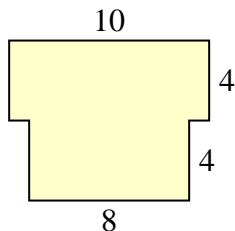
7. _____

8. _____

5)



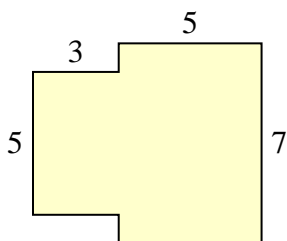
6)



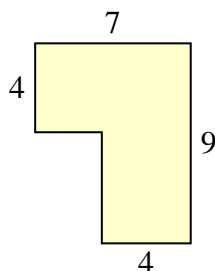
9. _____

10. _____

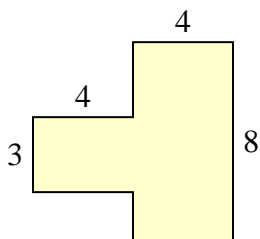
7)



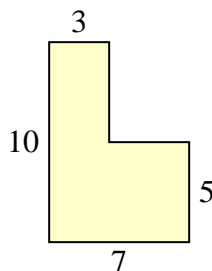
8)



9)

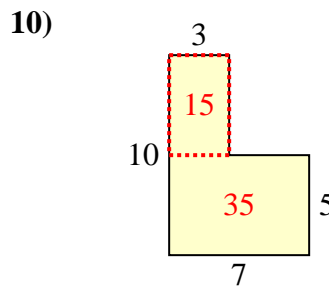
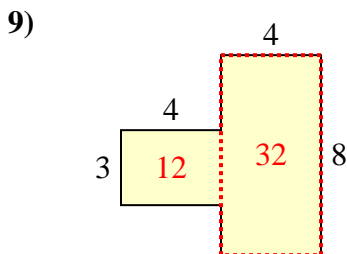
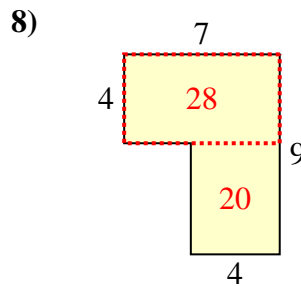
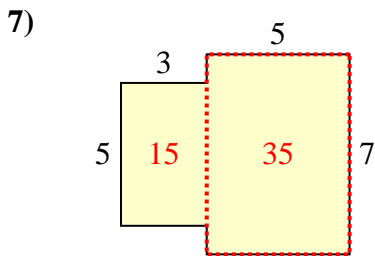
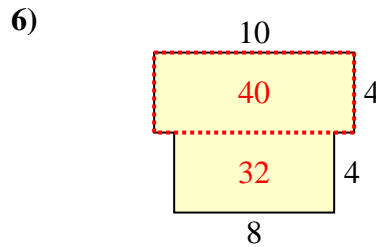
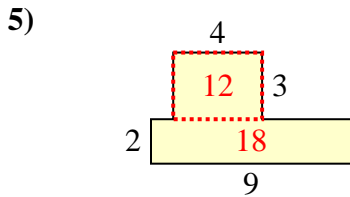
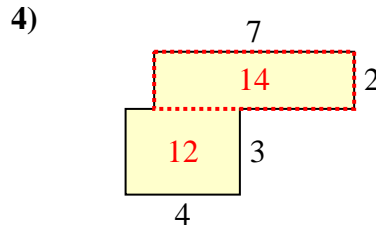
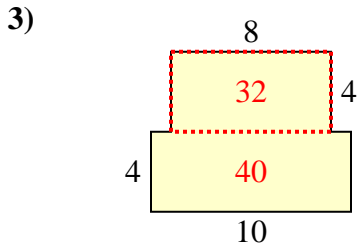
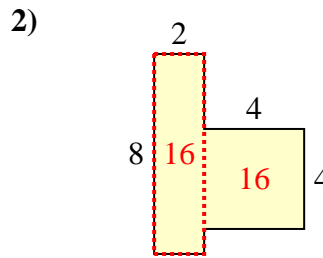
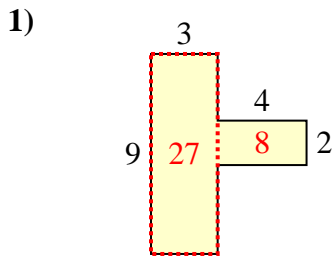


10)





Find the total area of each shape. Measurement is in millimeters (mm). Not to scale.



Answers

1. 35 mm²
2. 32 mm²
3. 72 mm²
4. 26 mm²
5. 30 mm²
6. 72 mm²
7. 50 mm²
8. 48 mm²
9. 44 mm²
10. 50 mm²