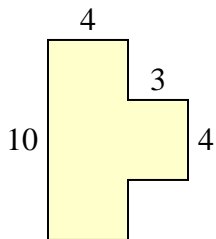


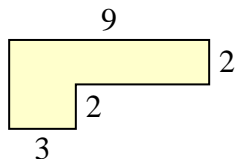


Find the total area of each shape. Measurement is in millimeters (mm). Not to scale.

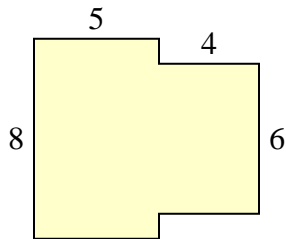
1)



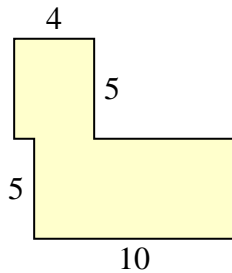
2)



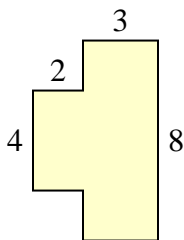
3)



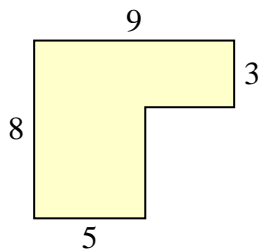
4)



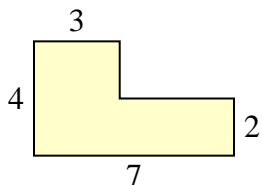
5)



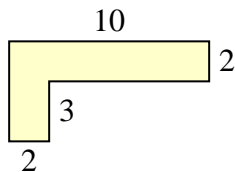
6)



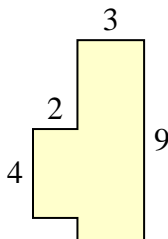
7)



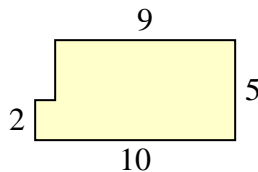
8)



9)



10)

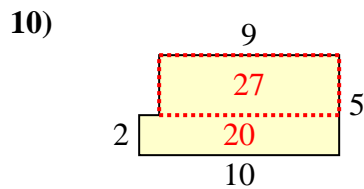
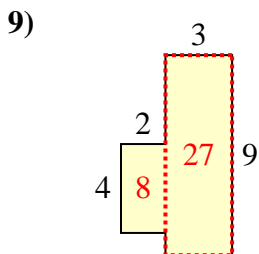
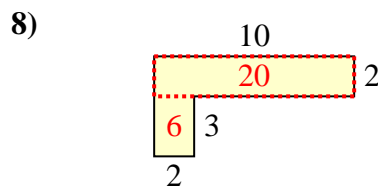
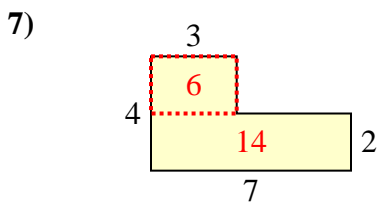
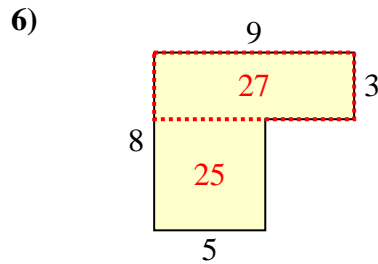
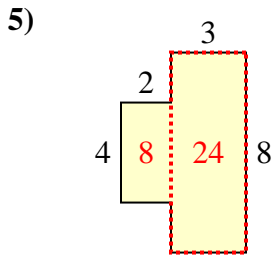
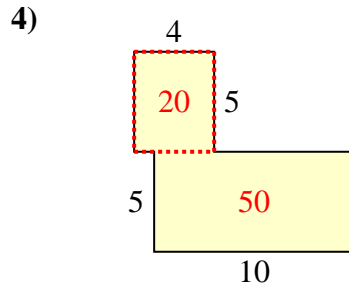
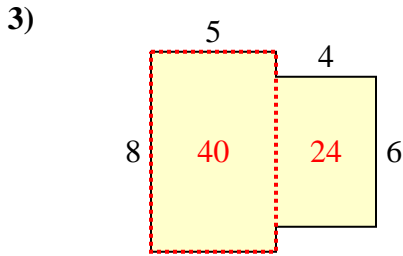
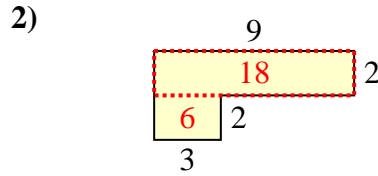
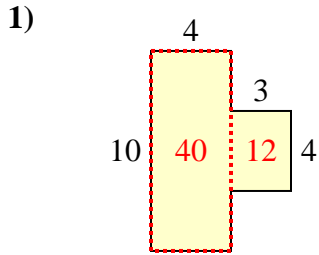


Answers

1. \_\_\_\_\_
2. \_\_\_\_\_
3. \_\_\_\_\_
4. \_\_\_\_\_
5. \_\_\_\_\_
6. \_\_\_\_\_
7. \_\_\_\_\_
8. \_\_\_\_\_
9. \_\_\_\_\_
10. \_\_\_\_\_



Find the total area of each shape. Measurement is in millimeters (mm). Not to scale.



**Answers**

1. 52 mm<sup>2</sup>
2. 24 mm<sup>2</sup>
3. 64 mm<sup>2</sup>
4. 70 mm<sup>2</sup>
5. 32 mm<sup>2</sup>
6. 52 mm<sup>2</sup>
7. 20 mm<sup>2</sup>
8. 26 mm<sup>2</sup>
9. 35 mm<sup>2</sup>
10. 47 mm<sup>2</sup>