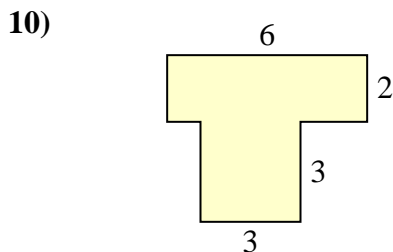
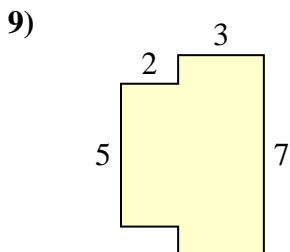
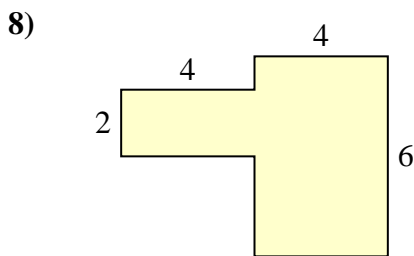
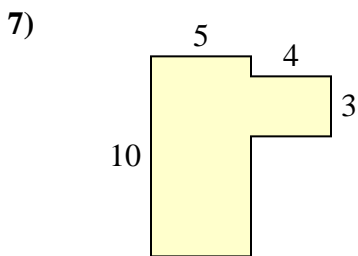
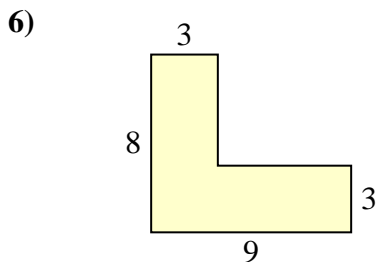
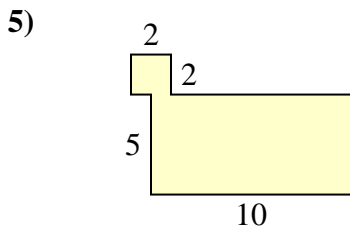
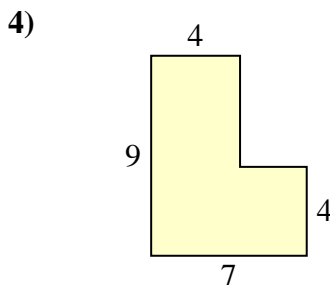
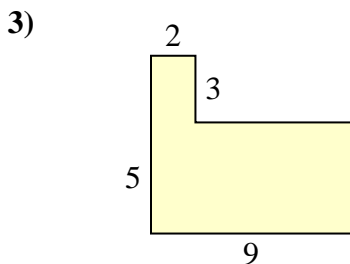
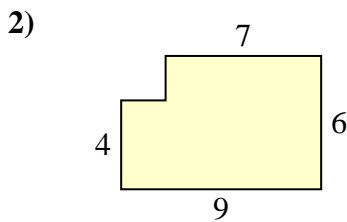
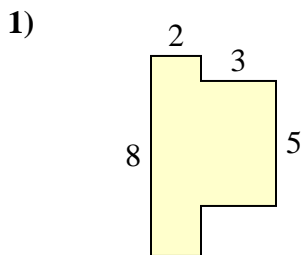




Find the total area of each shape. Measurement is in millimeters (mm). Not to scale.

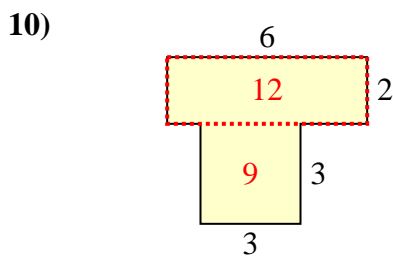
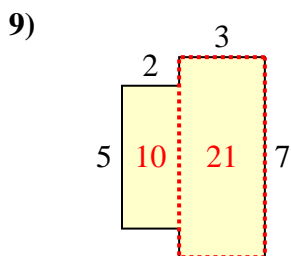
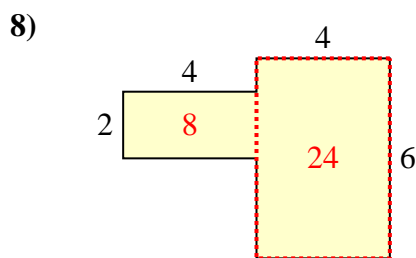
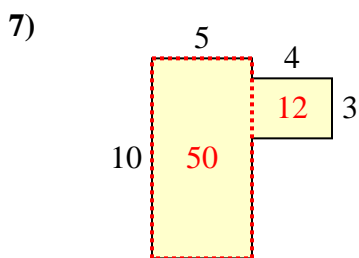
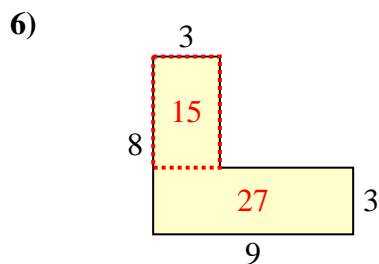
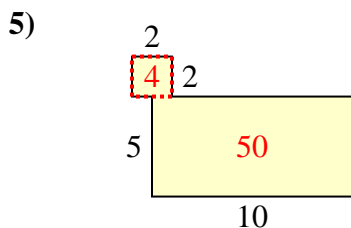
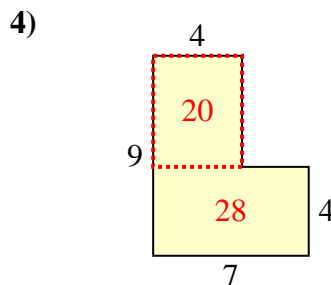
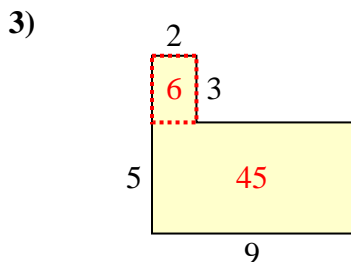
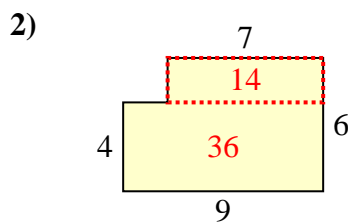
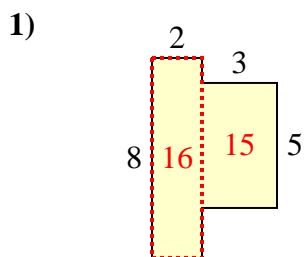
Answers



- 1. \_\_\_\_\_
- 2. \_\_\_\_\_
- 3. \_\_\_\_\_
- 4. \_\_\_\_\_
- 5. \_\_\_\_\_
- 6. \_\_\_\_\_
- 7. \_\_\_\_\_
- 8. \_\_\_\_\_
- 9. \_\_\_\_\_
- 10. \_\_\_\_\_



Find the total area of each shape. Measurement is in millimeters (mm). Not to scale.



Answers

1. 31 mm<sup>2</sup>
2. 50 mm<sup>2</sup>
3. 51 mm<sup>2</sup>
4. 48 mm<sup>2</sup>
5. 54 mm<sup>2</sup>
6. 42 mm<sup>2</sup>
7. 62 mm<sup>2</sup>
8. 32 mm<sup>2</sup>
9. 31 mm<sup>2</sup>
10. 21 mm<sup>2</sup>