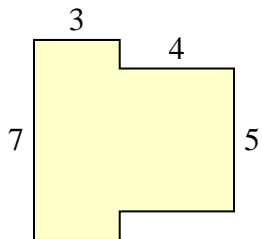




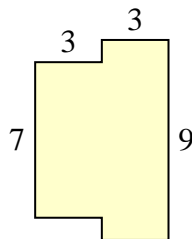
Find the total area of each shape. Measurement is in millimeters (mm). Not to scale.

Answers

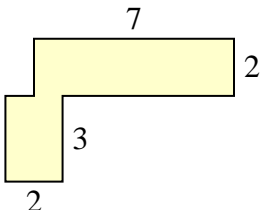
1)



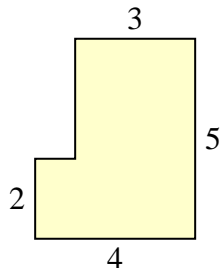
2)



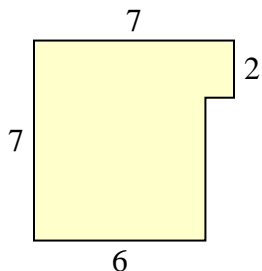
3)



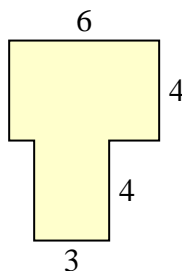
4)



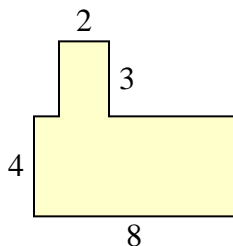
5)



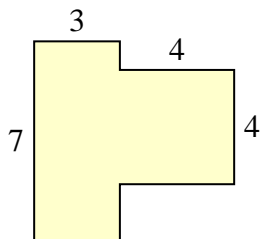
6)



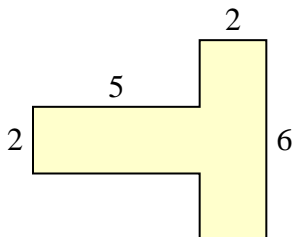
7)



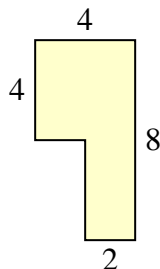
8)



9)



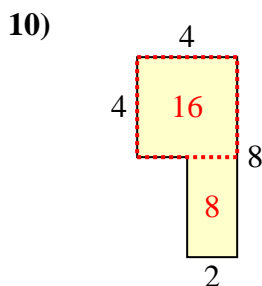
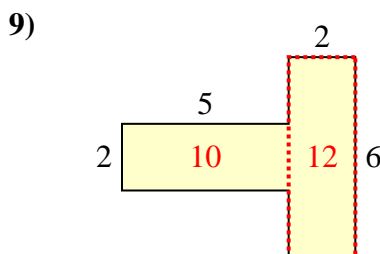
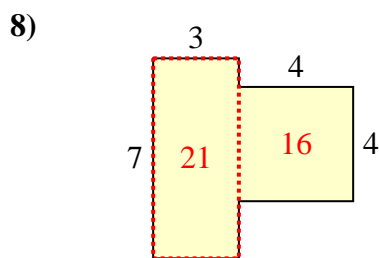
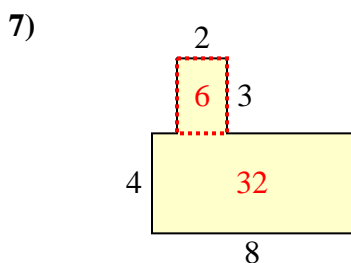
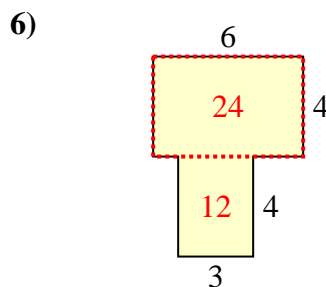
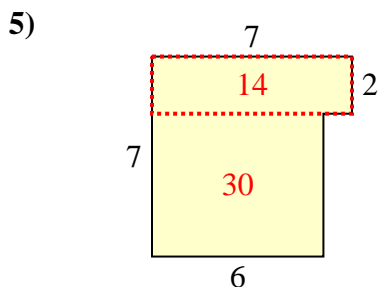
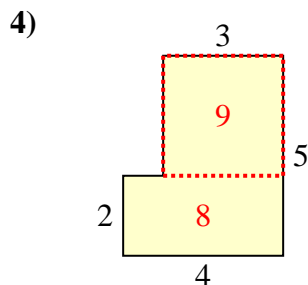
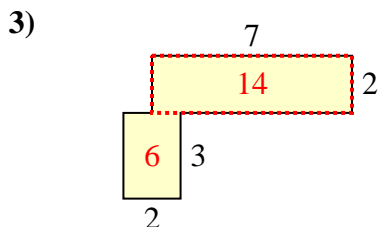
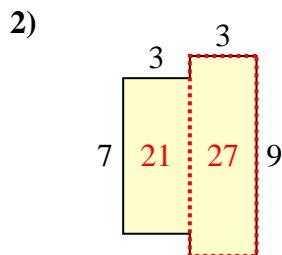
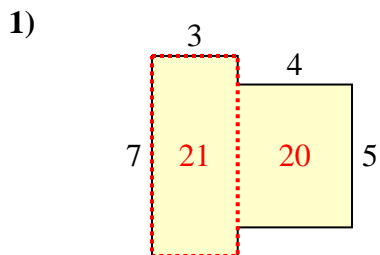
10)



- 1. \_\_\_\_\_
- 2. \_\_\_\_\_
- 3. \_\_\_\_\_
- 4. \_\_\_\_\_
- 5. \_\_\_\_\_
- 6. \_\_\_\_\_
- 7. \_\_\_\_\_
- 8. \_\_\_\_\_
- 9. \_\_\_\_\_
- 10. \_\_\_\_\_



Find the total area of each shape. Measurement is in millimeters (mm). Not to scale.



Answers

1. 41 mm<sup>2</sup>
2. 48 mm<sup>2</sup>
3. 20 mm<sup>2</sup>
4. 17 mm<sup>2</sup>
5. 44 mm<sup>2</sup>
6. 36 mm<sup>2</sup>
7. 38 mm<sup>2</sup>
8. 37 mm<sup>2</sup>
9. 22 mm<sup>2</sup>
10. 24 mm<sup>2</sup>