

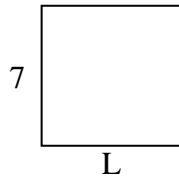


Determine the value of 'L'. Lengths are in cm (not to scale).

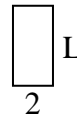
1) perimeter = 22



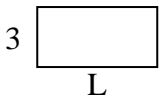
2) perimeter = 28



3) perimeter = 12



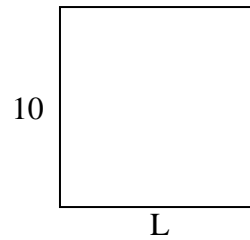
4) perimeter = 18



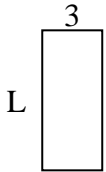
5) perimeter = 8




6) perimeter = 40




7) perimeter = 20



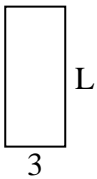
8) perimeter = 34



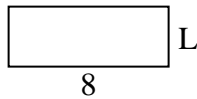
9) perimeter = 24



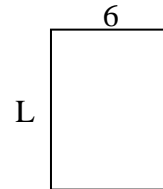
10) perimeter = 20



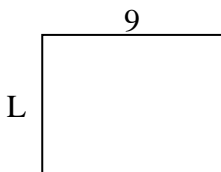
11) perimeter = 22



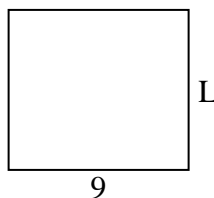
12) perimeter = 28




13) perimeter = 32



14) perimeter = 34



15) perimeter = 32



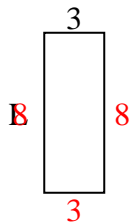
Answers

1. _____
2. _____
3. _____
4. _____
5. _____
6. _____
7. _____
8. _____
9. _____
10. _____
11. _____
12. _____
13. _____
14. _____
15. _____

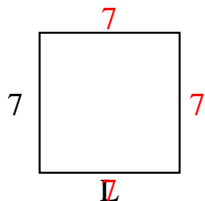


Determine the value of 'L'. Lengths are in cm (not to scale).

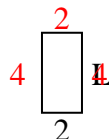
1) perimeter = 22



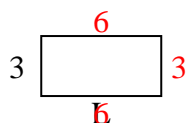
2) perimeter = 28



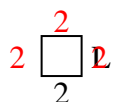
3) perimeter = 12



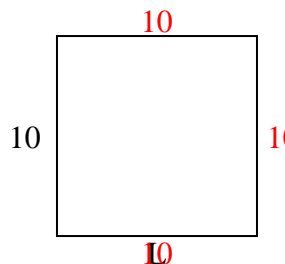
4) perimeter = 18



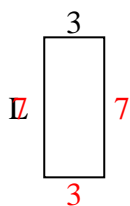
5) perimeter = 8



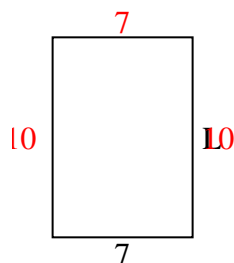
6) perimeter = 40




7) perimeter = 20



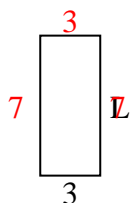
8) perimeter = 34



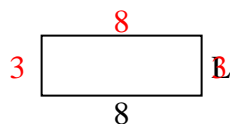
9) perimeter = 24



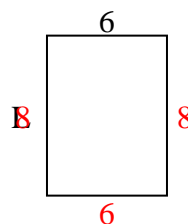
10) perimeter = 20



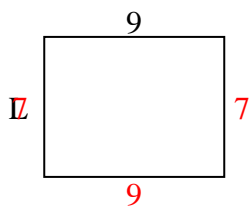
11) perimeter = 22



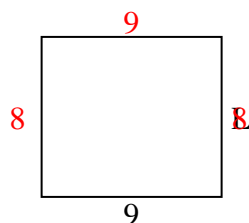
12) perimeter = 28



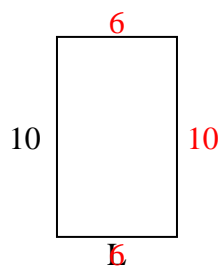
13) perimeter = 32



14) perimeter = 34



15) perimeter = 32



Answers

1. 8 cm

2. 7 cm

3. 4 cm

4. 6 cm

5. 2 cm

6. 10 cm

7. 7 cm

8. 10 cm

9. 2 cm

10. 7 cm

11. 3 cm

12. 8 cm

13. 7 cm

14. 8 cm

15. 6 cm