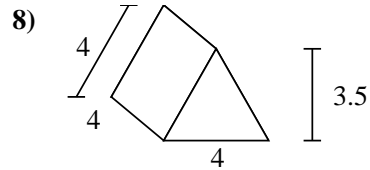
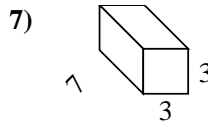
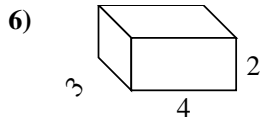
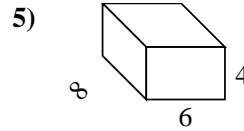
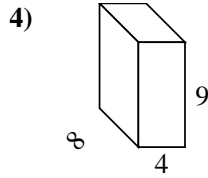
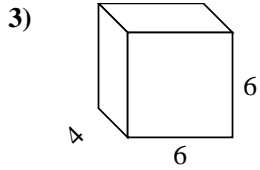
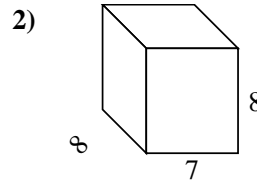
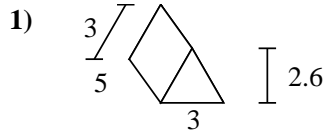
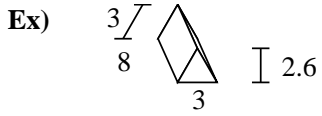




Find the surface area of each figure. Units are in cm (not to scale).



Answers

Ex. 79.8 cm<sup>2</sup>

1. \_\_\_\_\_

2. \_\_\_\_\_

3. \_\_\_\_\_

4. \_\_\_\_\_

5. \_\_\_\_\_

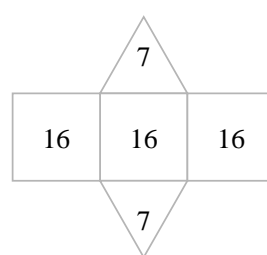
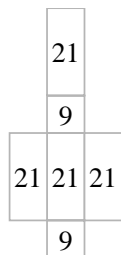
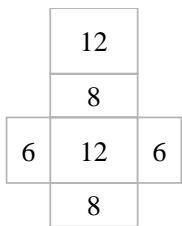
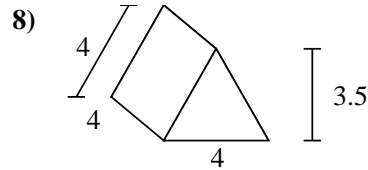
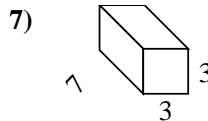
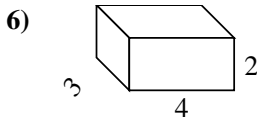
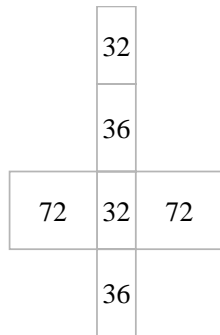
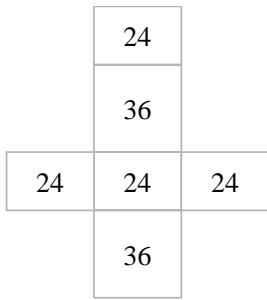
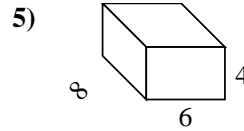
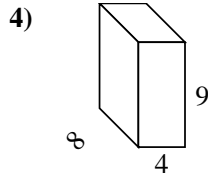
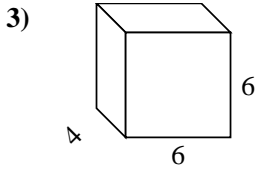
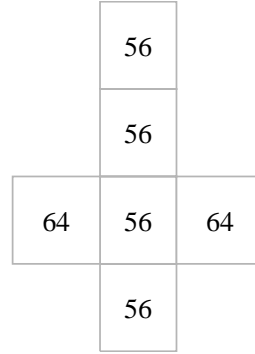
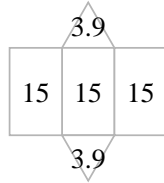
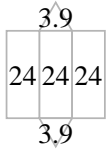
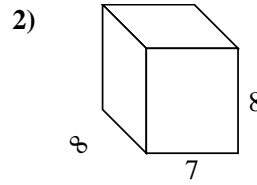
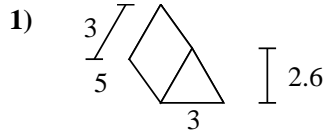
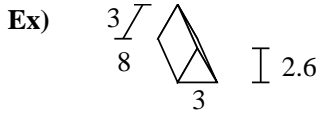
6. \_\_\_\_\_

7. \_\_\_\_\_

8. \_\_\_\_\_



Find the surface area of each figure. Units are in cm (not to scale).



Answers

Ex. 79.8 cm<sup>2</sup>

1. 52.8 cm<sup>2</sup>

2. 352 cm<sup>2</sup>

3. 168 cm<sup>2</sup>

4. 280 cm<sup>2</sup>

5. 208 cm<sup>2</sup>

6. 52 cm<sup>2</sup>

7. 102 cm<sup>2</sup>

8. 62 cm<sup>2</sup>