
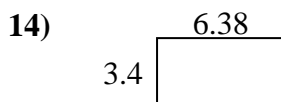
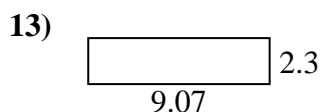
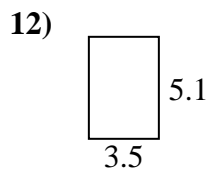
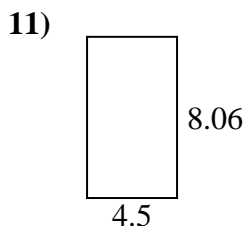
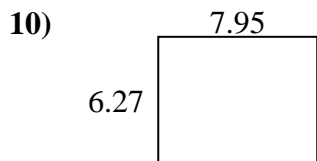
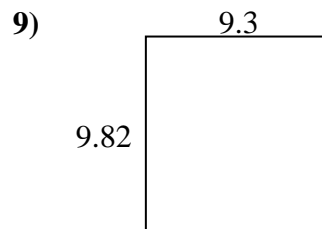
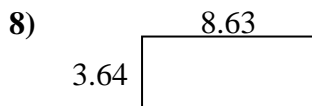
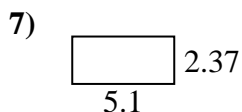
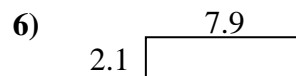
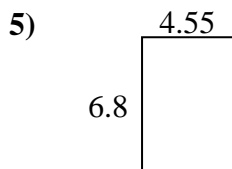
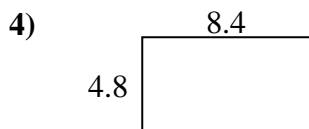
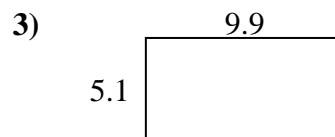
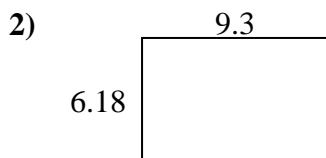





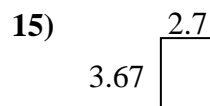
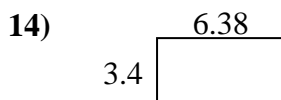
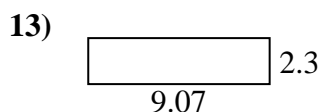
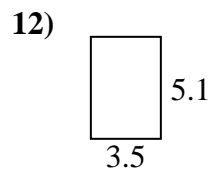
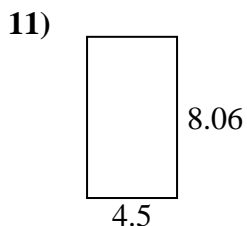
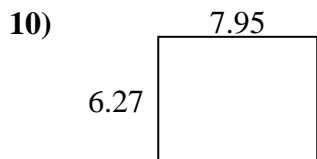
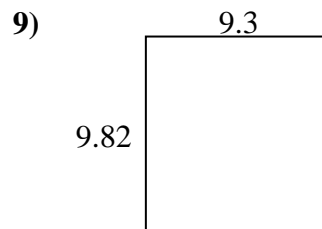
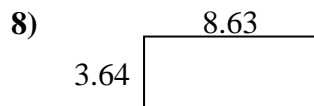
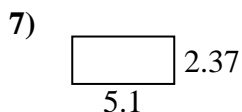
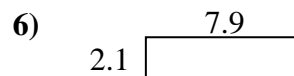
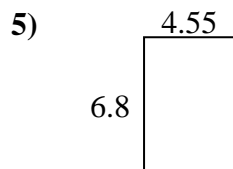
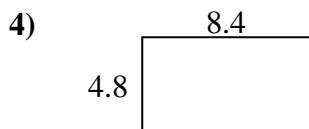
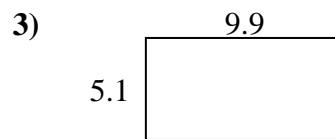
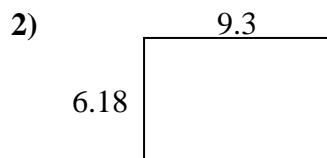

Find the perimeter and area of each figure. Answer to the nearest 10th.

Answers

1. _____
2. _____
3. _____
4. _____
5. _____
6. _____
7. _____
8. _____
9. _____
10. _____
11. _____
12. _____
13. _____
14. _____
15. _____



Find the perimeter and area of each figure. Answer to the nearest 10th.

**Answers**

1.	<u>22.3</u>	<u>21.2</u>
2.	<u>57.5</u>	<u>31.0</u>
3.	<u>50.5</u>	<u>30.0</u>
4.	<u>40.3</u>	<u>26.4</u>
5.	<u>30.9</u>	<u>22.7</u>
6.	<u>16.6</u>	<u>20.0</u>
7.	<u>12.1</u>	<u>14.9</u>
8.	<u>31.4</u>	<u>24.5</u>
9.	<u>91.3</u>	<u>38.2</u>
10.	<u>49.8</u>	<u>28.4</u>
11.	<u>36.3</u>	<u>25.1</u>
12.	<u>17.9</u>	<u>17.2</u>
13.	<u>20.9</u>	<u>22.7</u>
14.	<u>21.7</u>	<u>19.6</u>
15.	<u>9.9</u>	<u>12.7</u>