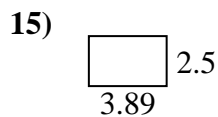
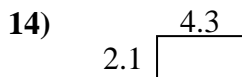
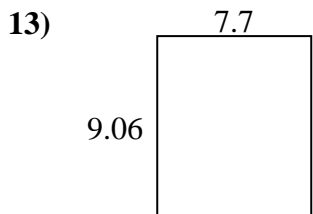
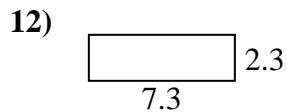
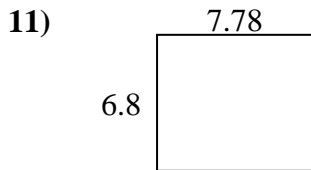
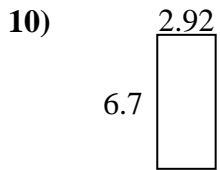
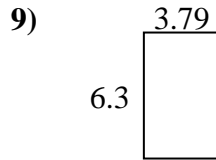
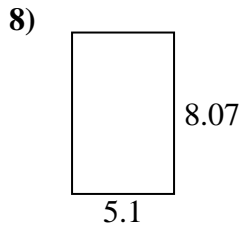
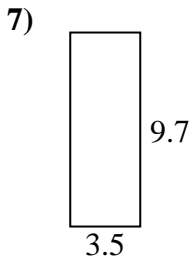
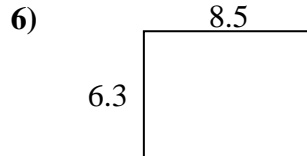
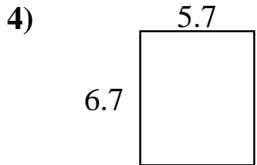
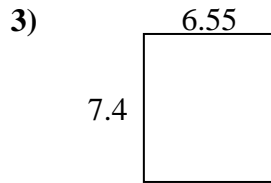
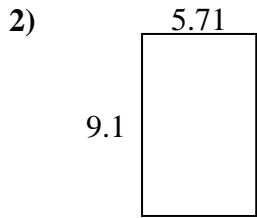
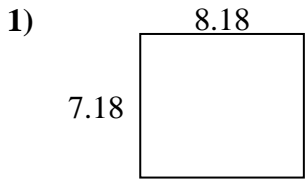




Find the perimeter and area of each figure. Answer to the nearest 10th.

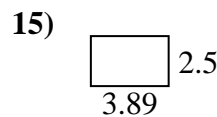
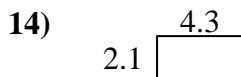
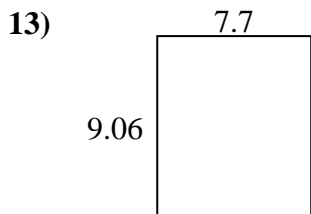
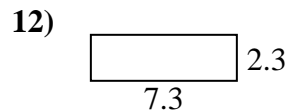
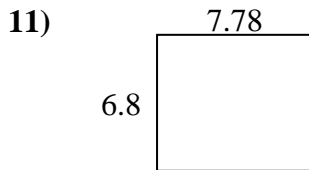
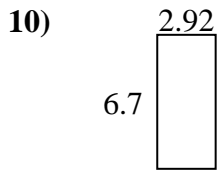
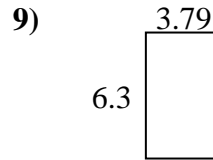
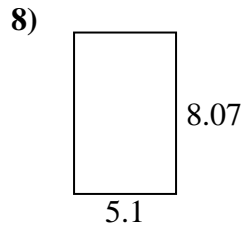
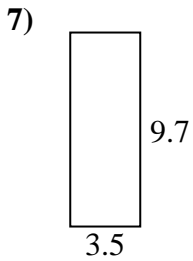
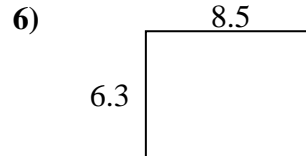
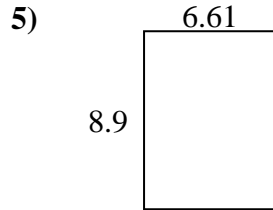
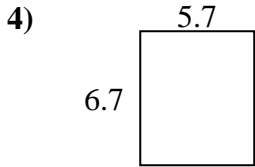
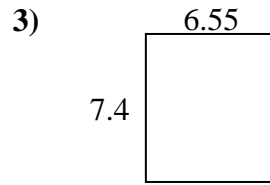
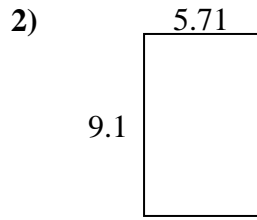
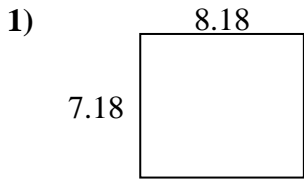


Answers

1. _____
2. _____
3. _____
4. _____
5. _____
6. _____
7. _____
8. _____
9. _____
10. _____
11. _____
12. _____
13. _____
14. _____
15. _____



Find the perimeter and area of each figure. Answer to the nearest 10th.

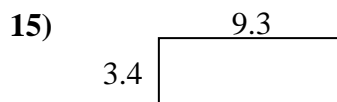
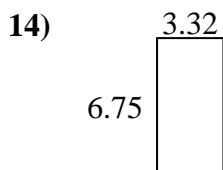
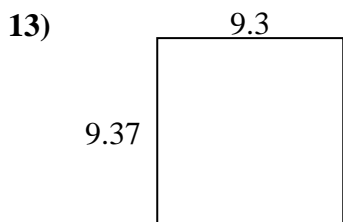
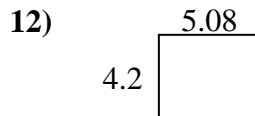
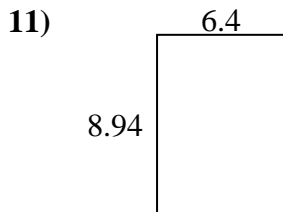
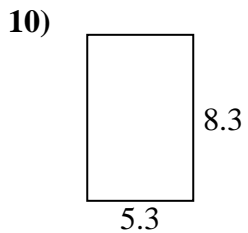
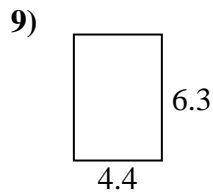
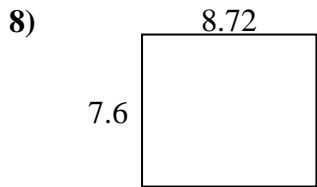
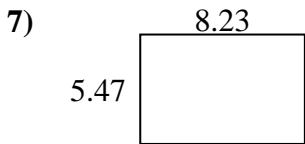
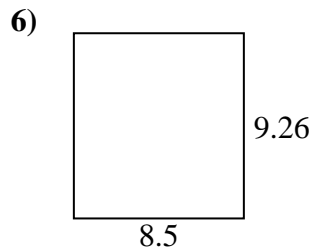
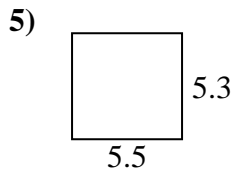
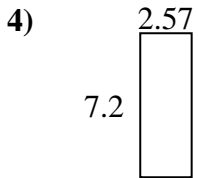
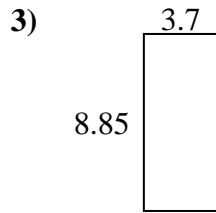
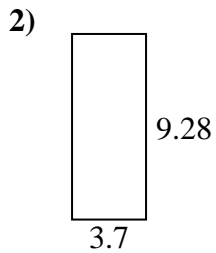
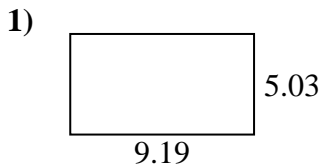


Answers

1.	<u>58.7</u>	<u>30.7</u>
2.	<u>52.0</u>	<u>29.6</u>
3.	<u>48.5</u>	<u>27.9</u>
4.	<u>38.2</u>	<u>24.8</u>
5.	<u>58.8</u>	<u>31.0</u>
6.	<u>53.6</u>	<u>29.6</u>
7.	<u>34.0</u>	<u>26.4</u>
8.	<u>41.2</u>	<u>26.3</u>
9.	<u>23.9</u>	<u>20.2</u>
10.	<u>19.6</u>	<u>19.2</u>
11.	<u>52.9</u>	<u>29.2</u>
12.	<u>16.8</u>	<u>19.2</u>
13.	<u>69.8</u>	<u>33.5</u>
14.	<u>9.0</u>	<u>12.8</u>
15.	<u>9.7</u>	<u>12.8</u>



Find the perimeter and area of each figure. Answer to the nearest 10th.

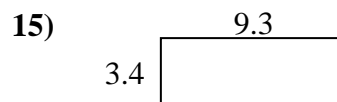
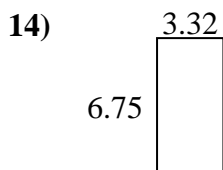
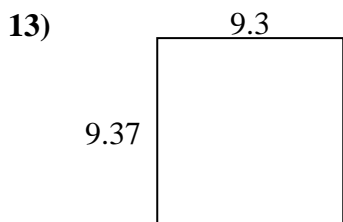
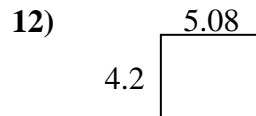
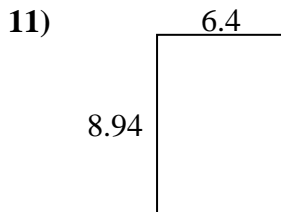
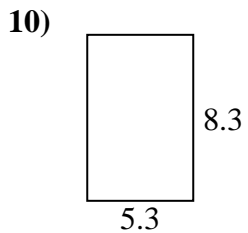
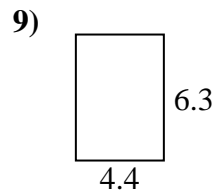
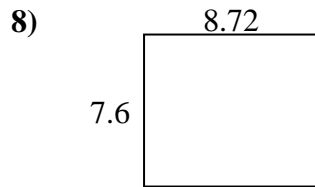
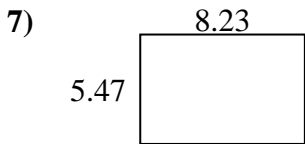
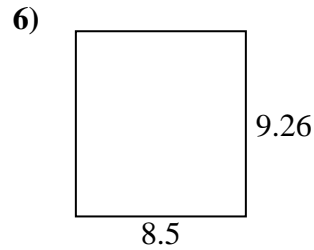
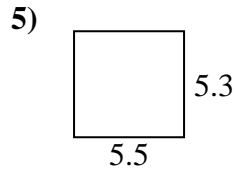
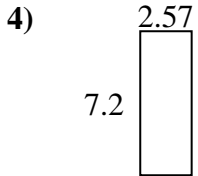
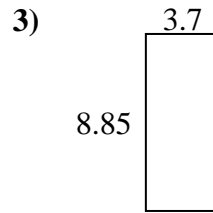
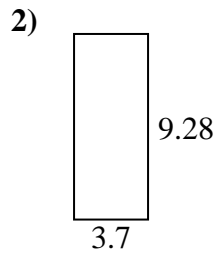
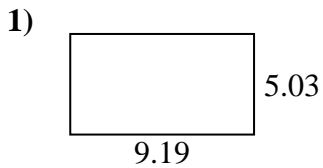


Answers

1. _____
2. _____
3. _____
4. _____
5. _____
6. _____
7. _____
8. _____
9. _____
10. _____
11. _____
12. _____
13. _____
14. _____
15. _____



Find the perimeter and area of each figure. Answer to the nearest 10th.



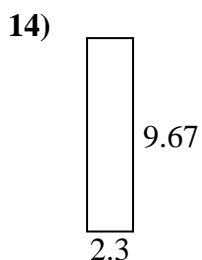
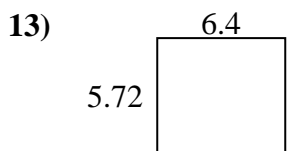
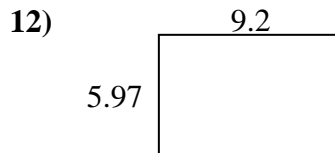
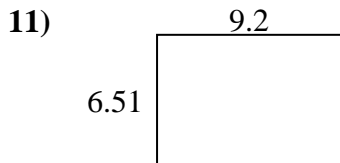
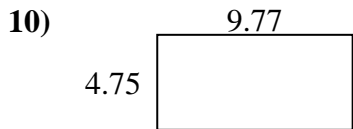
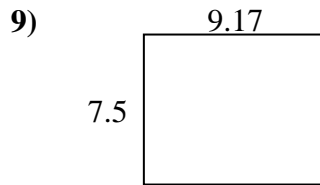
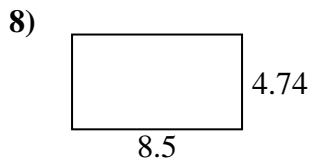
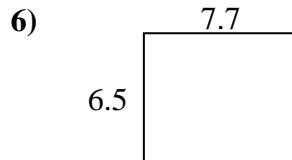
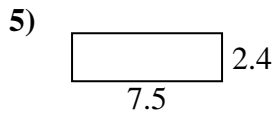
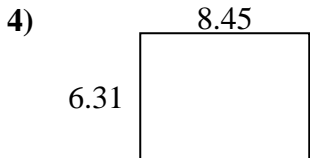
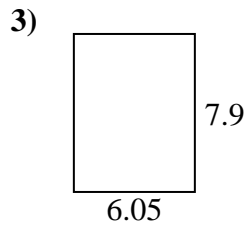
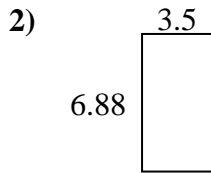
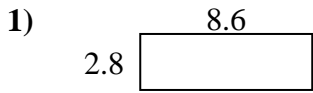
Answers

1.	<u>46.2</u>	<u>28.4</u>
2.	<u>34.3</u>	<u>26.0</u>
3.	<u>32.7</u>	<u>25.1</u>
4.	<u>18.5</u>	<u>19.5</u>
5.	<u>29.2</u>	<u>21.6</u>
6.	<u>78.7</u>	<u>35.5</u>
7.	<u>45.0</u>	<u>27.4</u>
8.	<u>66.3</u>	<u>32.6</u>
9.	<u>27.7</u>	<u>21.4</u>
10.	<u>44.0</u>	<u>27.2</u>
11.	<u>57.2</u>	<u>30.7</u>
12.	<u>21.3</u>	<u>18.6</u>
13.	<u>87.1</u>	<u>37.3</u>
14.	<u>22.4</u>	<u>20.1</u>
15.	<u>31.6</u>	<u>25.4</u>



Find the perimeter and area of each figure. Answer to the nearest 10th.

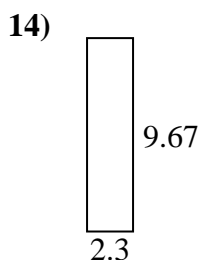
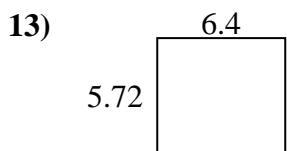
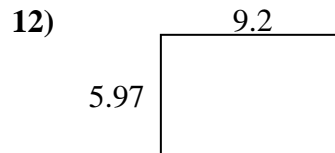
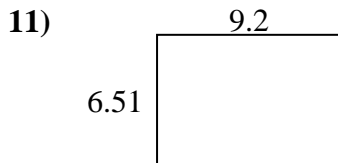
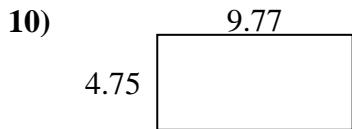
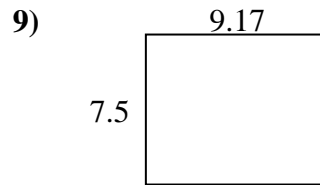
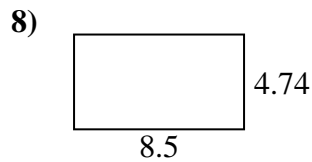
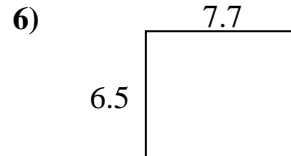

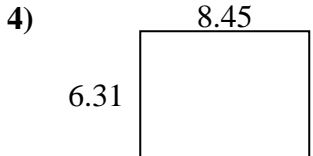
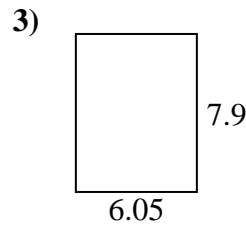
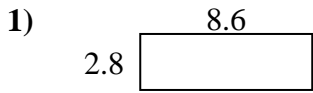
Answers



1. _____
2. _____
3. _____
4. _____
5. _____
6. _____
7. _____
8. _____
9. _____
10. _____
11. _____
12. _____
13. _____
14. _____
15. _____



Find the perimeter and area of each figure. Answer to the nearest 10th.

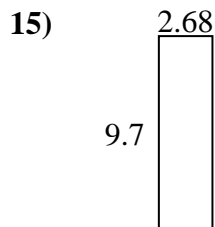
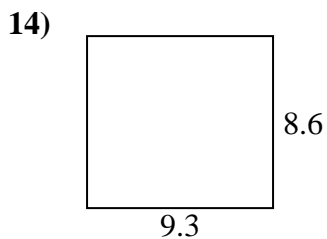
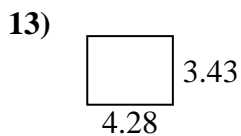
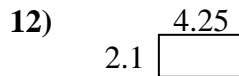
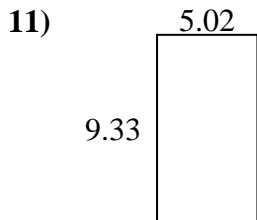
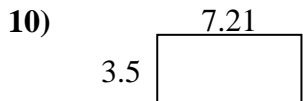
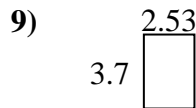
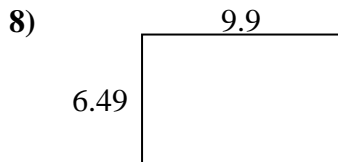
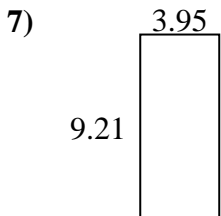
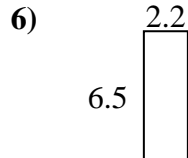
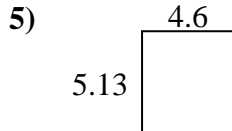
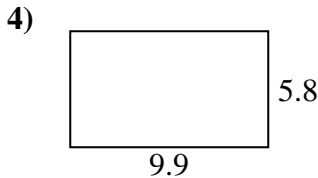
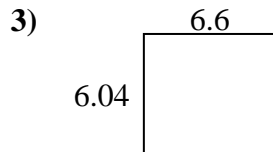
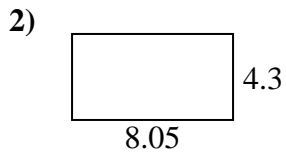
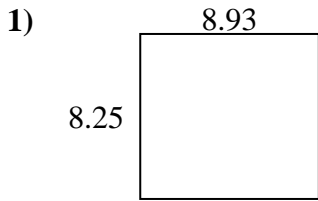


Answers

1.	<u>24.1</u>	<u>22.8</u>
2.	<u>24.1</u>	<u>20.8</u>
3.	<u>47.8</u>	<u>27.9</u>
4.	<u>53.3</u>	<u>29.5</u>
5.	<u>18.0</u>	<u>19.8</u>
6.	<u>50.1</u>	<u>28.4</u>
7.	<u>26.0</u>	<u>24.2</u>
8.	<u>40.3</u>	<u>26.5</u>
9.	<u>68.8</u>	<u>33.3</u>
10.	<u>46.4</u>	<u>29.0</u>
11.	<u>59.9</u>	<u>31.4</u>
12.	<u>54.9</u>	<u>30.3</u>
13.	<u>36.6</u>	<u>24.2</u>
14.	<u>22.2</u>	<u>23.9</u>
15.	<u>13.8</u>	<u>15.8</u>



Find the perimeter and area of each figure. Answer to the nearest 10th.

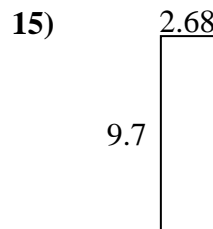
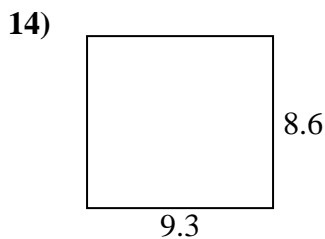
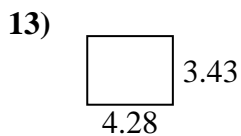
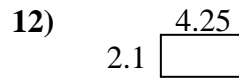
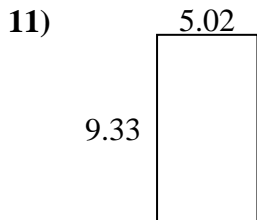
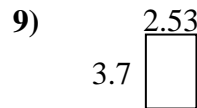
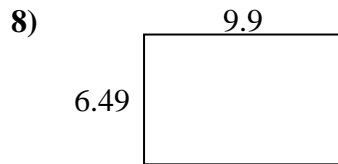
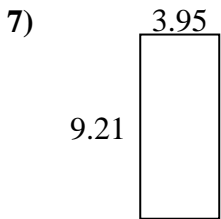
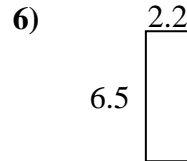
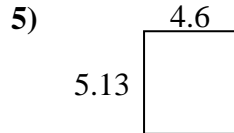
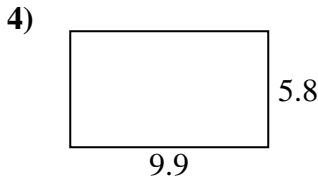
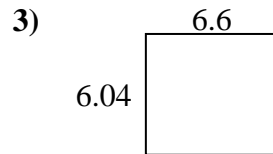
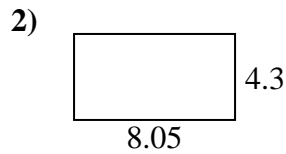
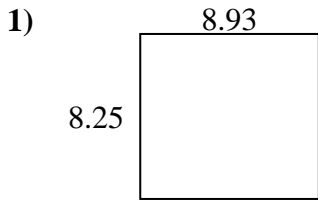


Answers

1. _____
2. _____
3. _____
4. _____
5. _____
6. _____
7. _____
8. _____
9. _____
10. _____
11. _____
12. _____
13. _____
14. _____
15. _____



Find the perimeter and area of each figure. Answer to the nearest 10th.

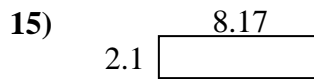

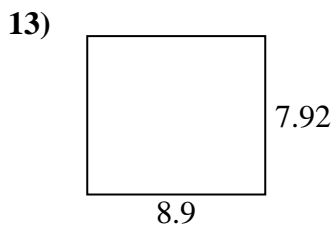
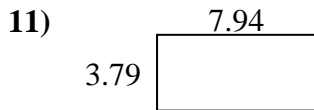
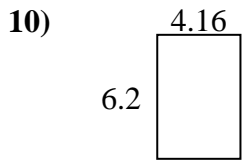
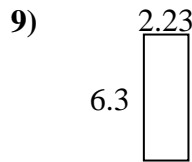
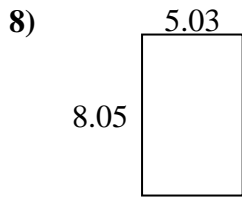
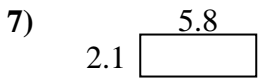
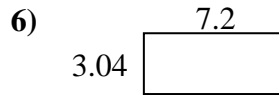
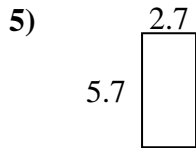
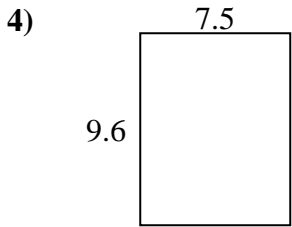
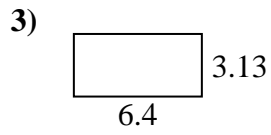
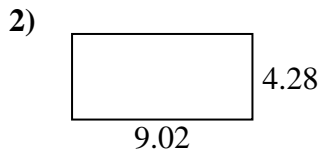


Answers

1.	<u>73.7</u>	<u>34.4</u>
2.	<u>34.6</u>	<u>24.7</u>
3.	<u>39.9</u>	<u>25.3</u>
4.	<u>57.4</u>	<u>31.4</u>
5.	<u>23.6</u>	<u>19.5</u>
6.	<u>14.3</u>	<u>17.4</u>
7.	<u>36.4</u>	<u>26.3</u>
8.	<u>64.3</u>	<u>32.8</u>
9.	<u>9.4</u>	<u>12.5</u>
10.	<u>25.2</u>	<u>21.4</u>
11.	<u>46.8</u>	<u>28.7</u>
12.	<u>8.9</u>	<u>12.7</u>
13.	<u>14.7</u>	<u>15.4</u>
14.	<u>80.0</u>	<u>35.8</u>
15.	<u>26.0</u>	<u>24.8</u>



Find the perimeter and area of each figure. Answer to the nearest 10th.

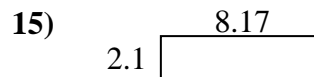
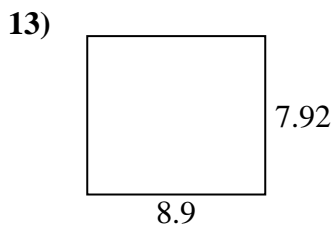
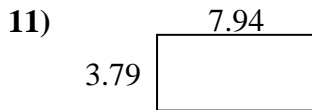
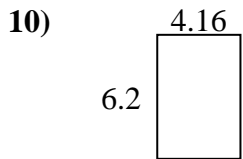
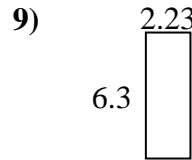
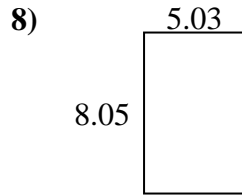
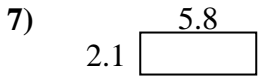
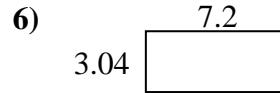
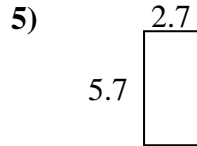
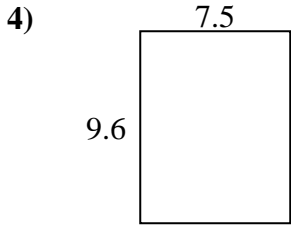
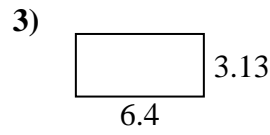
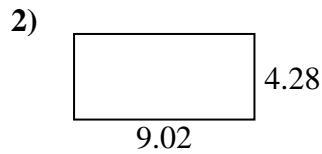


Answers

1. _____
2. _____
3. _____
4. _____
5. _____
6. _____
7. _____
8. _____
9. _____
10. _____
11. _____
12. _____
13. _____
14. _____
15. _____



Find the perimeter and area of each figure. Answer to the nearest 10th.

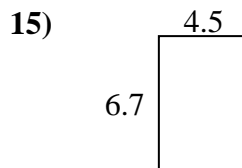
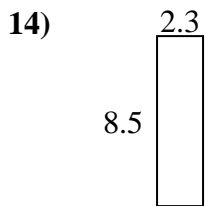
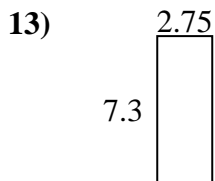
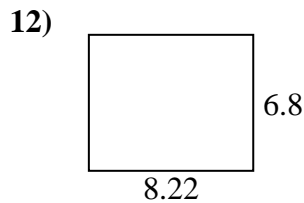
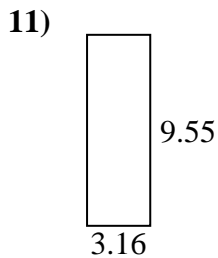
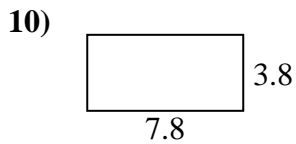
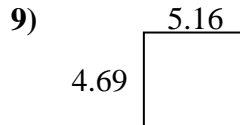
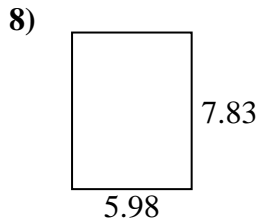
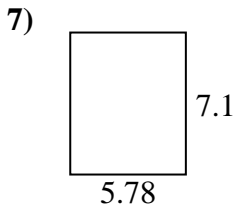
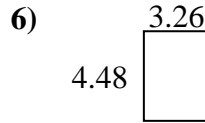
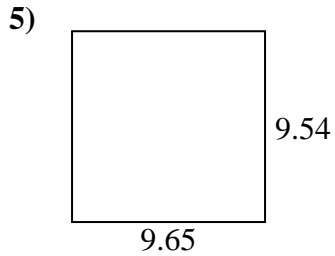
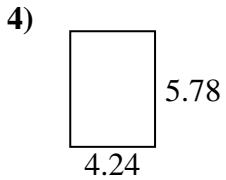
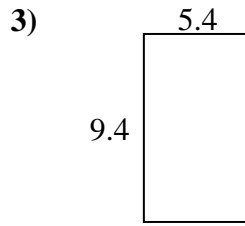
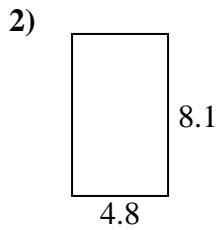
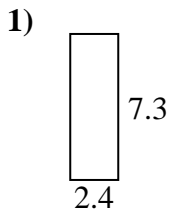


Answers

1.	<u>30.7</u>	<u>25.2</u>
2.	<u>38.6</u>	<u>26.6</u>
3.	<u>20.0</u>	<u>19.1</u>
4.	<u>72.0</u>	<u>34.2</u>
5.	<u>15.4</u>	<u>16.8</u>
6.	<u>21.9</u>	<u>20.5</u>
7.	<u>12.2</u>	<u>15.8</u>
8.	<u>40.5</u>	<u>26.2</u>
9.	<u>14.0</u>	<u>17.1</u>
10.	<u>25.8</u>	<u>20.7</u>
11.	<u>30.1</u>	<u>23.5</u>
12.	<u>8.0</u>	<u>11.5</u>
13.	<u>70.5</u>	<u>33.6</u>
14.	<u>25.6</u>	<u>22.1</u>
15.	<u>17.2</u>	<u>20.5</u>



Find the perimeter and area of each figure. Answer to the nearest 10th.

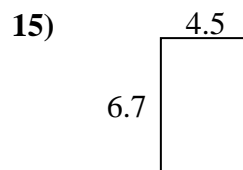
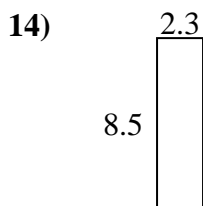
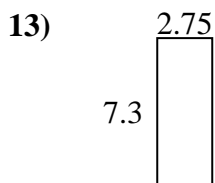
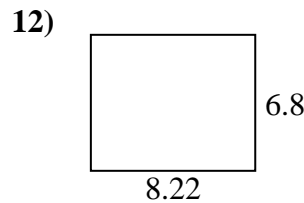
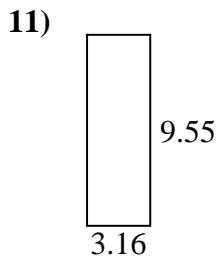
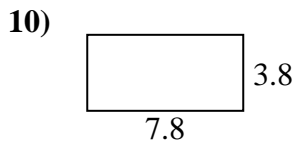
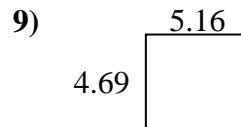
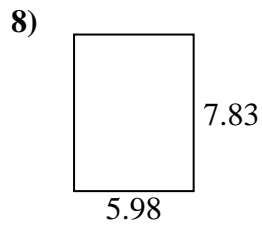
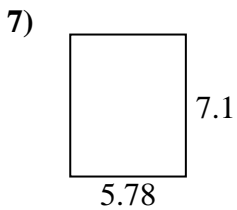
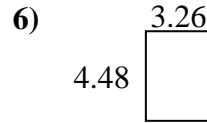
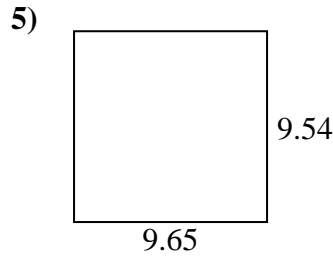
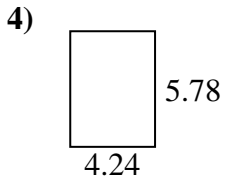
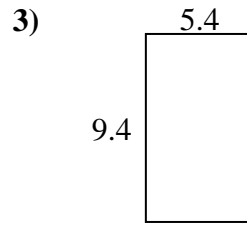
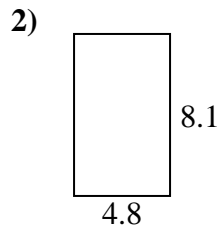
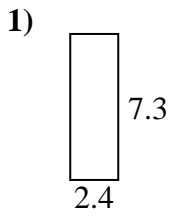


Answers

1. _____
2. _____
3. _____
4. _____
5. _____
6. _____
7. _____
8. _____
9. _____
10. _____
11. _____
12. _____
13. _____
14. _____
15. _____



Find the perimeter and area of each figure. Answer to the nearest 10th.

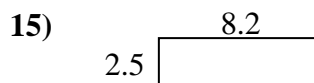
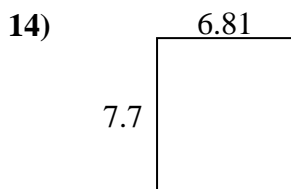
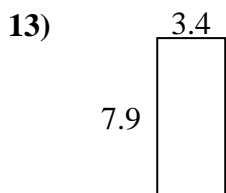
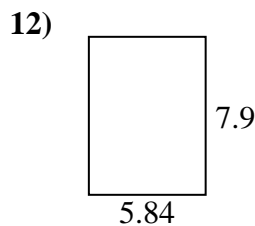
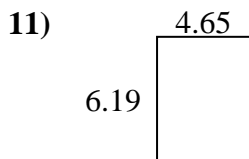
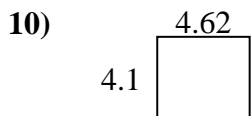
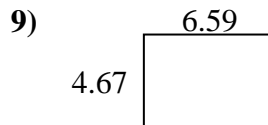
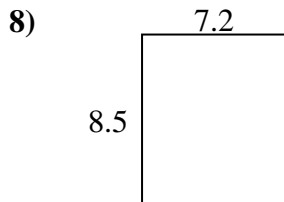
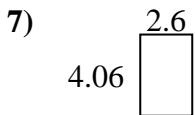
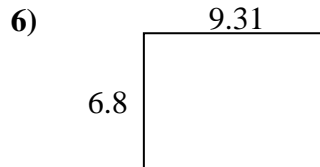
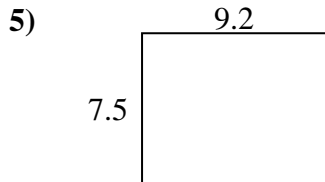
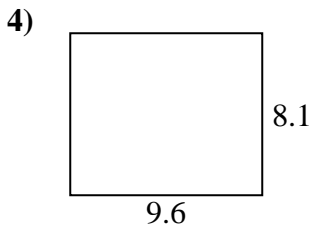
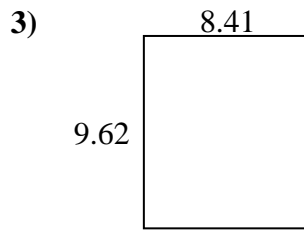
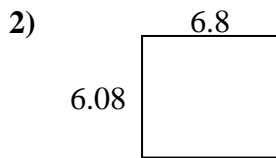
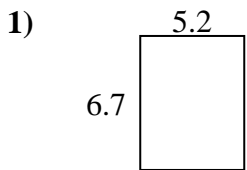


Answers

1.	<u>17.5</u>	<u>19.4</u>
2.	<u>38.9</u>	<u>25.8</u>
3.	<u>50.8</u>	<u>29.6</u>
4.	<u>24.5</u>	<u>20.0</u>
5.	<u>92.1</u>	<u>38.4</u>
6.	<u>14.6</u>	<u>15.5</u>
7.	<u>41.0</u>	<u>25.8</u>
8.	<u>46.8</u>	<u>27.6</u>
9.	<u>24.2</u>	<u>19.7</u>
10.	<u>29.6</u>	<u>23.2</u>
11.	<u>30.2</u>	<u>25.4</u>
12.	<u>55.9</u>	<u>30.0</u>
13.	<u>20.1</u>	<u>20.1</u>
14.	<u>19.6</u>	<u>21.6</u>
15.	<u>30.2</u>	<u>22.4</u>



Find the perimeter and area of each figure. Answer to the nearest 10th.

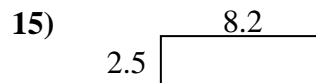
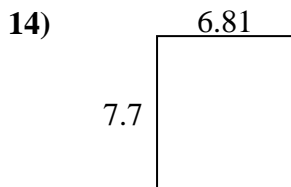
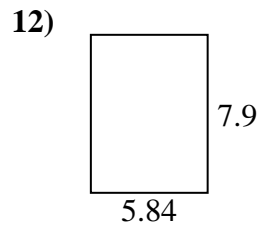
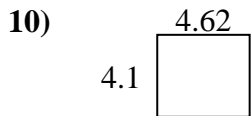
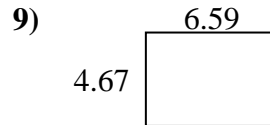
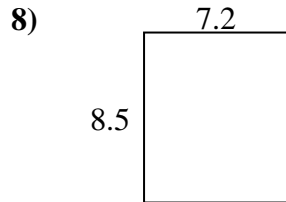
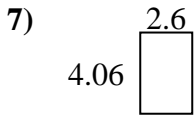
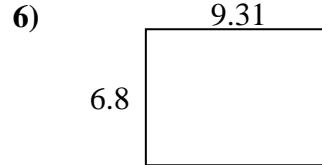
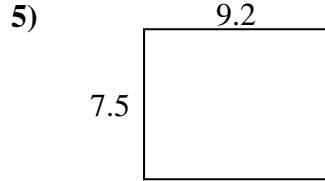
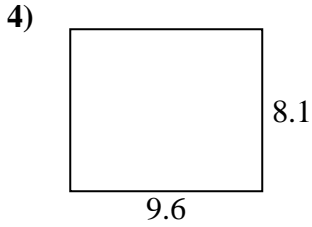
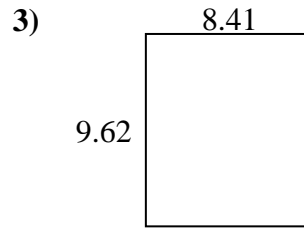
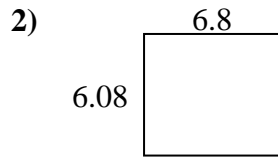
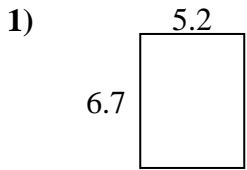


Answers

1. _____
2. _____
3. _____
4. _____
5. _____
6. _____
7. _____
8. _____
9. _____
10. _____
11. _____
12. _____
13. _____
14. _____
15. _____



Find the perimeter and area of each figure. Answer to the nearest 10th.

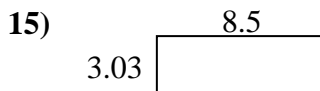
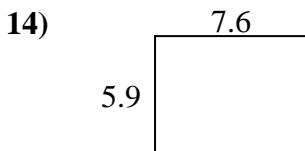
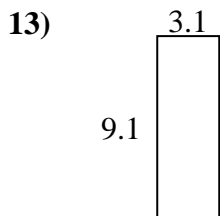
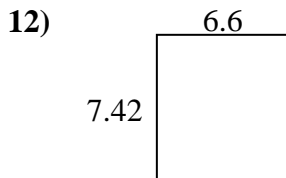
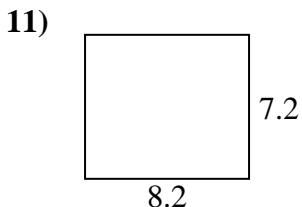
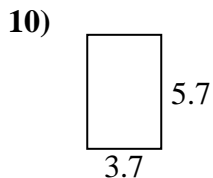
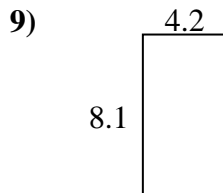
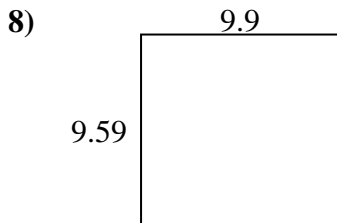
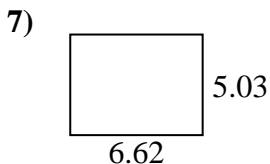
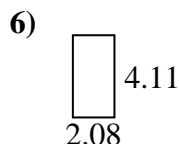
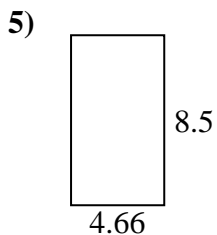
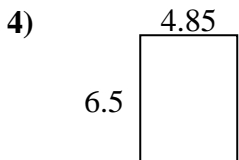
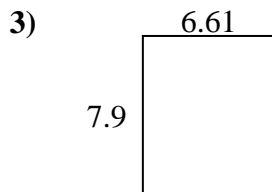
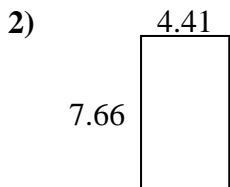
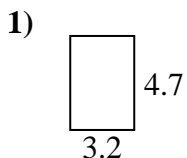


Answers

1.	<u>34.8</u>	<u>23.8</u>
2.	<u>41.3</u>	<u>25.8</u>
3.	<u>80.9</u>	<u>36.1</u>
4.	<u>77.8</u>	<u>35.4</u>
5.	<u>69.0</u>	<u>33.4</u>
6.	<u>63.3</u>	<u>32.2</u>
7.	<u>10.6</u>	<u>13.3</u>
8.	<u>61.2</u>	<u>31.4</u>
9.	<u>30.8</u>	<u>22.5</u>
10.	<u>18.9</u>	<u>17.4</u>
11.	<u>28.8</u>	<u>21.7</u>
12.	<u>46.1</u>	<u>27.5</u>
13.	<u>26.9</u>	<u>22.6</u>
14.	<u>52.4</u>	<u>29.0</u>
15.	<u>20.5</u>	<u>21.4</u>



Find the perimeter and area of each figure. Answer to the nearest 10th.

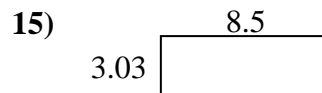
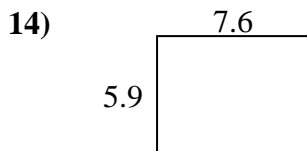
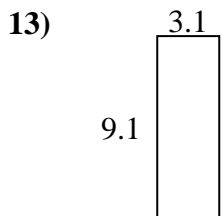
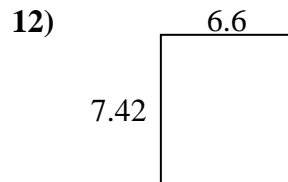
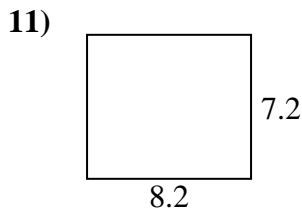
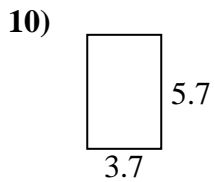
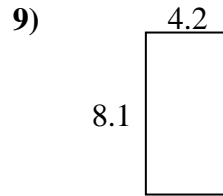
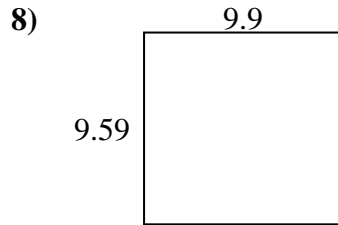
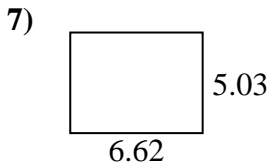
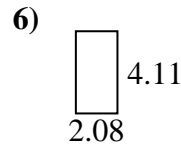
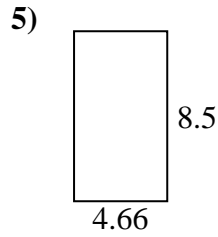
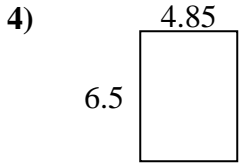
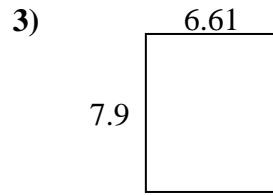
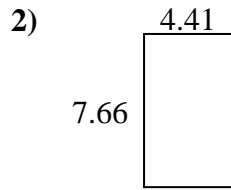
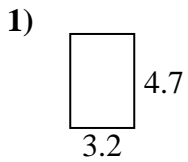


Answers

1. _____
2. _____
3. _____
4. _____
5. _____
6. _____
7. _____
8. _____
9. _____
10. _____
11. _____
12. _____
13. _____
14. _____
15. _____



Find the perimeter and area of each figure. Answer to the nearest 10th.

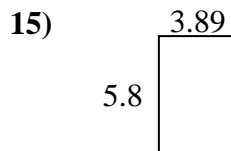
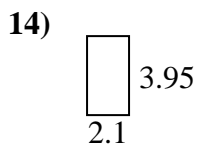
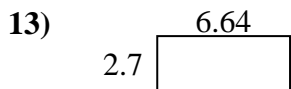
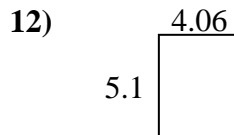
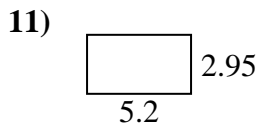
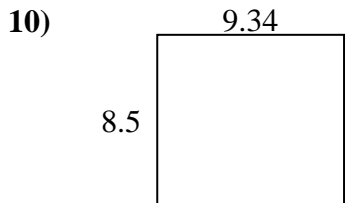
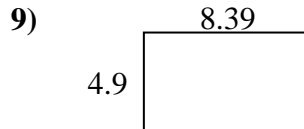
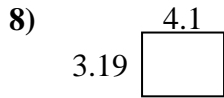
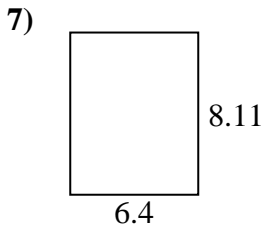
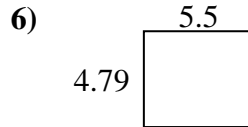
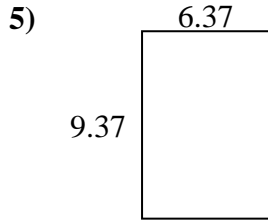
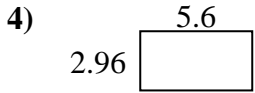
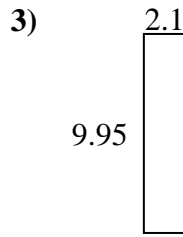
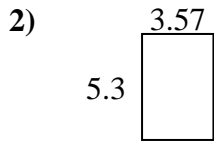
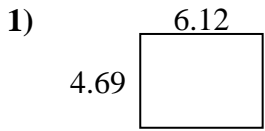


Answers

1.	<u>15.0</u>	<u>15.8</u>
2.	<u>33.8</u>	<u>24.1</u>
3.	<u>52.2</u>	<u>29.0</u>
4.	<u>31.5</u>	<u>22.7</u>
5.	<u>39.6</u>	<u>26.3</u>
6.	<u>8.5</u>	<u>12.4</u>
7.	<u>33.3</u>	<u>23.3</u>
8.	<u>94.9</u>	<u>39.0</u>
9.	<u>34.0</u>	<u>24.6</u>
10.	<u>21.1</u>	<u>18.8</u>
11.	<u>59.0</u>	<u>30.8</u>
12.	<u>49.0</u>	<u>28.0</u>
13.	<u>28.2</u>	<u>24.4</u>
14.	<u>44.8</u>	<u>27.0</u>
15.	<u>25.8</u>	<u>23.1</u>



Find the perimeter and area of each figure. Answer to the nearest 10th.

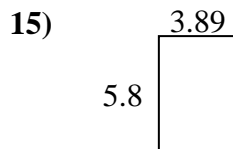
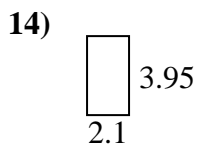
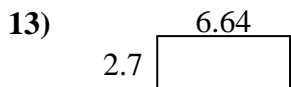
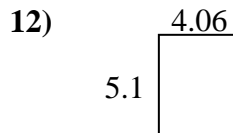
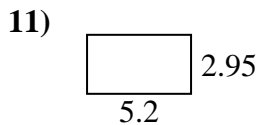
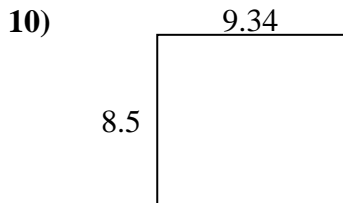
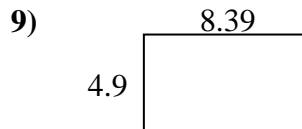
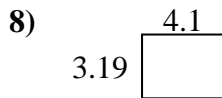
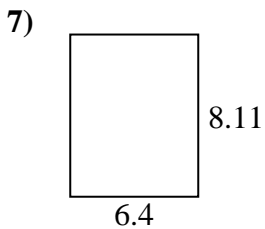
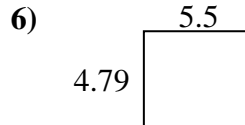
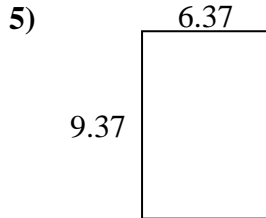
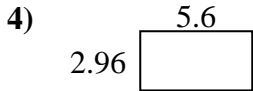
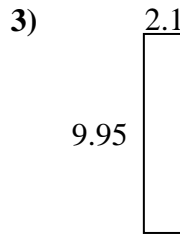
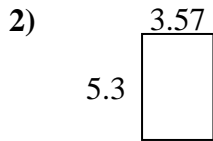
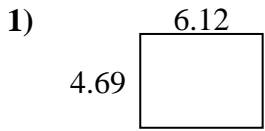


Answers

1. _____
2. _____
3. _____
4. _____
5. _____
6. _____
7. _____
8. _____
9. _____
10. _____
11. _____
12. _____
13. _____
14. _____
15. _____



Find the perimeter and area of each figure. Answer to the nearest 10th.

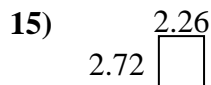
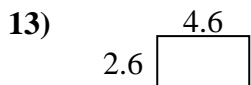
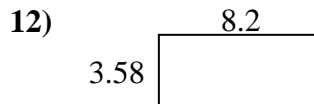
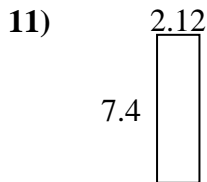
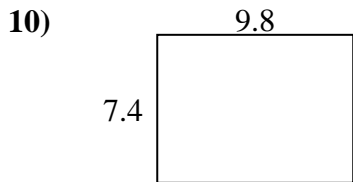
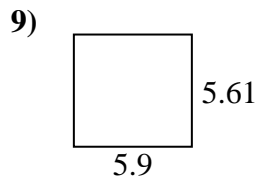
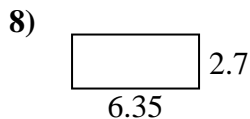
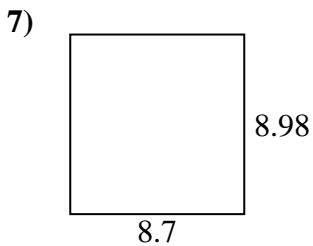
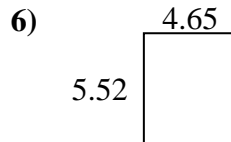
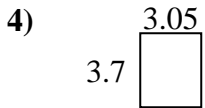
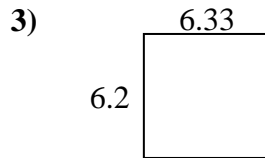
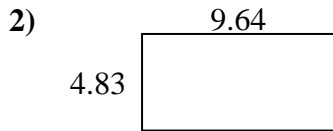
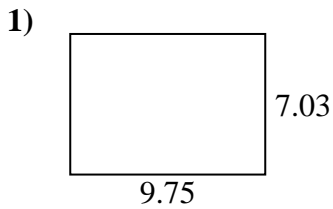


Answers

1.	<u>28.7</u>	<u>21.6</u>
2.	<u>18.9</u>	<u>17.7</u>
3.	<u>20.9</u>	<u>24.1</u>
4.	<u>16.6</u>	<u>17.1</u>
5.	<u>59.7</u>	<u>31.5</u>
6.	<u>26.3</u>	<u>20.6</u>
7.	<u>51.9</u>	<u>29.0</u>
8.	<u>13.1</u>	<u>14.6</u>
9.	<u>41.1</u>	<u>26.6</u>
10.	<u>79.4</u>	<u>35.7</u>
11.	<u>15.3</u>	<u>16.3</u>
12.	<u>20.7</u>	<u>18.3</u>
13.	<u>17.9</u>	<u>18.7</u>
14.	<u>8.3</u>	<u>12.1</u>
15.	<u>22.6</u>	<u>19.4</u>



Find the perimeter and area of each figure. Answer to the nearest 10th.

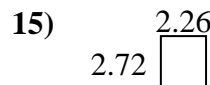
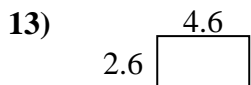
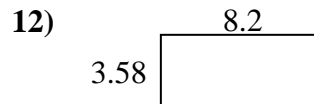
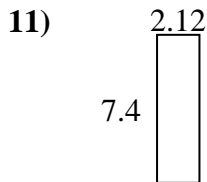
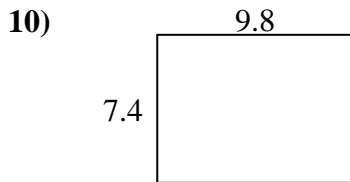
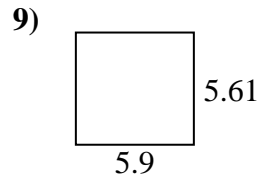
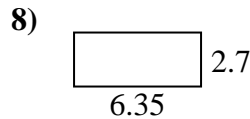
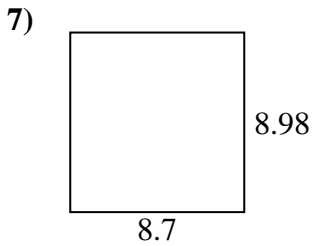
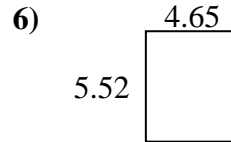
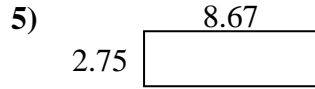
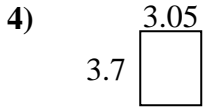
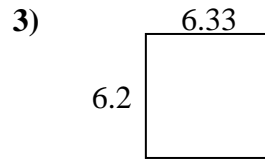
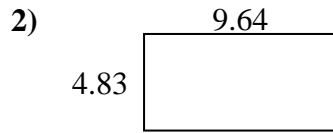
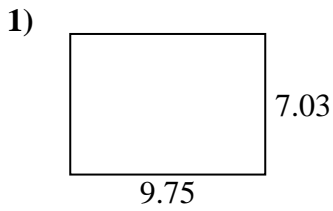


Answers

1. _____
2. _____
3. _____
4. _____
5. _____
6. _____
7. _____
8. _____
9. _____
10. _____
11. _____
12. _____
13. _____
14. _____
15. _____



Find the perimeter and area of each figure. Answer to the nearest 10th.



Answers

1.	<u>68.5</u>	<u>33.6</u>
2.	<u>46.6</u>	<u>28.9</u>
3.	<u>39.2</u>	<u>25.1</u>
4.	<u>11.3</u>	<u>13.5</u>
5.	<u>23.8</u>	<u>22.8</u>
6.	<u>25.7</u>	<u>20.3</u>
7.	<u>78.1</u>	<u>35.4</u>
8.	<u>17.1</u>	<u>18.1</u>
9.	<u>33.1</u>	<u>23.0</u>
10.	<u>72.5</u>	<u>34.4</u>
11.	<u>15.7</u>	<u>19.0</u>
12.	<u>29.4</u>	<u>23.6</u>
13.	<u>12.0</u>	<u>14.4</u>
14.	<u>66.0</u>	<u>33.0</u>
15.	<u>6.1</u>	<u>10.0</u>