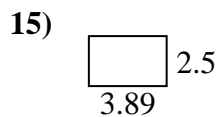
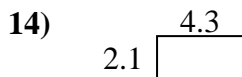
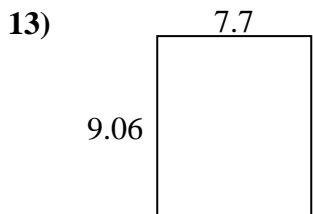
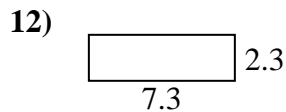
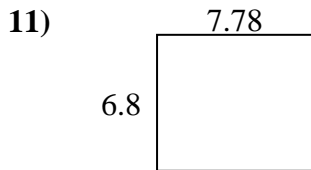
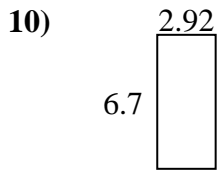
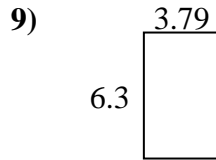
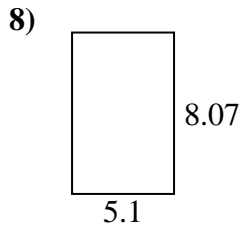
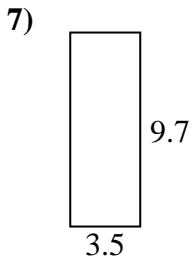
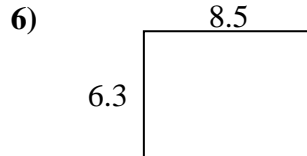
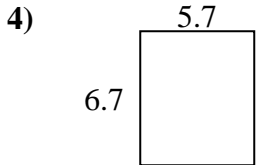
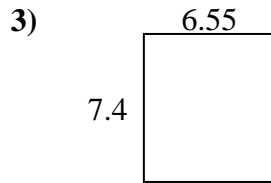
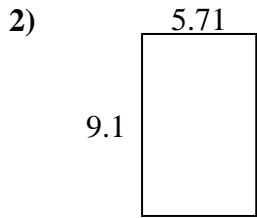
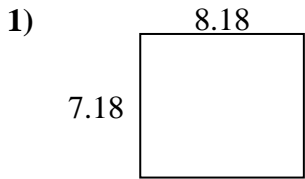




Find the perimeter and area of each figure. Answer to the nearest 10th.

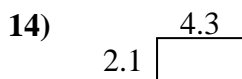
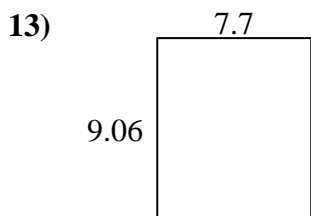
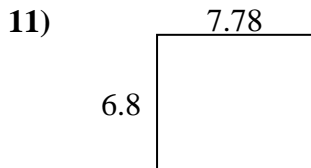
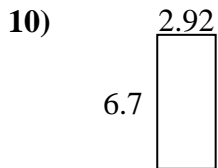
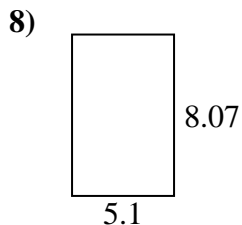
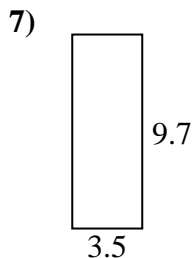
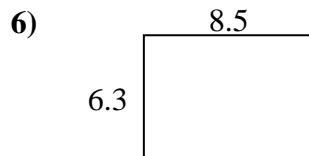
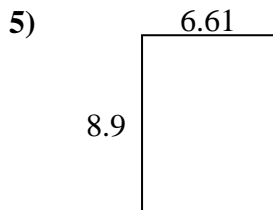
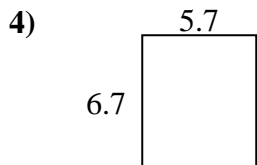
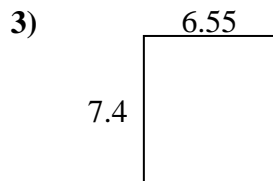
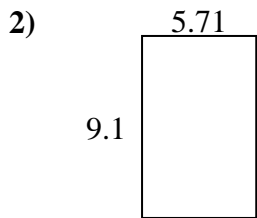
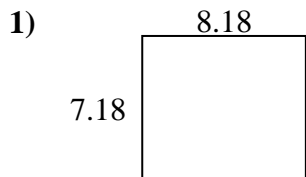


Answers

1. _____
2. _____
3. _____
4. _____
5. _____
6. _____
7. _____
8. _____
9. _____
10. _____
11. _____
12. _____
13. _____
14. _____
15. _____



Find the perimeter and area of each figure. Answer to the nearest 10th.



Answers

| | | |
|-----|-------------|-------------|
| 1. | <u>58.7</u> | <u>30.7</u> |
| 2. | <u>52.0</u> | <u>29.6</u> |
| 3. | <u>48.5</u> | <u>27.9</u> |
| 4. | <u>38.2</u> | <u>24.8</u> |
| 5. | <u>58.8</u> | <u>31.0</u> |
| 6. | <u>53.6</u> | <u>29.6</u> |
| 7. | <u>34.0</u> | <u>26.4</u> |
| 8. | <u>41.2</u> | <u>26.3</u> |
| 9. | <u>23.9</u> | <u>20.2</u> |
| 10. | <u>19.6</u> | <u>19.2</u> |
| 11. | <u>52.9</u> | <u>29.2</u> |
| 12. | <u>16.8</u> | <u>19.2</u> |
| 13. | <u>69.8</u> | <u>33.5</u> |
| 14. | <u>9.0</u> | <u>12.8</u> |
| 15. | <u>9.7</u> | <u>12.8</u> |